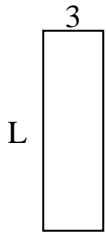




Determina el valor de 'P'.

Respuestas

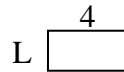
1) Área = $30u^2$



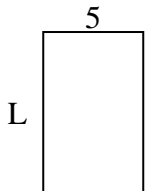
2) Área = $18u^2$



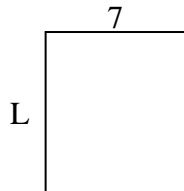
3) Área = $8u^2$



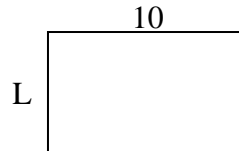
4) Área = $40u^2$



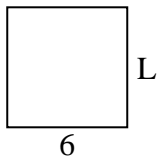
5) Área = $56u^2$



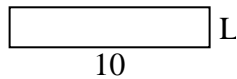
6) Área = $60u^2$



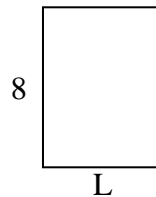
7) Área = $36u^2$



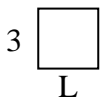
8) Área = $20u^2$



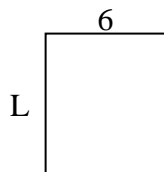
9) Área = $48u^2$



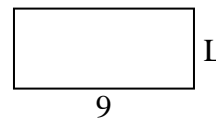
10) Área = $9u^2$



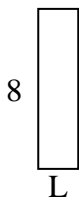
11) Área = $42u^2$



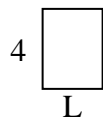
12) Área = $36u^2$



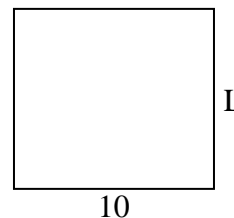
13) Área = $16u^2$



14) Área = $12u^2$



15) Área = $90u^2$

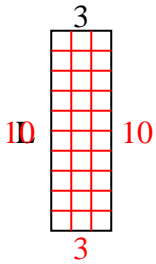


1. _____
2. _____
3. _____
4. _____
5. _____
6. _____
7. _____
8. _____
9. _____
10. _____
11. _____
12. _____
13. _____
14. _____
15. _____

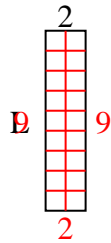


Determina el valor de 'P'.

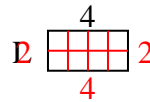
1) Área = $30u^2$



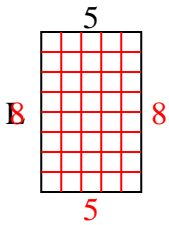
2) Área = $18u^2$



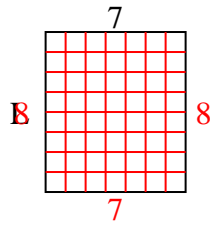
3) Área = $8u^2$



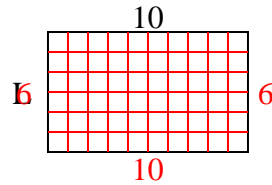
4) Área = $40u^2$



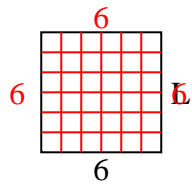
5) Área = $56u^2$



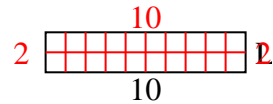
6) Área = $60u^2$



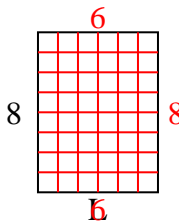
7) Área = $36u^2$



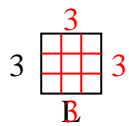
8) Área = $20u^2$



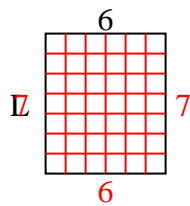
9) Área = $48u^2$



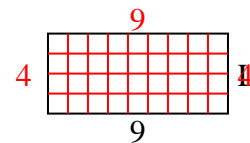
10) Área = $9u^2$



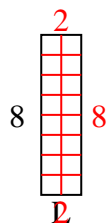
11) Área = $42u^2$



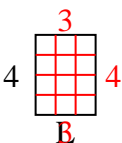
12) Área = $36u^2$



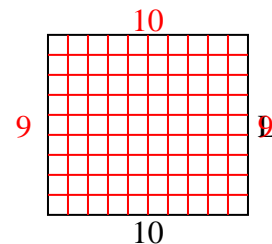
13) Área = $16u^2$



14) Área = $12u^2$



15) Área = $90u^2$



Respuestas

1. 10

2. 9

3. 2

4. 8

5. 8

6. 6

7. 6

8. 2

9. 6

10. 3

11. 7

12. 4

13. 2

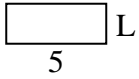
14. 3

15. 9

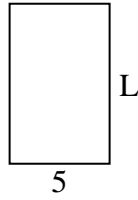


Determina el valor de 'P'.

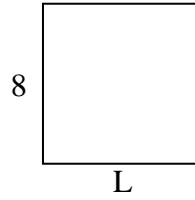
1) Área = $10u^2$



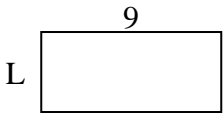
2) Área = $40u^2$



3) Área = $64u^2$



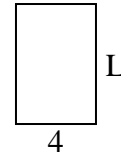
4) Área = $36u^2$




5) Área = $12u^2$




6) Área = $24u^2$



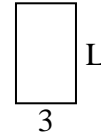
7) Área = $12u^2$



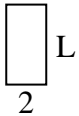
8) Área = $20u^2$



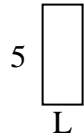
9) Área = $15u^2$



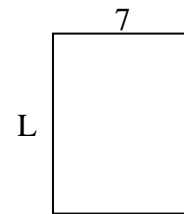
10) Área = $8u^2$



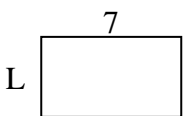
11) Área = $10u^2$



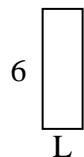
12) Área = $63u^2$



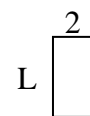
13) Área = $28u^2$



14) Área = $12u^2$



15) Área = $8u^2$



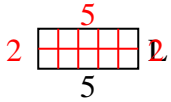
Respuestas

1. _____
2. _____
3. _____
4. _____
5. _____
6. _____
7. _____
8. _____
9. _____
10. _____
11. _____
12. _____
13. _____
14. _____
15. _____

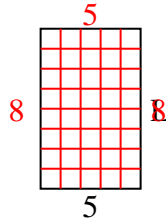


Determina el valor de 'P'.

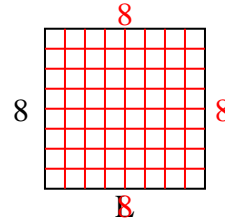
1) Área = $10u^2$



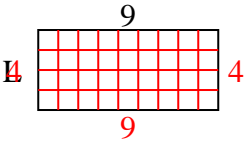
2) Área = $40u^2$



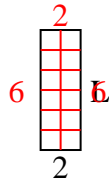
3) Área = $64u^2$



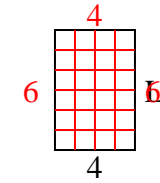
4) Área = $36u^2$



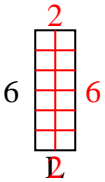
5) Área = $12u^2$



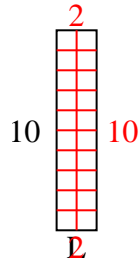
6) Área = $24u^2$



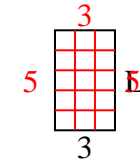
7) Área = $12u^2$



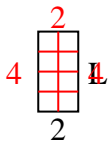
8) Área = $20u^2$



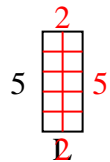
9) Área = $15u^2$



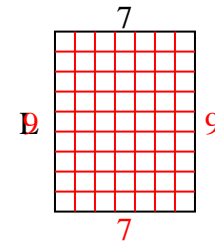
10) Área = $8u^2$



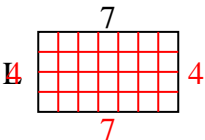
11) Área = $10u^2$



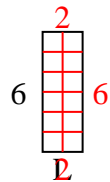
12) Área = $63u^2$



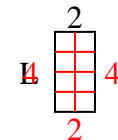
13) Área = $28u^2$



14) Área = $12u^2$



15) Área = $8u^2$



Respuestas

1. 2

2. 8

3. 8

4. 4

5. 6

6. 6

7. 2

8. 2

9. 5

10. 4

11. 2

12. 9

13. 4

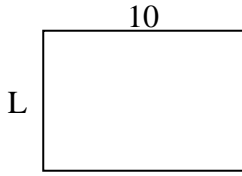
14. 2

15. 4

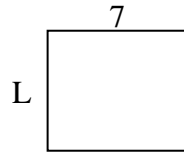


Determina el valor de 'P'.

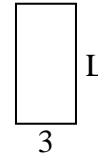
1) Área = $70u^2$



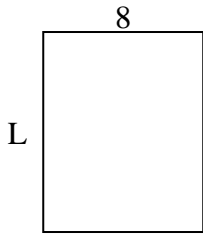
2) Área = $42u^2$



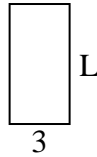
3) Área = $18u^2$



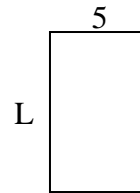
4) Área = $80u^2$



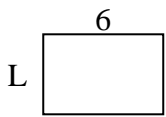
5) Área = $18u^2$



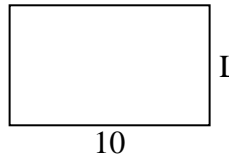
6) Área = $40u^2$



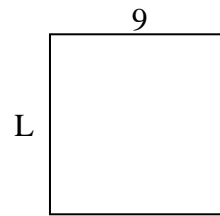
7) Área = $24u^2$



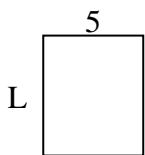
8) Área = $60u^2$



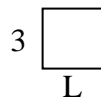
9) Área = $81u^2$



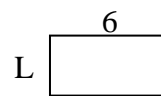
10) Área = $30u^2$



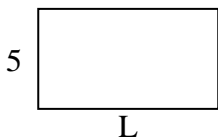
11) Área = $9u^2$



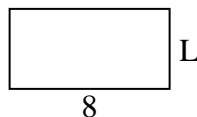
12) Área = $18u^2$



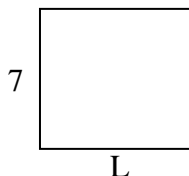
13) Área = $45u^2$



14) Área = $32u^2$



15) Área = $56u^2$



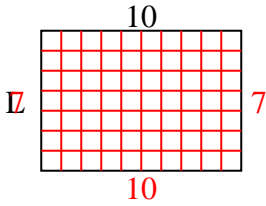
Respuestas

1. _____
2. _____
3. _____
4. _____
5. _____
6. _____
7. _____
8. _____
9. _____
10. _____
11. _____
12. _____
13. _____
14. _____
15. _____

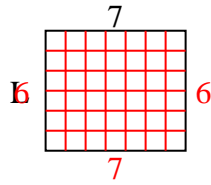


Determina el valor de 'P'.

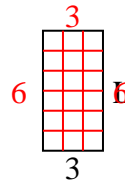
1) Área = $70u^2$



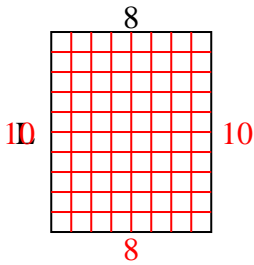
2) Área = $42u^2$



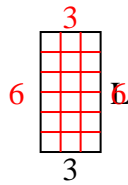
3) Área = $18u^2$



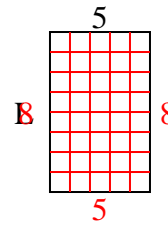
4) Área = $80u^2$



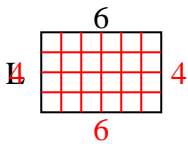
5) Área = $18u^2$



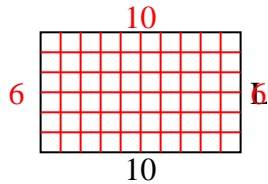
6) Área = $40u^2$



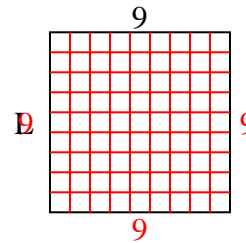
7) Área = $24u^2$



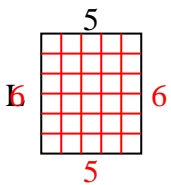
8) Área = $60u^2$



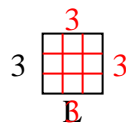
9) Área = $81u^2$



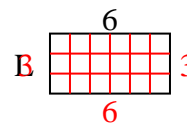
10) Área = $30u^2$



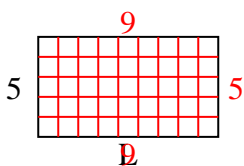
11) Área = $9u^2$



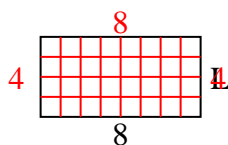
12) Área = $18u^2$



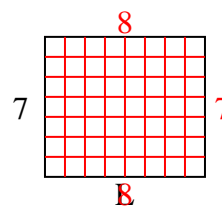
13) Área = $45u^2$



14) Área = $32u^2$



15) Área = $56u^2$



Respuestas

1. 7

2. 6

3. 6

4. 10

5. 6

6. 8

7. 4

8. 6

9. 9

10. 6

11. 3

12. 3

13. 9

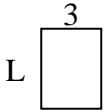
14. 4

15. 8

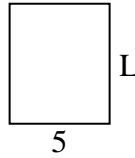


Determina el valor de 'P'.

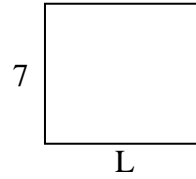
1) Área = $12u^2$



2) Área = $30u^2$



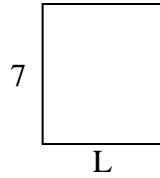
3) Área = $56u^2$



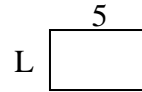
4) Área = $20u^2$




5) Área = $42u^2$



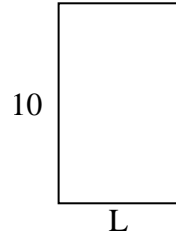
6) Área = $15u^2$



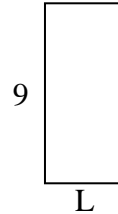
7) Área = $12u^2$



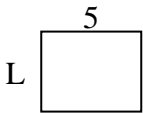
8) Área = $60u^2$



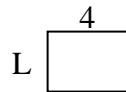
9) Área = $36u^2$



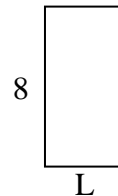
10) Área = $20u^2$



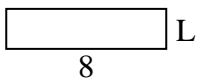
11) Área = $12u^2$



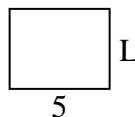
12) Área = $32u^2$



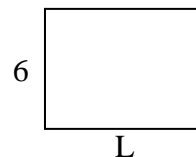
13) Área = $16u^2$



14) Área = $20u^2$



15) Área = $48u^2$



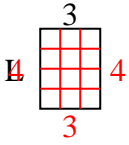
Respuestas

1. _____
2. _____
3. _____
4. _____
5. _____
6. _____
7. _____
8. _____
9. _____
10. _____
11. _____
12. _____
13. _____
14. _____
15. _____

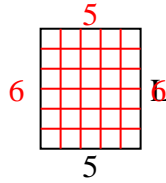


Determina el valor de 'P'.

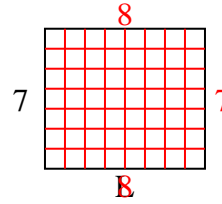
1) Área = $12u^2$



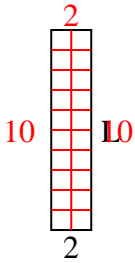
2) Área = $30u^2$



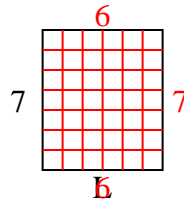
3) Área = $56u^2$



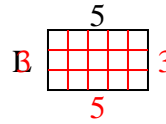
4) Área = $20u^2$



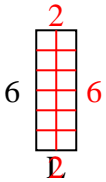
5) Área = $42u^2$



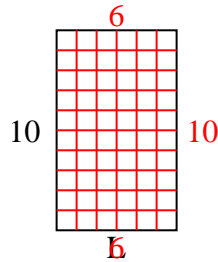
6) Área = $15u^2$



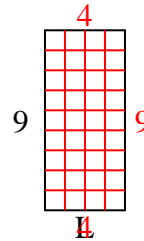
7) Área = $12u^2$



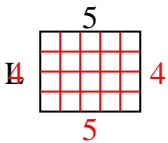
8) Área = $60u^2$



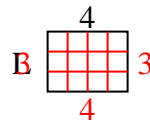
9) Área = $36u^2$



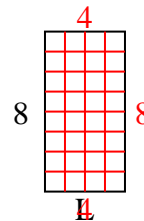
10) Área = $20u^2$



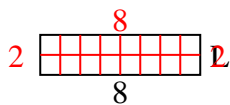
11) Área = $12u^2$



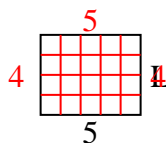
12) Área = $32u^2$



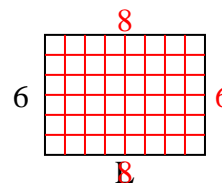
13) Área = $16u^2$



14) Área = $20u^2$



15) Área = $48u^2$



Respuestas

1. **4**

2. **6**

3. **8**

4. **10**

5. **6**

6. **3**

7. **2**

8. **6**

9. **4**

10. **4**

11. **3**

12. **4**

13. **2**

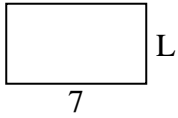
14. **4**

15. **8**

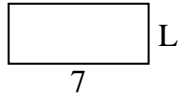


Determina el valor de 'P'.

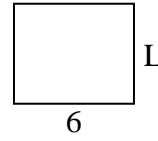
1) Área = $28u^2$



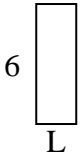
2) Área = $21u^2$



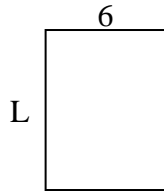
3) Área = $30u^2$



4) Área = $12u^2$




5) Área = $48u^2$



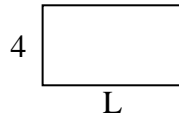
6) Área = $6u^2$



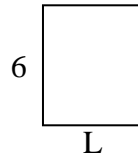
7) Área = $18u^2$



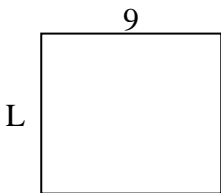
8) Área = $28u^2$



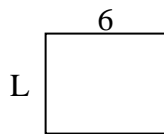
9) Área = $30u^2$



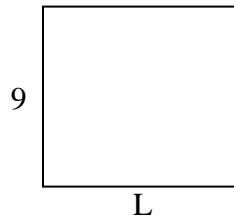
10) Área = $72u^2$



11) Área = $30u^2$



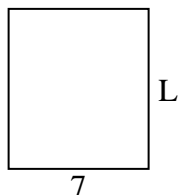
12) Área = $90u^2$




13) Área = $30u^2$



14) Área = $56u^2$



15) Área = $54u^2$



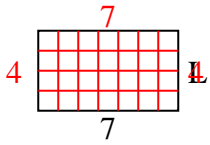
Respuestas

1. _____
2. _____
3. _____
4. _____
5. _____
6. _____
7. _____
8. _____
9. _____
10. _____
11. _____
12. _____
13. _____
14. _____
15. _____

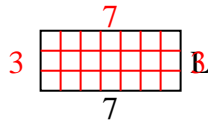


Determina el valor de 'P'.

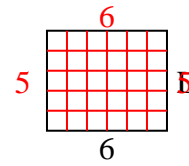
1) Área = $28u^2$



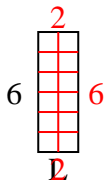
2) Área = $21u^2$



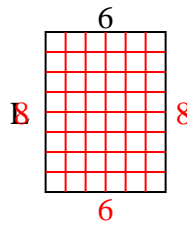
3) Área = $30u^2$



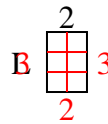
4) Área = $12u^2$



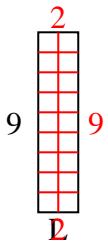
5) Área = $48u^2$



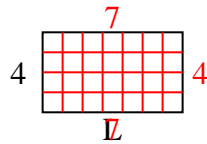
6) Área = $6u^2$



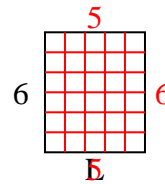
7) Área = $18u^2$



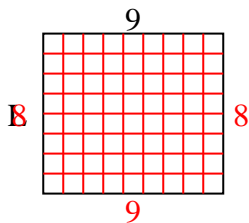
8) Área = $28u^2$



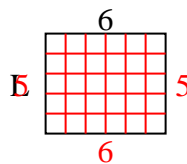
9) Área = $30u^2$



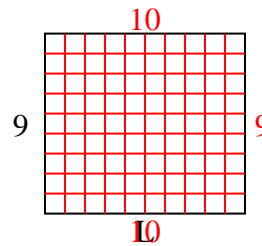
10) Área = $72u^2$



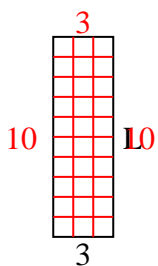
11) Área = $30u^2$



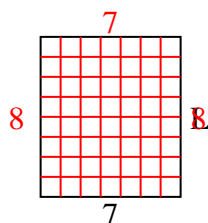
12) Área = $90u^2$



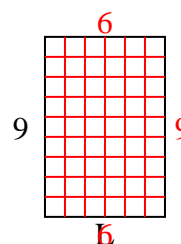
13) Área = $30u^2$



14) Área = $56u^2$



15) Área = $54u^2$



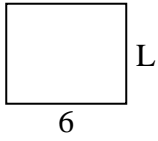
Respuestas

1. 4
2. 3
3. 5
4. 2
5. 8
6. 3
7. 2
8. 7
9. 5
10. 8
11. 5
12. 10
13. 10
14. 8
15. 6

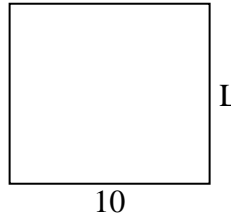


Determina el valor de 'P'.

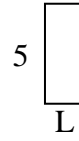
1) Área = $30u^2$



2) Área = $90u^2$



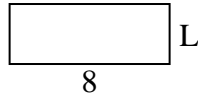
3) Área = $10u^2$



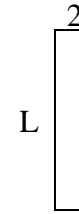
4) Área = $14u^2$



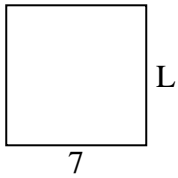
5) Área = $24u^2$



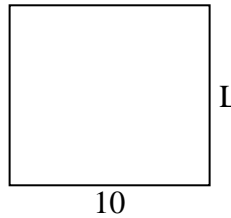
6) Área = $18u^2$



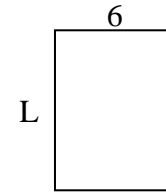
7) Área = $49u^2$



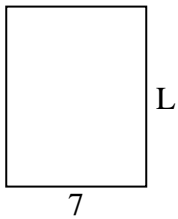
8) Área = $90u^2$



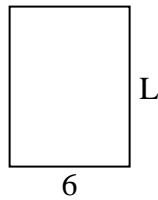
9) Área = $48u^2$



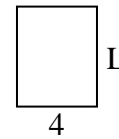
10) Área = $63u^2$



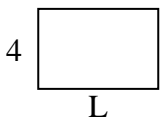
11) Área = $48u^2$



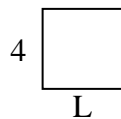
12) Área = $20u^2$



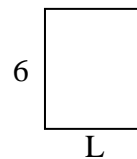
13) Área = $24u^2$



14) Área = $16u^2$



15) Área = $30u^2$



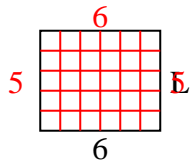
Respuestas

1. _____
2. _____
3. _____
4. _____
5. _____
6. _____
7. _____
8. _____
9. _____
10. _____
11. _____
12. _____
13. _____
14. _____
15. _____

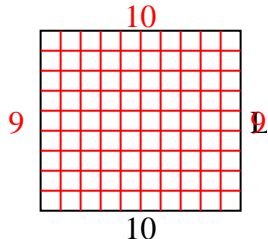


Determina el valor de 'P'.

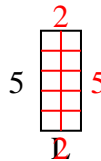
1) Área = $30u^2$



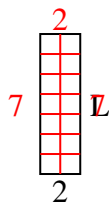
2) Área = $90u^2$



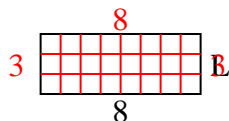
3) Área = $10u^2$



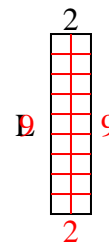
4) Área = $14u^2$



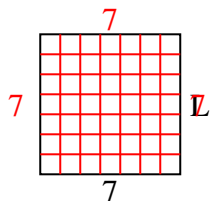
5) Área = $24u^2$



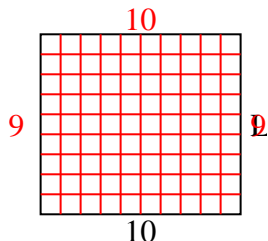
6) Área = $18u^2$



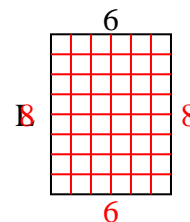
7) Área = $49u^2$



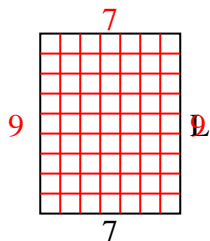
8) Área = $90u^2$



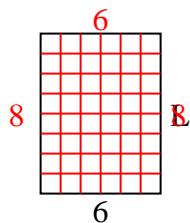
9) Área = $48u^2$



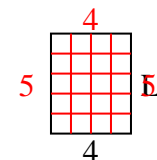
10) Área = $63u^2$



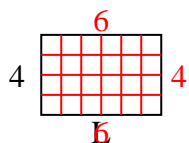
11) Área = $48u^2$



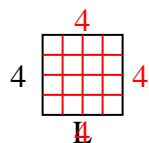
12) Área = $20u^2$



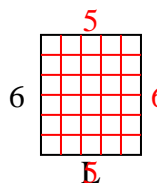
13) Área = $24u^2$



14) Área = $16u^2$



15) Área = $30u^2$



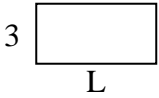
Respuestas

1. 5
2. 9
3. 2
4. 7
5. 3
6. 9
7. 7
8. 9
9. 8
10. 9
11. 8
12. 5
13. 6
14. 4
15. 5

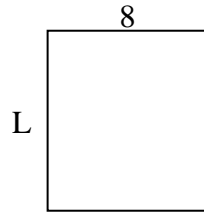


Determina el valor de 'P'.

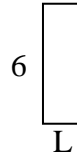
1) Área = $18u^2$



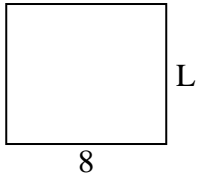
2) Área = $72u^2$



3) Área = $12u^2$



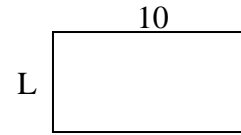
4) Área = $56u^2$



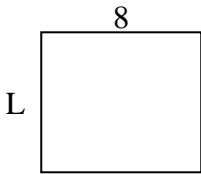
5) Área = $6u^2$



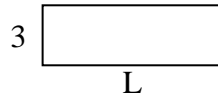
6) Área = $50u^2$



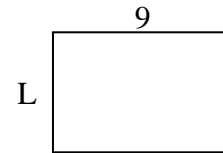
7) Área = $56u^2$



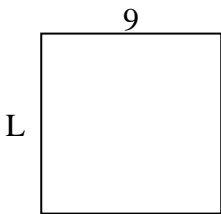
8) Área = $27u^2$



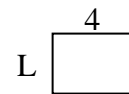
9) Área = $54u^2$



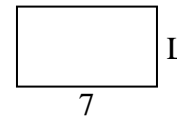
10) Área = $81u^2$



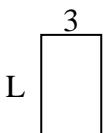
11) Área = $12u^2$




12) Área = $28u^2$



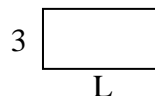
13) Área = $15u^2$



14) Área = $20u^2$



15) Área = $18u^2$



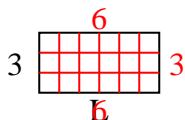
Respuestas

1. _____
2. _____
3. _____
4. _____
5. _____
6. _____
7. _____
8. _____
9. _____
10. _____
11. _____
12. _____
13. _____
14. _____
15. _____

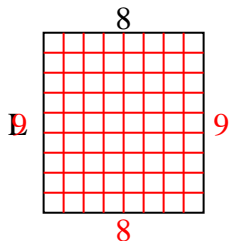


Determina el valor de 'P'.

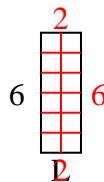
1) Área = $18u^2$



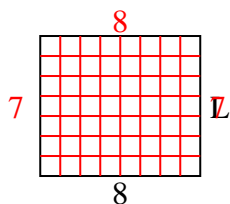
2) Área = $72u^2$



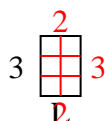
3) Área = $12u^2$



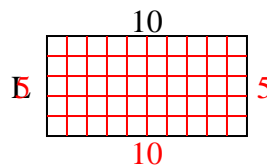
4) Área = $56u^2$



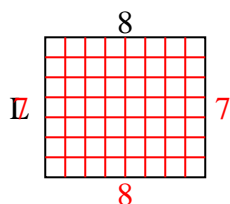
5) Área = $6u^2$



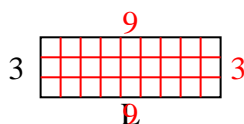
6) Área = $50u^2$



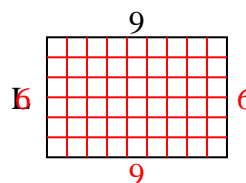
7) Área = $56u^2$



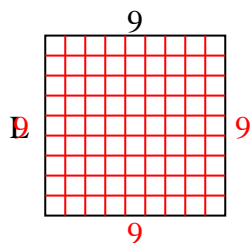
8) Área = $27u^2$



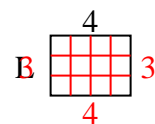
9) Área = $54u^2$



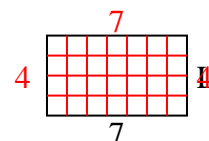
10) Área = $81u^2$



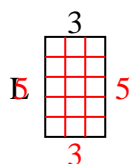
11) Área = $12u^2$



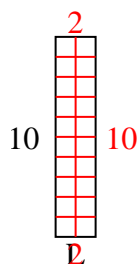
12) Área = $28u^2$



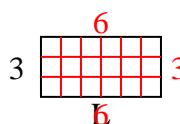
13) Área = $15u^2$



14) Área = $20u^2$



15) Área = $18u^2$



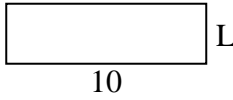
Respuestas

1. 6
2. 9
3. 2
4. 7
5. 2
6. 5
7. 7
8. 9
9. 6
10. 9
11. 3
12. 4
13. 5
14. 2
15. 6

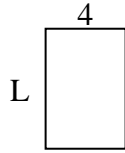


Determina el valor de 'P'.

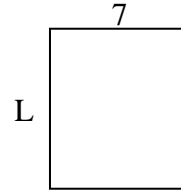
1) Área = $30u^2$



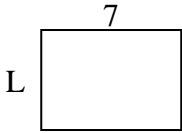
2) Área = $24u^2$



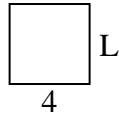
3) Área = $56u^2$



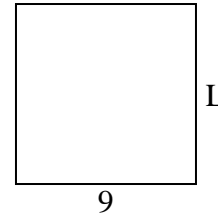
4) Área = $35u^2$



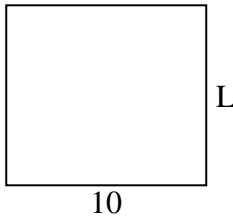
5) Área = $16u^2$



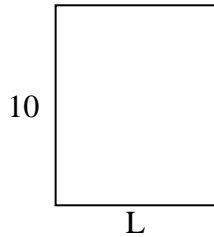
6) Área = $81u^2$



7) Área = $90u^2$




8) Área = $80u^2$



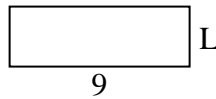
9) Área = $27u^2$




10) Área = $32u^2$



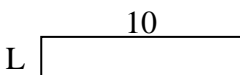
11) Área = $27u^2$



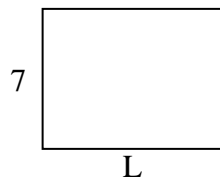
12) Área = $14u^2$



13) Área = $20u^2$



14) Área = $63u^2$



15) Área = $18u^2$



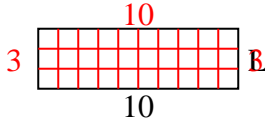
Respuestas

1. _____
2. _____
3. _____
4. _____
5. _____
6. _____
7. _____
8. _____
9. _____
10. _____
11. _____
12. _____
13. _____
14. _____
15. _____

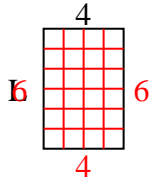


Determina el valor de 'P'.

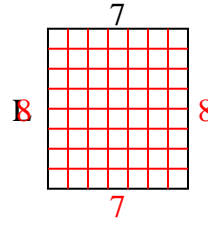
1) Área = $30u^2$



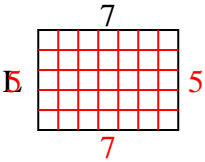
2) Área = $24u^2$



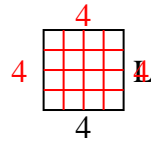
3) Área = $56u^2$



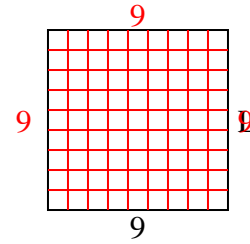
4) Área = $35u^2$



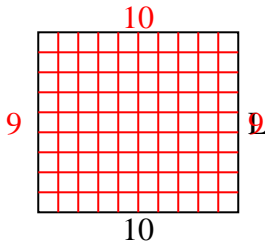
5) Área = $16u^2$



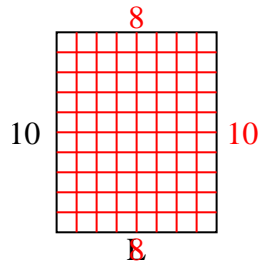
6) Área = $81u^2$



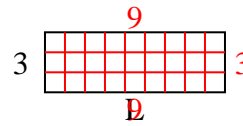
7) Área = $90u^2$



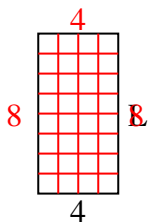
8) Área = $80u^2$



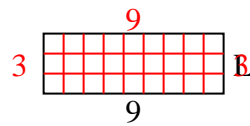
9) Área = $27u^2$



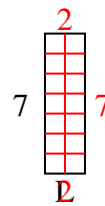
10) Área = $32u^2$



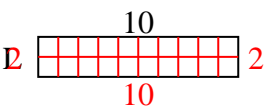
11) Área = $27u^2$



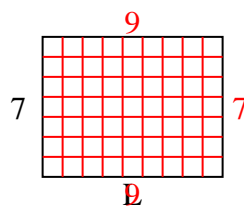
12) Área = $14u^2$



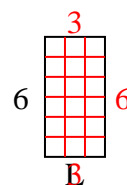
13) Área = $20u^2$



14) Área = $63u^2$



15) Área = $18u^2$



Respuestas

1. 3

2. 6

3. 8

4. 5

5. 4

6. 9

7. 9

8. 8

9. 9

10. 8

11. 3

12. 2

13. 2

14. 9

15. 3

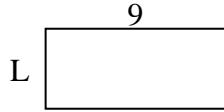


Determina el valor de 'P'.

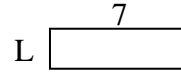
1) Área = $8u^2$



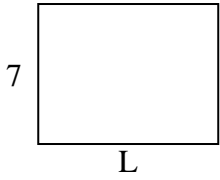
2) Área = $36u^2$



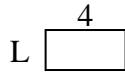
3) Área = $14u^2$



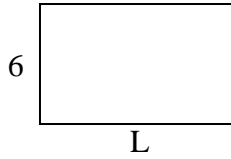
4) Área = $63u^2$



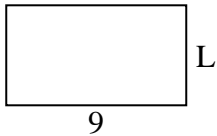
5) Área = $8u^2$



6) Área = $60u^2$



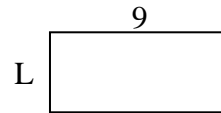
7) Área = $45u^2$



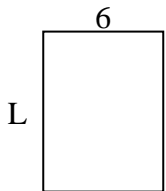
8) Área = $20u^2$



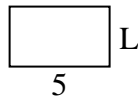
9) Área = $36u^2$



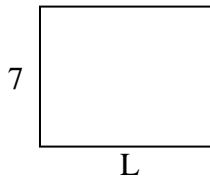
10) Área = $48u^2$



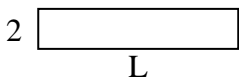
11) Área = $15u^2$



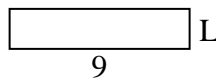
12) Área = $63u^2$



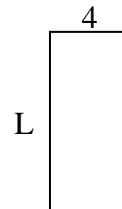
13) Área = $20u^2$



14) Área = $18u^2$



15) Área = $36u^2$



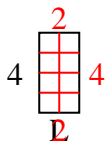
Respuestas

1. _____
2. _____
3. _____
4. _____
5. _____
6. _____
7. _____
8. _____
9. _____
10. _____
11. _____
12. _____
13. _____
14. _____
15. _____

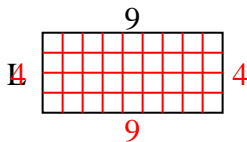


Determina el valor de 'P'.

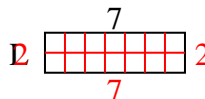
1) Área = $8u^2$



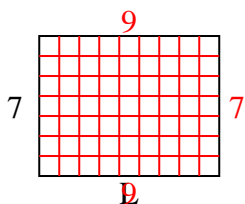
2) Área = $36u^2$



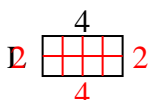
3) Área = $14u^2$



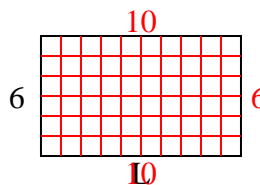
4) Área = $63u^2$



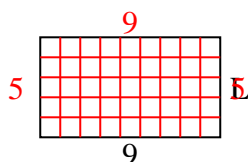
5) Área = $8u^2$



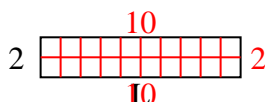
6) Área = $60u^2$



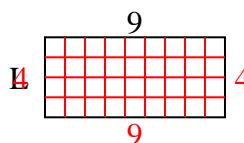
7) Área = $45u^2$



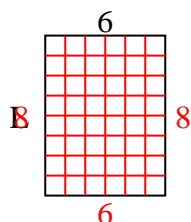
8) Área = $20u^2$



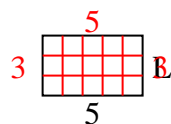
9) Área = $36u^2$



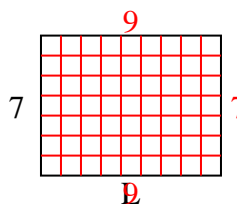
10) Área = $48u^2$



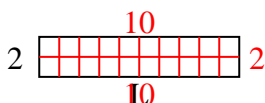
11) Área = $15u^2$



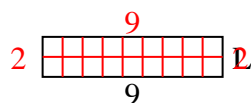
12) Área = $63u^2$



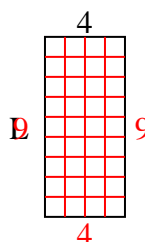
13) Área = $20u^2$



14) Área = $18u^2$



15) Área = $36u^2$



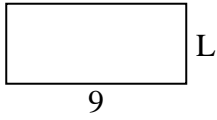
Respuestas

1. 2
2. 4
3. 2
4. 9
5. 2
6. 10
7. 5
8. 10
9. 4
10. 8
11. 3
12. 9
13. 10
14. 2
15. 9

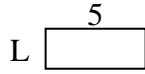


Determina el valor de 'P'.


1) Área = $36u^2$



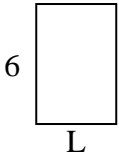
2) Área = $10u^2$



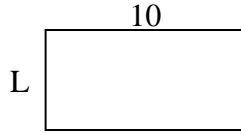
3) Área = $14u^2$



4) Área = $24u^2$



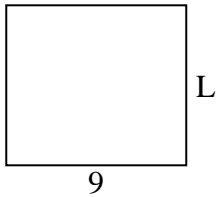
5) Área = $50u^2$



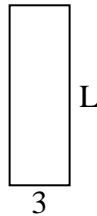
6) Área = $6u^2$



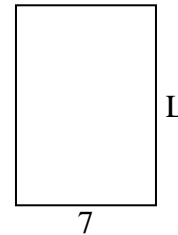
7) Área = $72u^2$



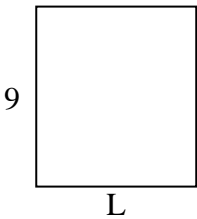
8) Área = $27u^2$



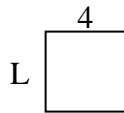
9) Área = $70u^2$



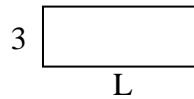
10) Área = $72u^2$




11) Área = $16u^2$



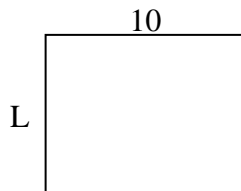
12) Área = $24u^2$




13) Área = $14u^2$



14) Área = $80u^2$



15) Área = $27u^2$



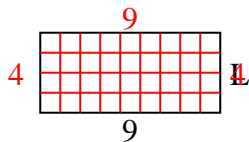
Respuestas

1. _____
2. _____
3. _____
4. _____
5. _____
6. _____
7. _____
8. _____
9. _____
10. _____
11. _____
12. _____
13. _____
14. _____
15. _____

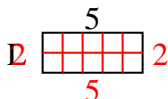


Determina el valor de 'P'.

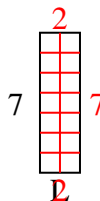
1) Área = $36u^2$



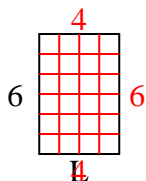
2) Área = $10u^2$



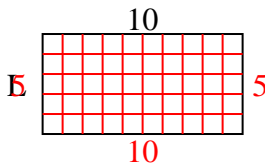
3) Área = $14u^2$



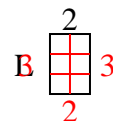
4) Área = $24u^2$



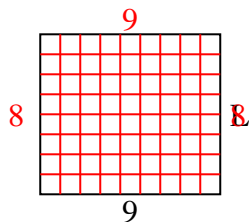
5) Área = $50u^2$



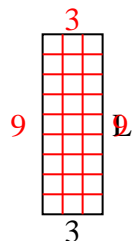
6) Área = $6u^2$



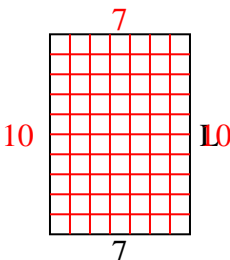
7) Área = $72u^2$



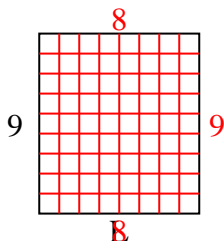
8) Área = $27u^2$



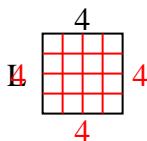
9) Área = $70u^2$



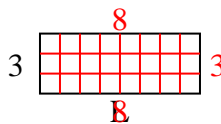
10) Área = $72u^2$



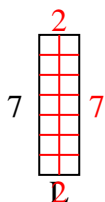
11) Área = $16u^2$



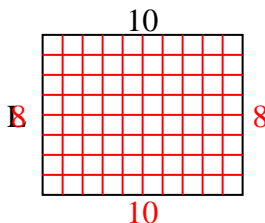
12) Área = $24u^2$



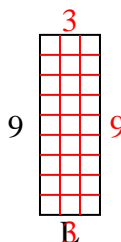
13) Área = $14u^2$



14) Área = $80u^2$



15) Área = $27u^2$



Respuestas

1. 4
2. 2
3. 2
4. 4
5. 5
6. 3
7. 8
8. 9
9. 10
10. 8
11. 4
12. 8
13. 2
14. 8
15. 3