




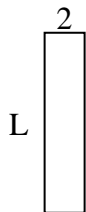
Determina el valor de 'L'. Las longitudes están en cm (no a escala).

Respuestas

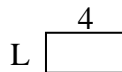
1) perímetro = 26



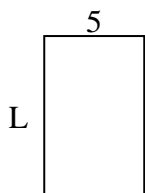
2) perímetro = 22



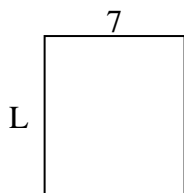
3) perímetro = 12



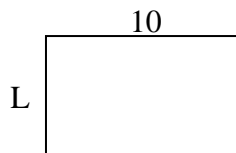
4) perímetro = 26



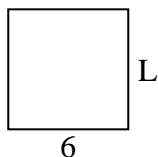
5) perímetro = 30



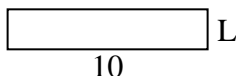
6) perímetro = 32



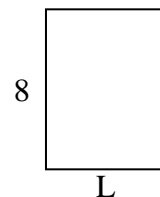
7) perímetro = 24



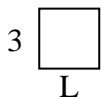
8) perímetro = 24



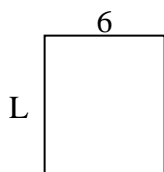
9) perímetro = 28



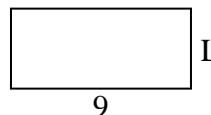
10) perímetro = 12



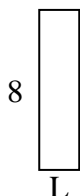
11) perímetro = 26



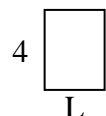
12) perímetro = 26



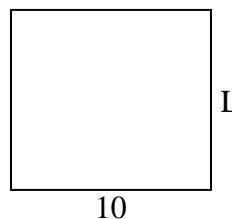
13) perímetro = 20



14) perímetro = 14



15) perímetro = 38



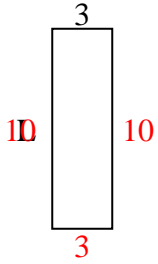
1. _____
2. _____
3. _____
4. _____
5. _____
6. _____
7. _____
8. _____
9. _____
10. _____
11. _____
12. _____
13. _____
14. _____
15. _____



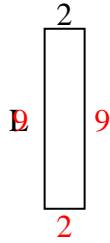
Determina el valor de 'L'. Las longitudes están en cm (no a escala).

Respuestas

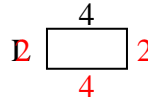
1) perímetro = 26



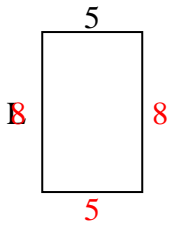
2) perímetro = 22



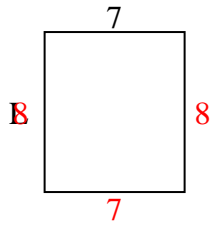
3) perímetro = 12



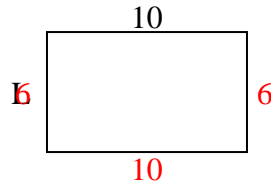
4) perímetro = 26



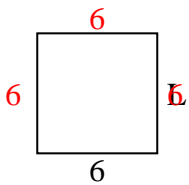
5) perímetro = 30



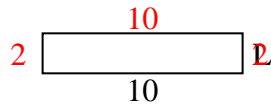
6) perímetro = 32



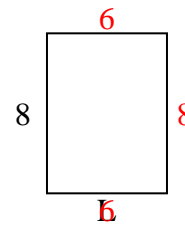
7) perímetro = 24



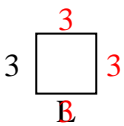
8) perímetro = 24



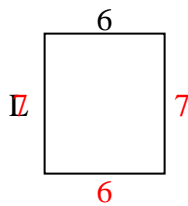
9) perímetro = 28



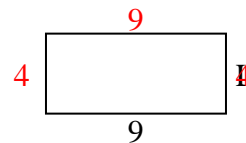
10) perímetro = 12



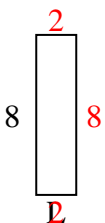
11) perímetro = 26



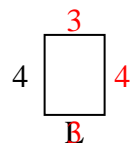
12) perímetro = 26



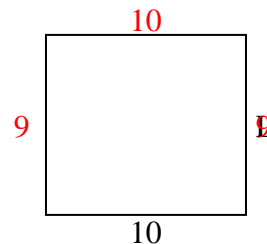
13) perímetro = 20



14) perímetro = 14



15) perímetro = 38

1. **10 cm**2. **9 cm**3. **2 cm**4. **8 cm**5. **8 cm**6. **6 cm**7. **6 cm**8. **2 cm**9. **6 cm**10. **3 cm**11. **7 cm**12. **4 cm**13. **2 cm**14. **3 cm**15. **9 cm**