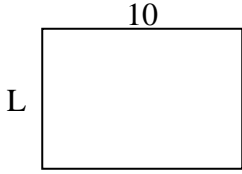




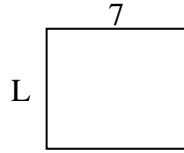
Determina el valor de 'L'. Las longitudes están en cm (no a escala).

Respuestas

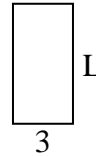
1) perímetro = 34



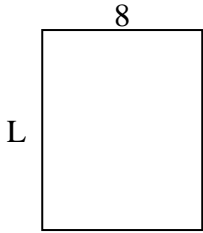
2) perímetro = 26



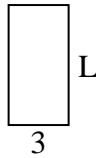
3) perímetro = 18



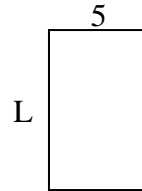
4) perímetro = 36



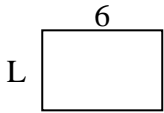
5) perímetro = 18



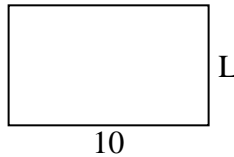
6) perímetro = 26



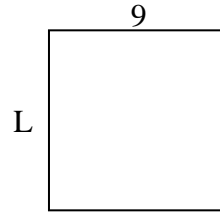
7) perímetro = 20



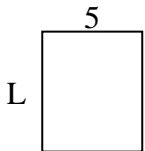
8) perímetro = 32



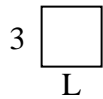
9) perímetro = 36



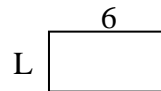
10) perímetro = 22



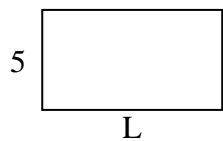
11) perímetro = 12




12) perímetro = 18



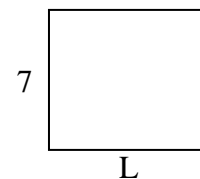
13) perímetro = 28



14) perímetro = 24



15) perímetro = 30



1. _____

2. _____

3. _____

4. _____

5. _____

6. _____

7. _____

8. _____

9. _____

10. _____

11. _____

12. _____

13. _____

14. _____

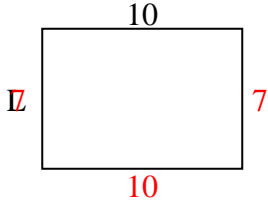
15. _____



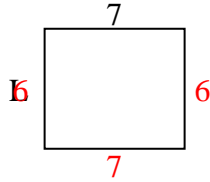
Determina el valor de 'L'. Las longitudes están en cm (no a escala).

Respuestas

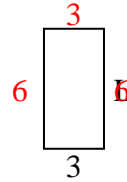
1) perímetro = 34



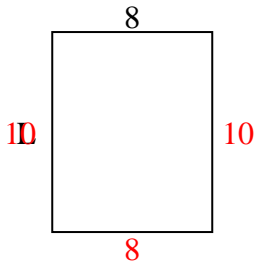
2) perímetro = 26



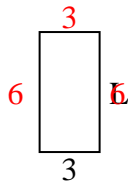
3) perímetro = 18



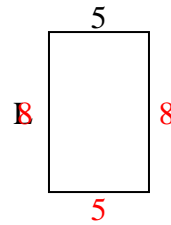
4) perímetro = 36



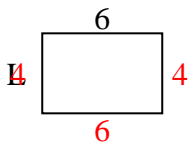
5) perímetro = 18



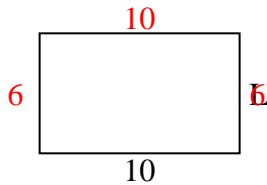
6) perímetro = 26



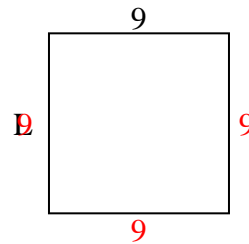
7) perímetro = 20



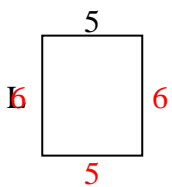
8) perímetro = 32



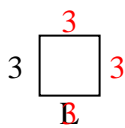
9) perímetro = 36



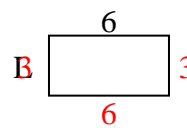
10) perímetro = 22



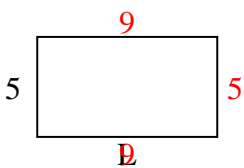
11) perímetro = 12



12) perímetro = 18



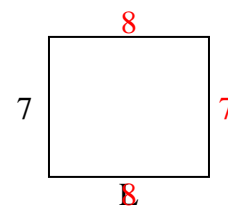
13) perímetro = 28



14) perímetro = 24



15) perímetro = 30

1. **7 cm**2. **6 cm**3. **6 cm**4. **10 cm**5. **6 cm**6. **8 cm**7. **4 cm**8. **6 cm**9. **9 cm**10. **6 cm**11. **3 cm**12. **3 cm**13. **9 cm**14. **4 cm**15. **8 cm**