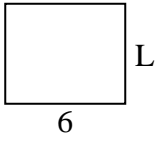




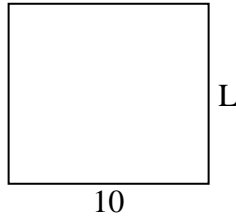
Determina el valor de 'L'. Las longitudes están en cm (no a escala).

Respuestas

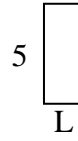
1) perímetro = 22



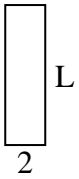
2) perímetro = 38



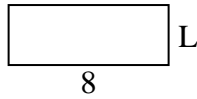
3) perímetro = 14



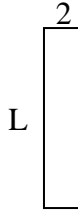
4) perímetro = 18



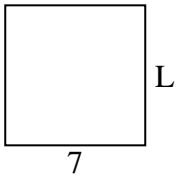
5) perímetro = 22



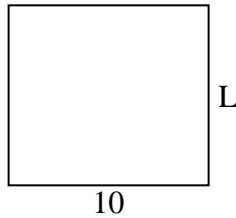
6) perímetro = 22



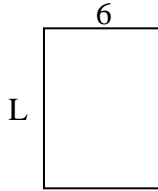
7) perímetro = 28



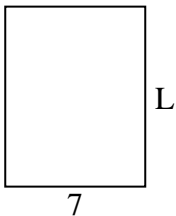
8) perímetro = 38



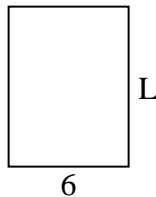
9) perímetro = 28



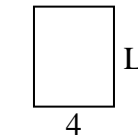
10) perímetro = 32



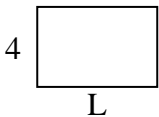
11) perímetro = 28



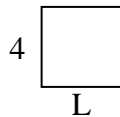
12) perímetro = 18



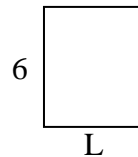
13) perímetro = 20



14) perímetro = 16



15) perímetro = 22



1. _____

2. _____

3. _____

4. _____

5. _____

6. _____

7. _____

8. _____

9. _____

10. _____

11. _____

12. _____

13. _____

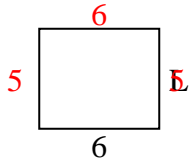
14. _____

15. _____

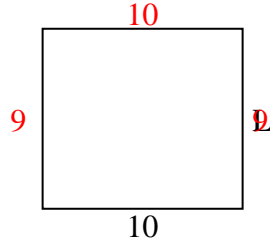


Determina el valor de 'L'. Las longitudes están en cm (no a escala).

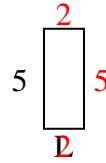
1) perímetro = 22



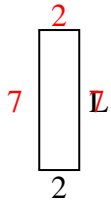
2) perímetro = 38



3) perímetro = 14



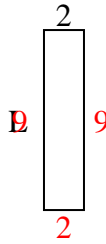
4) perímetro = 18



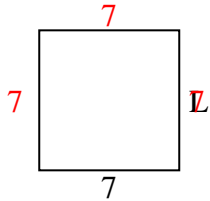
5) perímetro = 22



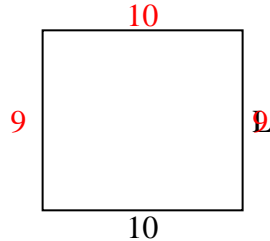
6) perímetro = 22



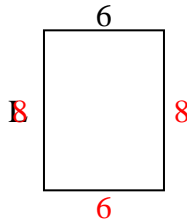
7) perímetro = 28



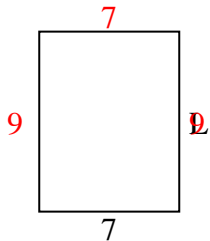
8) perímetro = 38



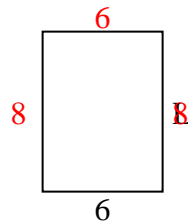
9) perímetro = 28



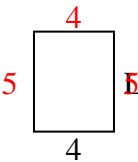
10) perímetro = 32



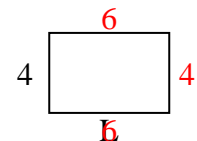
11) perímetro = 28



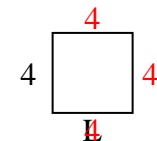
12) perímetro = 18



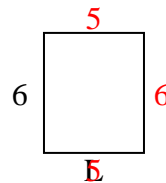
13) perímetro = 20



14) perímetro = 16



15) perímetro = 22

**Respuestas**1. **5 cm**2. **9 cm**3. **2 cm**4. **7 cm**5. **3 cm**6. **9 cm**7. **7 cm**8. **9 cm**9. **8 cm**10. **9 cm**11. **8 cm**12. **5 cm**13. **6 cm**14. **4 cm**15. **5 cm**