



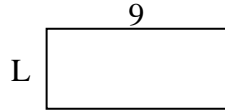
Determina el valor de 'L'. Las longitudes están en cm (no a escala).

Respuestas

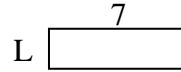
1) perímetro = 12



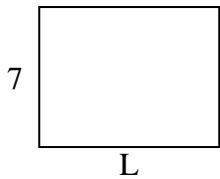
2) perímetro = 26



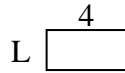
3) perímetro = 18



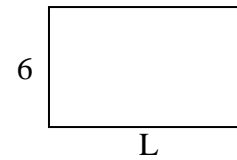
4) perímetro = 32



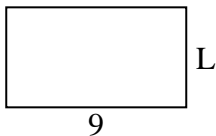
5) perímetro = 12



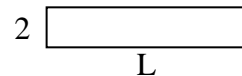
6) perímetro = 32



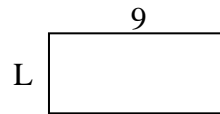
7) perímetro = 28



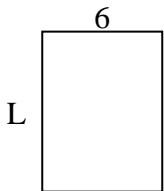
8) perímetro = 24



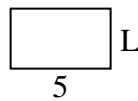
9) perímetro = 26



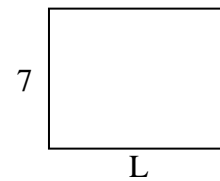
10) perímetro = 28



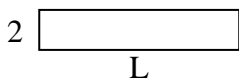
11) perímetro = 16



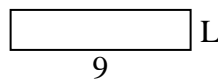
12) perímetro = 32



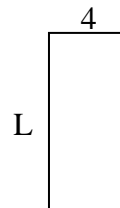
13) perímetro = 24



14) perímetro = 22



15) perímetro = 26



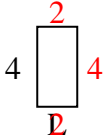
1. _____
2. _____
3. _____
4. _____
5. _____
6. _____
7. _____
8. _____
9. _____
10. _____
11. _____
12. _____
13. _____
14. _____
15. _____



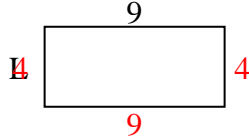
Determina el valor de 'L'. Las longitudes están en cm (no a escala).

Respuestas

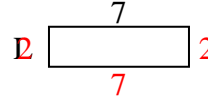
1) perímetro = 12



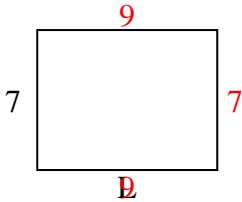
2) perímetro = 26



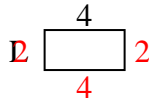
3) perímetro = 18



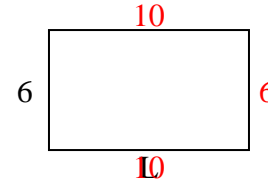
4) perímetro = 32



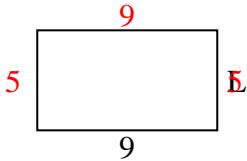
5) perímetro = 12



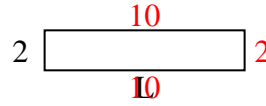
6) perímetro = 32



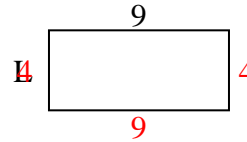
7) perímetro = 28



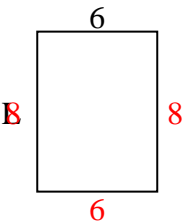
8) perímetro = 24



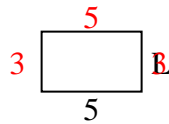
9) perímetro = 26



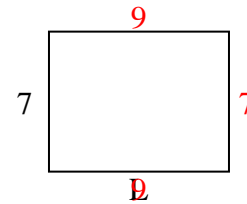
10) perímetro = 28



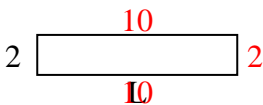
11) perímetro = 16



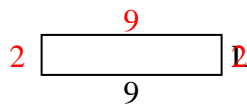
12) perímetro = 32



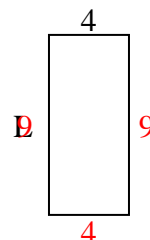
13) perímetro = 24



14) perímetro = 22



15) perímetro = 26



1. 2 cm
2. 4 cm
3. 2 cm
4. 9 cm
5. 2 cm
6. 10 cm
7. 5 cm
8. 10 cm
9. 4 cm
10. 8 cm
11. 3 cm
12. 9 cm
13. 10 cm
14. 2 cm
15. 9 cm