




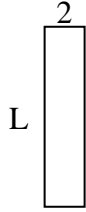
Determina el valor de 'L'. Las longitudes están en cm (no a escala).

Respuestas

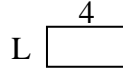
1) perímetro = 26



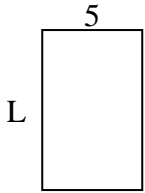
2) perímetro = 22



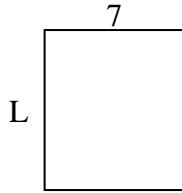
3) perímetro = 12



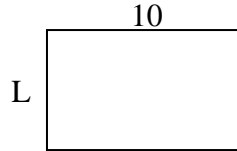
4) perímetro = 26



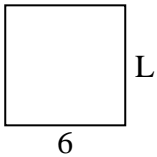
5) perímetro = 30



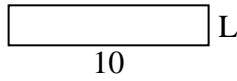
6) perímetro = 32



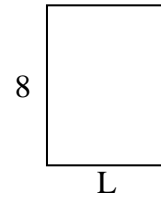
7) perímetro = 24



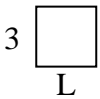
8) perímetro = 24



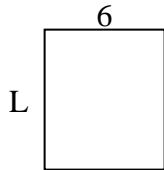
9) perímetro = 28



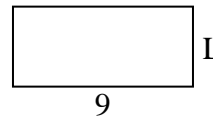
10) perímetro = 12




11) perímetro = 26



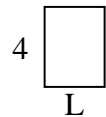
12) perímetro = 26



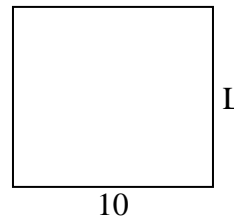
13) perímetro = 20



14) perímetro = 14



15) perímetro = 38



1. _____

2. _____

3. _____

4. _____

5. _____

6. _____

7. _____

8. _____

9. _____

10. _____

11. _____

12. _____

13. _____

14. _____

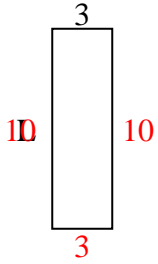
15. _____



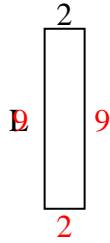
Determina el valor de 'L'. Las longitudes están en cm (no a escala).

Respuestas

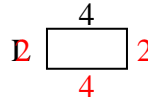
1) perímetro = 26



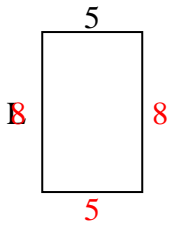
2) perímetro = 22



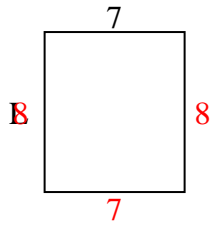
3) perímetro = 12



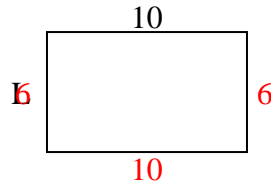
4) perímetro = 26



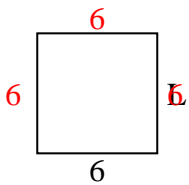
5) perímetro = 30



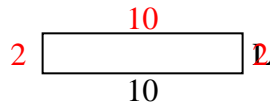
6) perímetro = 32



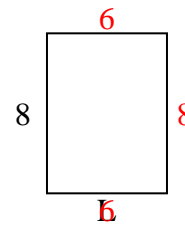
7) perímetro = 24



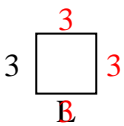
8) perímetro = 24



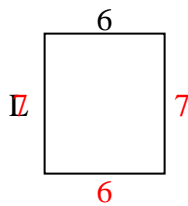
9) perímetro = 28



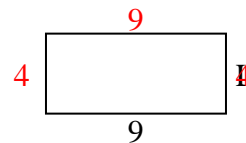
10) perímetro = 12



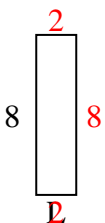
11) perímetro = 26



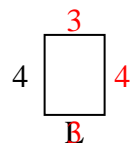
12) perímetro = 26



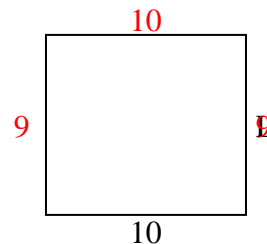
13) perímetro = 20



14) perímetro = 14



15) perímetro = 38

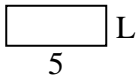
1. **10 cm**2. **9 cm**3. **2 cm**4. **8 cm**5. **8 cm**6. **6 cm**7. **6 cm**8. **2 cm**9. **6 cm**10. **3 cm**11. **7 cm**12. **4 cm**13. **2 cm**14. **3 cm**15. **9 cm**



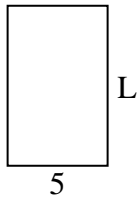
Determina el valor de 'L'. Las longitudes están en cm (no a escala).

Respuestas

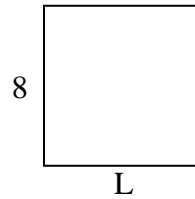
1) perímetro = 14



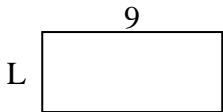
2) perímetro = 26



3) perímetro = 32



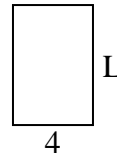
4) perímetro = 26



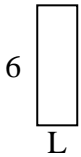
5) perímetro = 16




6) perímetro = 20



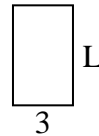
7) perímetro = 16



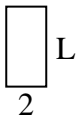
8) perímetro = 24



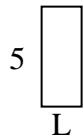
9) perímetro = 16



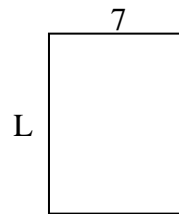
10) perímetro = 12



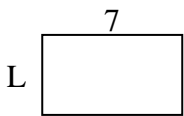
11) perímetro = 14



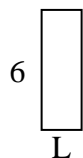
12) perímetro = 32



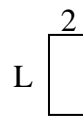
13) perímetro = 22



14) perímetro = 16



15) perímetro = 12



1. _____

2. _____

3. _____

4. _____

5. _____

6. _____

7. _____

8. _____

9. _____

10. _____

11. _____

12. _____

13. _____

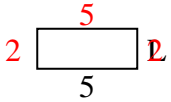
14. _____

15. _____

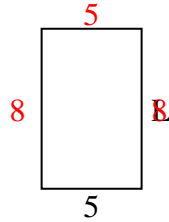


Determina el valor de 'L'. Las longitudes están en cm (no a escala).

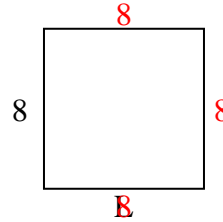
1) perímetro = 14



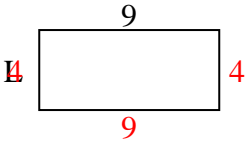
2) perímetro = 26



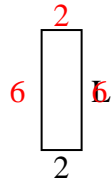
3) perímetro = 32



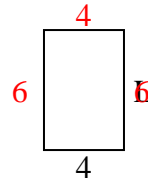
4) perímetro = 26



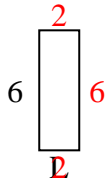
5) perímetro = 16



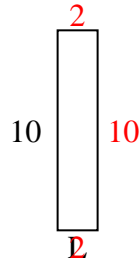
6) perímetro = 20



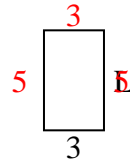
7) perímetro = 16



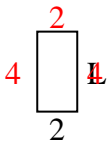
8) perímetro = 24



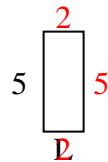
9) perímetro = 16



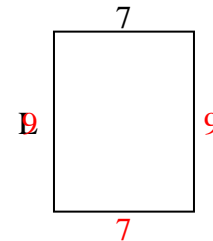
10) perímetro = 12



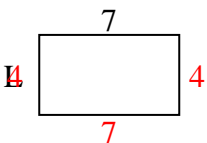
11) perímetro = 14



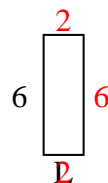
12) perímetro = 32



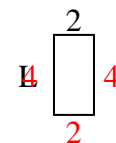
13) perímetro = 22



14) perímetro = 16



15) perímetro = 12

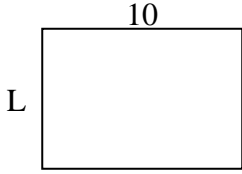
**Respuestas**1. **2 cm**2. **8 cm**3. **8 cm**4. **4 cm**5. **6 cm**6. **6 cm**7. **2 cm**8. **2 cm**9. **5 cm**10. **4 cm**11. **2 cm**12. **9 cm**13. **4 cm**14. **2 cm**15. **4 cm**



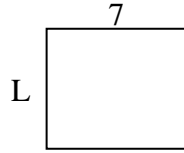
Determina el valor de 'L'. Las longitudes están en cm (no a escala).

Respuestas

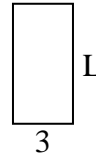
1) perímetro = 34



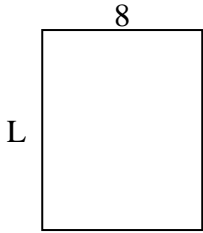
2) perímetro = 26



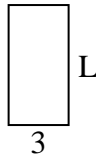
3) perímetro = 18



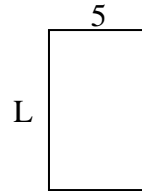
4) perímetro = 36



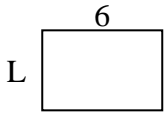
5) perímetro = 18



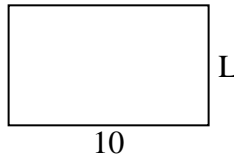
6) perímetro = 26



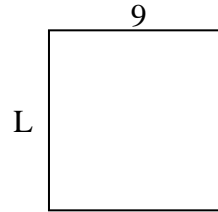
7) perímetro = 20



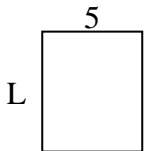
8) perímetro = 32



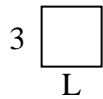
9) perímetro = 36



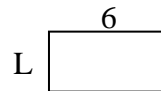
10) perímetro = 22



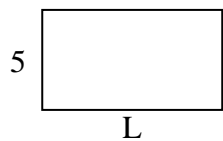
11) perímetro = 12




12) perímetro = 18



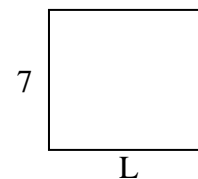
13) perímetro = 28



14) perímetro = 24



15) perímetro = 30



1. _____

2. _____

3. _____

4. _____

5. _____

6. _____

7. _____

8. _____

9. _____

10. _____

11. _____

12. _____

13. _____

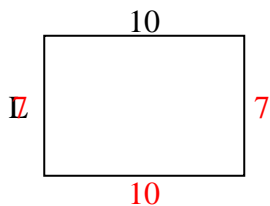
14. _____

15. _____

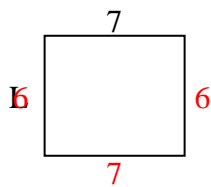


Determina el valor de 'L'. Las longitudes están en cm (no a escala).

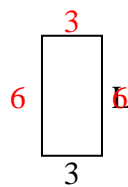
1) perímetro = 34



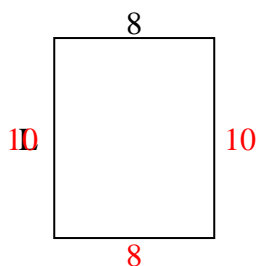
2) perímetro = 26



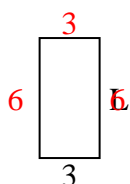
3) perímetro = 18



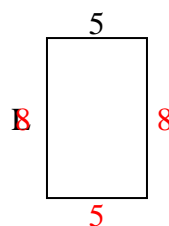
4) perímetro = 36



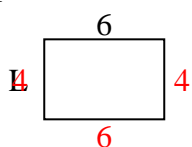
5) perímetro = 18



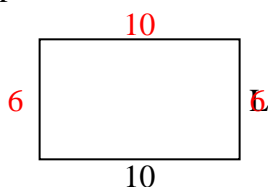
6) perímetro = 26



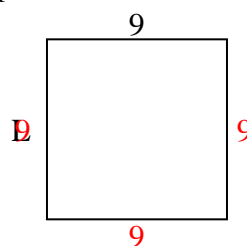
7) perímetro = 20



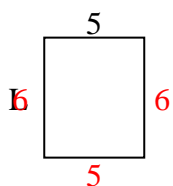
8) perímetro = 32



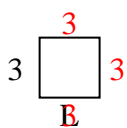
9) perímetro = 36



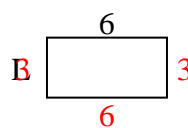
10) perímetro = 22



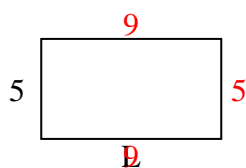
11) perímetro = 12



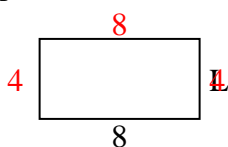
12) perímetro = 18



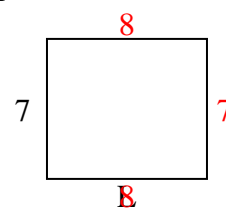
13) perímetro = 28



14) perímetro = 24



15) perímetro = 30

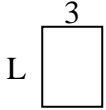
**Respuestas**1. **7 cm**2. **6 cm**3. **6 cm**4. **10 cm**5. **6 cm**6. **8 cm**7. **4 cm**8. **6 cm**9. **9 cm**10. **6 cm**11. **3 cm**12. **3 cm**13. **9 cm**14. **4 cm**15. **8 cm**



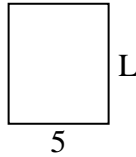
Determina el valor de 'L'. Las longitudes están en cm (no a escala).

Respuestas

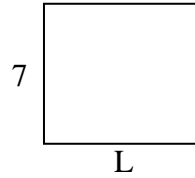
1) perímetro = 14



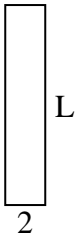
2) perímetro = 22



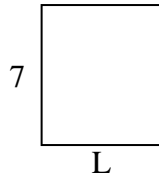
3) perímetro = 30



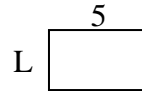
4) perímetro = 24



5) perímetro = 26



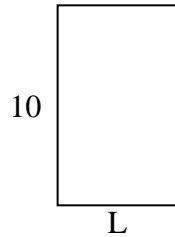
6) perímetro = 16



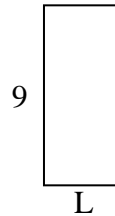
7) perímetro = 16



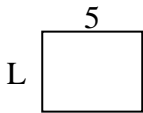
8) perímetro = 32



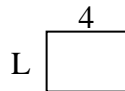
9) perímetro = 26



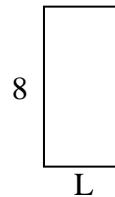
10) perímetro = 18



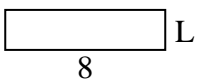
11) perímetro = 14



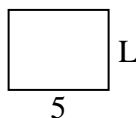
12) perímetro = 24



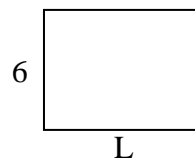
13) perímetro = 20



14) perímetro = 18



15) perímetro = 28

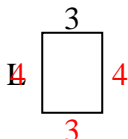


1. _____
2. _____
3. _____
4. _____
5. _____
6. _____
7. _____
8. _____
9. _____
10. _____
11. _____
12. _____
13. _____
14. _____
15. _____

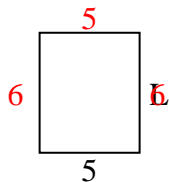


Determina el valor de 'L'. Las longitudes están en cm (no a escala).

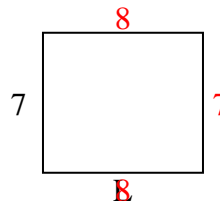
1) perímetro = 14



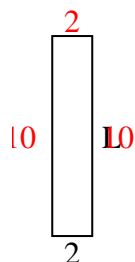
2) perímetro = 22



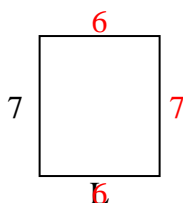
3) perímetro = 30



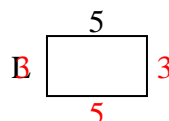
4) perímetro = 24



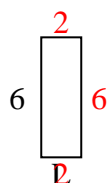
5) perímetro = 26



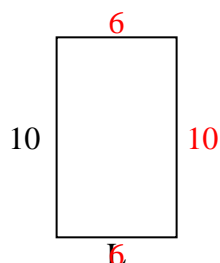
6) perímetro = 16



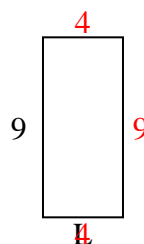
7) perímetro = 16



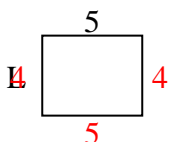
8) perímetro = 32



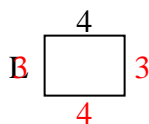
9) perímetro = 26



10) perímetro = 18



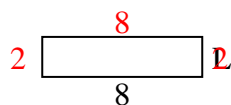
11) perímetro = 14



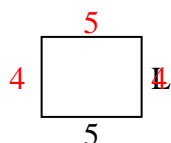
12) perímetro = 24



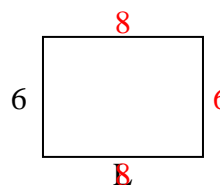
13) perímetro = 20



14) perímetro = 18



15) perímetro = 28

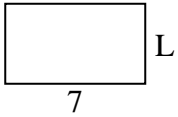
**Respuestas**1. **4 cm**2. **6 cm**3. **8 cm**4. **10 cm**5. **6 cm**6. **3 cm**7. **2 cm**8. **6 cm**9. **4 cm**10. **4 cm**11. **3 cm**12. **4 cm**13. **2 cm**14. **4 cm**15. **8 cm**



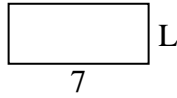
Determina el valor de 'L'. Las longitudes están en cm (no a escala).

Respuestas

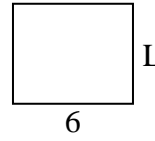
1) perímetro = 22



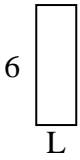
2) perímetro = 20



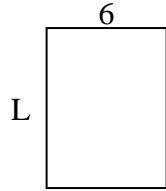
3) perímetro = 22



4) perímetro = 16




5) perímetro = 28



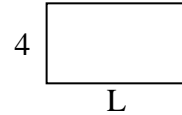
6) perímetro = 10



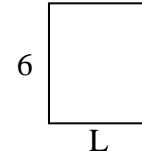
7) perímetro = 22



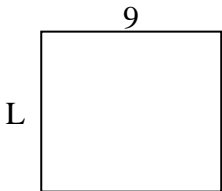
8) perímetro = 22



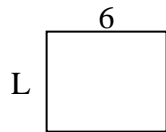
9) perímetro = 22



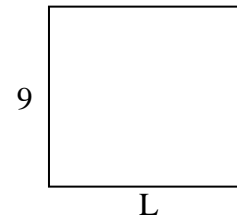
10) perímetro = 34



11) perímetro = 22



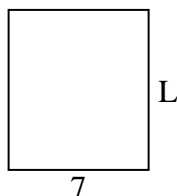
12) perímetro = 38




13) perímetro = 26



14) perímetro = 30



15) perímetro = 30



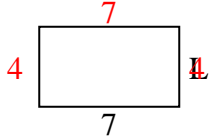
1. _____
2. _____
3. _____
4. _____
5. _____
6. _____
7. _____
8. _____
9. _____
10. _____
11. _____
12. _____
13. _____
14. _____
15. _____



Determina el valor de 'L'. Las longitudes están en cm (no a escala).

Respuestas

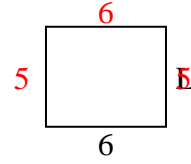
1) perímetro = 22



2) perímetro = 20



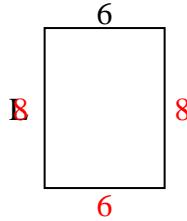
3) perímetro = 22



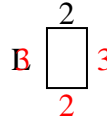
4) perímetro = 16



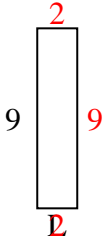
5) perímetro = 28



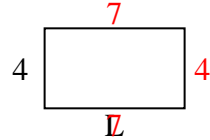
6) perímetro = 10



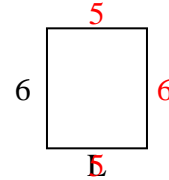
7) perímetro = 22



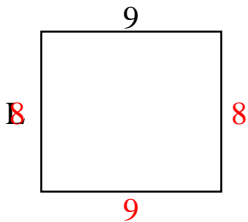
8) perímetro = 22



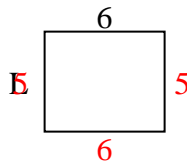
9) perímetro = 22



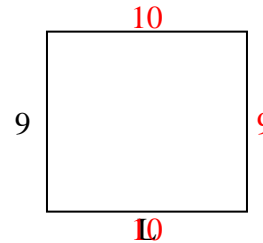
10) perímetro = 34



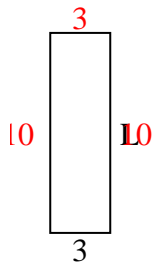
11) perímetro = 22



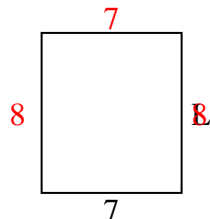
12) perímetro = 38



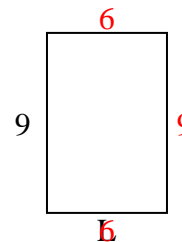
13) perímetro = 26



14) perímetro = 30



15) perímetro = 30



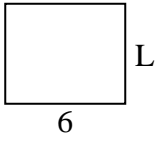
1. 4 cm
2. 3 cm
3. 5 cm
4. 2 cm
5. 8 cm
6. 3 cm
7. 2 cm
8. 7 cm
9. 5 cm
10. 8 cm
11. 5 cm
12. 10 cm
13. 10 cm
14. 8 cm
15. 6 cm



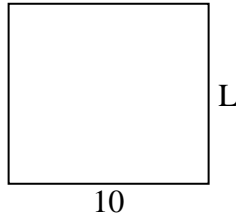
Determina el valor de 'L'. Las longitudes están en cm (no a escala).

Respuestas

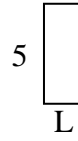
1) perímetro = 22



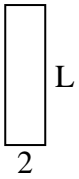
2) perímetro = 38



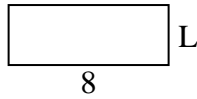
3) perímetro = 14



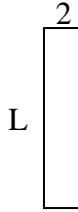
4) perímetro = 18



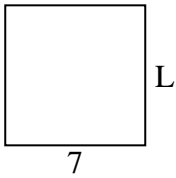
5) perímetro = 22



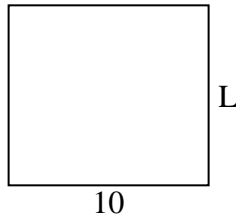
6) perímetro = 22



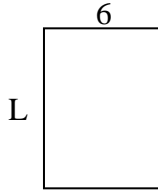
7) perímetro = 28



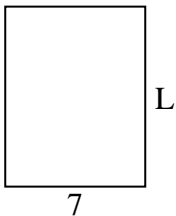
8) perímetro = 38



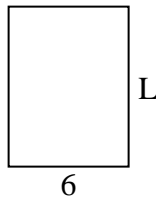
9) perímetro = 28



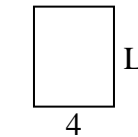
10) perímetro = 32



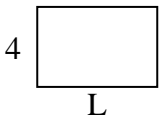
11) perímetro = 28



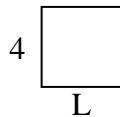
12) perímetro = 18



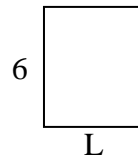
13) perímetro = 20



14) perímetro = 16



15) perímetro = 22



1. _____

2. _____

3. _____

4. _____

5. _____

6. _____

7. _____

8. _____

9. _____

10. _____

11. _____

12. _____

13. _____

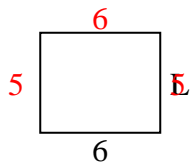
14. _____

15. _____

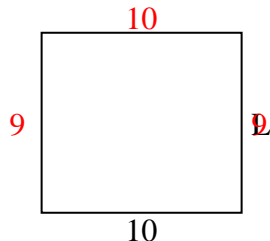


Determina el valor de 'L'. Las longitudes están en cm (no a escala).

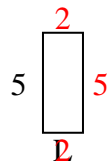
1) perímetro = 22



2) perímetro = 38



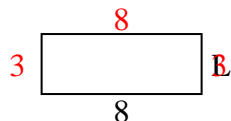
3) perímetro = 14



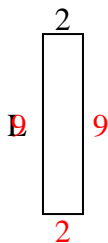
4) perímetro = 18



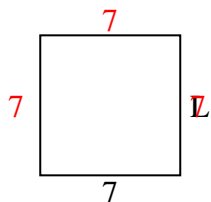
5) perímetro = 22



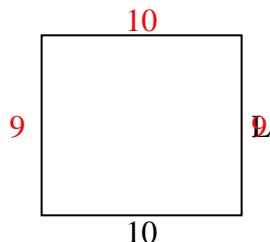
6) perímetro = 22



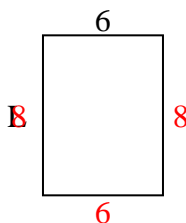
7) perímetro = 28



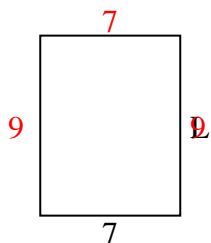
8) perímetro = 38



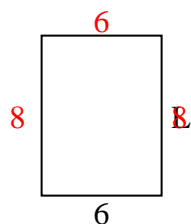
9) perímetro = 28



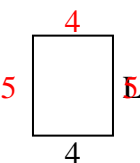
10) perímetro = 32



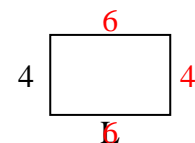
11) perímetro = 28



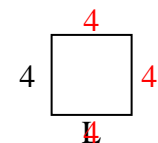
12) perímetro = 18



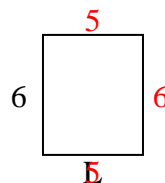
13) perímetro = 20



14) perímetro = 16



15) perímetro = 22

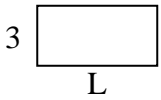
**Respuestas**1. **5 cm**2. **9 cm**3. **2 cm**4. **7 cm**5. **3 cm**6. **9 cm**7. **7 cm**8. **9 cm**9. **8 cm**10. **9 cm**11. **8 cm**12. **5 cm**13. **6 cm**14. **4 cm**15. **5 cm**



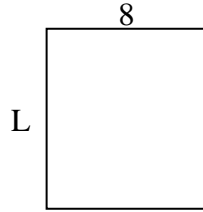
Determina el valor de 'L'. Las longitudes están en cm (no a escala).

Respuestas

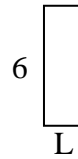
1) perímetro = 18



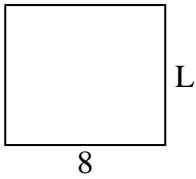
2) perímetro = 34



3) perímetro = 16



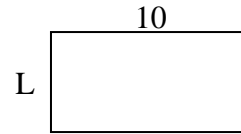
4) perímetro = 30



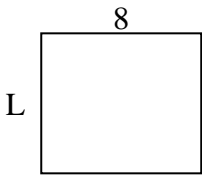
5) perímetro = 10



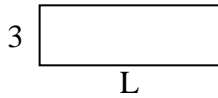
6) perímetro = 30



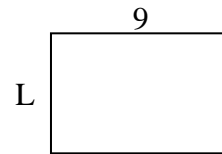
7) perímetro = 30



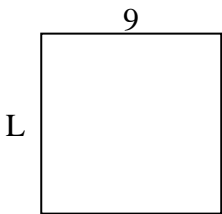
8) perímetro = 24



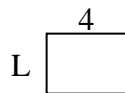
9) perímetro = 30



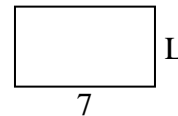
10) perímetro = 36



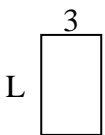
11) perímetro = 14




12) perímetro = 22



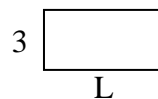
13) perímetro = 16



14) perímetro = 24



15) perímetro = 18



1. _____

2. _____

3. _____

4. _____

5. _____

6. _____

7. _____

8. _____

9. _____

10. _____

11. _____

12. _____

13. _____

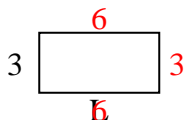
14. _____

15. _____

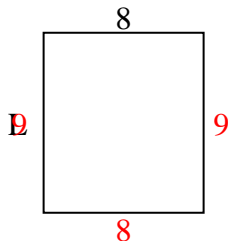


Determina el valor de 'L'. Las longitudes están en cm (no a escala).

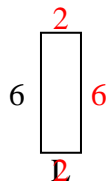
1) perímetro = 18



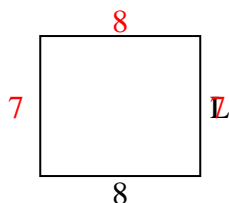
2) perímetro = 34



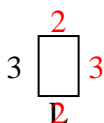
3) perímetro = 16



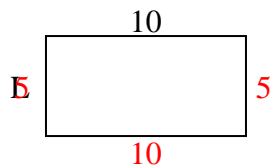
4) perímetro = 30



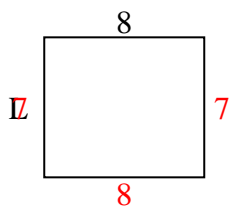
5) perímetro = 10



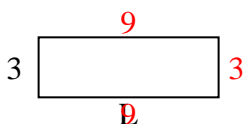
6) perímetro = 30



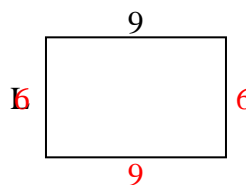
7) perímetro = 30



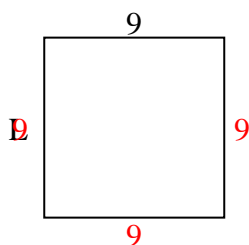
8) perímetro = 24



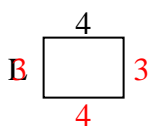
9) perímetro = 30



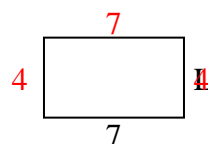
10) perímetro = 36



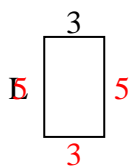
11) perímetro = 14




12) perímetro = 22



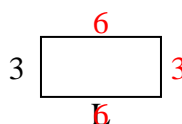
13) perímetro = 16



14) perímetro = 24



15) perímetro = 18

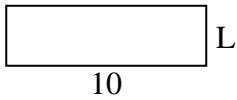
**Respuestas**1. **6 cm**2. **9 cm**3. **2 cm**4. **7 cm**5. **2 cm**6. **5 cm**7. **7 cm**8. **9 cm**9. **6 cm**10. **9 cm**11. **3 cm**12. **4 cm**13. **5 cm**14. **2 cm**15. **6 cm**



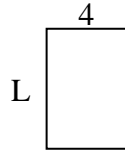
Determina el valor de 'L'. Las longitudes están en cm (no a escala).

Respuestas

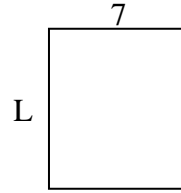
1) perímetro = 26



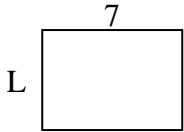
2) perímetro = 20



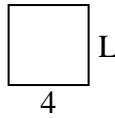
3) perímetro = 30



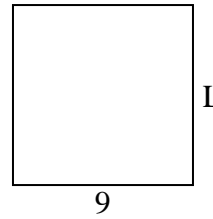
4) perímetro = 24



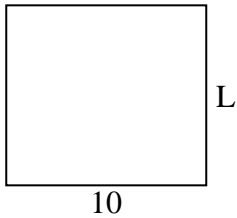
5) perímetro = 16



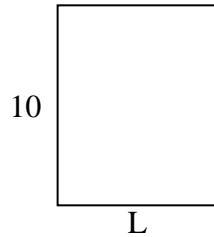
6) perímetro = 36



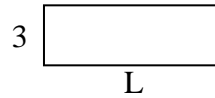
7) perímetro = 38




8) perímetro = 36



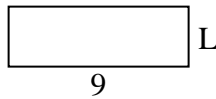
9) perímetro = 24



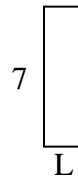
10) perímetro = 24



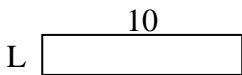
11) perímetro = 24



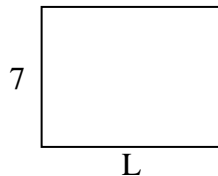
12) perímetro = 18



13) perímetro = 24



14) perímetro = 32



15) perímetro = 18




1. _____
2. _____
3. _____
4. _____
5. _____
6. _____
7. _____
8. _____
9. _____
10. _____
11. _____
12. _____
13. _____
14. _____
15. _____

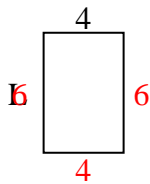


Determina el valor de 'L'. Las longitudes están en cm (no a escala).

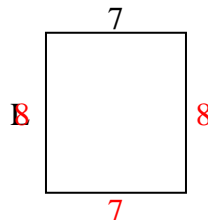
1) perímetro = 26



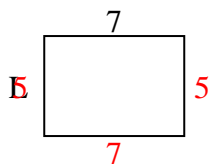
2) perímetro = 20



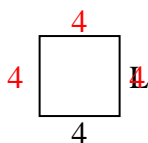
3) perímetro = 30



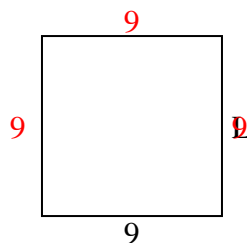
4) perímetro = 24



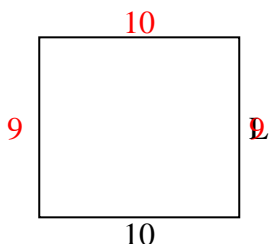
5) perímetro = 16



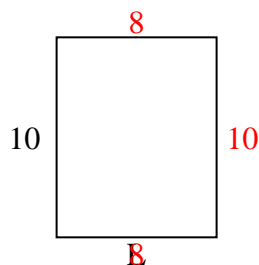
6) perímetro = 36



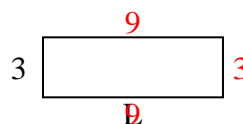
7) perímetro = 38



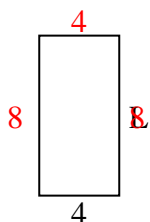
8) perímetro = 36



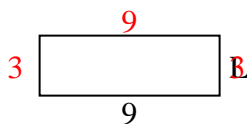
9) perímetro = 24



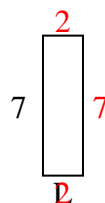
10) perímetro = 24



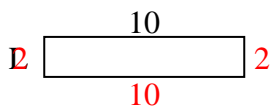
11) perímetro = 24



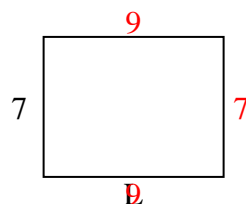
12) perímetro = 18



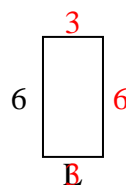
13) perímetro = 24



14) perímetro = 32



15) perímetro = 18

**Respuestas**1. **3 cm**2. **6 cm**3. **8 cm**4. **5 cm**5. **4 cm**6. **9 cm**7. **9 cm**8. **8 cm**9. **9 cm**10. **8 cm**11. **3 cm**12. **2 cm**13. **2 cm**14. **9 cm**15. **3 cm**



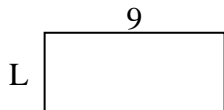
Determina el valor de 'L'. Las longitudes están en cm (no a escala).

Respuestas

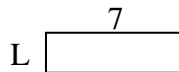
1) perímetro = 12



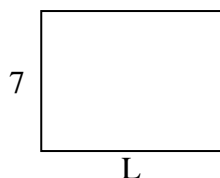
2) perímetro = 26



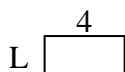
3) perímetro = 18



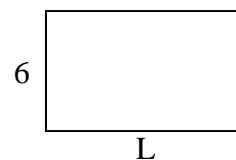
4) perímetro = 32



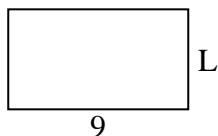
5) perímetro = 12




6) perímetro = 32



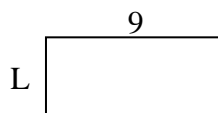
7) perímetro = 28



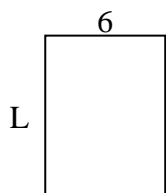
8) perímetro = 24



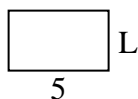
9) perímetro = 26



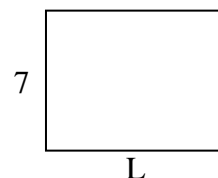
10) perímetro = 28



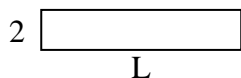
11) perímetro = 16



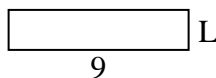
12) perímetro = 32



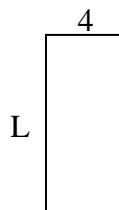
13) perímetro = 24



14) perímetro = 22



15) perímetro = 26



1. _____

2. _____

3. _____

4. _____

5. _____

6. _____

7. _____

8. _____

9. _____

10. _____

11. _____

12. _____

13. _____

14. _____

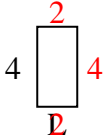
15. _____



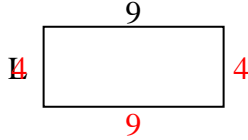
Determina el valor de 'L'. Las longitudes están en cm (no a escala).

Respuestas

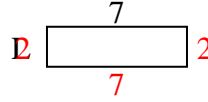
1) perímetro = 12



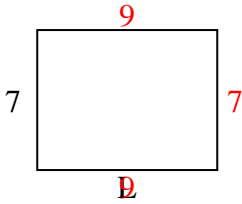
2) perímetro = 26



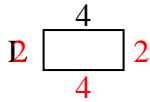
3) perímetro = 18



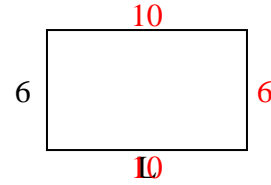
4) perímetro = 32



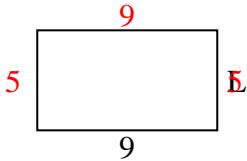
5) perímetro = 12



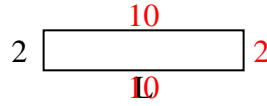
6) perímetro = 32



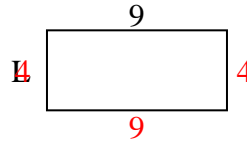
7) perímetro = 28



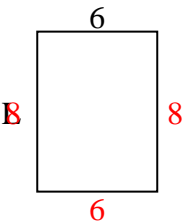
8) perímetro = 24



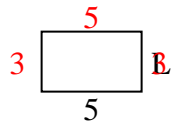
9) perímetro = 26



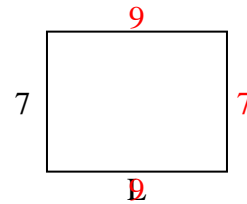
10) perímetro = 28



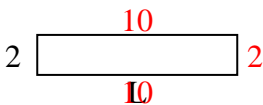
11) perímetro = 16



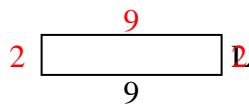
12) perímetro = 32



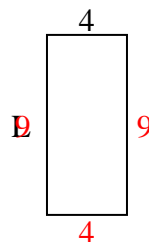
13) perímetro = 24



14) perímetro = 22



15) perímetro = 26

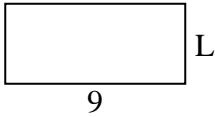
1. **2 cm**2. **4 cm**3. **2 cm**4. **9 cm**5. **2 cm**6. **10 cm**7. **5 cm**8. **10 cm**9. **4 cm**10. **8 cm**11. **3 cm**12. **9 cm**13. **10 cm**14. **2 cm**15. **9 cm**



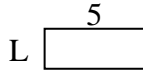
Determina el valor de 'L'. Las longitudes están en cm (no a escala).

Respuestas

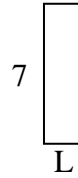
1) perímetro = 26



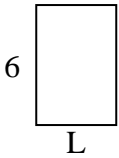
2) perímetro = 14



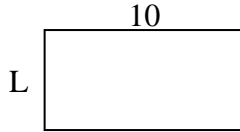
3) perímetro = 18



4) perímetro = 20



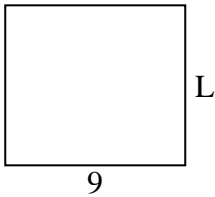
5) perímetro = 30



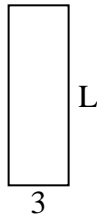
6) perímetro = 10



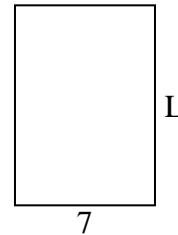
7) perímetro = 34



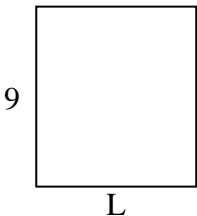
8) perímetro = 24



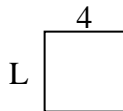
9) perímetro = 34



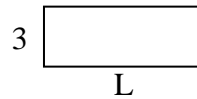
10) perímetro = 34




11) perímetro = 16



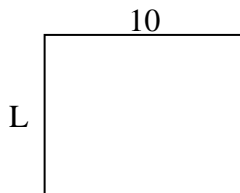
12) perímetro = 22




13) perímetro = 18



14) perímetro = 36



15) perímetro = 24



1. _____

2. _____

3. _____

4. _____

5. _____

6. _____

7. _____

8. _____

9. _____

10. _____

11. _____

12. _____

13. _____

14. _____

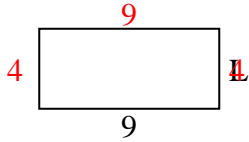
15. _____



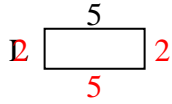
Determina el valor de 'L'. Las longitudes están en cm (no a escala).

Respuestas

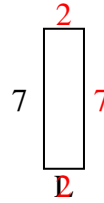
1) perímetro = 26



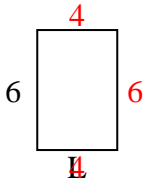
2) perímetro = 14



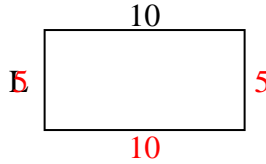
3) perímetro = 18



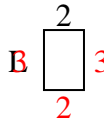
4) perímetro = 20



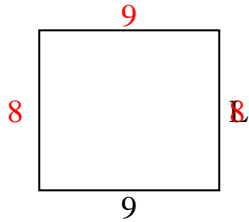
5) perímetro = 30



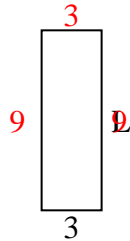
6) perímetro = 10



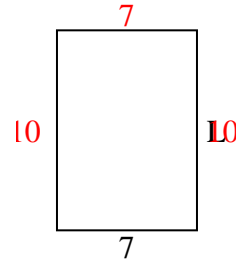
7) perímetro = 34



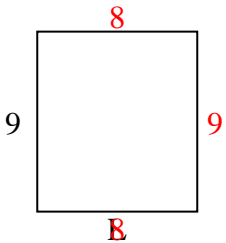
8) perímetro = 24



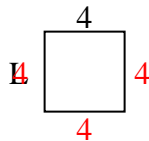
9) perímetro = 34



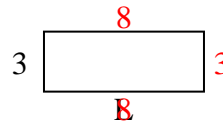
10) perímetro = 34



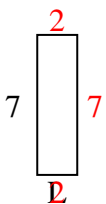
11) perímetro = 16



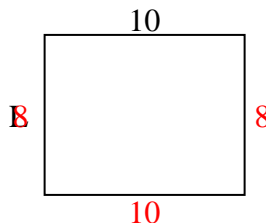
12) perímetro = 22



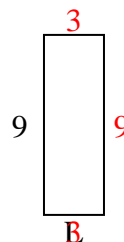
13) perímetro = 18



14) perímetro = 36



15) perímetro = 24



1. 4 cm
2. 2 cm
3. 2 cm
4. 4 cm
5. 5 cm
6. 3 cm
7. 8 cm
8. 9 cm
9. 10 cm
10. 8 cm
11. 4 cm
12. 8 cm
13. 2 cm
14. 8 cm
15. 3 cm