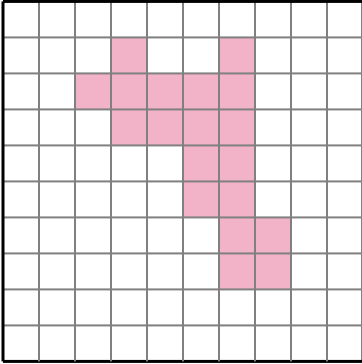


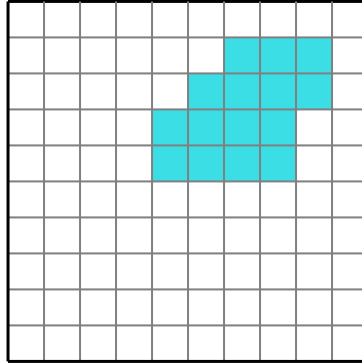


Encuentra el perímetro de cada sección sombreada. Cada bloque tiene 1 unidad cuadrada (u<sup>2</sup>)

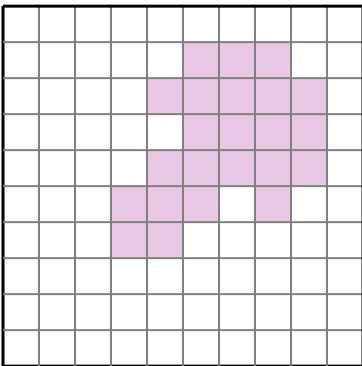
1)



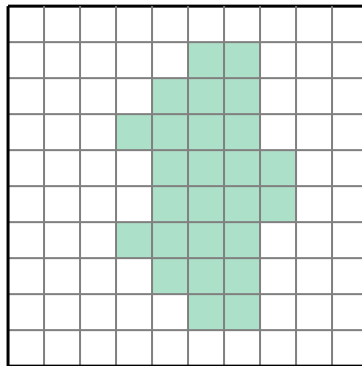
2)



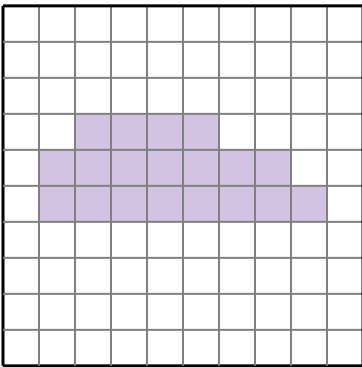
3)



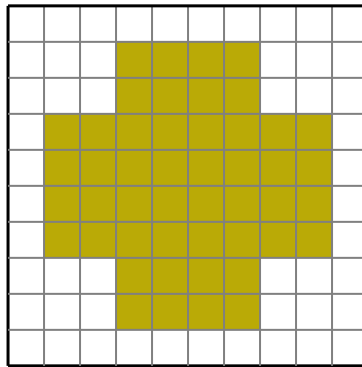
4)



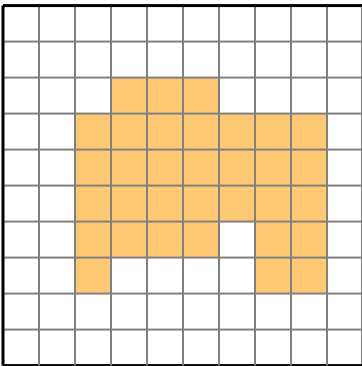
5)



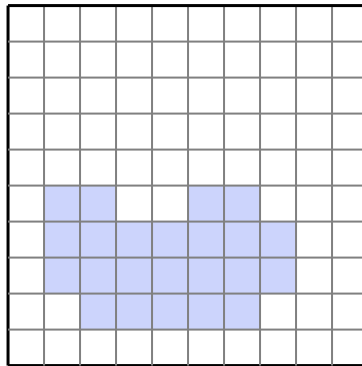
6)



7)



8)



**Respuestas**

- 1. \_\_\_\_\_
- 2. \_\_\_\_\_
- 3. \_\_\_\_\_
- 4. \_\_\_\_\_
- 5. \_\_\_\_\_
- 6. \_\_\_\_\_
- 7. \_\_\_\_\_
- 8. \_\_\_\_\_

