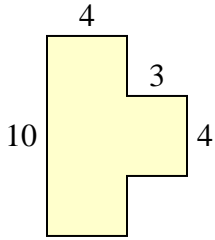




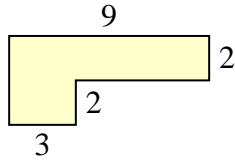
Encuentra el área total de cada figura. La medida está en milímetros (mm). No a escala.

Respuestas

1)



2)



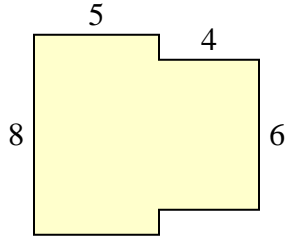
1. _____

2. _____

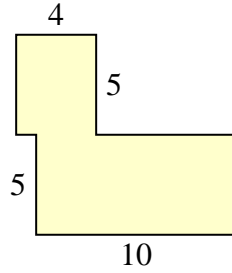
3. _____

4. _____

3)



4)



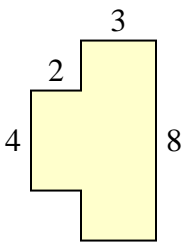
5. _____

6. _____

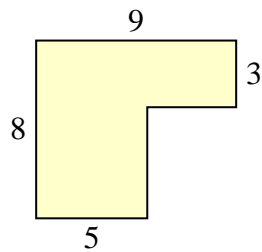
7. _____

8. _____

5)



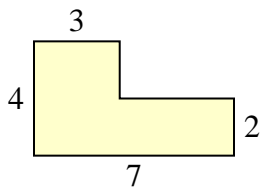
6)



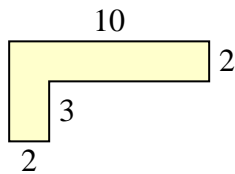
9. _____

10. _____

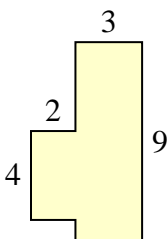
7)



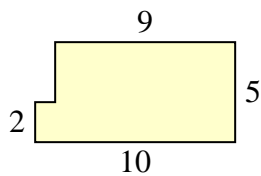
8)



9)

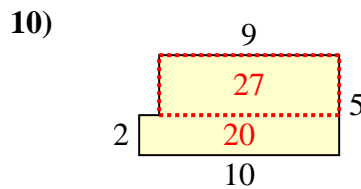
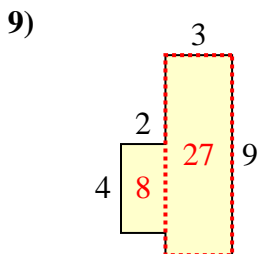
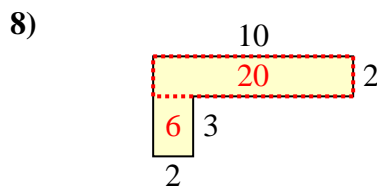
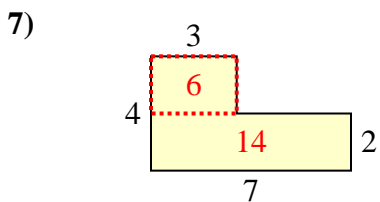
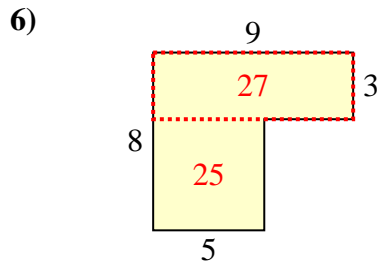
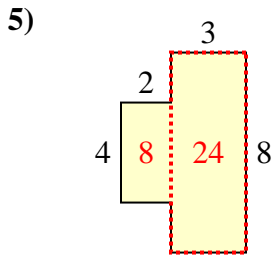
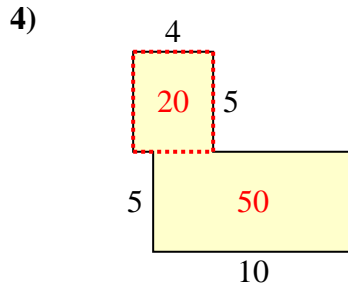
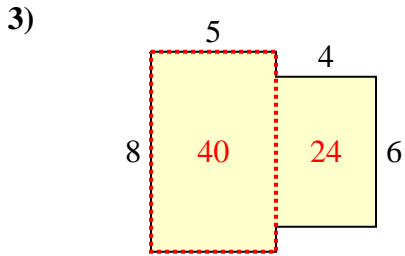
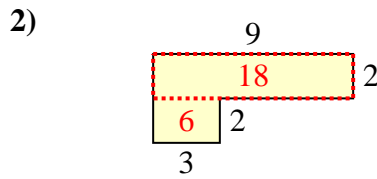
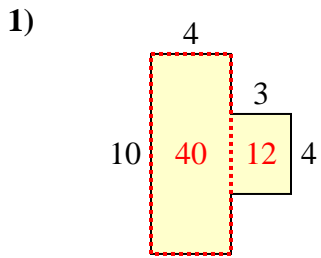


10)





Encuentra el área total de cada figura. La medida está en milímetros (mm). No a escala.



Respuestas

1. 52 mm²
2. 24 mm²
3. 64 mm²
4. 70 mm²
5. 32 mm²
6. 52 mm²
7. 20 mm²
8. 26 mm²
9. 35 mm²
10. 47 mm²