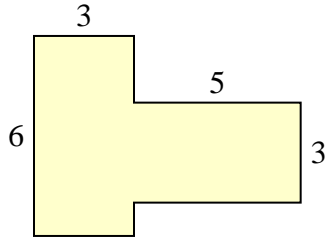


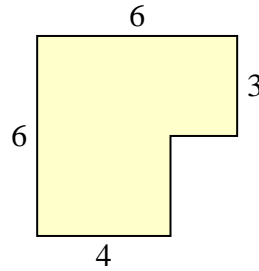


Encuentra el área total de cada figura. La medida está en milímetros (mm). No a escala.

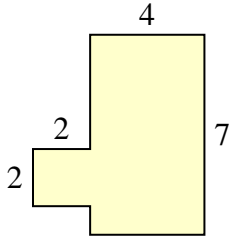
1)



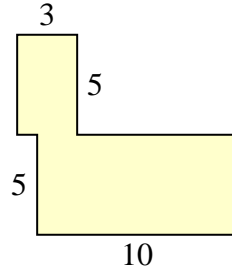
2)



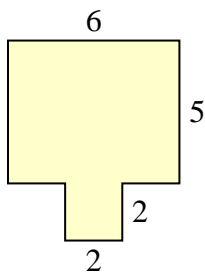
3)



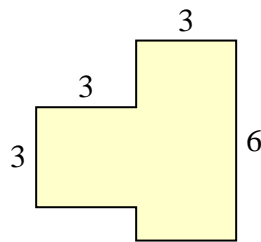
4)



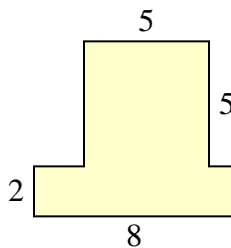
5)



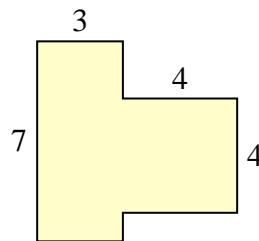
6)



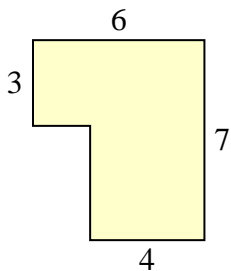
7)



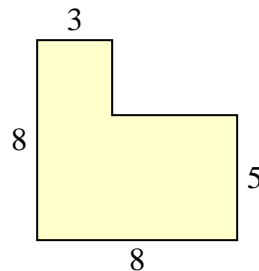
8)



9)



10)



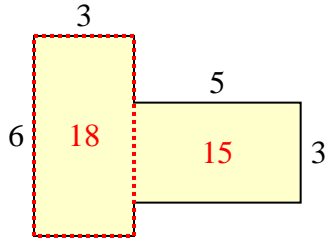
**Respuestas**

1. \_\_\_\_\_
2. \_\_\_\_\_
3. \_\_\_\_\_
4. \_\_\_\_\_
5. \_\_\_\_\_
6. \_\_\_\_\_
7. \_\_\_\_\_
8. \_\_\_\_\_
9. \_\_\_\_\_
10. \_\_\_\_\_

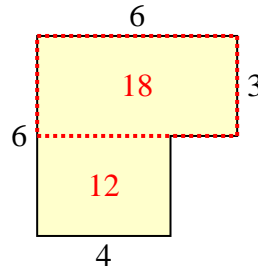


Encuentra el área total de cada figura. La medida está en milímetros (mm). No a escala.

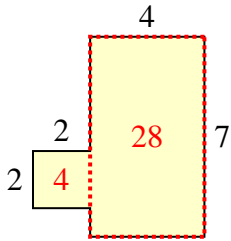
1)



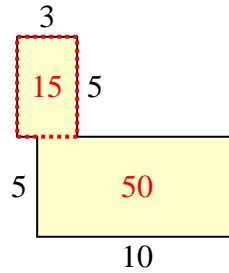
2)



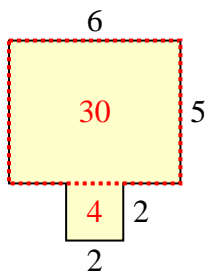
3)



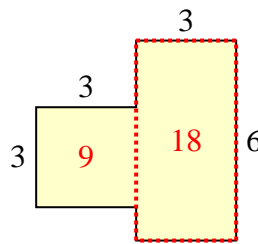
4)



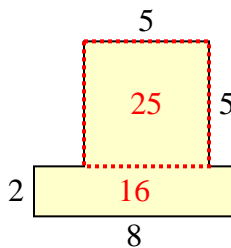
5)



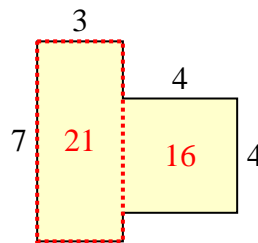
6)



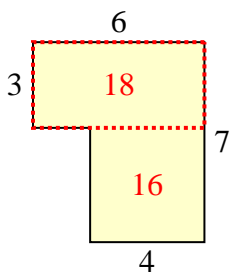
7)



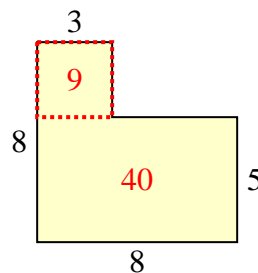
8)



9)



10)



**Respuestas**

1. 33 mm<sup>2</sup>
2. 30 mm<sup>2</sup>
3. 32 mm<sup>2</sup>
4. 65 mm<sup>2</sup>
5. 34 mm<sup>2</sup>
6. 27 mm<sup>2</sup>
7. 41 mm<sup>2</sup>
8. 37 mm<sup>2</sup>
9. 34 mm<sup>2</sup>
10. 49 mm<sup>2</sup>