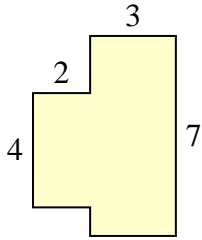




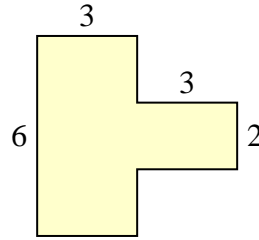
Encuentra el área total de cada figura. La medida está en milímetros (mm). No a escala.

Respuestas

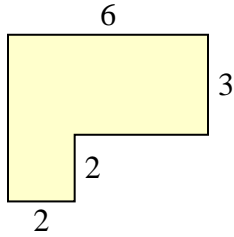
1)



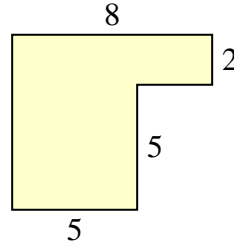
2)



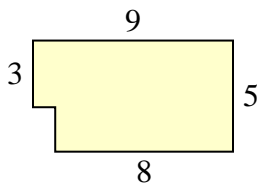
3)



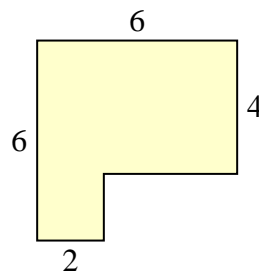
4)



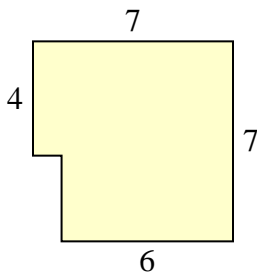
5)



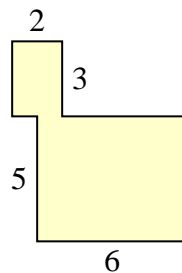
6)



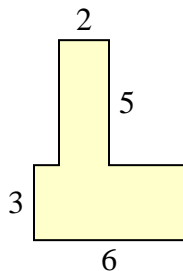
7)



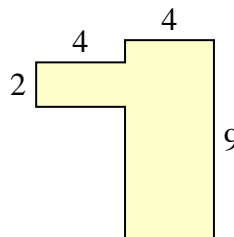
8)



9)



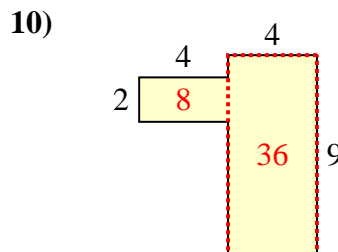
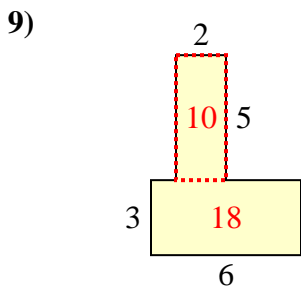
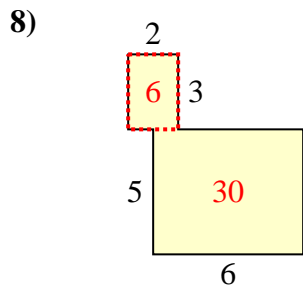
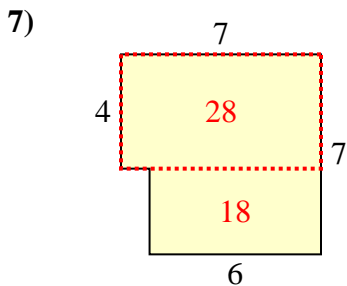
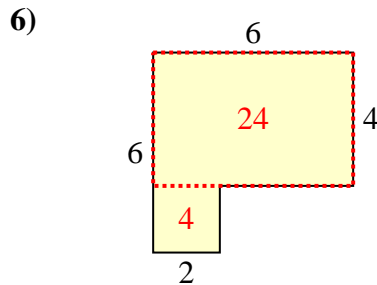
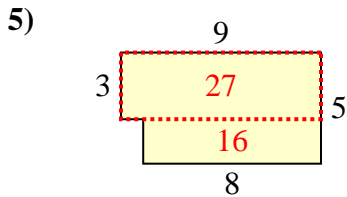
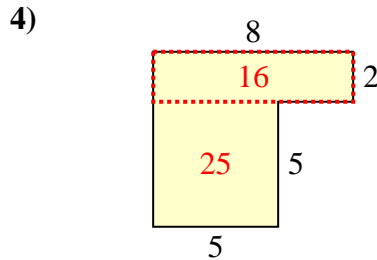
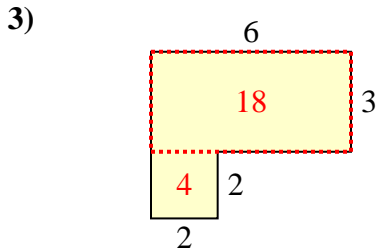
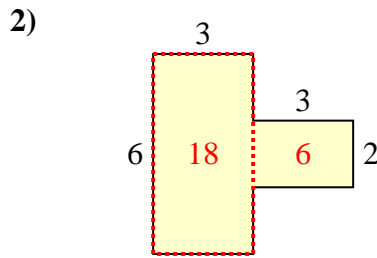
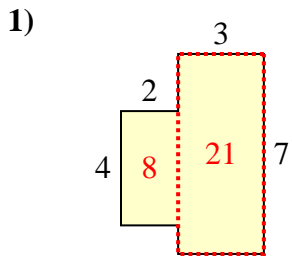
10)



1. _____
2. _____
3. _____
4. _____
5. _____
6. _____
7. _____
8. _____
9. _____
10. _____



Encuentra el área total de cada figura. La medida está en milímetros (mm). No a escala.



Respuestas

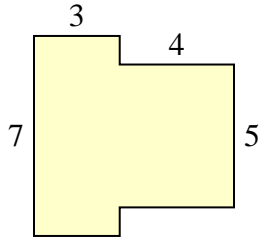
1. 29 mm²
2. 24 mm²
3. 22 mm²
4. 41 mm²
5. 43 mm²
6. 28 mm²
7. 46 mm²
8. 36 mm²
9. 28 mm²
10. 44 mm²



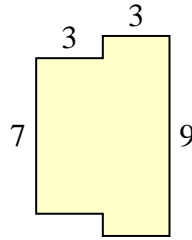
Encuentra el área total de cada figura. La medida está en milímetros (mm). No a escala.

Respuestas

1)

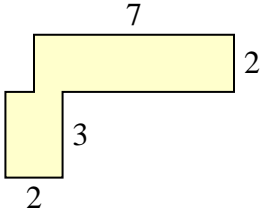


2)

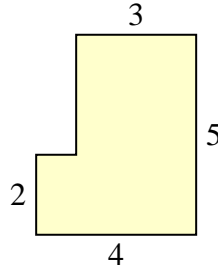


1. _____
2. _____
3. _____
4. _____
5. _____
6. _____
7. _____
8. _____
9. _____
10. _____

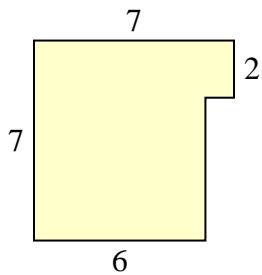
3)



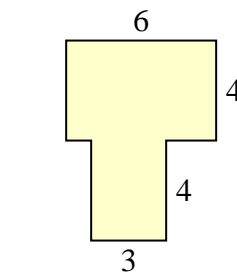
4)



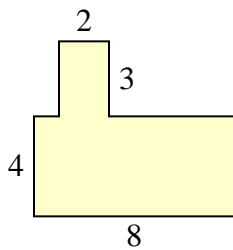
5)



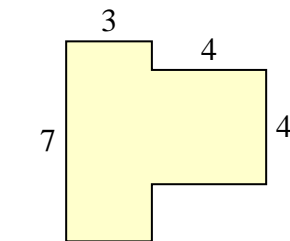
6)



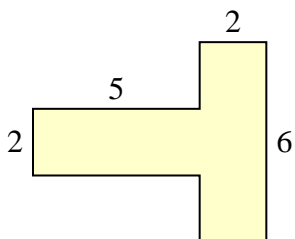
7)



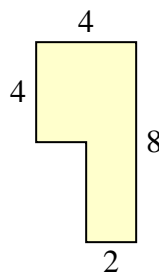
8)



9)



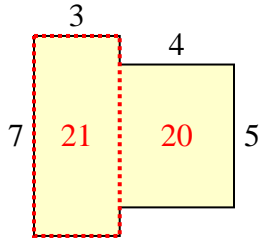
10)



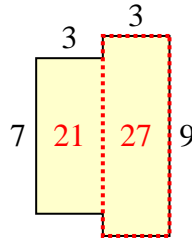


Encuentra el área total de cada figura. La medida está en milímetros (mm). No a escala.

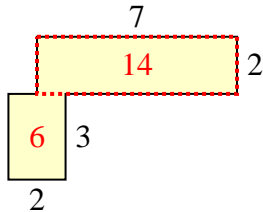
1)



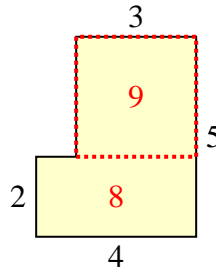
2)



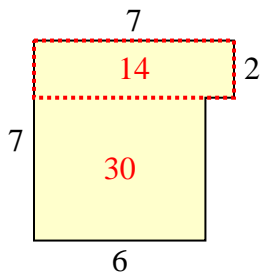
3)



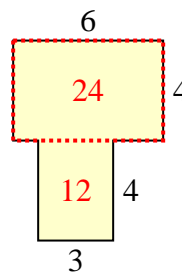
4)



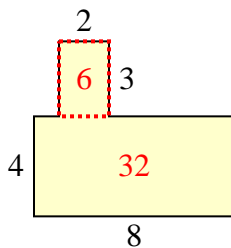
5)



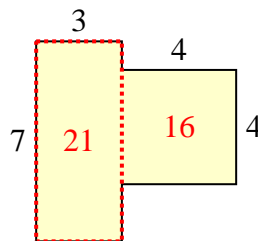
6)



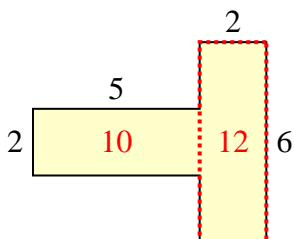
7)



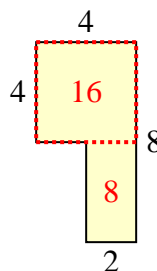
8)



9)



10)



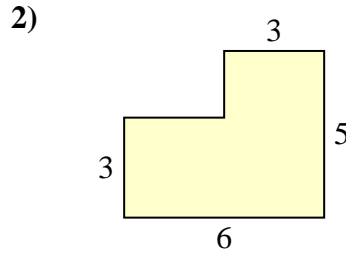
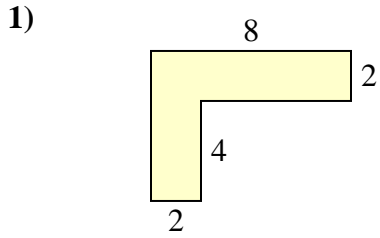
Respuestas

1. 41 mm²
2. 48 mm²
3. 20 mm²
4. 17 mm²
5. 44 mm²
6. 36 mm²
7. 38 mm²
8. 37 mm²
9. 22 mm²
10. 24 mm²

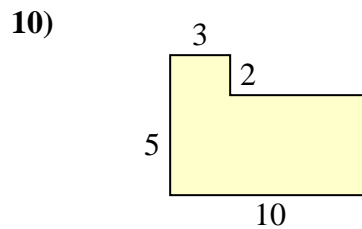
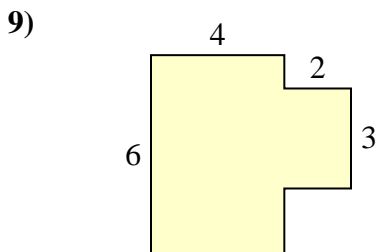
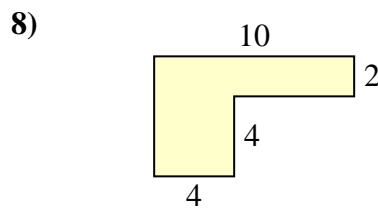
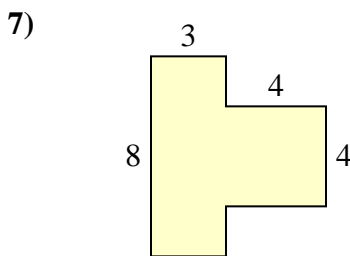
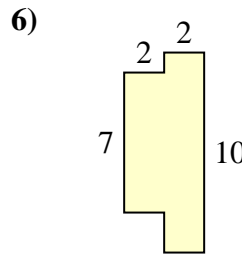
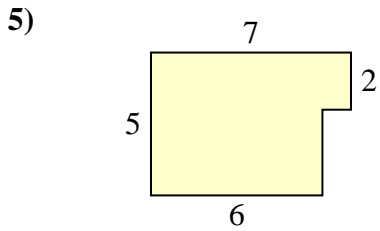
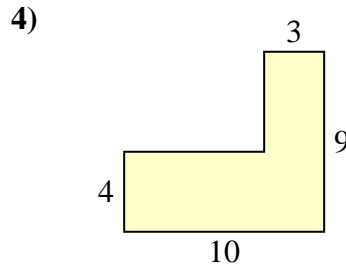
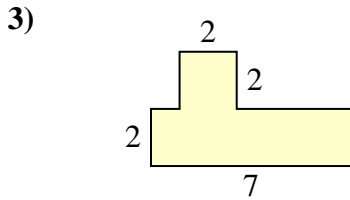


Encuentra el área total de cada figura. La medida está en milímetros (mm). No a escala.

Respuestas



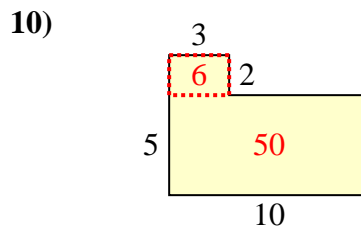
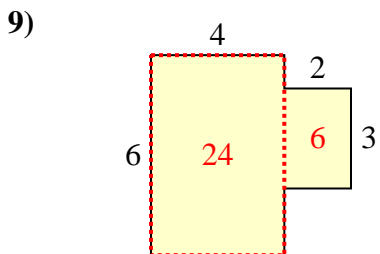
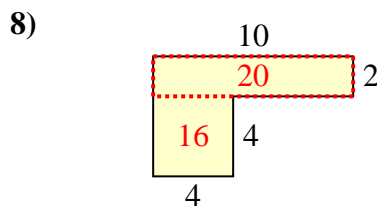
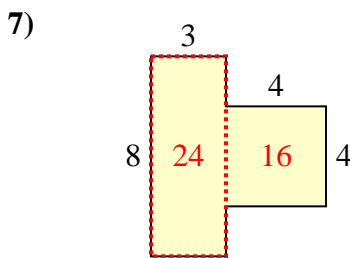
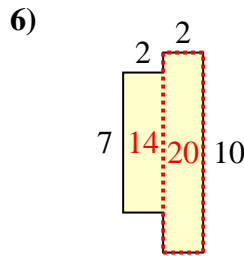
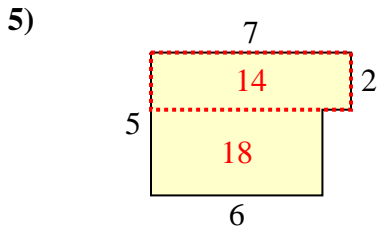
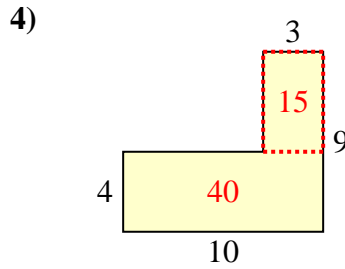
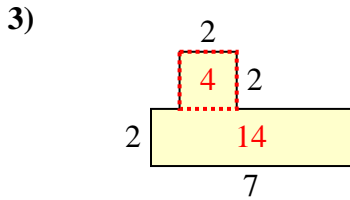
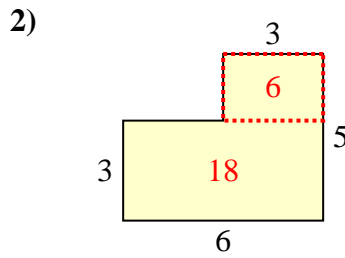
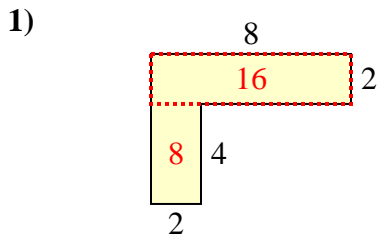
1. _____
2. _____
3. _____
4. _____
5. _____
6. _____
7. _____
8. _____
9. _____
10. _____





Encuentra el área total de cada figura. La medida está en milímetros (mm). No a escala.

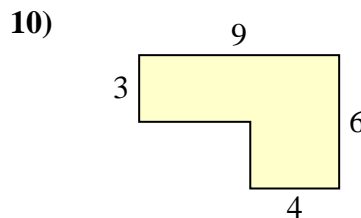
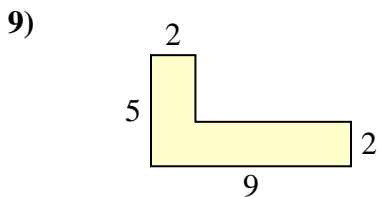
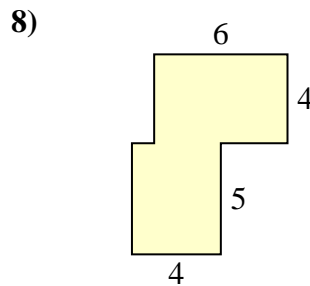
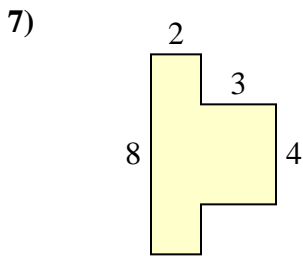
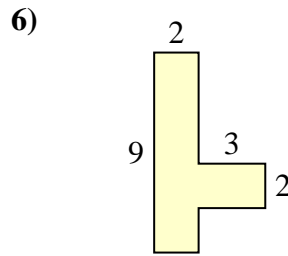
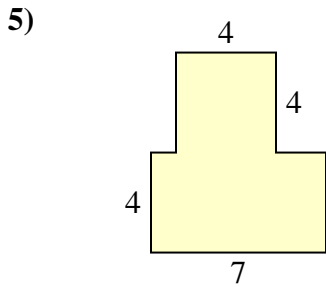
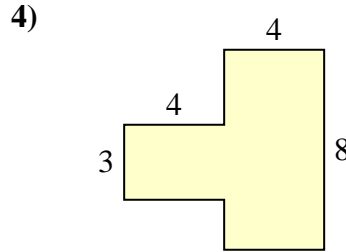
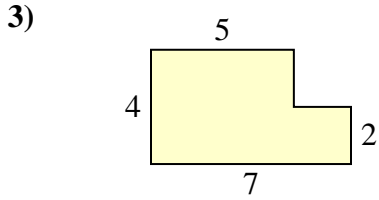
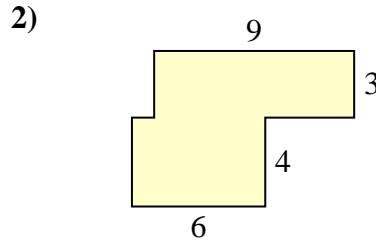
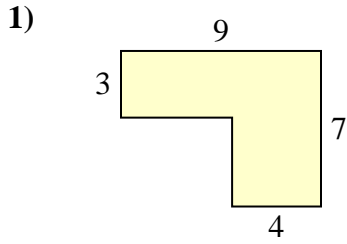
Respuestas



1. 24 mm²
2. 24 mm²
3. 18 mm²
4. 55 mm²
5. 32 mm²
6. 34 mm²
7. 40 mm²
8. 36 mm²
9. 30 mm²
10. 56 mm²



Encuentra el área total de cada figura. La medida está en milímetros (mm). No a escala.

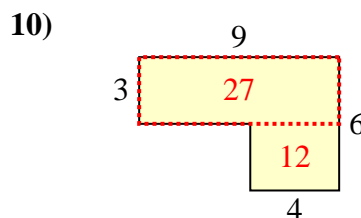
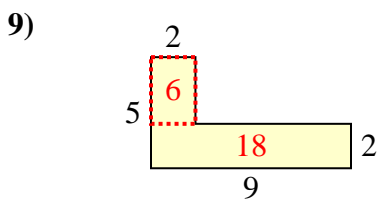
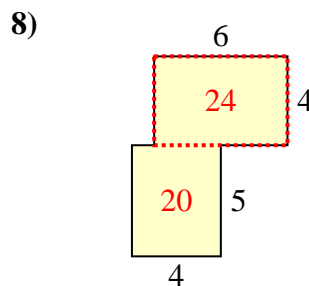
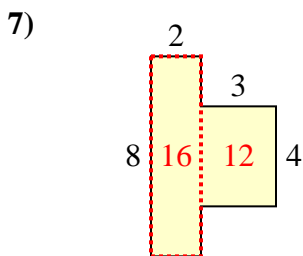
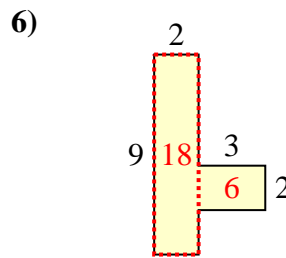
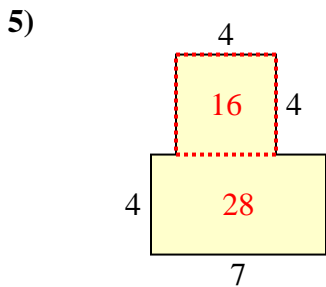
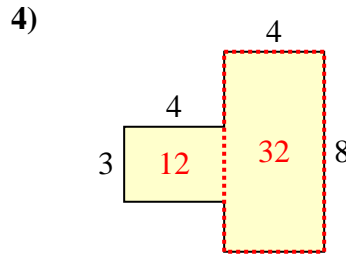
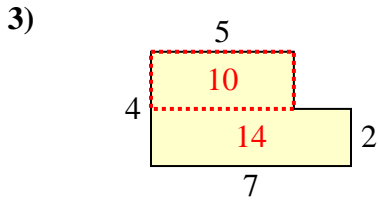
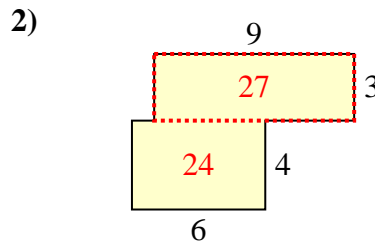
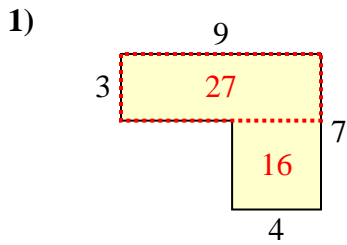


Respuestas

1. _____
2. _____
3. _____
4. _____
5. _____
6. _____
7. _____
8. _____
9. _____
10. _____



Encuentra el área total de cada figura. La medida está en milímetros (mm). No a escala.



Respuestas

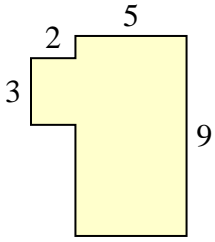
1. 43 mm²
2. 51 mm²
3. 24 mm²
4. 44 mm²
5. 44 mm²
6. 24 mm²
7. 28 mm²
8. 44 mm²
9. 24 mm²
10. 39 mm²



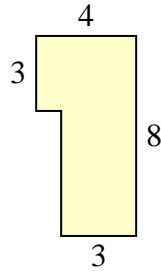
Encuentra el área total de cada figura. La medida está en milímetros (mm). No a escala.

Respuestas

1)



2)



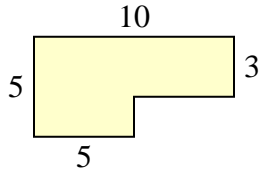
1. _____

2. _____

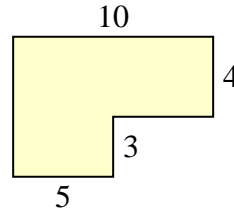
3. _____

4. _____

3)



4)



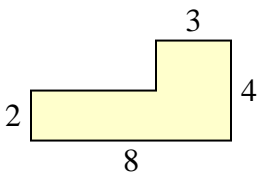
5. _____

6. _____

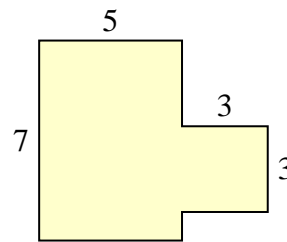
7. _____

8. _____

5)



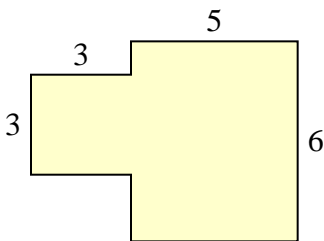
6)



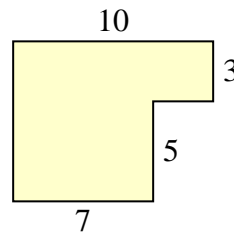
9. _____

10. _____

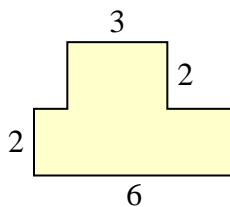
7)



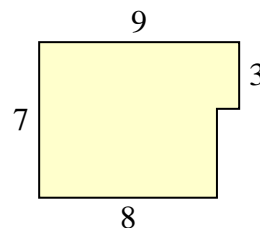
8)



9)

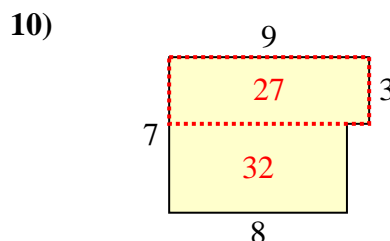
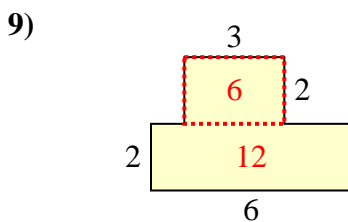
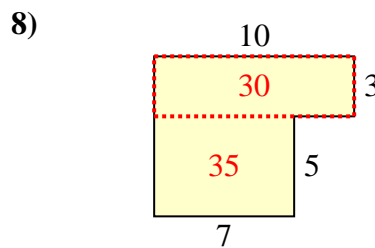
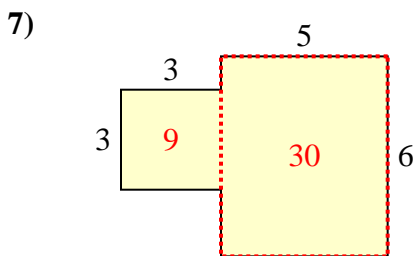
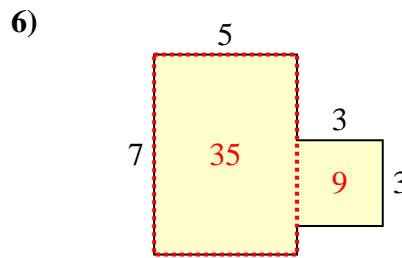
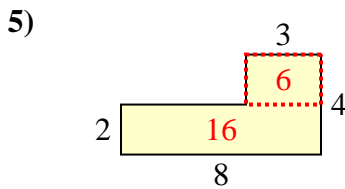
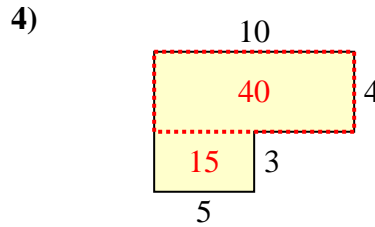
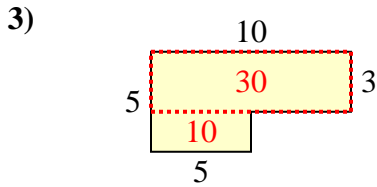
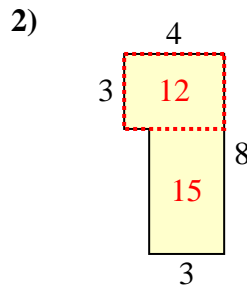
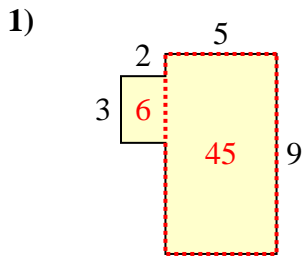


10)





Encuentra el área total de cada figura. La medida está en milímetros (mm). No a escala.



Respuestas

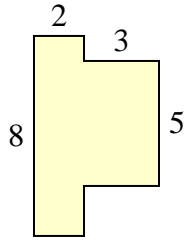
1. 51 mm²
2. 27 mm²
3. 40 mm²
4. 55 mm²
5. 22 mm²
6. 44 mm²
7. 39 mm²
8. 65 mm²
9. 18 mm²
10. 59 mm²



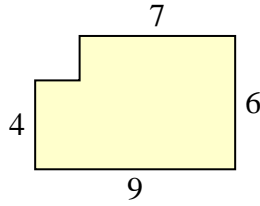
Encuentra el área total de cada figura. La medida está en milímetros (mm). No a escala.

Respuestas

1)



2)



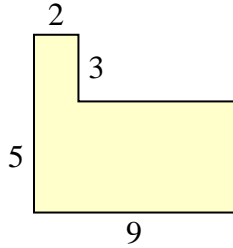
1. _____

2. _____

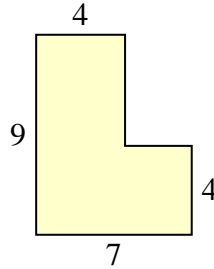
3. _____

4. _____

3)



4)



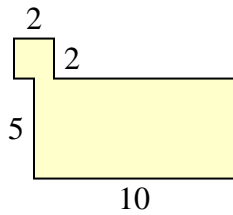
5. _____

6. _____

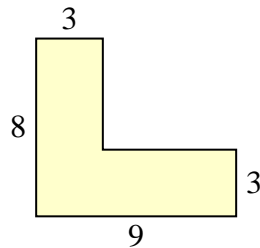
7. _____

8. _____

5)



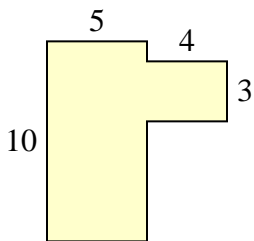
6)



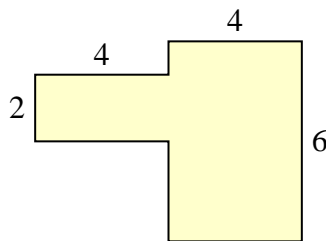
9. _____

10. _____

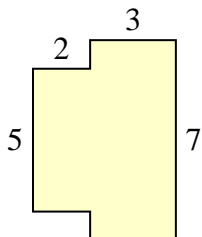
7)



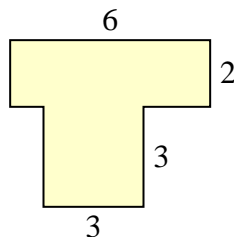
8)



9)

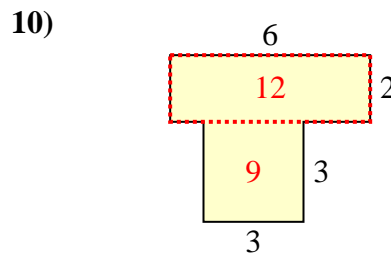
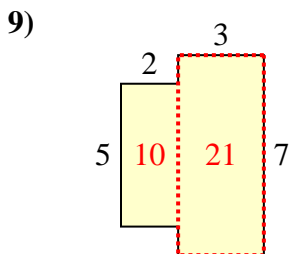
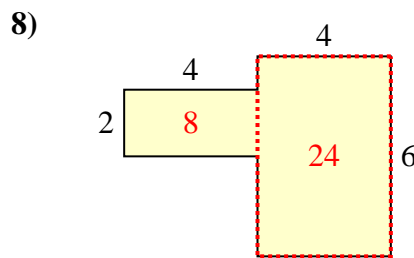
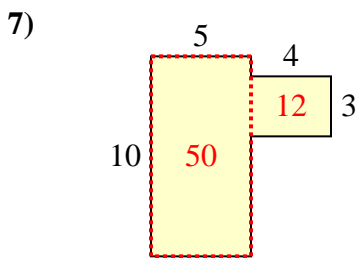
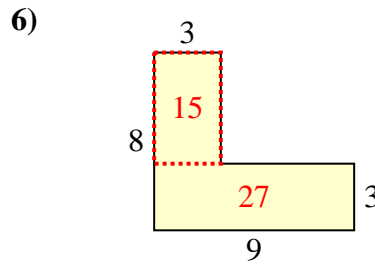
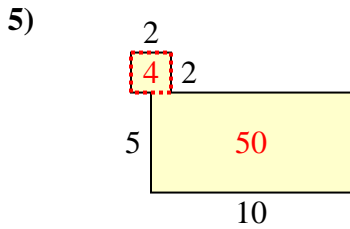
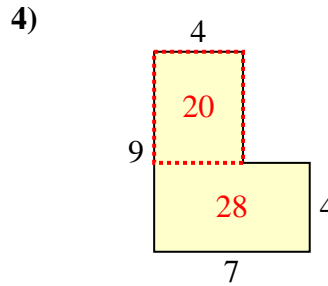
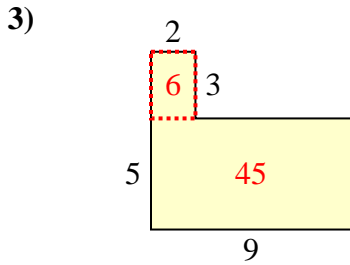
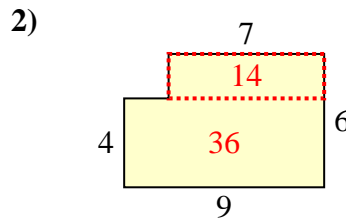
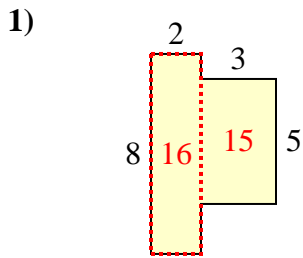


10)





Encuentra el área total de cada figura. La medida está en milímetros (mm). No a escala.



Respuestas

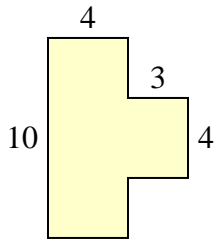
1. 31 mm²
2. 50 mm²
3. 51 mm²
4. 48 mm²
5. 54 mm²
6. 42 mm²
7. 62 mm²
8. 32 mm²
9. 31 mm²
10. 21 mm²



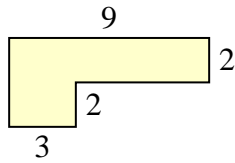
Encuentra el área total de cada figura. La medida está en milímetros (mm). No a escala.

Respuestas

1)

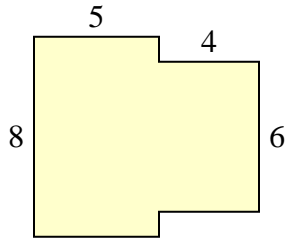


2)

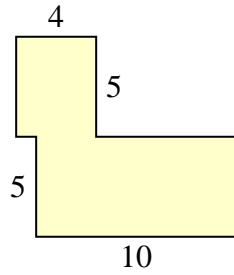


1. _____
2. _____
3. _____
4. _____
5. _____
6. _____
7. _____
8. _____
9. _____
10. _____

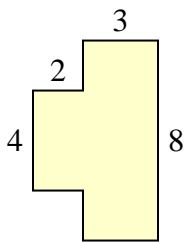
3)



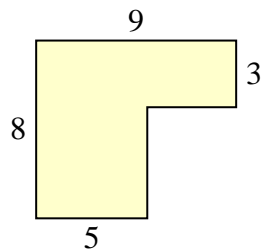
4)



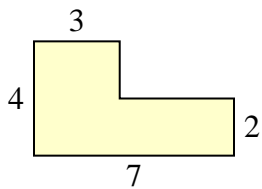
5)



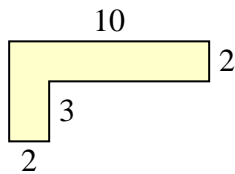
6)



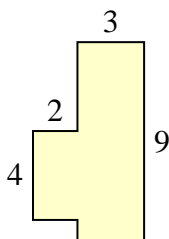
7)



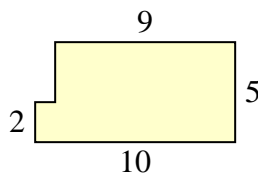
8)



9)

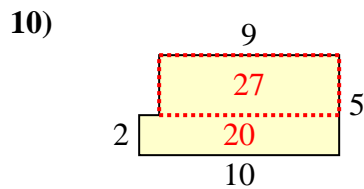
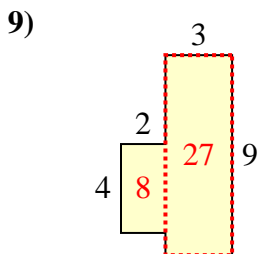
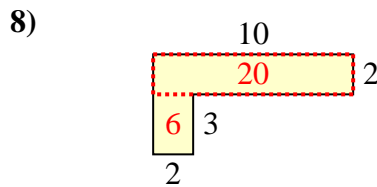
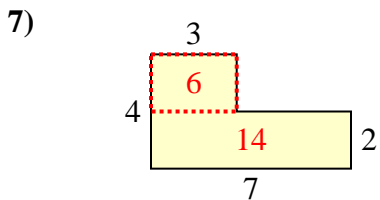
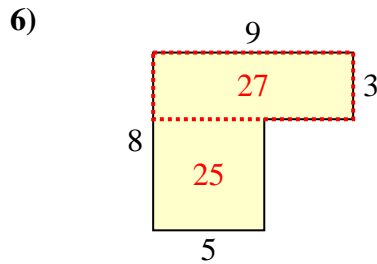
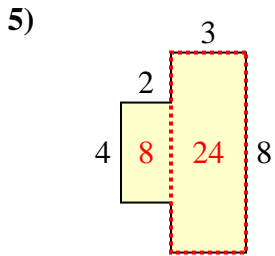
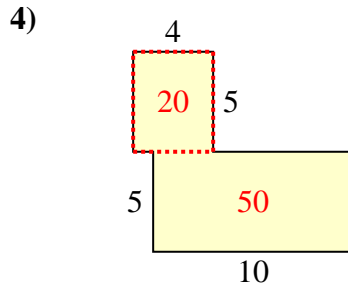
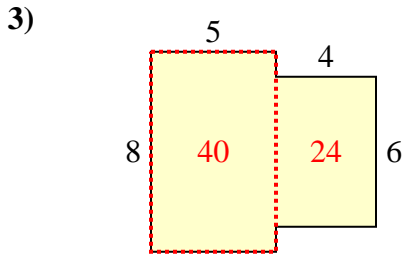
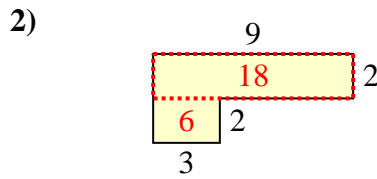
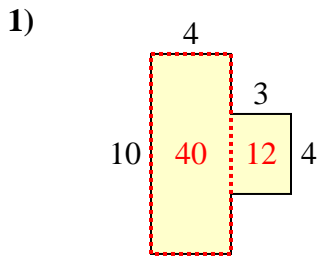


10)





Encuentra el área total de cada figura. La medida está en milímetros (mm). No a escala.



Respuestas

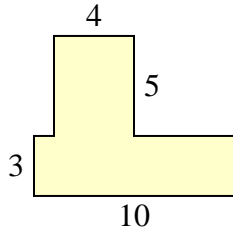
1. 52 mm²
2. 24 mm²
3. 64 mm²
4. 70 mm²
5. 32 mm²
6. 52 mm²
7. 20 mm²
8. 26 mm²
9. 35 mm²
10. 47 mm²



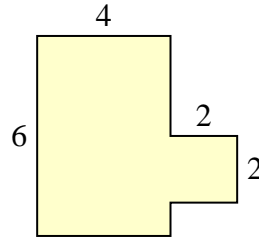
Encuentra el área total de cada figura. La medida está en milímetros (mm). No a escala.

Respuestas

1)



2)



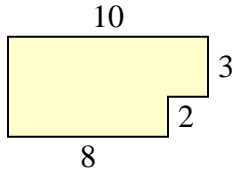
1. _____

2. _____

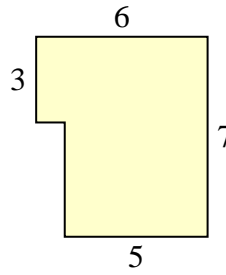
3. _____

4. _____

3)



4)



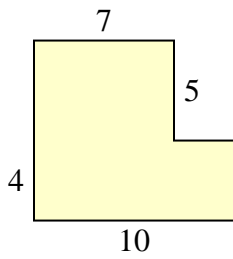
5. _____

6. _____

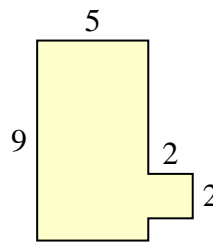
7. _____

8. _____

5)



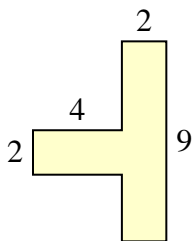
6)



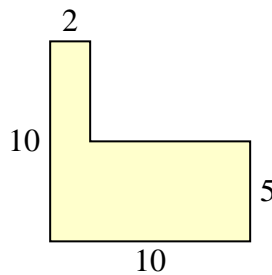
9. _____

10. _____

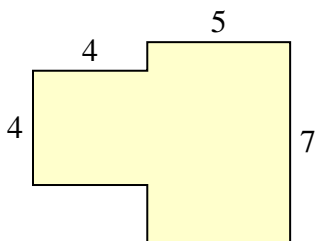
7)



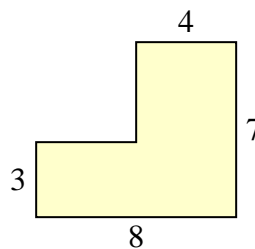
8)



9)



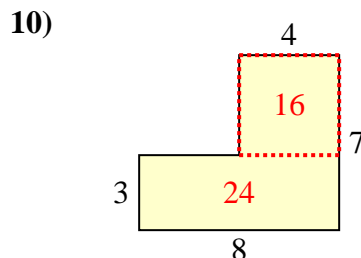
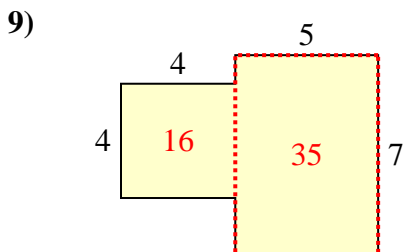
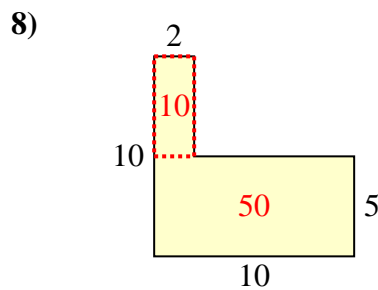
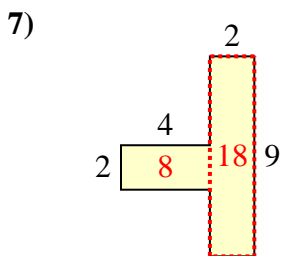
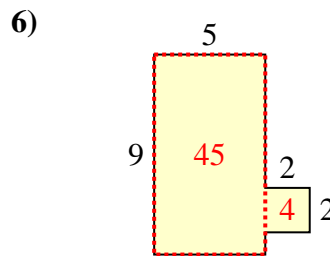
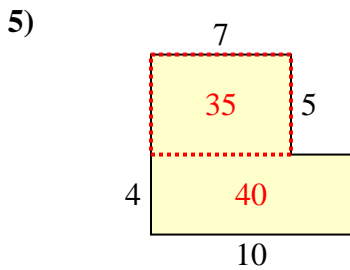
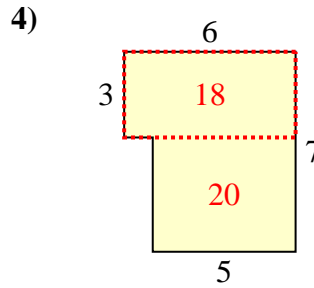
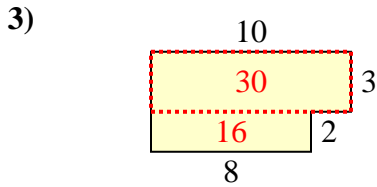
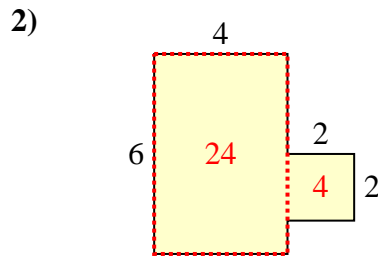
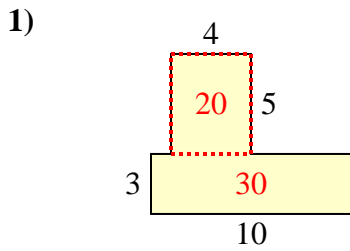
10)





Encuentra el área total de cada figura. La medida está en milímetros (mm). No a escala.

Respuestas

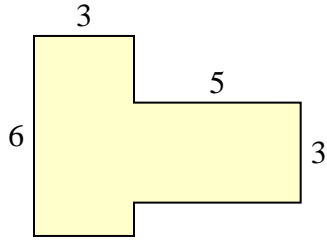


1. 50 mm²
2. 28 mm²
3. 46 mm²
4. 38 mm²
5. 75 mm²
6. 49 mm²
7. 26 mm²
8. 60 mm²
9. 51 mm²
10. 40 mm²

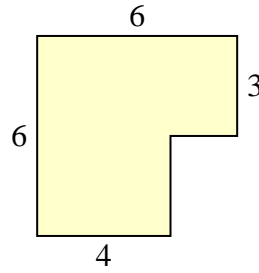


Encuentra el área total de cada figura. La medida está en milímetros (mm). No a escala.

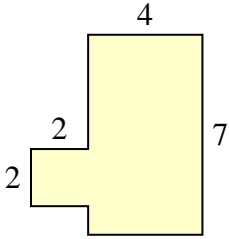
1)



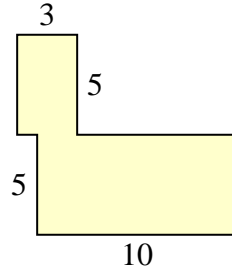
2)



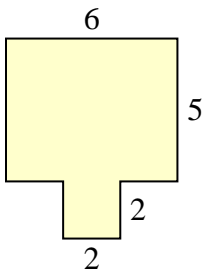
3)



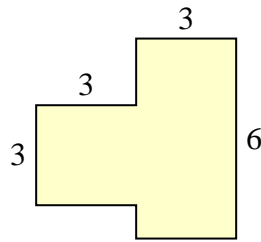
4)



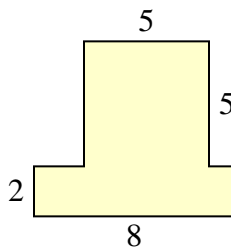
5)



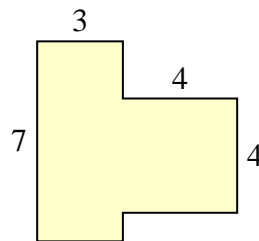
6)



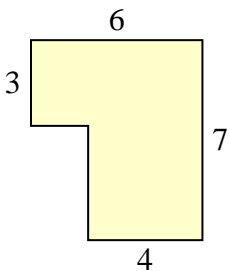
7)



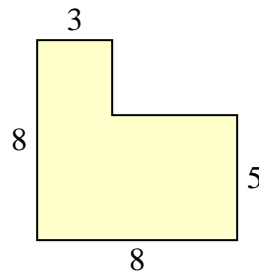
8)



9)



10)



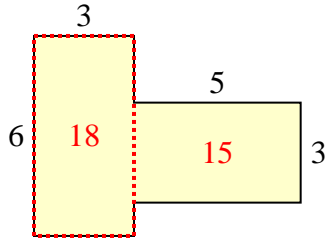
Respuestas

1. _____
2. _____
3. _____
4. _____
5. _____
6. _____
7. _____
8. _____
9. _____
10. _____

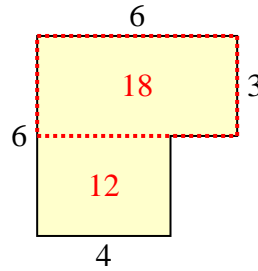


Encuentra el área total de cada figura. La medida está en milímetros (mm). No a escala.

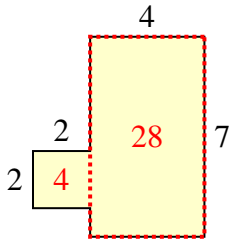
1)



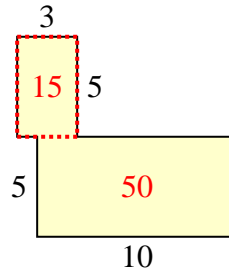
2)



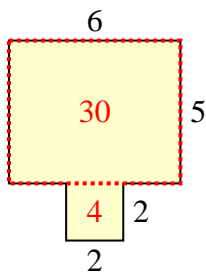
3)



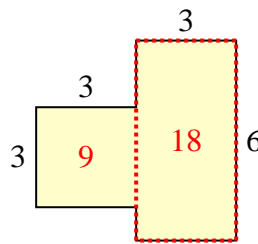
4)



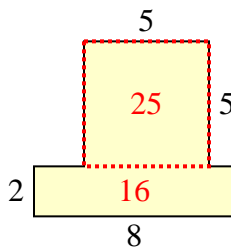
5)



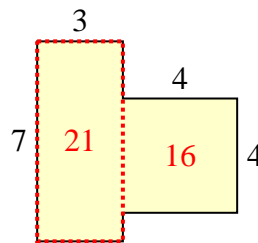
6)



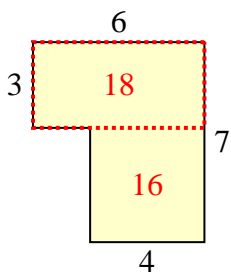
7)



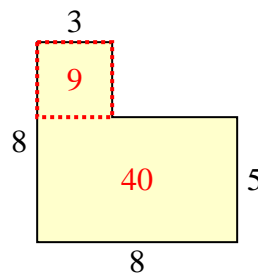
8)



9)



10)



Respuestas

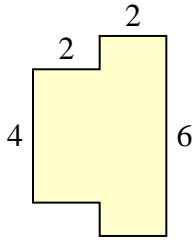
1. 33 mm²
2. 30 mm²
3. 32 mm²
4. 65 mm²
5. 34 mm²
6. 27 mm²
7. 41 mm²
8. 37 mm²
9. 34 mm²
10. 49 mm²



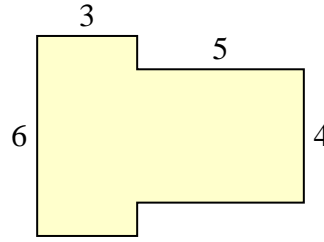
Encuentra el área total de cada figura. La medida está en milímetros (mm). No a escala.

Respuestas

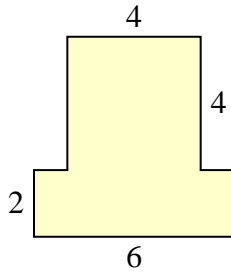
1)



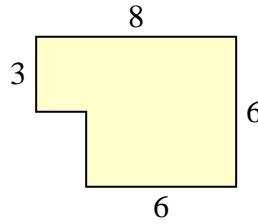
2)



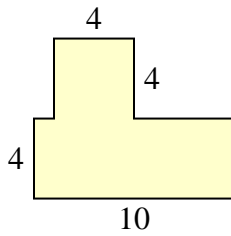
3)



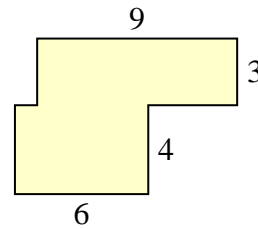
4)



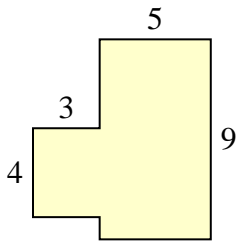
5)



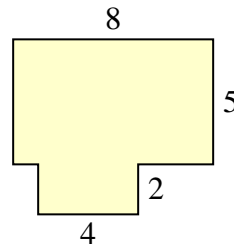
6)



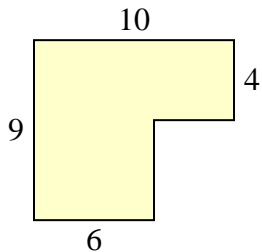
7)



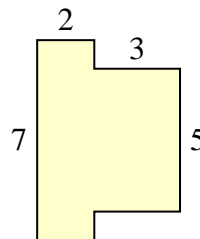
8)



9)



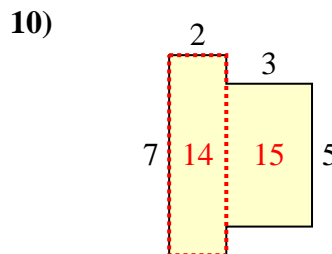
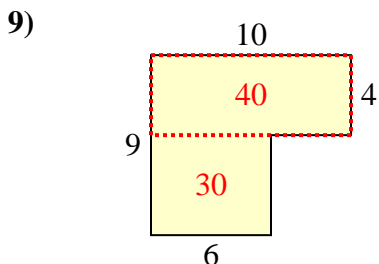
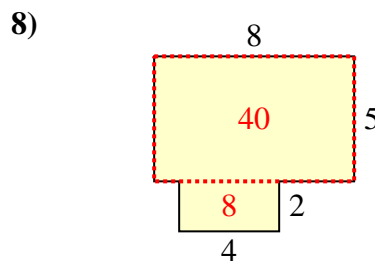
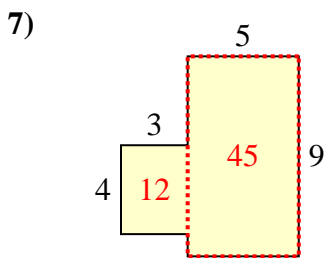
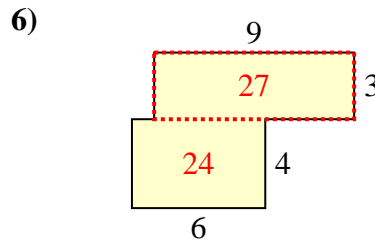
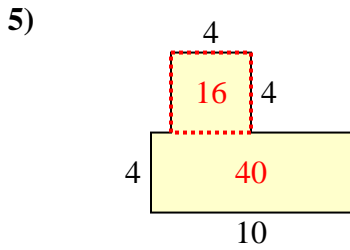
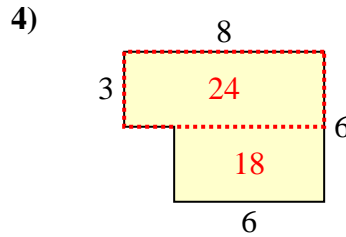
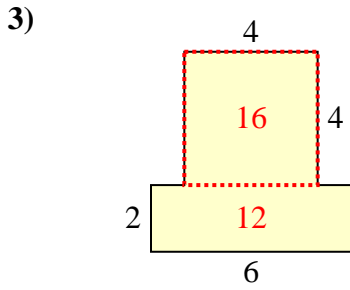
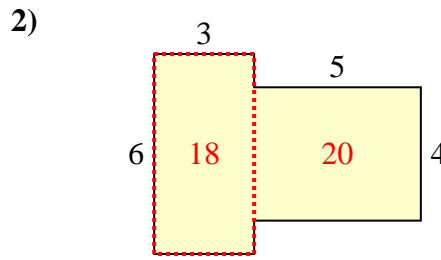
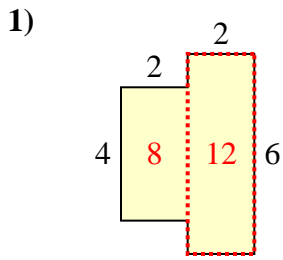
10)



- 1. _____
- 2. _____
- 3. _____
- 4. _____
- 5. _____
- 6. _____
- 7. _____
- 8. _____
- 9. _____
- 10. _____



Encuentra el área total de cada figura. La medida está en milímetros (mm). No a escala.



Respuestas

1. 20 mm²
2. 38 mm²
3. 28 mm²
4. 42 mm²
5. 56 mm²
6. 51 mm²
7. 57 mm²
8. 48 mm²
9. 70 mm²
10. 29 mm²