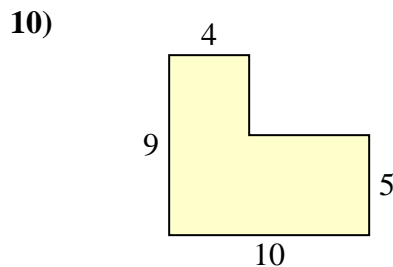
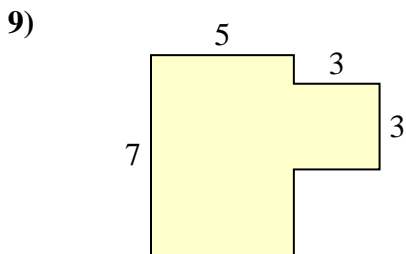
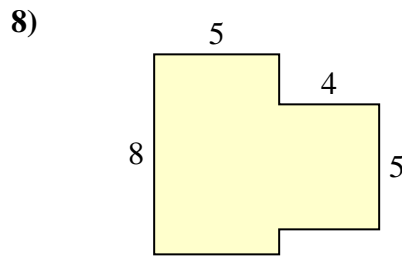
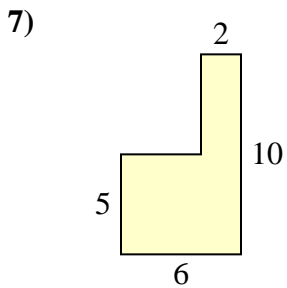
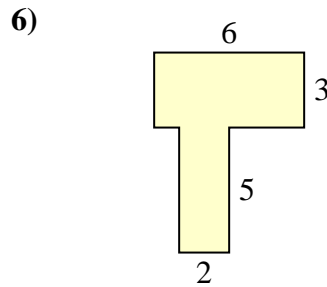
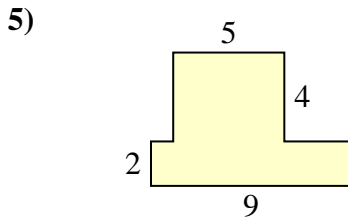
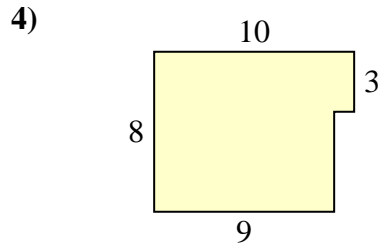
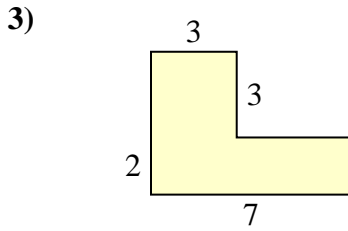
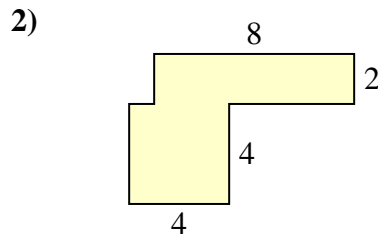
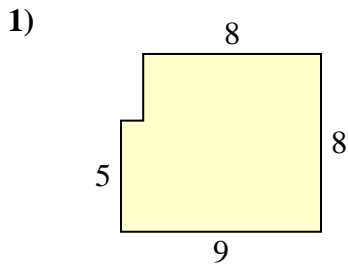




Encuentra el área total de cada figura. La medida está en milímetros (mm). No a escala.

**Respuestas**

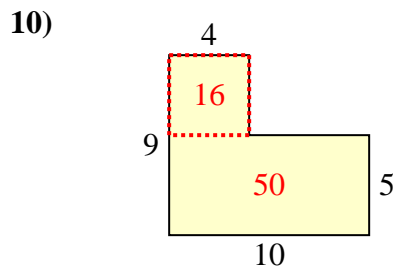
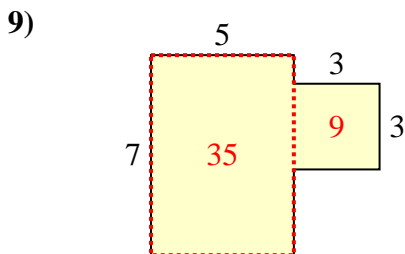
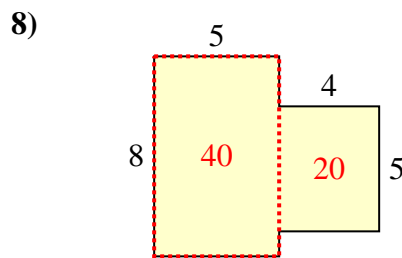
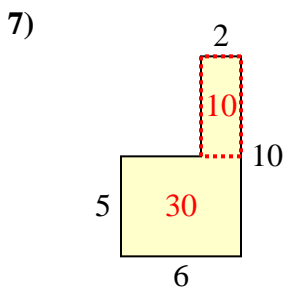
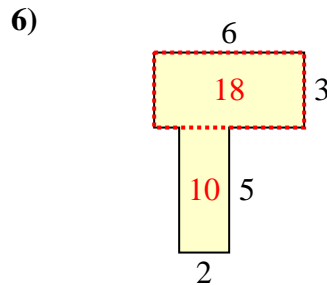
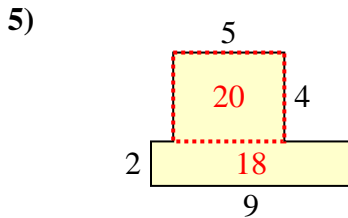
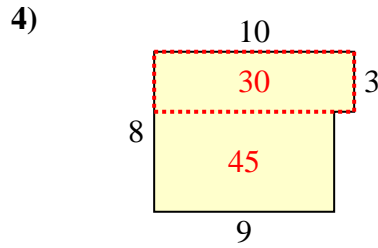
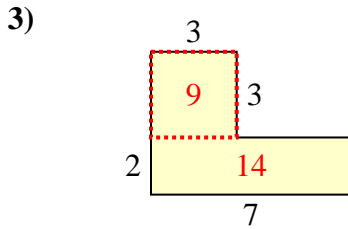
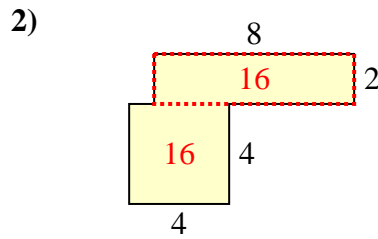
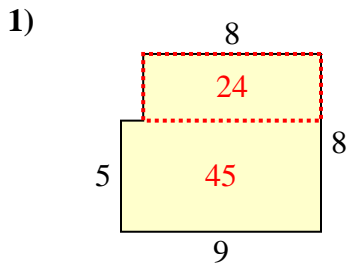


1. \_\_\_\_\_
2. \_\_\_\_\_
3. \_\_\_\_\_
4. \_\_\_\_\_
5. \_\_\_\_\_
6. \_\_\_\_\_
7. \_\_\_\_\_
8. \_\_\_\_\_
9. \_\_\_\_\_
10. \_\_\_\_\_



Encuentra el área total de cada figura. La medida está en milímetros (mm). No a escala.

**Respuestas**



1. 69 mm<sup>2</sup>
2. 32 mm<sup>2</sup>
3. 23 mm<sup>2</sup>
4. 75 mm<sup>2</sup>
5. 38 mm<sup>2</sup>
6. 28 mm<sup>2</sup>
7. 40 mm<sup>2</sup>
8. 60 mm<sup>2</sup>
9. 44 mm<sup>2</sup>
10. 66 mm<sup>2</sup>