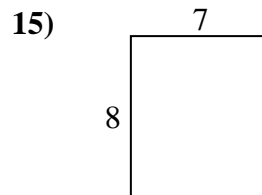
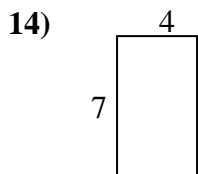
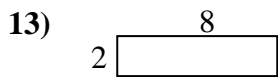
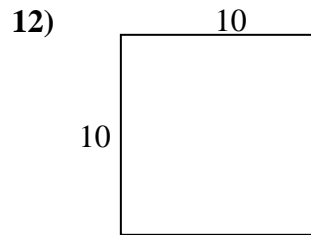
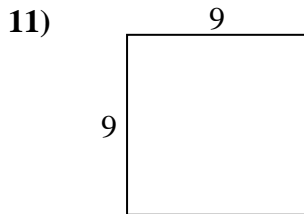
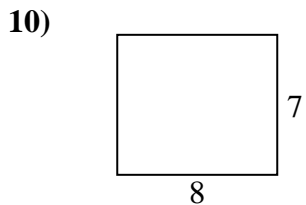
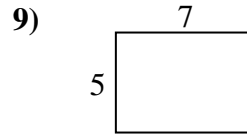
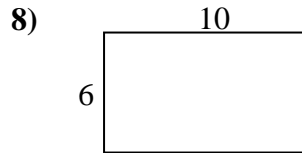
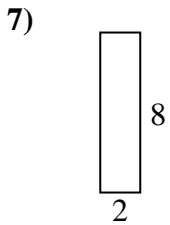
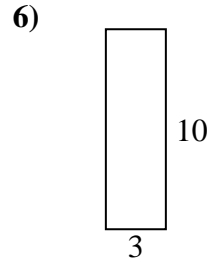
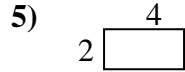
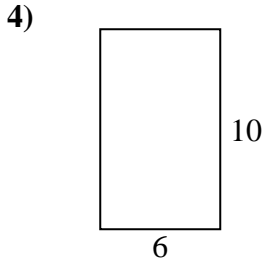
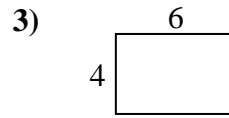
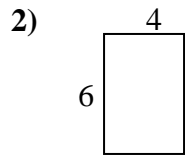
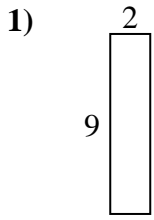




Encuentra el perímetro de cada figura. Cada figura está en pulgadas. No a escala.

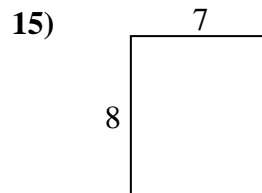
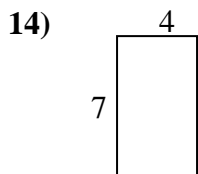
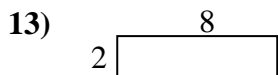
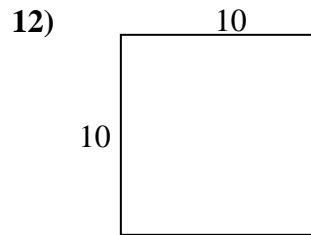
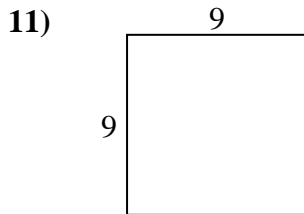
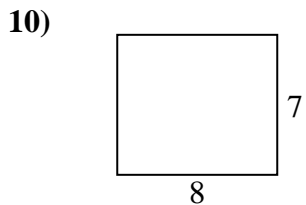
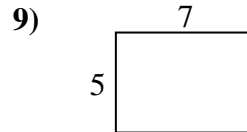
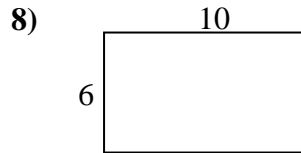
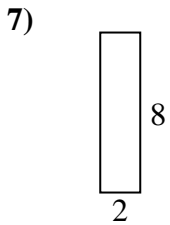
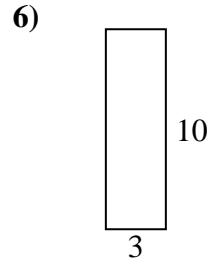
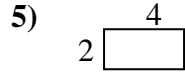
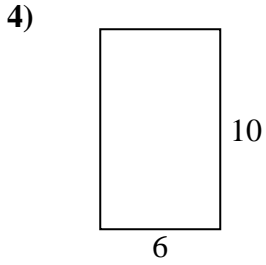
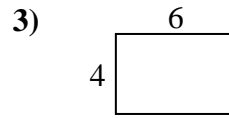
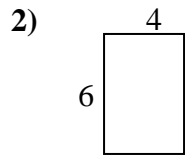
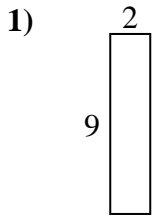


**Respuestas**

1. \_\_\_\_\_
2. \_\_\_\_\_
3. \_\_\_\_\_
4. \_\_\_\_\_
5. \_\_\_\_\_
6. \_\_\_\_\_
7. \_\_\_\_\_
8. \_\_\_\_\_
9. \_\_\_\_\_
10. \_\_\_\_\_
11. \_\_\_\_\_
12. \_\_\_\_\_
13. \_\_\_\_\_
14. \_\_\_\_\_
15. \_\_\_\_\_



Encuentra el perímetro de cada figura. Cada figura está en pulgadas. No a escala.



**Respuestas**

|     |           |            |
|-----|-----------|------------|
| 1.  | <u>22</u> | <u>18</u>  |
| 2.  | <u>20</u> | <u>24</u>  |
| 3.  | <u>20</u> | <u>24</u>  |
| 4.  | <u>32</u> | <u>60</u>  |
| 5.  | <u>12</u> | <u>8</u>   |
| 6.  | <u>26</u> | <u>30</u>  |
| 7.  | <u>20</u> | <u>16</u>  |
| 8.  | <u>32</u> | <u>60</u>  |
| 9.  | <u>24</u> | <u>35</u>  |
| 10. | <u>30</u> | <u>56</u>  |
| 11. | <u>36</u> | <u>81</u>  |
| 12. | <u>40</u> | <u>100</u> |
| 13. | <u>20</u> | <u>16</u>  |
| 14. | <u>22</u> | <u>28</u>  |
| 15. | <u>30</u> | <u>56</u>  |