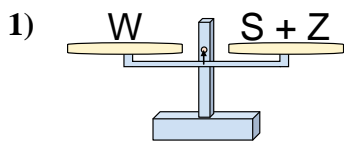


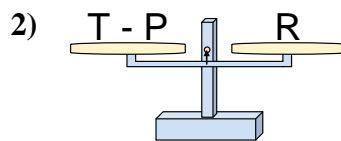


Las escalas mostradas están balanceadas. Determine que enunciado es correcto.

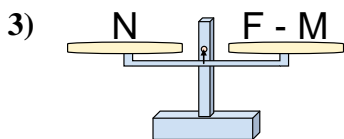
Respuestas



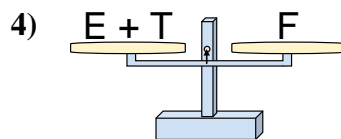
- A. $S = W + Z$
- B. $S = Z + W$
- C. $S = Z - W$
- D. $S = W - Z$



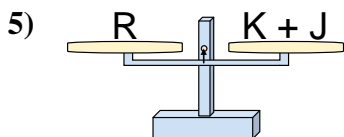
- A. $T = P - R$
- B. $T = R - P$
- C. $T = P + R$
- D. $T = R + R$



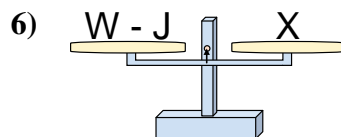
- A. $F = M + N$
- B. $F = M - N$
- C. $F = N - M$
- D. $F = N + N$



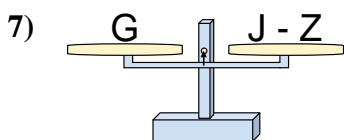
- A. $E = T + F$
- B. $E = F - T$
- C. $E = T - F$
- D. $E = F + T$



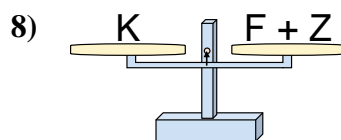
- A. $K = J - R$
- B. $K = J + R$
- C. $K = R - J$
- D. $K = R + J$



- A. $W = J + X$
- B. $W = X - J$
- C. $W = J - X$
- D. $W = X + X$



- A. $J = Z + G$
- B. $J = G - Z$
- C. $J = Z - G$
- D. $J = G + G$



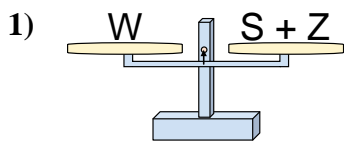
- A. $F = Z - K$
- B. $F = K - Z$
- C. $F = Z + K$
- D. $F = K + Z$

- 1. _____
- 2. _____
- 3. _____
- 4. _____
- 5. _____
- 6. _____
- 7. _____
- 8. _____

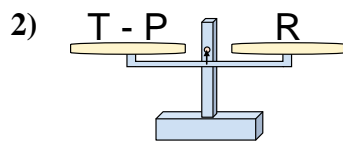


Las escalas mostradas están balanceadas. Determine que enunciado es correcto.

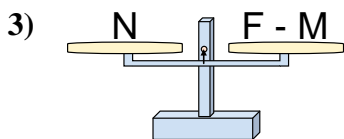
Respuestas



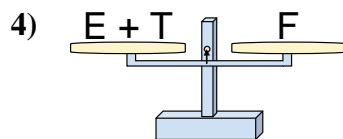
- A. $S = W + Z$
- B. $S = Z + W$
- C. $S = Z - W$
- D. $S = W - Z$



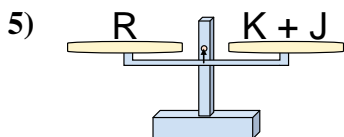
- A. $T = P - R$
- B. $T = R - P$
- C. $T = P + R$
- D. $T = R + R$



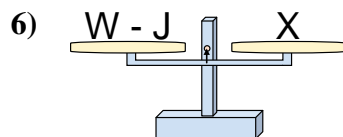
- A. $F = M + N$
- B. $F = M - N$
- C. $F = N - M$
- D. $F = N + N$



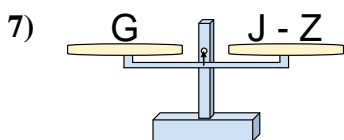
- A. $E = T + F$
- B. $E = F - T$
- C. $E = T - F$
- D. $E = F + T$



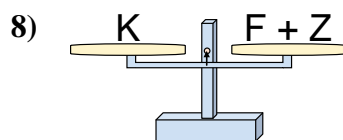
- A. $K = J - R$
- B. $K = J + R$
- C. $K = R - J$
- D. $K = R + J$



- A. $W = J + X$
- B. $W = X - J$
- C. $W = J - X$
- D. $W = X + X$



- A. $J = Z + G$
- B. $J = G - Z$
- C. $J = Z - G$
- D. $J = G + G$



- A. $F = Z - K$
- B. $F = K - Z$
- C. $F = Z + K$
- D. $F = K + Z$

- 1. **D**
- 2. **C**
- 3. **A**
- 4. **B**
- 5. **C**
- 6. **A**
- 7. **A**
- 8. **B**