



Determina cual gráfica pertenece a la tabla.

Respuestas

1)

Gente	
	6,000
	9,000
	1,000
	2,000
	5,000

2)

Gente	
	6,000
	9,000
	5,000
	2,000
	1,000

3)

Gente	
	1,000
	5,000
	9,000
	2,000
	6,000

4)

Gente	
	6,000
	1,000
	5,000
	2,000
	9,000

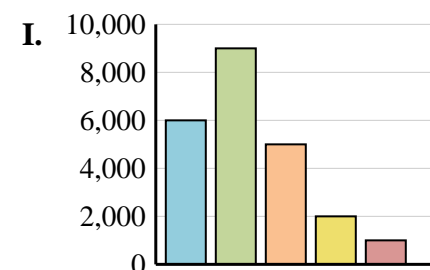
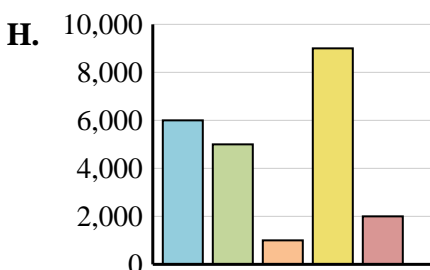
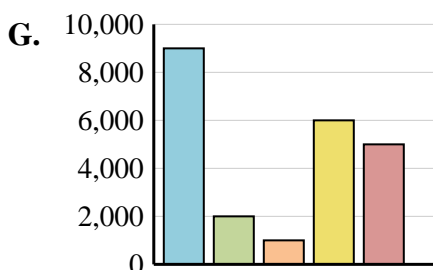
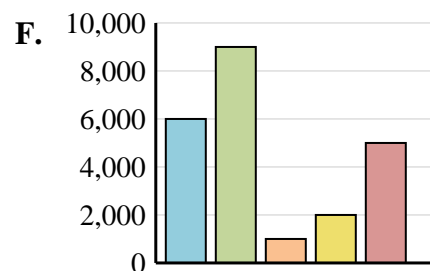
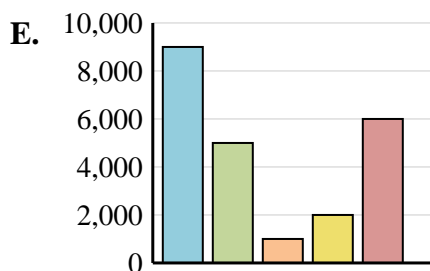
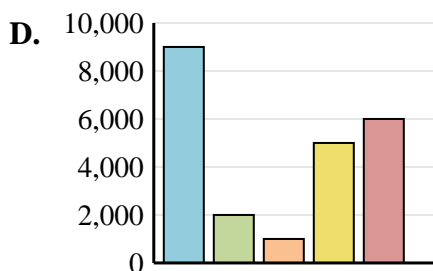
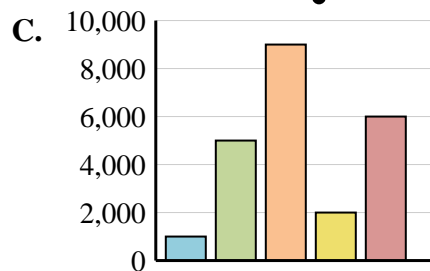
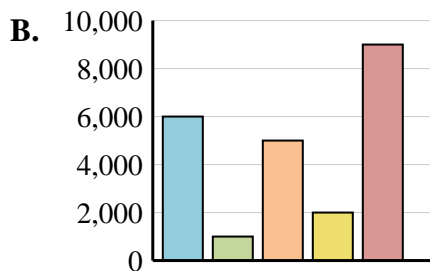
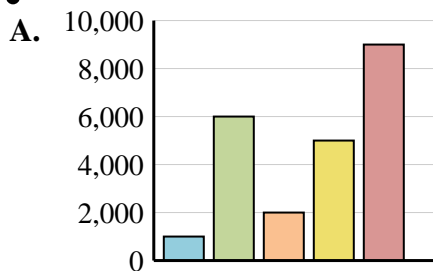
5)

Gente	
	9,000
	2,000
	1,000
	6,000
	5,000

6)

Gente	
	1,000
	6,000
	2,000
	5,000
	9,000

1. _____
2. _____
3. _____
4. _____
5. _____
6. _____





Determina cual gráfica pertenece a la tabla.

Respuestas

1)

Gente	
	6,000
	9,000
	1,000
	2,000
	5,000

2)

Gente	
	6,000
	9,000
	5,000
	2,000
	1,000

3)

Gente	
	1,000
	5,000
	9,000
	2,000
	6,000

4)

Gente	
	6,000
	1,000
	5,000
	2,000
	9,000

5)

Gente	
	9,000
	2,000
	1,000
	6,000
	5,000

6)

Gente	
	1,000
	6,000
	2,000
	5,000
	9,000

1. **F**

2. **I**

3. **C**

4. **B**

5. **G**

6. **A**

