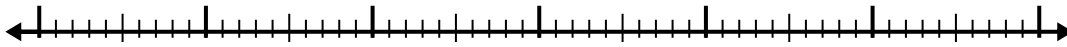


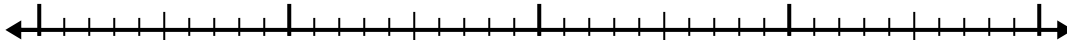


Use la recta numérica para resolver cada problema.

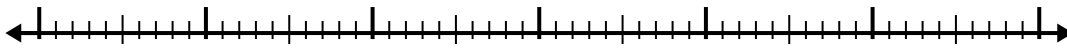
1) $2.7 + 3.1 =$



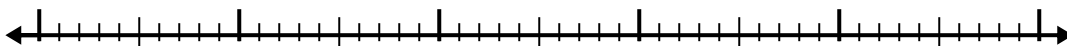
2) $5.1 + 2.3 =$




3) $7.2 + 3.1 =$




4) $3.2 + 3.7 =$



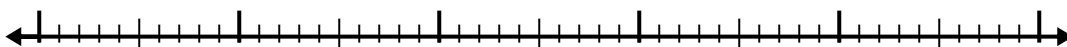
5) $7.6 + 3.6 =$




6) $1.8 + 2.7 =$



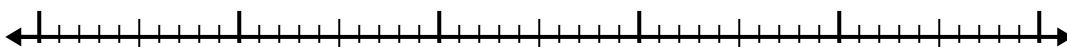
7) $1.7 + 2.4 =$



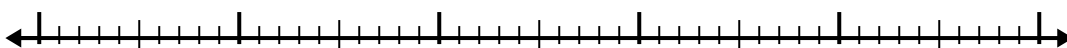
8) $8.8 + 3.6 =$



9) $8.9 + 2.6 =$



10) $5.3 + 3.9 =$



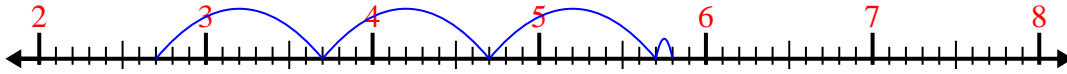
Respuestas

- 1. _____
- 2. _____
- 3. _____
- 4. _____
- 5. _____
- 6. _____
- 7. _____
- 8. _____
- 9. _____
- 10. _____

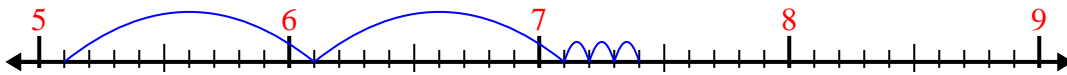


Use la recta numérica para resolver cada problema.

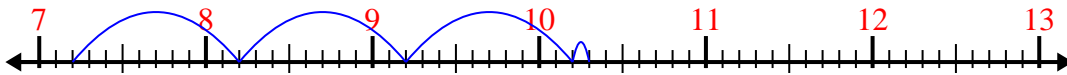
1) $2.7 + 3.1 =$



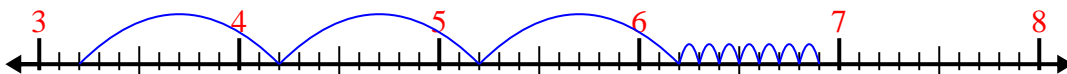
2) $5.1 + 2.3 =$



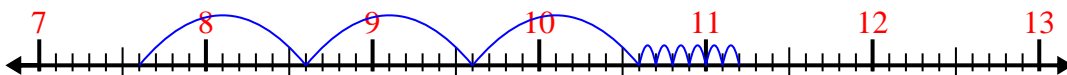
3) $7.2 + 3.1 =$



4) $3.2 + 3.7 =$



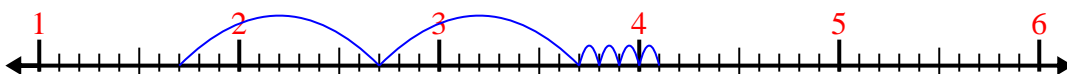
5) $7.6 + 3.6 =$



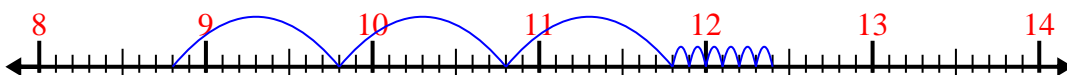
6) $1.8 + 2.7 =$



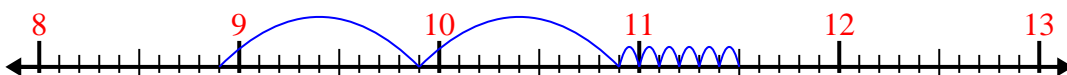
7) $1.7 + 2.4 =$



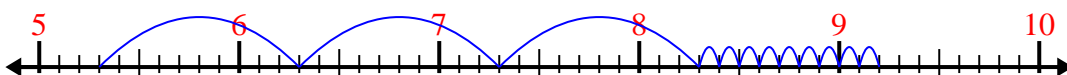
8) $8.8 + 3.6 =$



9) $8.9 + 2.6 =$



10) $5.3 + 3.9 =$



Respuestas

1. 5.8

2. 7.4

3. 10.3

4. 6.9

5. 11.2

6. 4.5

7. 4.1

8. 12.4

9. 11.5

10. 9.2