

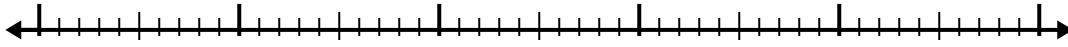


Use la recta numérica para resolver cada problema.

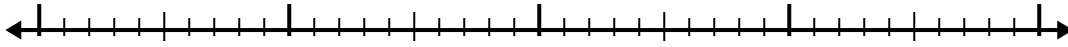
1) $6.5 + 3.2 =$



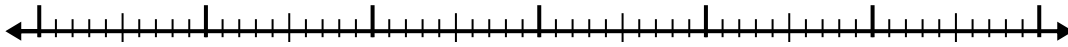
2) $5.3 + 3.8 =$




3) $3.1 + 1.1 =$



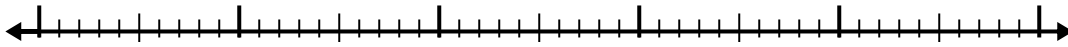
4) $8.4 + 3.2 =$




5) $5.7 + 1.2 =$




6) $2 + 2.8 =$



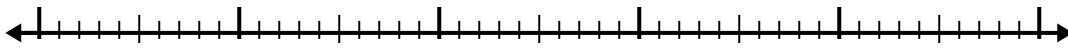
7) $4.2 + 1.8 =$



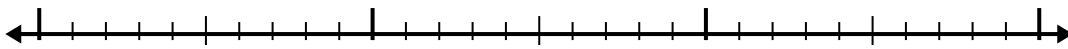
8) $6.6 + 1.4 =$



9) $4.3 + 3.9 =$



10) $1.1 + 1.4 =$



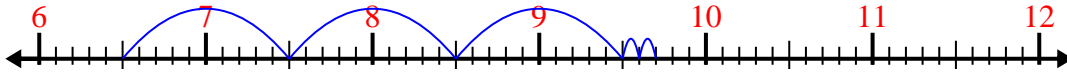
Respuestas

- 1. _____
- 2. _____
- 3. _____
- 4. _____
- 5. _____
- 6. _____
- 7. _____
- 8. _____
- 9. _____
- 10. _____

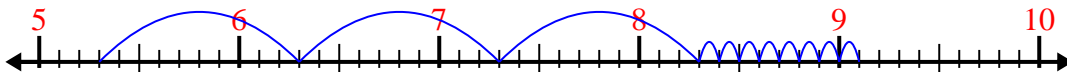


Use la recta numérica para resolver cada problema.

1) $6.5 + 3.2 =$



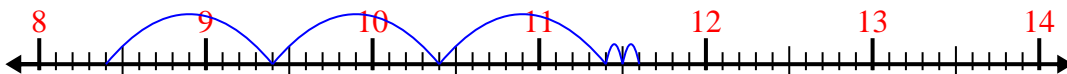
2) $5.3 + 3.8 =$



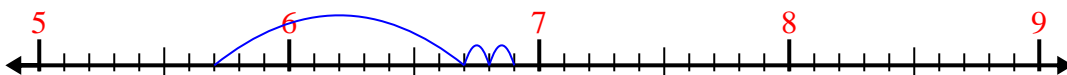
3) $3.1 + 1.1 =$



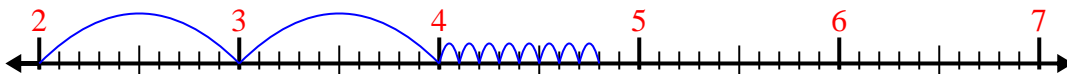
4) $8.4 + 3.2 =$



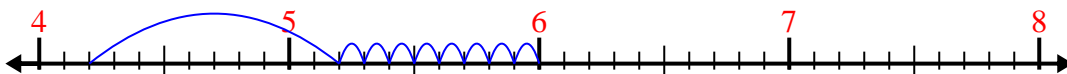
5) $5.7 + 1.2 =$



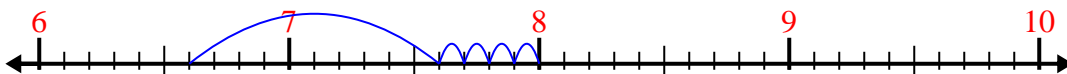
6) $2 + 2.8 =$



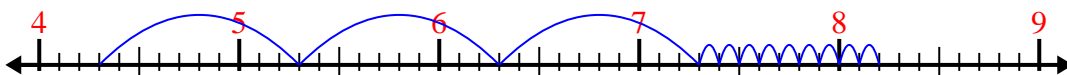
7) $4.2 + 1.8 =$



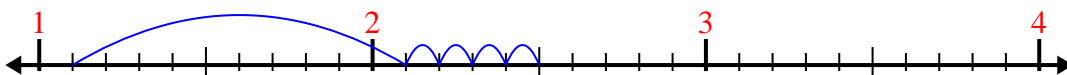
8) $6.6 + 1.4 =$



9) $4.3 + 3.9 =$



10) $1.1 + 1.4 =$



Respuestas

1. 9.7
2. 9.1
3. 4.2
4. 11.6
5. 6.9
6. 4.8
7. 6.0
8. 8.0
9. 8.2
10. 2.5