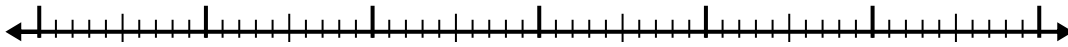


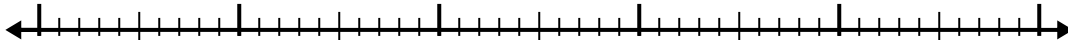


Use la recta numérica para resolver cada problema.

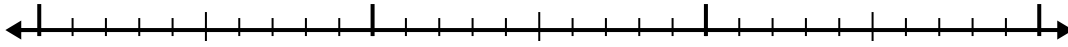
1)  $6 + 3.7 =$



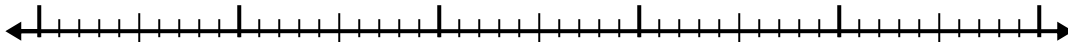
2)  $6.2 + 3.3 =$




3)  $6.8 + 1.5 =$



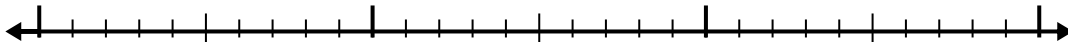
4)  $6.9 + 3.9 =$



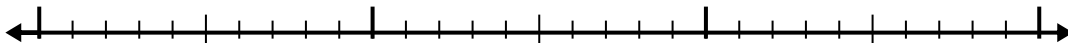
5)  $7.4 + 2.6 =$



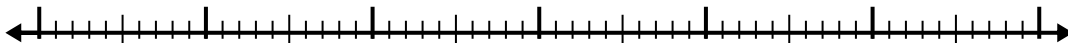
6)  $4.7 + 1.2 =$



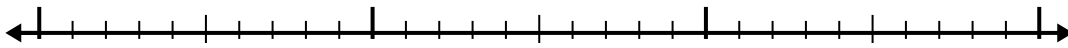
7)  $3.2 + 1.6 =$



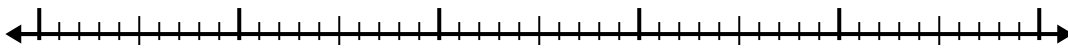
8)  $5.3 + 3.2 =$



9)  $3.7 + 1.4 =$



10)  $6.1 + 3.3 =$



**Respuestas**

1. \_\_\_\_\_

2. \_\_\_\_\_

3. \_\_\_\_\_

4. \_\_\_\_\_

5. \_\_\_\_\_

6. \_\_\_\_\_

7. \_\_\_\_\_

8. \_\_\_\_\_

9. \_\_\_\_\_

10. \_\_\_\_\_

