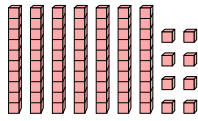
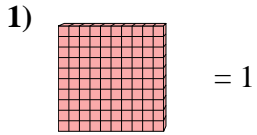


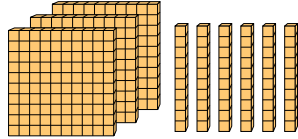
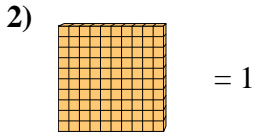


Utilice el bloque de la izquierda para encontrar el valor del conjunto de bloques de la derecha.

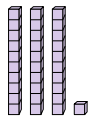
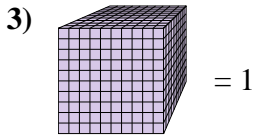
Respuestas



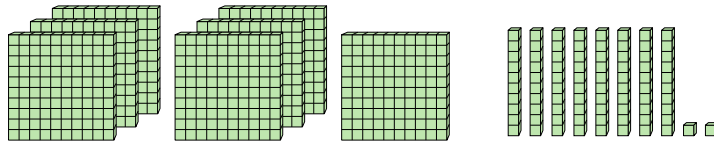
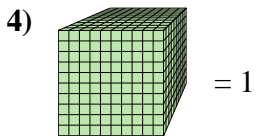
1. _____



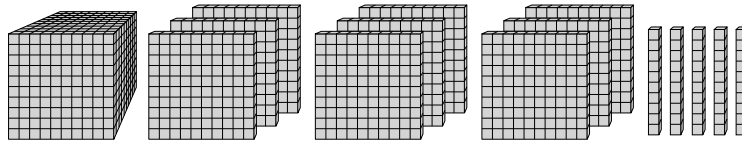
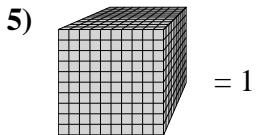
2. _____



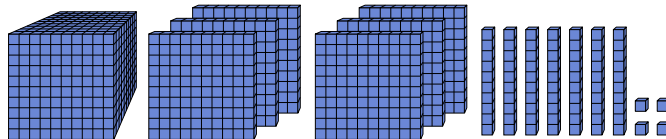
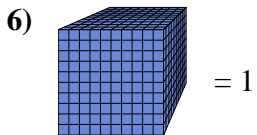
3. _____



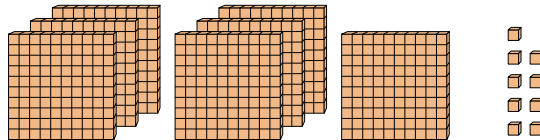
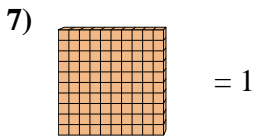
4. _____



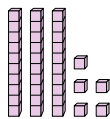
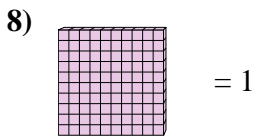
5. _____



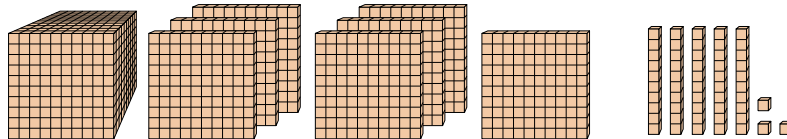
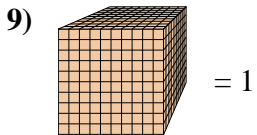
6. _____



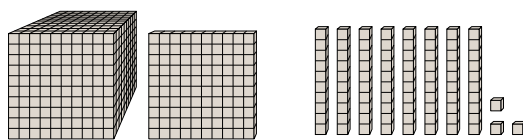
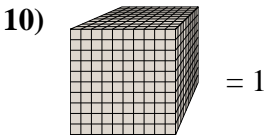
7. _____



8. _____



9. _____



10. _____



Utilice el bloque de la izquierda para encontrar el valor del conjunto de bloques de la derecha.

Respuestas

1) = 1

2) = 1

3) = 1

4) = 1

5) = 1

6) = 1

7) = 1

8) = 1

9) = 1

10) = 1

1. 0.78
2. 3.6
3. 0.031
4. 0.782
5. 1.95
6. 1.674
7. 7.09
8. 0.35
9. 1.753
10. 1.183