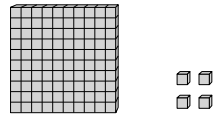
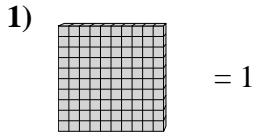


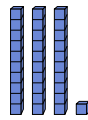
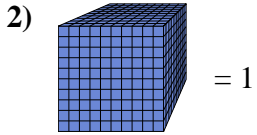


Utilice el bloque de la izquierda para encontrar el valor del conjunto de bloques de la derecha.

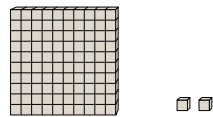
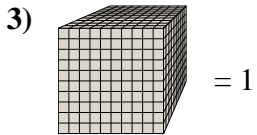
**Respuestas**



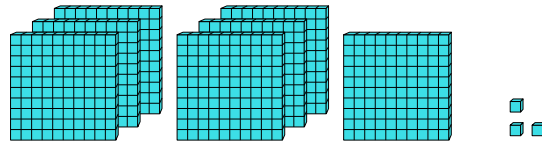
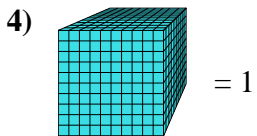
1. \_\_\_\_\_



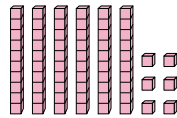
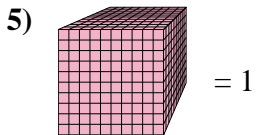
2. \_\_\_\_\_



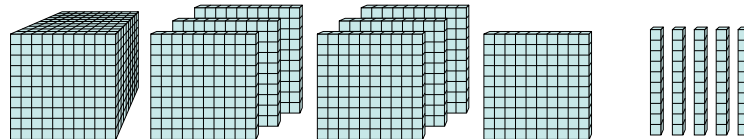
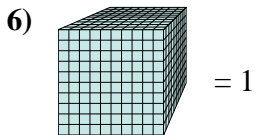
3. \_\_\_\_\_



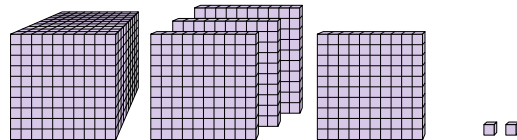
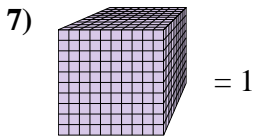
4. \_\_\_\_\_



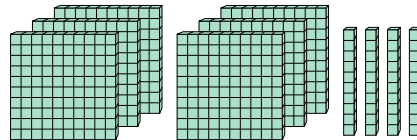
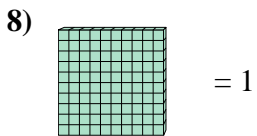
5. \_\_\_\_\_



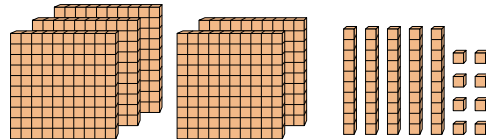
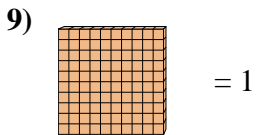
6. \_\_\_\_\_



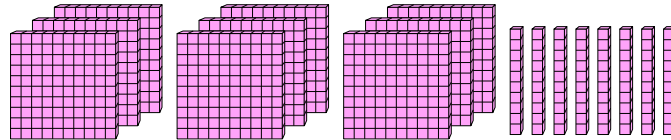
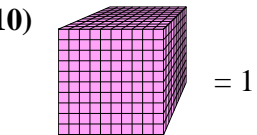
7. \_\_\_\_\_



8. \_\_\_\_\_



9. \_\_\_\_\_

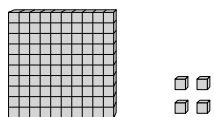
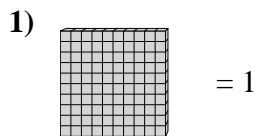


10. \_\_\_\_\_

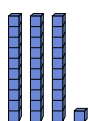
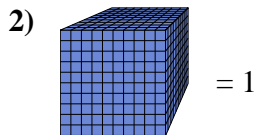


Utilice el bloque de la izquierda para encontrar el valor del conjunto de bloques de la derecha.

**Respuestas**


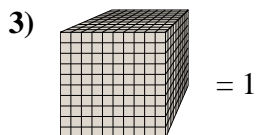


1. 1.04



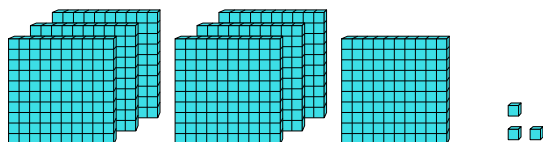
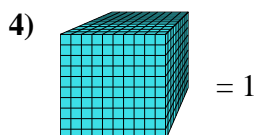
2. 0.031

3. 0.102



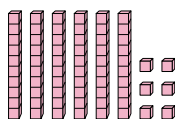
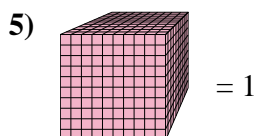
4. 0.703

5. 0.066



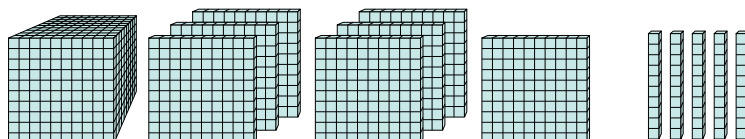
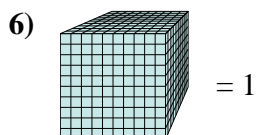
6. 1.75

7. 1.402



8. 6.4

9. 5.58



10. 0.98

