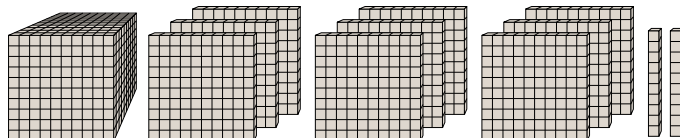
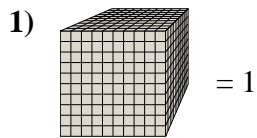


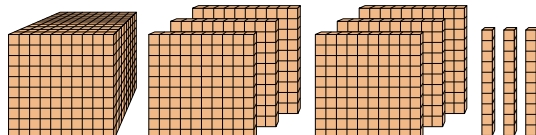
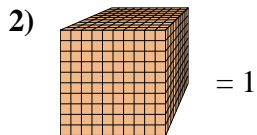


Utilice el bloque de la izquierda para encontrar el valor del conjunto de bloques de la derecha.

Respuestas

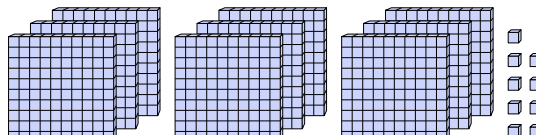
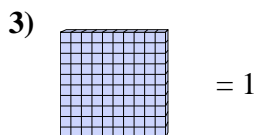


1. _____



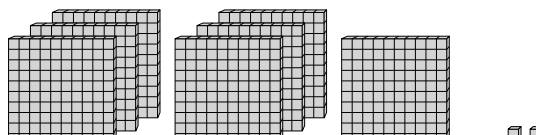
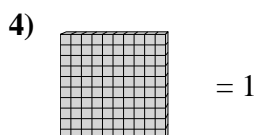
2. _____

3. _____



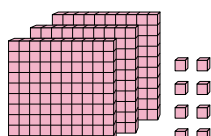
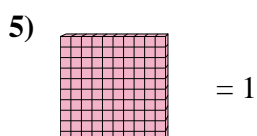
4. _____

5. _____



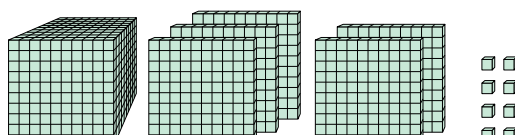
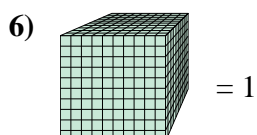
6. _____

7. _____

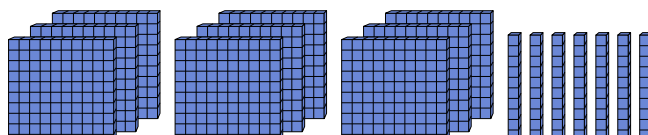
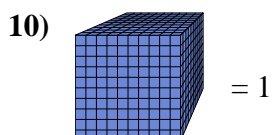
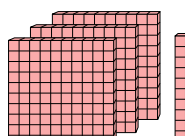
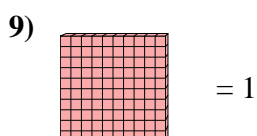
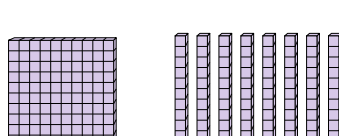
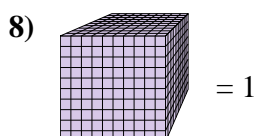
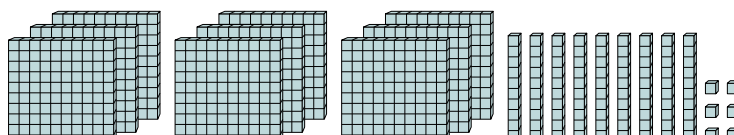
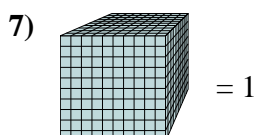


8. _____

9. _____



10. _____





Utilice el bloque de la izquierda para encontrar el valor del conjunto de bloques de la derecha.

Respuestas

1) = 1

2) = 1

3) = 1

4) = 1

5) = 1

6) = 1

7) = 1

8) = 1

9) = 1

10) = 1

1. 1.92
2. 1.63
3. 9.09
4. 7.02
5. 3.08
6. 1.508
7. 0.996
8. 0.18
9. 3.1
10. 0.97