



Usa el modelo visual para resolver cada problema.

1) $0.5 \times 0.6 =$



2) $0.9 \times 0.6 =$



3) $0.1 \times 0.7 =$



4) $0.1 \times 0.3 =$



5) $0.7 \times 0.3 =$



6) $0.1 \times 0.2 =$



7) $0.6 \times 0.9 =$




8) $0.9 \times 0.3 =$



9) $0.5 \times 0.2 =$



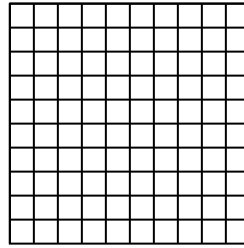
10) $0.4 \times 0.6 =$




11) $0.5 \times 0.3 =$




12) $0.3 \times 0.3 =$



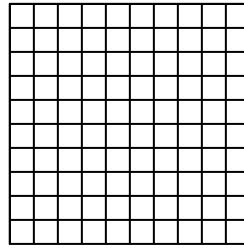
13) $0.5 \times 0.4 =$



14) $0.3 \times 0.1 =$



15) $0.4 \times 0.1 =$



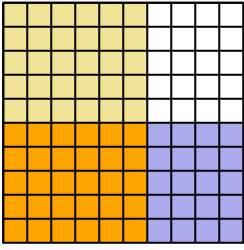
Respuestas

1. _____
2. _____
3. _____
4. _____
5. _____
6. _____
7. _____
8. _____
9. _____
10. _____
11. _____
12. _____
13. _____
14. _____
15. _____

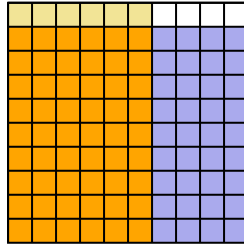


Usa el modelo visual para resolver cada problema.

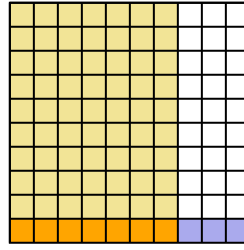
1) $0.5 \times 0.6 =$



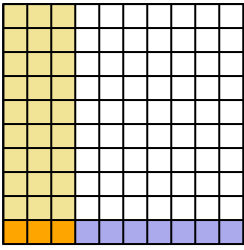
2) $0.9 \times 0.6 =$



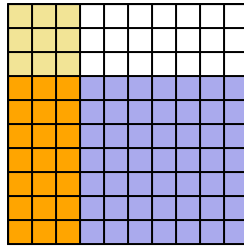
3) $0.1 \times 0.7 =$



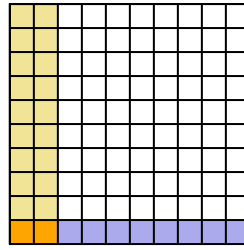
4) $0.1 \times 0.3 =$



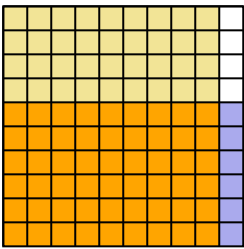
5) $0.7 \times 0.3 =$



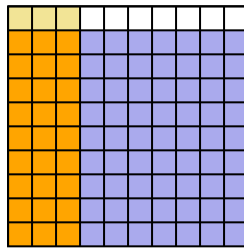
6) $0.1 \times 0.2 =$



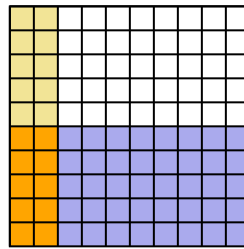
7) $0.6 \times 0.9 =$



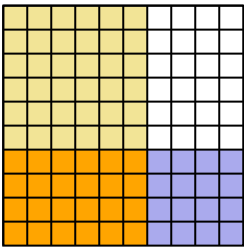
8) $0.9 \times 0.3 =$



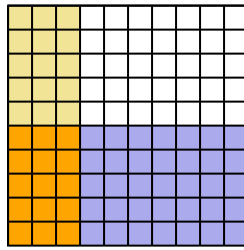
9) $0.5 \times 0.2 =$



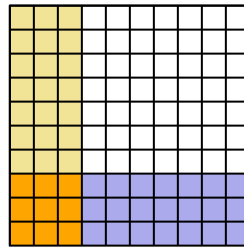
10) $0.4 \times 0.6 =$



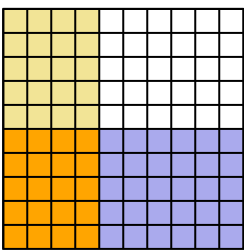
11) $0.5 \times 0.3 =$



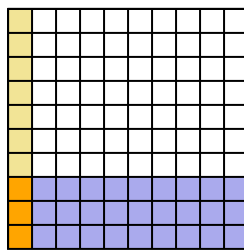
12) $0.3 \times 0.3 =$



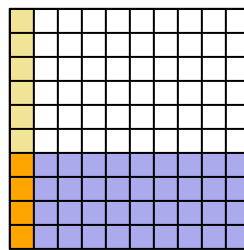
13) $0.5 \times 0.4 =$



14) $0.3 \times 0.1 =$



15) $0.4 \times 0.1 =$



Respuestas

1. $\frac{30}{100} = 0.3$

2. $\frac{54}{100} = 0.54$

3. $\frac{7}{100} = 0.07$

4. $\frac{3}{100} = 0.03$

5. $\frac{21}{100} = 0.21$

6. $\frac{2}{100} = 0.02$

7. $\frac{54}{100} = 0.54$

8. $\frac{27}{100} = 0.27$

9. $\frac{10}{100} = 0.1$

10. $\frac{24}{100} = 0.24$

11. $\frac{15}{100} = 0.15$

12. $\frac{9}{100} = 0.09$

13. $\frac{20}{100} = 0.2$

14. $\frac{3}{100} = 0.03$

15. $\frac{4}{100} = 0.04$