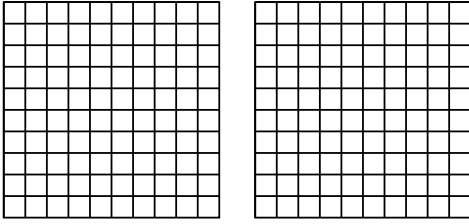


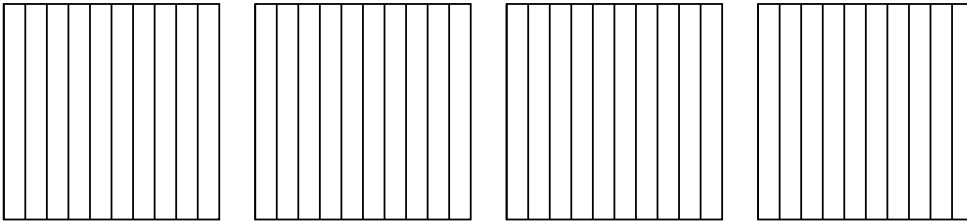


Usa el modelo visual para resolver cada problema.

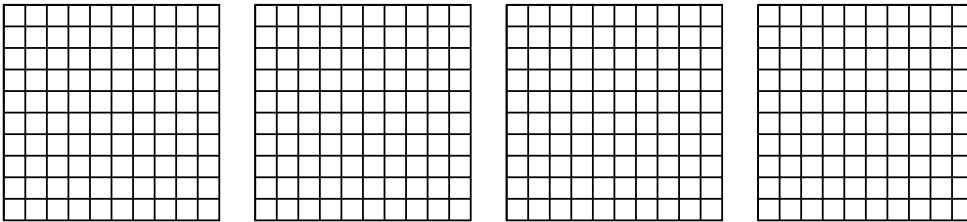
1) $2 \times 0.79 =$



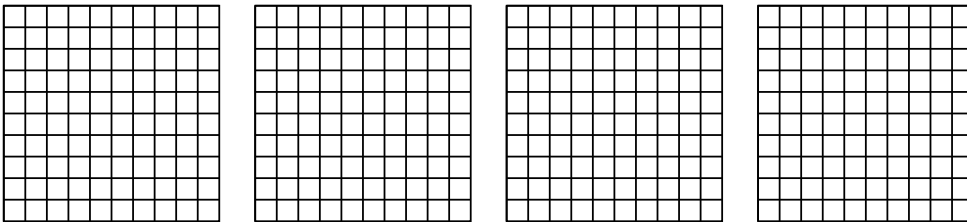
2) $4 \times 0.5 =$



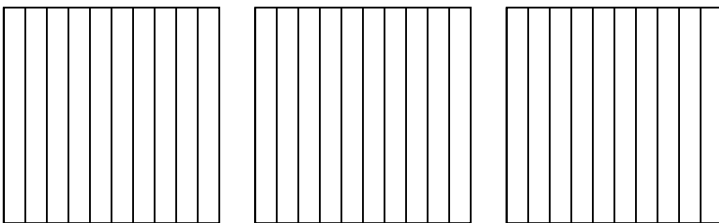
3) $4 \times 0.25 =$



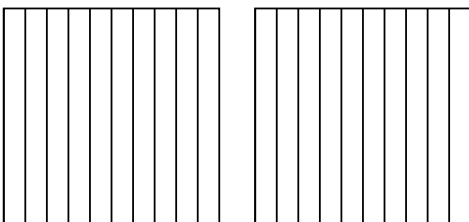
4) $4 \times 0.49 =$



5) $3 \times 0.2 =$



6) $2 \times 0.2 =$



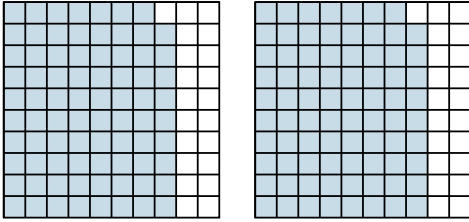
Respuestas

- 1. _____
- 2. _____
- 3. _____
- 4. _____
- 5. _____
- 6. _____

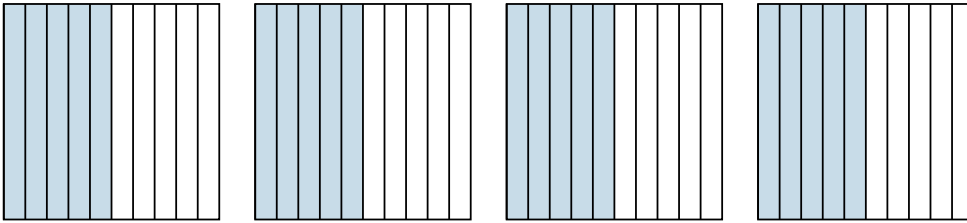


Usa el modelo visual para resolver cada problema.

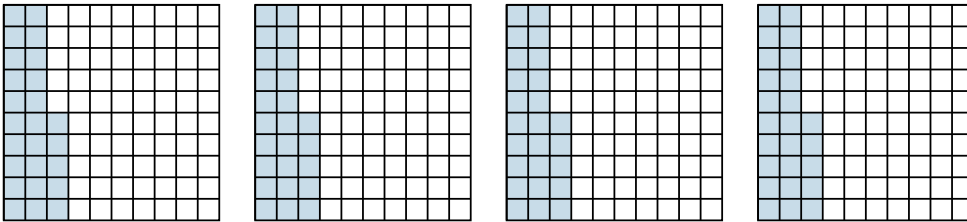
1) $2 \times 0.79 =$



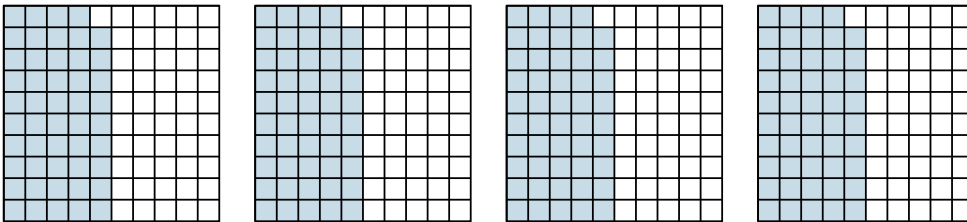
2) $4 \times 0.5 =$




3) $4 \times 0.25 =$



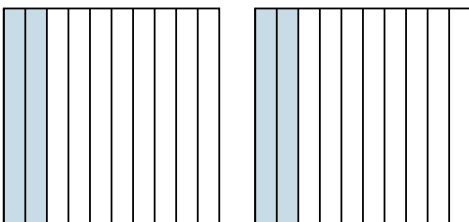
4) $4 \times 0.49 =$



5) $3 \times 0.2 =$



6) $2 \times 0.2 =$



Respuestas

1. $\frac{158}{100} = 1.58$

2. $\frac{20}{10} = 2$

3. $\frac{100}{100} = 1$

4. $\frac{196}{100} = 1.96$

5. $\frac{6}{10} = 0.6$

6. $\frac{4}{10} = 0.4$