
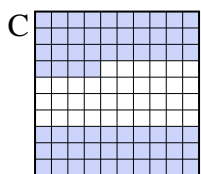

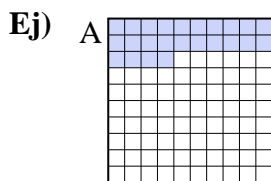




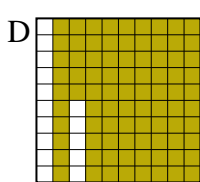
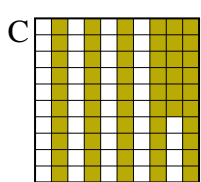
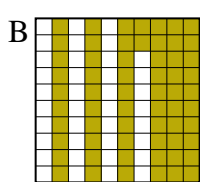
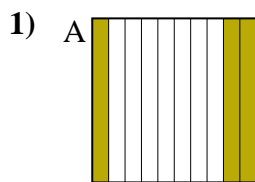
Pon las cajas en orden de la menor a la mayor basado en la cantidad sombreada.

Respuestas



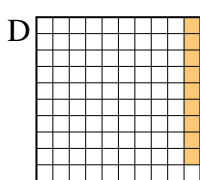
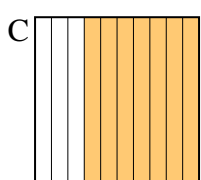
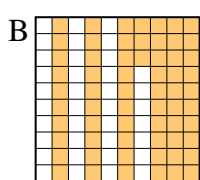
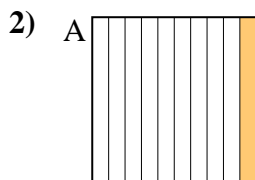
menor 0.2 - D
0.24 - A
0.4 - B
 mayor 0.64 - C

Ej. **D,A,B,C**



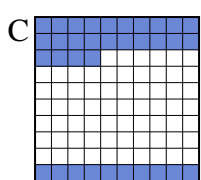
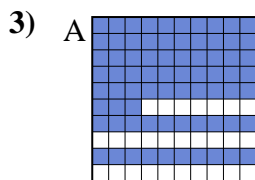
menor _____

 mayor _____



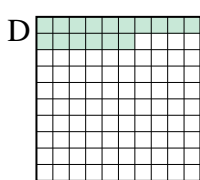
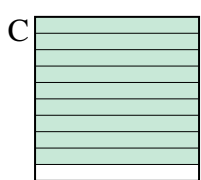
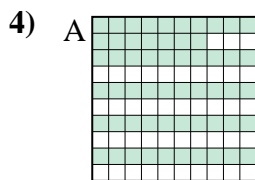
menor _____

 mayor _____



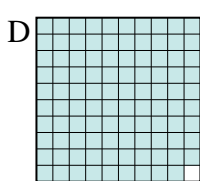
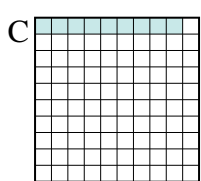

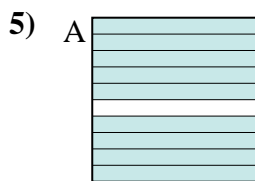
menor _____

 mayor _____



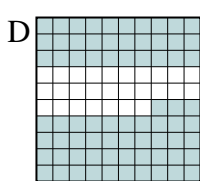
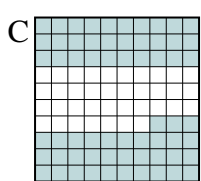
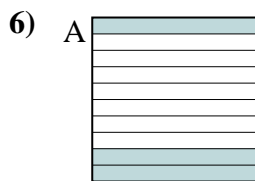
menor _____

 mayor _____



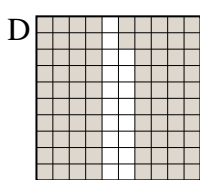
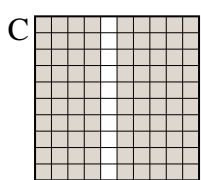
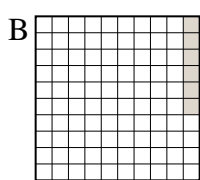
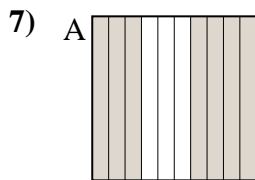
menor _____

 mayor _____



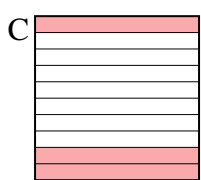
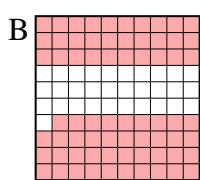
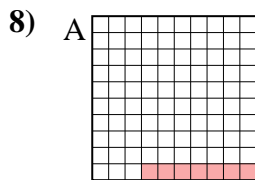
menor _____

 mayor _____



menor _____

 mayor _____



menor _____

 mayor _____

1. _____
2. _____
3. _____
4. _____
5. _____
6. _____
7. _____
8. _____



Pon las cajas en orden de la menor a la mayor basado en la cantidad sombreada.

Ej)	A	B	C	D	menor <u>0.2 - D</u> <u>0.24 - A</u> <u>0.4 - B</u> mayor <u>0.64 - C</u>
1)	A	B	C	D	menor <u>0.3 - A</u> <u>0.56 - C</u> <u>0.62 - B</u> mayor <u>0.85 - D</u>
2)	A	B	C	D	menor <u>0.09 - D</u> <u>0.1 - A</u> <u>0.63 - B</u> mayor <u>0.7 - C</u>
3)	A	B	C	D	menor <u>0.3 - B</u> <u>0.34 - C</u> <u>0.7 - D</u> mayor <u>0.73 - A</u>
4)	A	B	C	D	menor <u>0.16 - D</u> <u>0.4 - B</u> <u>0.57 - A</u> mayor <u>0.9 - C</u>
5)	A	B	C	D	menor <u>0.09 - C</u> <u>0.3 - B</u> <u>0.9 - A</u> mayor <u>0.99 - D</u>
6)	A	B	C	D	menor <u>0.3 - A</u> <u>0.4 - B</u> <u>0.63 - C</u> mayor <u>0.73 - D</u>
7)	A	B	C	D	menor <u>0.06 - B</u> <u>0.7 - A</u> <u>0.82 - D</u> mayor <u>0.9 - C</u>
8)	A	B	C	D	menor <u>0.07 - A</u> <u>0.2 - D</u> <u>0.3 - C</u> mayor <u>0.69 - B</u>

Respuestas

- Ej. D,A,B,C
1. A,C,B,D
2. D,A,B,C
3. B,C,D,A
4. D,B,A,C
5. C,B,A,D
6. A,B,C,D
7. B,A,D,C
8. A,D,C,B