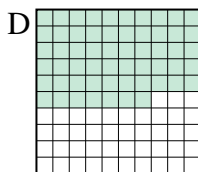
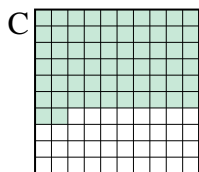

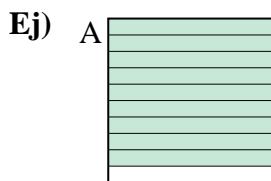




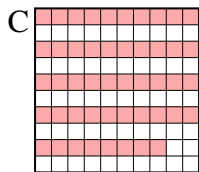

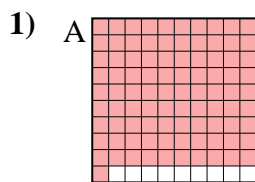
Pon las cajas en orden de la menor a la mayor basado en la cantidad sombreada.

**Respuestas**

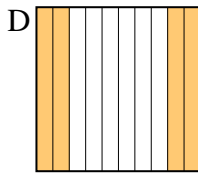
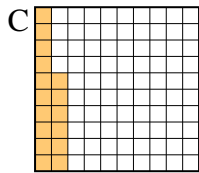
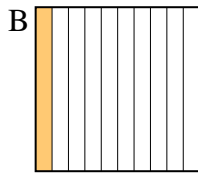
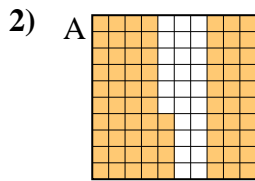


menor 0.05 - B  
0.57 - D  
0.62 - C  
 mayor 0.9 - A

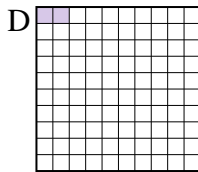
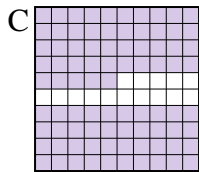

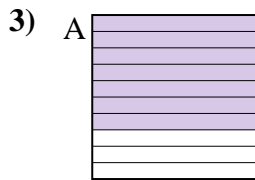
Ej. **B,D,C,A**



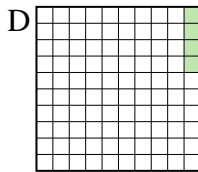
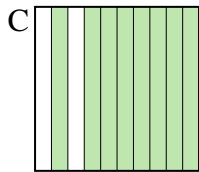
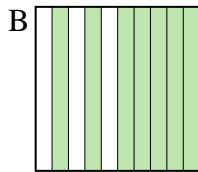
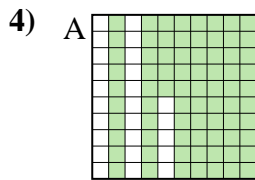
menor \_\_\_\_\_  
 mayor \_\_\_\_\_



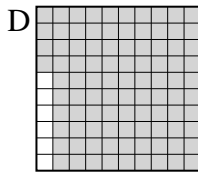
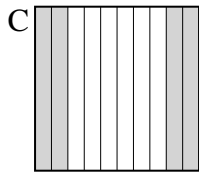
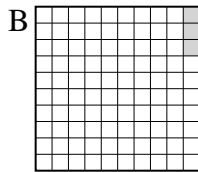
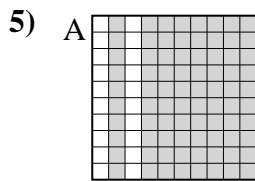
menor \_\_\_\_\_  
 mayor \_\_\_\_\_





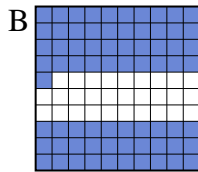
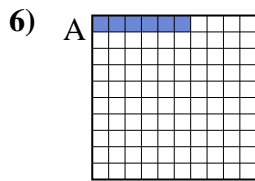
menor \_\_\_\_\_  
 mayor \_\_\_\_\_



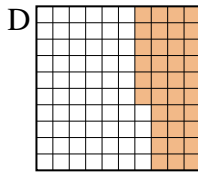
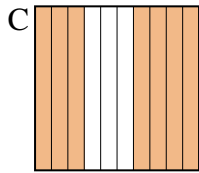
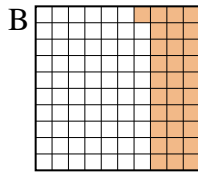
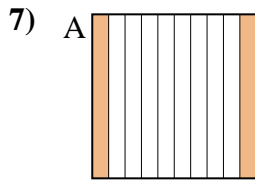
menor \_\_\_\_\_  
 mayor \_\_\_\_\_



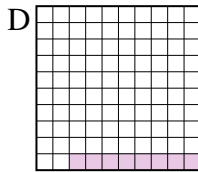
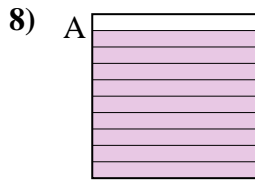
menor \_\_\_\_\_  
 mayor \_\_\_\_\_



menor \_\_\_\_\_  
 mayor \_\_\_\_\_



menor \_\_\_\_\_  
 mayor \_\_\_\_\_



menor \_\_\_\_\_  
 mayor \_\_\_\_\_

1. \_\_\_\_\_
2. \_\_\_\_\_
3. \_\_\_\_\_
4. \_\_\_\_\_
5. \_\_\_\_\_
6. \_\_\_\_\_
7. \_\_\_\_\_
8. \_\_\_\_\_



Pon las cajas en orden de la menor a la mayor basado en la cantidad sombreada.

Ej)	A	B	C	D	menor <u>0.05 - B</u> <u>0.57 - D</u> <u>0.62 - C</u> mayor <u>0.9 - A</u>
1)	A	B	C	D	menor <u>0.48 - C</u> <u>0.5 - B</u> <u>0.6 - D</u> mayor <u>0.91 - A</u>
2)	A	B	C	D	menor <u>0.1 - B</u> <u>0.16 - C</u> <u>0.4 - D</u> mayor <u>0.74 - A</u>
3)	A	B	C	D	menor <u>0.02 - D</u> <u>0.1 - B</u> <u>0.7 - A</u> mayor <u>0.85 - C</u>
4)	A	B	C	D	menor <u>0.04 - D</u> <u>0.7 - B</u> <u>0.75 - A</u> mayor <u>0.8 - C</u>
5)	A	B	C	D	menor <u>0.03 - B</u> <u>0.4 - C</u> <u>0.8 - A</u> mayor <u>0.94 - D</u>
6)	A	B	C	D	menor <u>0.06 - A</u> <u>0.6 - C</u> <u>0.7 - D</u> mayor <u>0.71 - B</u>
7)	A	B	C	D	menor <u>0.2 - A</u> <u>0.31 - B</u> <u>0.36 - D</u> mayor <u>0.7 - C</u>
8)	A	B	C	D	menor <u>0.08 - D</u> <u>0.3 - C</u> <u>0.4 - B</u> mayor <u>0.9 - A</u>

**Respuestas**

- Ej. B,D,C,A
1. C,B,D,A
2. B,C,D,A
3. D,B,A,C
4. D,B,A,C
5. B,C,A,D
6. A,C,D,B
7. A,B,D,C
8. D,C,B,A