
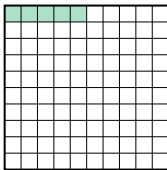
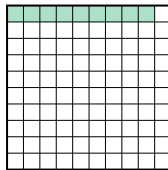





Pon las cajas en orden de la menor a la mayor basado en la cantidad sombreada.


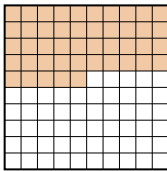

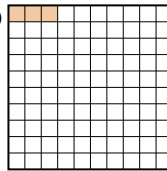
**Respuestas**

Ej) A  B  C  D 

menor 0.05 - B  
0.09 - C  
0.5 - A  
mayor 0.6 - D

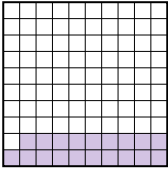

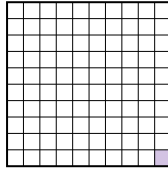
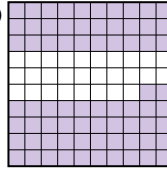
Ej. **B,C,A,D**

1. \_\_\_\_\_
2. \_\_\_\_\_
3. \_\_\_\_\_
4. \_\_\_\_\_
5. \_\_\_\_\_
6. \_\_\_\_\_
7. \_\_\_\_\_
8. \_\_\_\_\_

1) A  B  C  D 

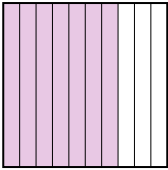
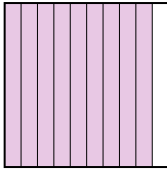
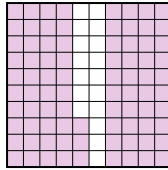
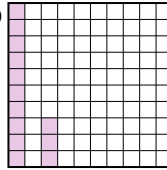
menor \_\_\_\_\_  
\_\_\_\_\_

mayor \_\_\_\_\_  
\_\_\_\_\_

2) A  B  C  D 

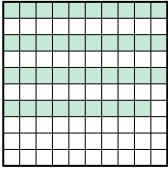

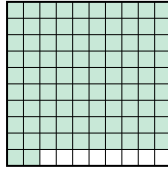
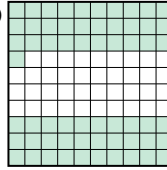
menor \_\_\_\_\_  
\_\_\_\_\_

mayor \_\_\_\_\_  
\_\_\_\_\_

3) A  B  C  D 

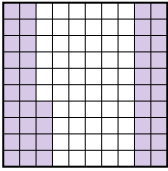
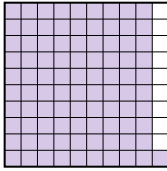
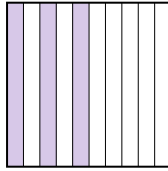
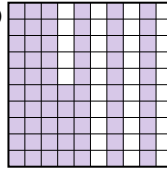
menor \_\_\_\_\_  
\_\_\_\_\_

mayor \_\_\_\_\_  
\_\_\_\_\_

4) A  B  C  D 

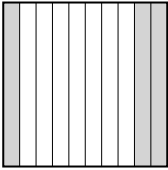

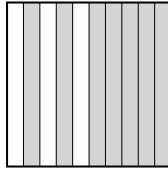
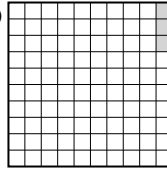
menor \_\_\_\_\_  
\_\_\_\_\_

mayor \_\_\_\_\_  
\_\_\_\_\_

5) A  B  C  D 

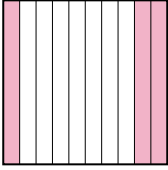
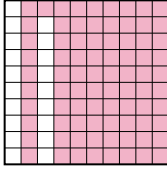
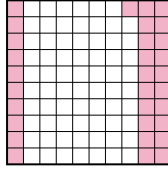
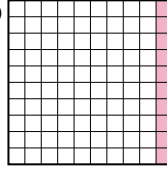
menor \_\_\_\_\_  
\_\_\_\_\_

mayor \_\_\_\_\_  
\_\_\_\_\_

6) A  B  C  D 




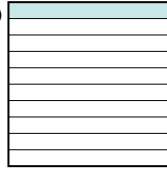
menor \_\_\_\_\_  
\_\_\_\_\_

mayor \_\_\_\_\_  
\_\_\_\_\_

7) A  B  C  D 

menor \_\_\_\_\_  
\_\_\_\_\_

mayor \_\_\_\_\_  
\_\_\_\_\_

8) A  B  C  D 

menor \_\_\_\_\_  
\_\_\_\_\_

mayor \_\_\_\_\_  
\_\_\_\_\_



Pon las cajas en orden de la menor a la mayor basado en la cantidad sombreada.

Ej)	A	B	C	D	menor <u>0.05 - B</u> <u>0.09 - C</u> <u>0.5 - A</u> mayor <u>0.6 - D</u>
1)	A	B	C	D	menor <u>0.03 - D</u> <u>0.1 - C</u> <u>0.4 - A</u> mayor <u>0.45 - B</u>
2)	A	B	C	D	menor <u>0.01 - C</u> <u>0.19 - A</u> <u>0.72 - D</u> mayor <u>0.8 - B</u>
3)	A	B	C	D	menor <u>0.13 - D</u> <u>0.7 - A</u> <u>0.83 - C</u> mayor <u>0.9 - B</u>
4)	A	B	C	D	menor <u>0.39 - A</u> <u>0.61 - D</u> <u>0.8 - B</u> mayor <u>0.92 - C</u>
5)	A	B	C	D	menor <u>0.3 - C</u> <u>0.44 - A</u> <u>0.65 - D</u> mayor <u>0.91 - B</u>
6)	A	B	C	D	menor <u>0.03 - D</u> <u>0.14 - B</u> <u>0.3 - A</u> mayor <u>0.7 - C</u>
7)	A	B	C	D	menor <u>0.1 - D</u> <u>0.3 - A</u> <u>0.31 - C</u> mayor <u>0.81 - B</u>
8)	A	B	C	D	menor <u>0.1 - D</u> <u>0.6 - B</u> <u>0.7 - A</u> mayor <u>0.9 - C</u>

**Respuestas**

- Ej. B,C,A,D
1. D,C,A,B
2. C,A,D,B
3. D,A,C,B
4. A,D,B,C
5. C,A,D,B
6. D,B,A,C
7. D,A,C,B
8. D,B,A,C