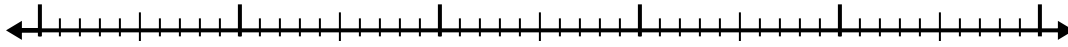


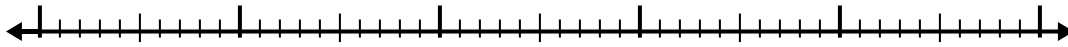


Usa la recta numérica para resolver cada problema.


1)  $8.6 - 3.8 =$



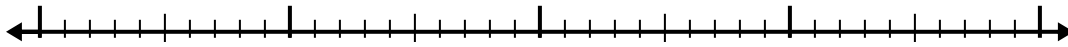
2)  $8.8 - 2.7 =$



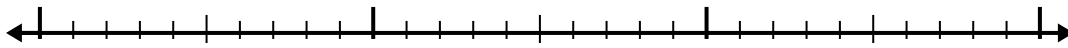
3)  $6.8 - 1.3 =$



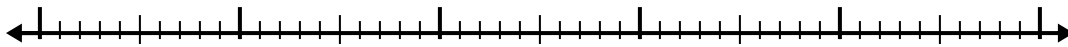
4)  $5.2 - 2.4 =$



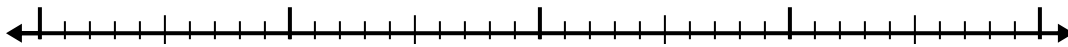
5)  $2.7 - 1.3 =$




6)  $7 - 2.4 =$



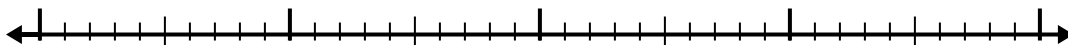
7)  $10.5 - 2.5 =$



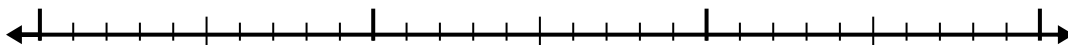
8)  $12.3 - 3.8 =$



9)  $4.2 - 2.7 =$



10)  $3 - 1.3 =$



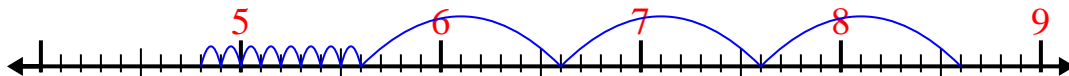
**Respuestas**

- 1. \_\_\_\_\_
- 2. \_\_\_\_\_
- 3. \_\_\_\_\_
- 4. \_\_\_\_\_
- 5. \_\_\_\_\_
- 6. \_\_\_\_\_
- 7. \_\_\_\_\_
- 8. \_\_\_\_\_
- 9. \_\_\_\_\_
- 10. \_\_\_\_\_

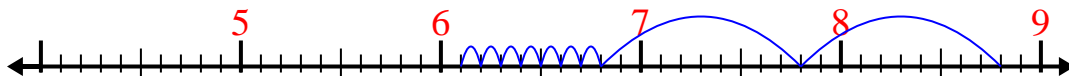


Usa la recta numérica para resolver cada problema.

1)  $8.6 - 3.8 =$



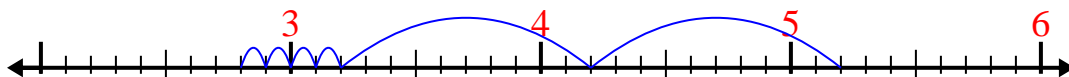
2)  $8.8 - 2.7 =$



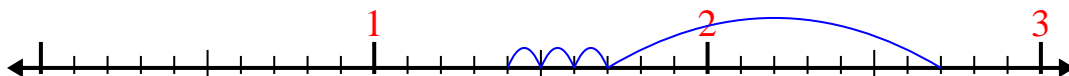
3)  $6.8 - 1.3 =$



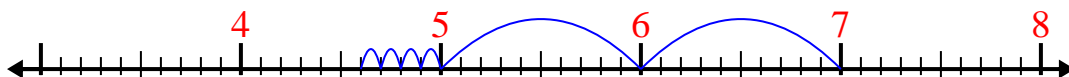
4)  $5.2 - 2.4 =$



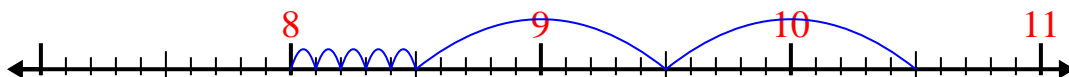
5)  $2.7 - 1.3 =$



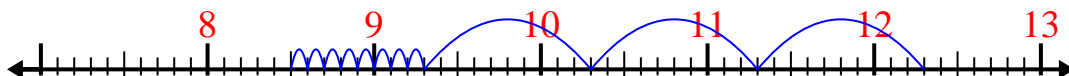
6)  $7 - 2.4 =$



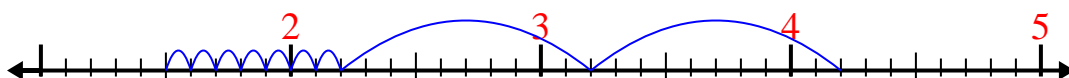
7)  $10.5 - 2.5 =$




8)  $12.3 - 3.8 =$



9)  $4.2 - 2.7 =$



10)  $3 - 1.3 =$



**Respuestas**

1. 4.8
2. 6.1
3. 5.5
4. 2.8
5. 1.4
6. 4.6
7. 8
8. 8.5
9. 1.5
10. 1.7