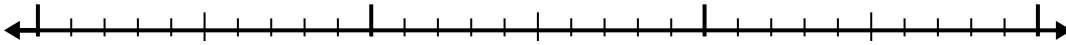


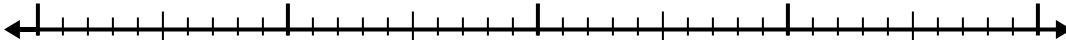


Usa la recta numérica para resolver cada problema.

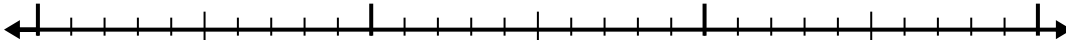
1) $2.5 - 1.3 =$




2) $10.8 - 2.4 =$



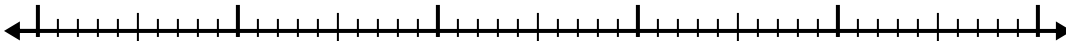
3) $4.5 - 1.7 =$



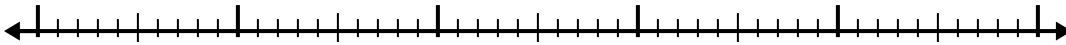
4) $9.9 - 3.8 =$



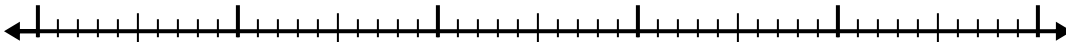
5) $4.4 - 2.5 =$



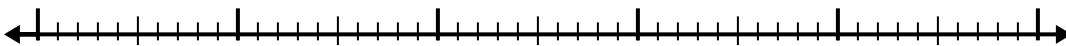
6) $9.7 - 2.4 =$




7) $12.6 - 3.7 =$




8) $6.2 - 2.7 =$



9) $7.7 - 1.6 =$



10) $6.5 - 2.1 =$

**Respuestas**

1. _____

2. _____

3. _____

4. _____

5. _____

6. _____

7. _____

8. _____

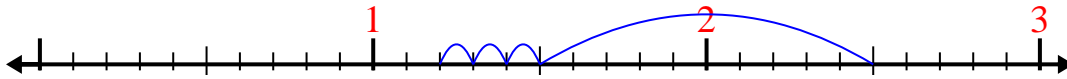
9. _____

10. _____

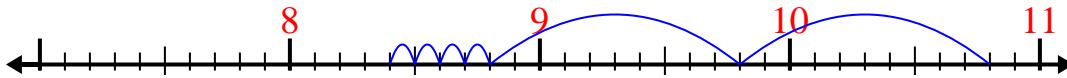


Usa la recta numérica para resolver cada problema.

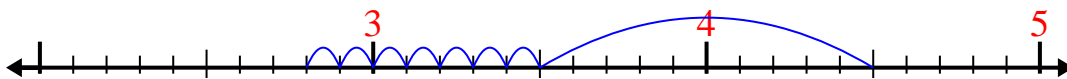
1) $2.5 - 1.3 =$



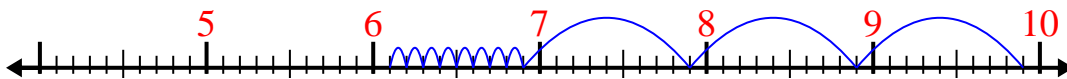
2) $10.8 - 2.4 =$



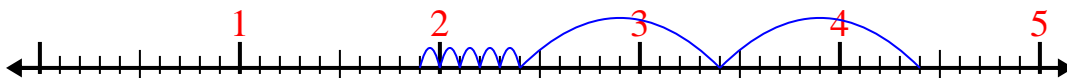
3) $4.5 - 1.7 =$



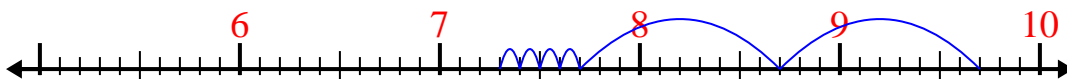
4) $9.9 - 3.8 =$



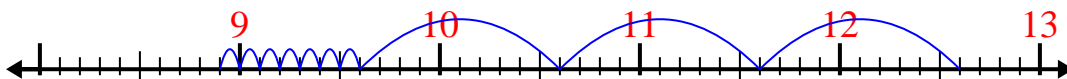
5) $4.4 - 2.5 =$



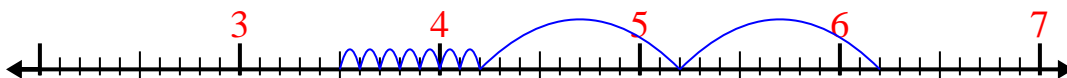
6) $9.7 - 2.4 =$



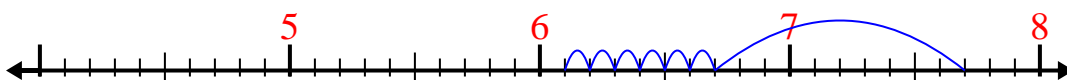
7) $12.6 - 3.7 =$



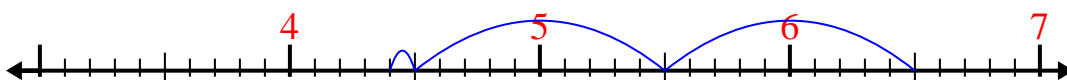
8) $6.2 - 2.7 =$



9) $7.7 - 1.6 =$



10) $6.5 - 2.1 =$

**Respuestas**1. 1.22. 8.43. 2.84. 6.15. 1.96. 7.37. 8.98. 3.59. 6.110. 4.4