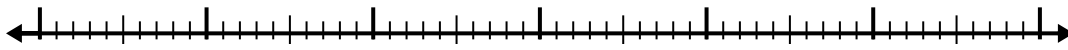





Usa la recta numérica para resolver cada problema.

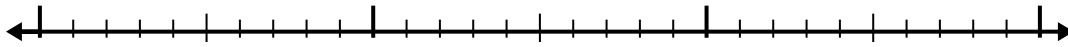
1) $5.5 - 3.4 =$



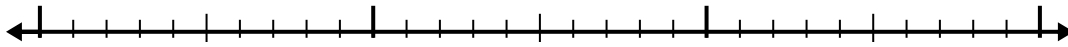
2) $4.6 - 2.1 =$



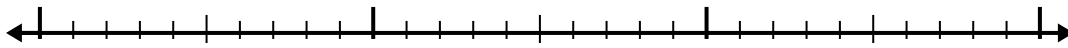
3) $8.1 - 1.2 =$



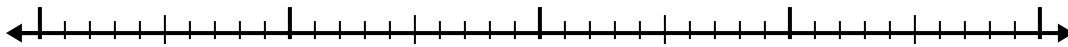
4) $8.1 - 1.3 =$



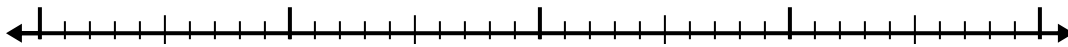
5) $8.9 - 1.8 =$



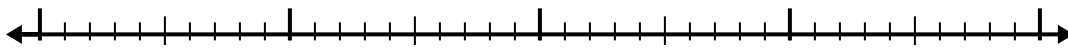
6) $5.9 - 2.1 =$



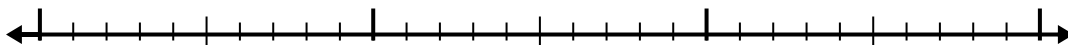
7) $9.3 - 2.1 =$




8) $7.8 - 1.8 =$



9) $5.6 - 1.1 =$



10) $6 - 2.7 =$



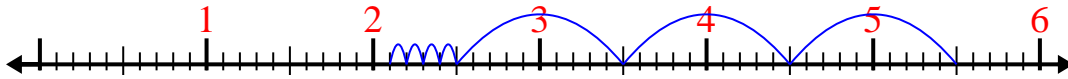
Respuestas

- 1. _____
- 2. _____
- 3. _____
- 4. _____
- 5. _____
- 6. _____
- 7. _____
- 8. _____
- 9. _____
- 10. _____

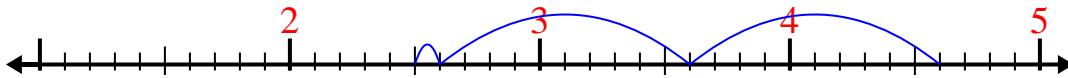


Usa la recta numérica para resolver cada problema.


1) $5.5 - 3.4 =$




2) $4.6 - 2.1 =$



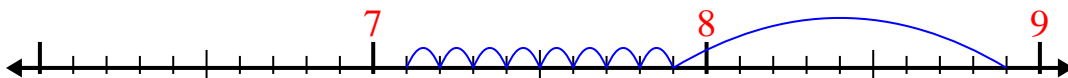
3) $8.1 - 1.2 =$



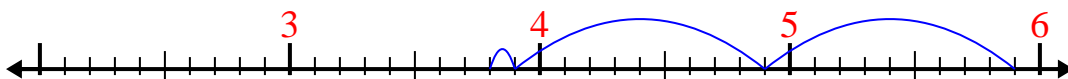
4) $8.1 - 1.3 =$



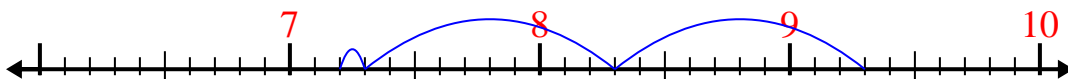
5) $8.9 - 1.8 =$



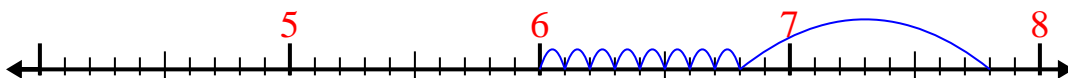
6) $5.9 - 2.1 =$



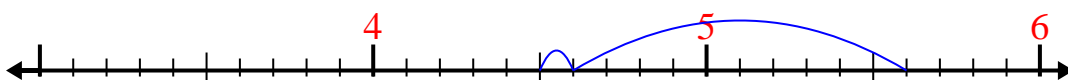
7) $9.3 - 2.1 =$



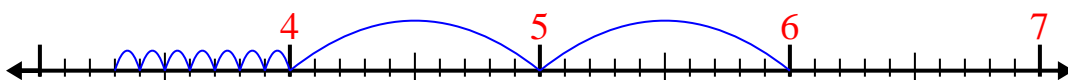
8) $7.8 - 1.8 =$



9) $5.6 - 1.1 =$



10) $6 - 2.7 =$




Respuestas

1. 2.1
2. 2.5
3. 6.9
4. 6.8
5. 7.1
6. 3.8
7. 7.2
8. 6
9. 4.5
10. 3.3




Usa la recta numérica para resolver cada problema.

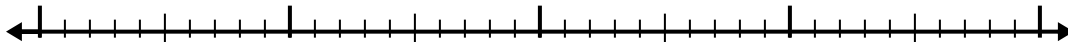
1) $7.8 - 1.7 =$



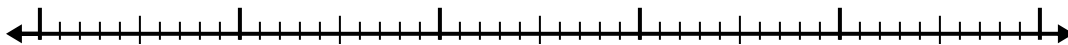
2) $4.1 - 1.3 =$



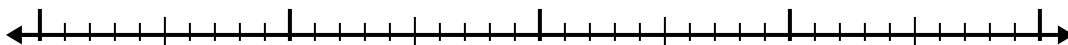
3) $6.9 - 1.3 =$



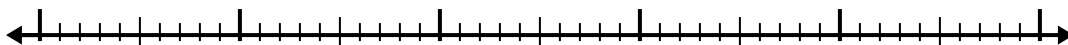
4) $11.2 - 3.7 =$



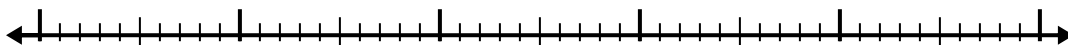
5) $10.7 - 2.9 =$



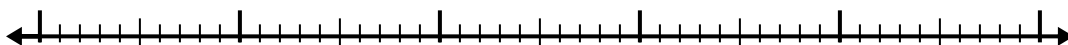
6) $5.9 - 2.5 =$



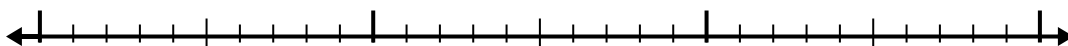
7) $9.4 - 2.7 =$



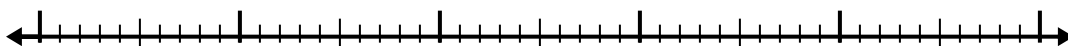
8) $5.4 - 3.3 =$



9) $2.7 - 1.7 =$



10) $6.1 - 3.1 =$



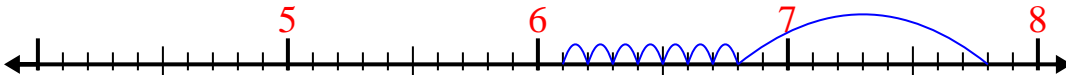
Respuestas

1. _____
2. _____
3. _____
4. _____
5. _____
6. _____
7. _____
8. _____
9. _____
10. _____

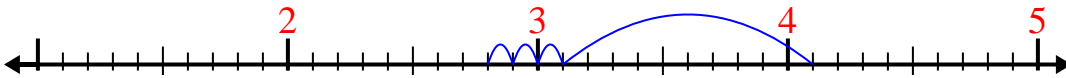


Usa la recta numérica para resolver cada problema.

1) $7.8 - 1.7 =$



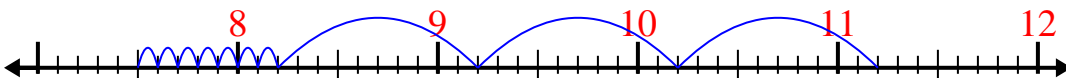
2) $4.1 - 1.3 =$



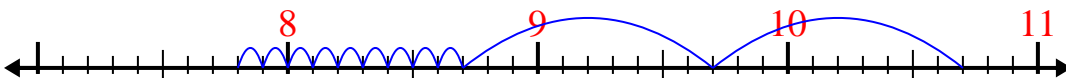
3) $6.9 - 1.3 =$



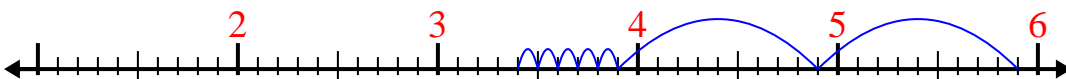
4) $11.2 - 3.7 =$



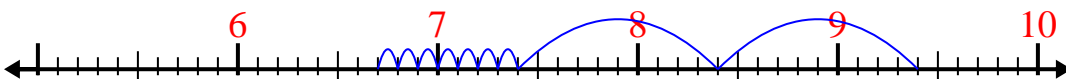
5) $10.7 - 2.9 =$



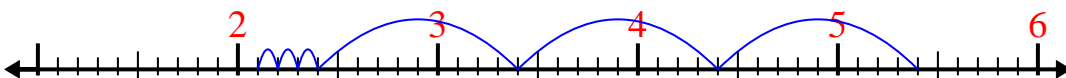
6) $5.9 - 2.5 =$



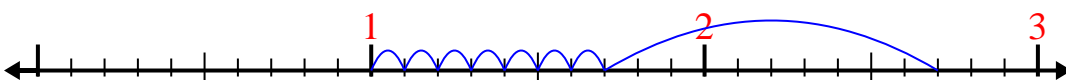
7) $9.4 - 2.7 =$



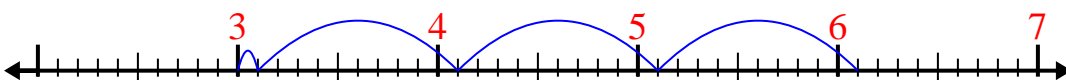
8) $5.4 - 3.3 =$



9) $2.7 - 1.7 =$



10) $6.1 - 3.1 =$



Respuestas

1. 6.1

2. 2.8

3. 5.6

4. 7.5

5. 7.8

6. 3.4

7. 6.7

8. 2.1

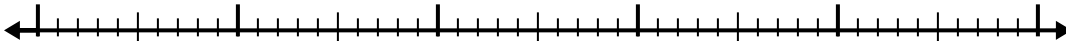
9. 1

10. 3

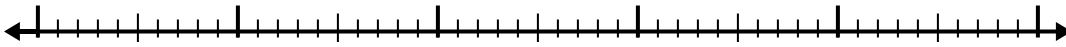


Usa la recta numérica para resolver cada problema.

1) $6.2 - 3.6 =$



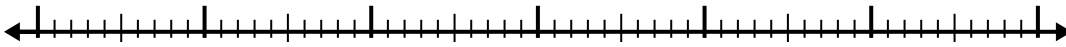
2) $5.2 - 2.2 =$



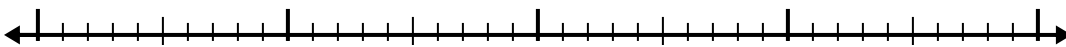
3) $3.3 - 2.2 =$



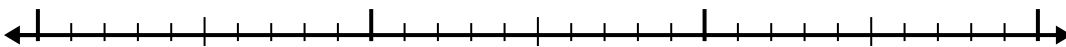
4) $7.6 - 3.9 =$



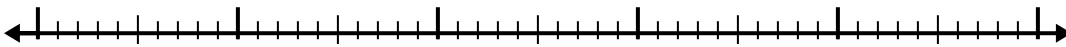
5) $10.4 - 2.2 =$



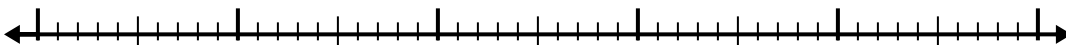
6) $7.2 - 1.8 =$



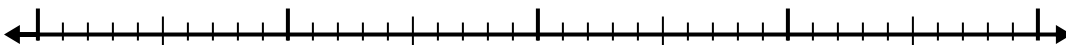
7) $5.8 - 3.6 =$



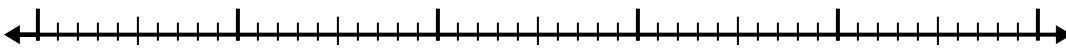
8) $8.2 - 2.8 =$



9) $5.7 - 2.2 =$



10) $4.1 - 2.2 =$

**Respuestas**

1. _____

2. _____

3. _____

4. _____

5. _____

6. _____

7. _____

8. _____

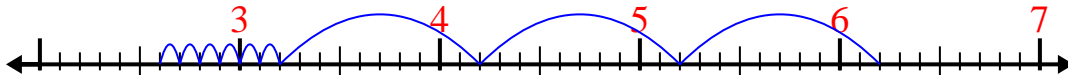
9. _____

10. _____

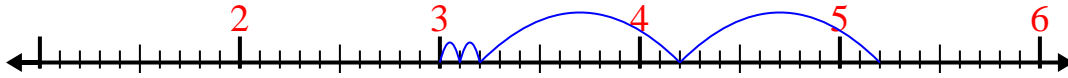


Usa la recta numérica para resolver cada problema.

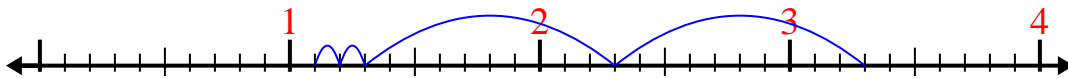
1) $6.2 - 3.6 =$



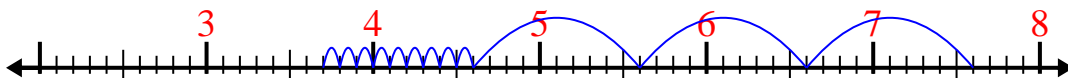
2) $5.2 - 2.2 =$



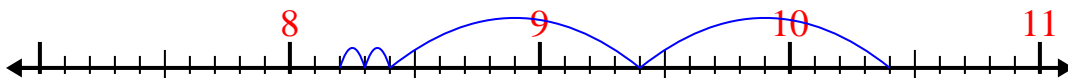
3) $3.3 - 2.2 =$



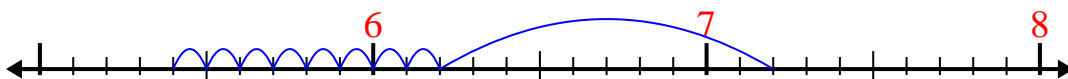
4) $7.6 - 3.9 =$



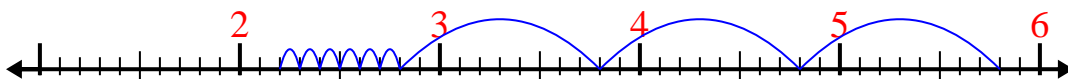
5) $10.4 - 2.2 =$



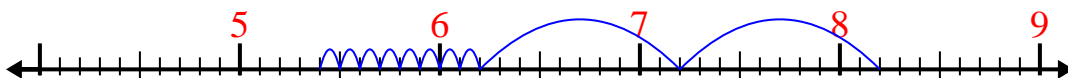
6) $7.2 - 1.8 =$



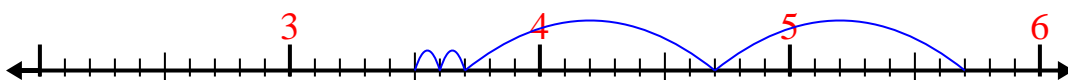
7) $5.8 - 3.6 =$



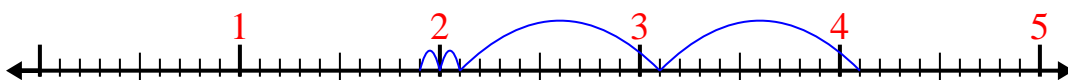
8) $8.2 - 2.8 =$



9) $5.7 - 2.2 =$



10) $4.1 - 2.2 =$




Respuestas

1. 2.6
2. 3
3. 1.1
4. 3.7
5. 8.2
6. 5.4
7. 2.2
8. 5.4
9. 3.5
10. 1.9




Usa la recta numérica para resolver cada problema.

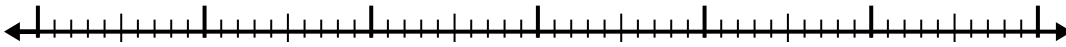
1) $5.8 - 3.1 =$



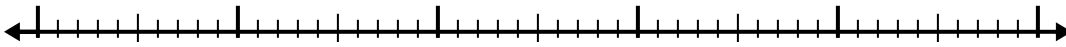
2) $7.4 - 2.3 =$



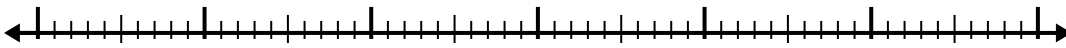
3) $10.3 - 3.1 =$



4) $6.9 - 3.7 =$



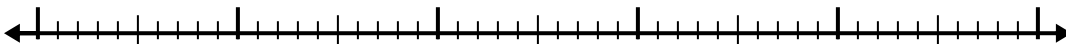
5) $11.2 - 3.6 =$




6) $4.5 - 2.7 =$



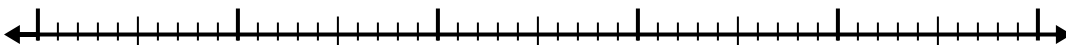
7) $4.1 - 2.4 =$



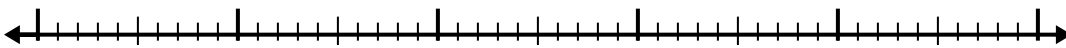
8) $12.4 - 3.6 =$



9) $11.5 - 2.6 =$



10) $9.2 - 3.9 =$



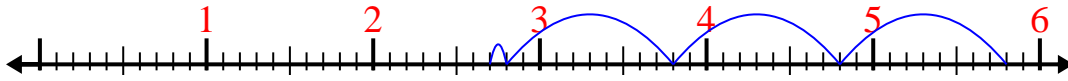
Respuestas

- 1. _____
- 2. _____
- 3. _____
- 4. _____
- 5. _____
- 6. _____
- 7. _____
- 8. _____
- 9. _____
- 10. _____

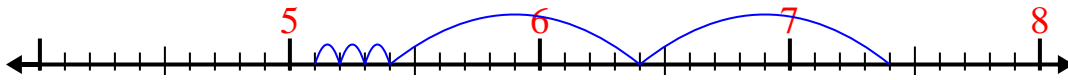


Usa la recta numérica para resolver cada problema.

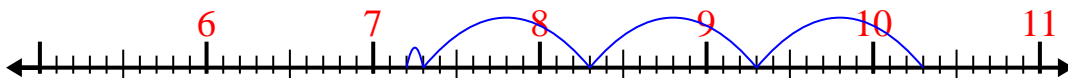
1) $5.8 - 3.1 =$



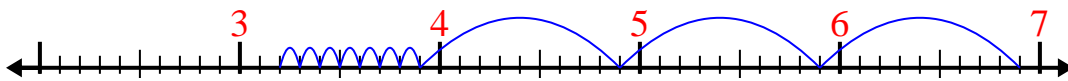
2) $7.4 - 2.3 =$



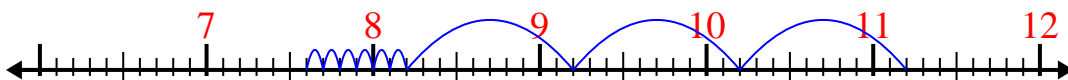
3) $10.3 - 3.1 =$



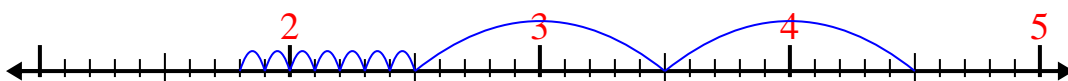
4) $6.9 - 3.7 =$



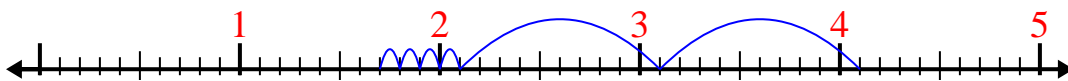
5) $11.2 - 3.6 =$



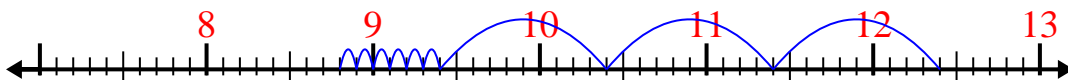
6) $4.5 - 2.7 =$



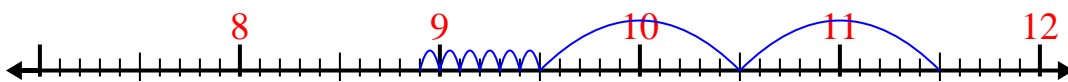
7) $4.1 - 2.4 =$



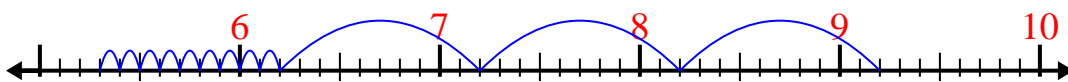
8) $12.4 - 3.6 =$



9) $11.5 - 2.6 =$



10) $9.2 - 3.9 =$



Respuestas

1. 2.7

2. 5.1

3. 7.2

4. 3.2

5. 7.6

6. 1.8

7. 1.7

8. 8.8

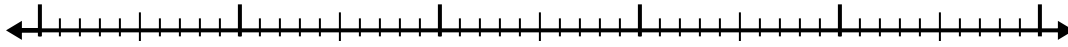
9. 8.9

10. 5.3

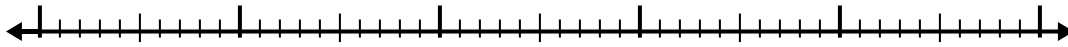


Usa la recta numérica para resolver cada problema.


1) $8.6 - 3.8 =$



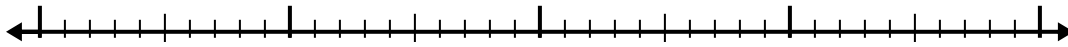
2) $8.8 - 2.7 =$



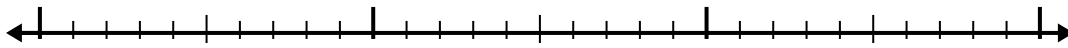
3) $6.8 - 1.3 =$



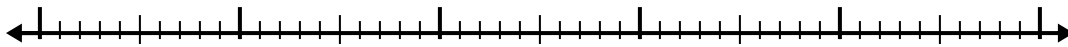
4) $5.2 - 2.4 =$



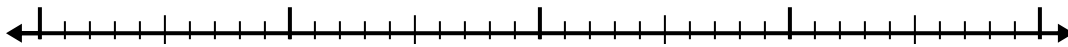
5) $2.7 - 1.3 =$




6) $7 - 2.4 =$



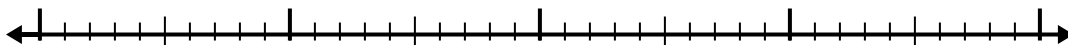
7) $10.5 - 2.5 =$



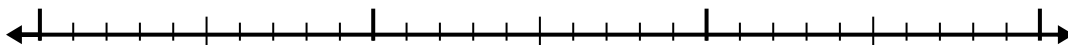
8) $12.3 - 3.8 =$



9) $4.2 - 2.7 =$



10) $3 - 1.3 =$



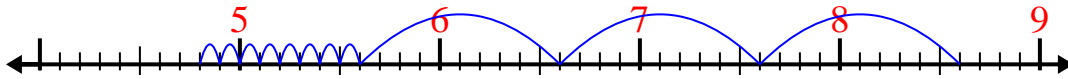
Respuestas

1. _____
2. _____
3. _____
4. _____
5. _____
6. _____
7. _____
8. _____
9. _____
10. _____

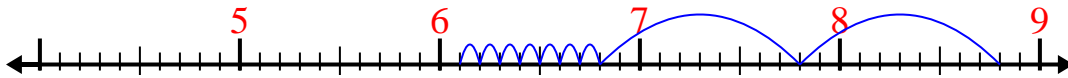


Usa la recta numérica para resolver cada problema.

1) $8.6 - 3.8 =$



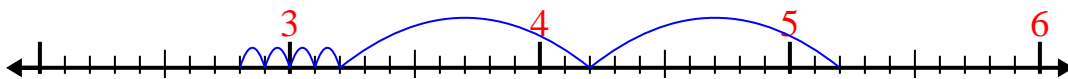
2) $8.8 - 2.7 =$



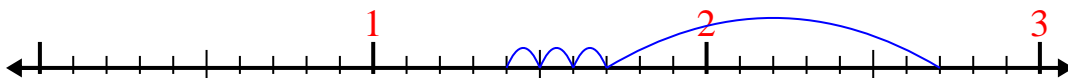
3) $6.8 - 1.3 =$



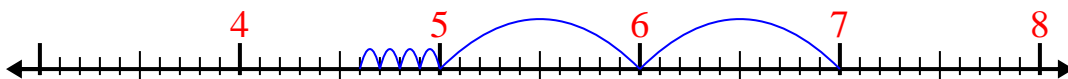
4) $5.2 - 2.4 =$



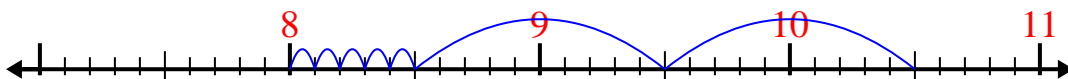
5) $2.7 - 1.3 =$



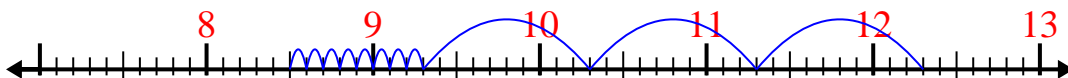
6) $7 - 2.4 =$



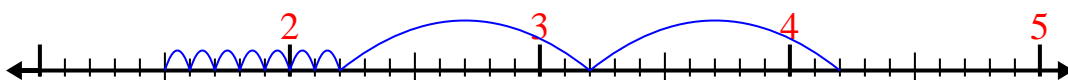
7) $10.5 - 2.5 =$



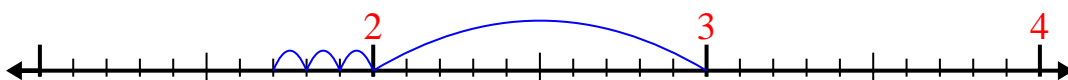
8) $12.3 - 3.8 =$



9) $4.2 - 2.7 =$



10) $3 - 1.3 =$



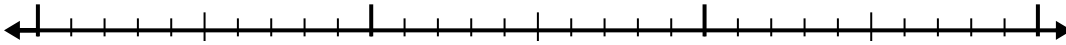
Respuestas

1. 4.8
2. 6.1
3. 5.5
4. 2.8
5. 1.4
6. 4.6
7. 8
8. 8.5
9. 1.5
10. 1.7

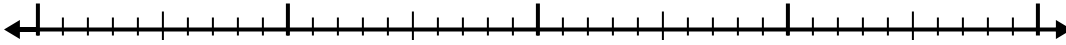


Usa la recta numérica para resolver cada problema.

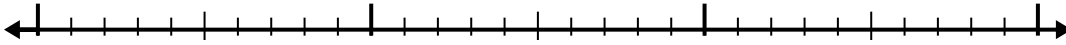
1) $2.5 - 1.3 =$




2) $10.8 - 2.4 =$



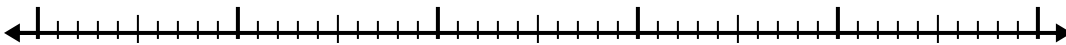
3) $4.5 - 1.7 =$



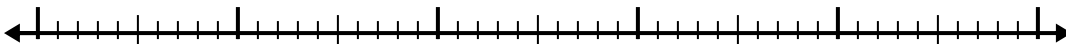
4) $9.9 - 3.8 =$



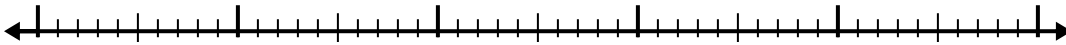
5) $4.4 - 2.5 =$



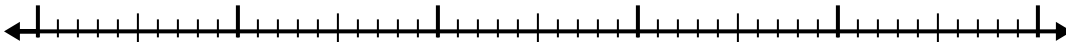
6) $9.7 - 2.4 =$



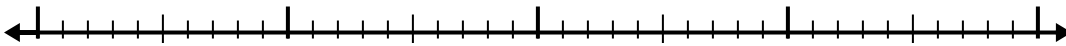
7) $12.6 - 3.7 =$



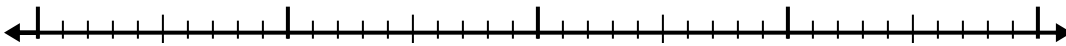
8) $6.2 - 2.7 =$



9) $7.7 - 1.6 =$



10) $6.5 - 2.1 =$



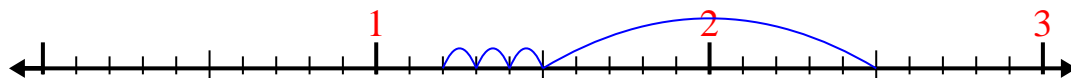
Respuestas

1. _____
2. _____
3. _____
4. _____
5. _____
6. _____
7. _____
8. _____
9. _____
10. _____

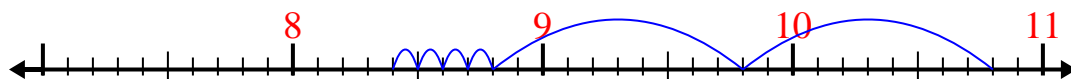


Usa la recta numérica para resolver cada problema.

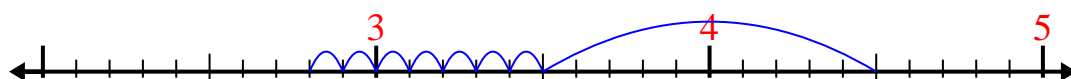
1) $2.5 - 1.3 =$



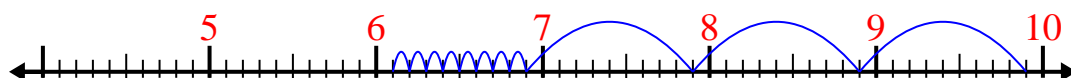
2) $10.8 - 2.4 =$



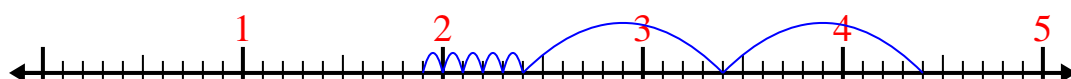
3) $4.5 - 1.7 =$



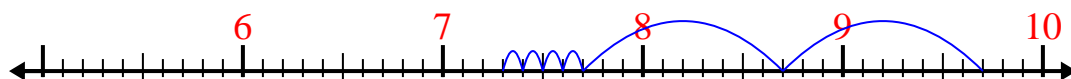
4) $9.9 - 3.8 =$



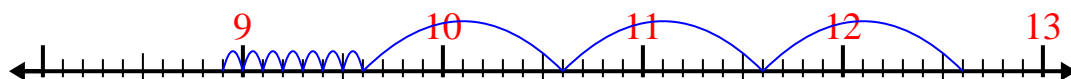
5) $4.4 - 2.5 =$



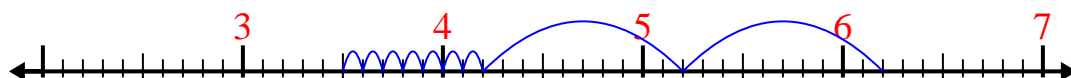
6) $9.7 - 2.4 =$



7) $12.6 - 3.7 =$



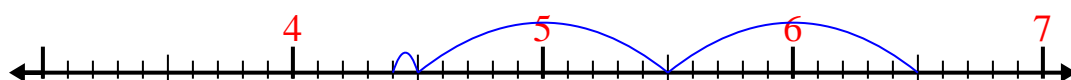
8) $6.2 - 2.7 =$



9) $7.7 - 1.6 =$



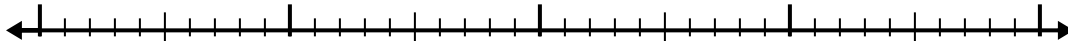
10) $6.5 - 2.1 =$

**Respuestas**1. 1.22. 8.43. 2.84. 6.15. 1.96. 7.37. 8.98. 3.59. 6.110. 4.4

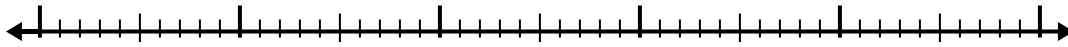


Usa la recta numérica para resolver cada problema.

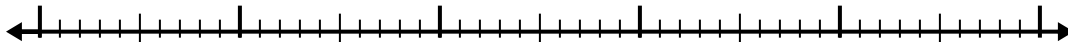
1) $9.6 - 2.2 =$



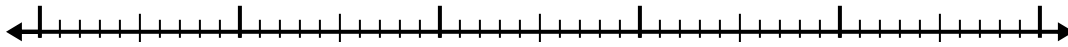
2) $7.7 - 2.3 =$



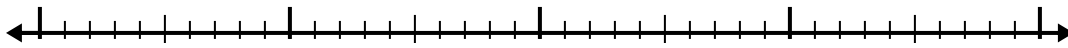
3) $7.6 - 2.9 =$



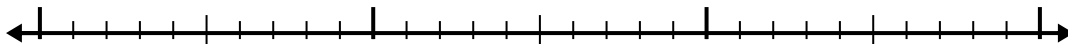
4) $8.1 - 3.7 =$



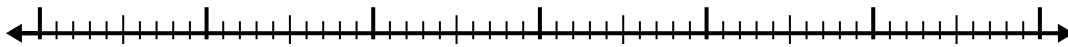
5) $4.5 - 2.3 =$



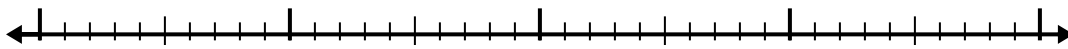
6) $5.2 - 1.3 =$



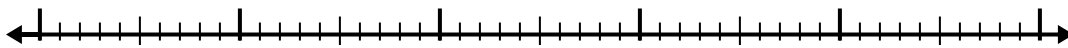
7) $4.9 - 3.9 =$



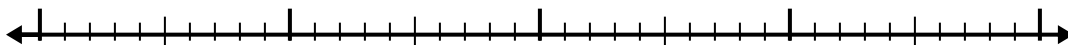
8) $7.9 - 2.1 =$



9) $8.6 - 2.3 =$



10) $10.2 - 2.9 =$



Respuestas

1. _____

2. _____

3. _____

4. _____

5. _____

6. _____

7. _____

8. _____

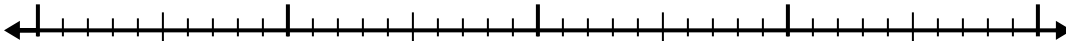
9. _____

10. _____

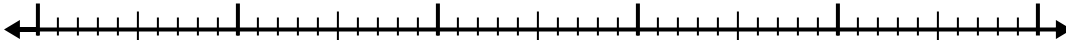


Usa la recta numérica para resolver cada problema.

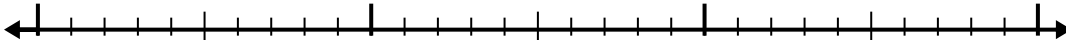
1) $7 - 2.6 =$



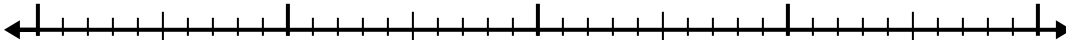
2) $6.2 - 2.7 =$



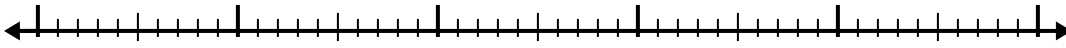
3) $2.5 - 1.2 =$



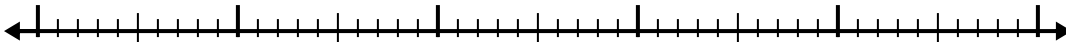
4) $5.2 - 1.9 =$



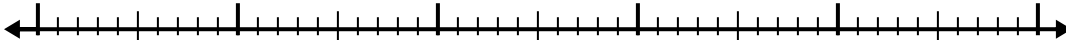
5) $12.3 - 3.4 =$




6) $11 - 2.7 =$



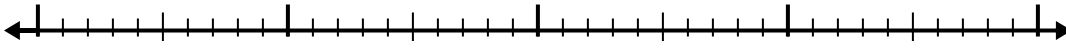
7) $8 - 2.7 =$



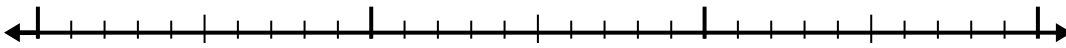
8) $5 - 3.1 =$



9) $10.9 - 2.3 =$



10) $5.1 - 1.1 =$



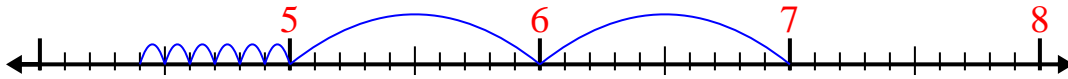
Respuestas

1. _____
2. _____
3. _____
4. _____
5. _____
6. _____
7. _____
8. _____
9. _____
10. _____

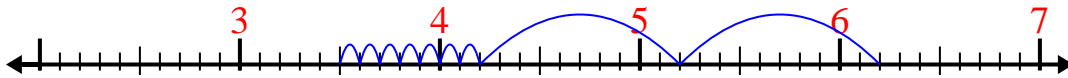


Usa la recta numérica para resolver cada problema.

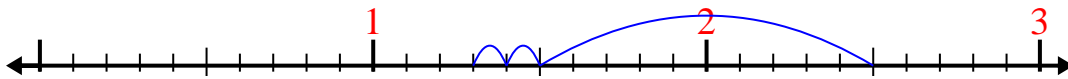
1) $7 - 2.6 =$



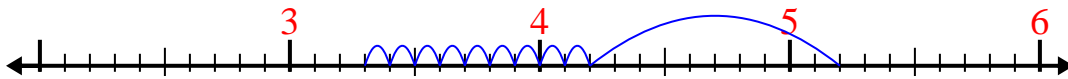
2) $6.2 - 2.7 =$



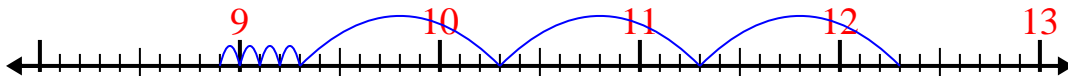
3) $2.5 - 1.2 =$



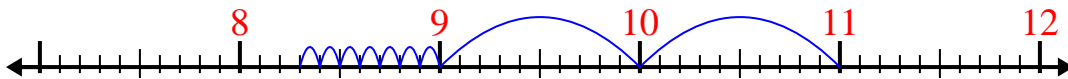
4) $5.2 - 1.9 =$



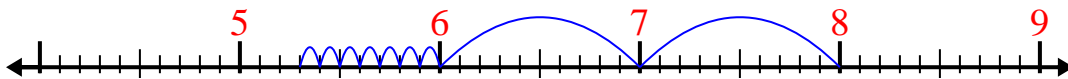
5) $12.3 - 3.4 =$



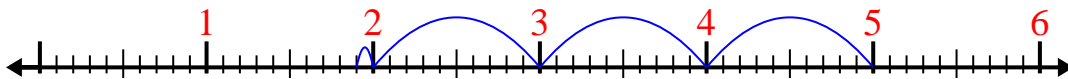
6) $11 - 2.7 =$



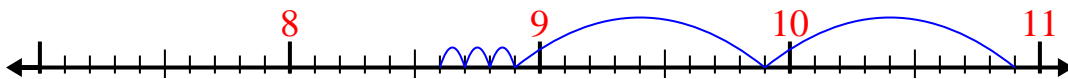
7) $8 - 2.7 =$




8) $5 - 3.1 =$



9) $10.9 - 2.3 =$



10) $5.1 - 1.1 =$



Respuestas

1. 4.4

2. 3.5

3. 1.3

4. 3.3

5. 8.9

6. 8.3

7. 5.3

8. 1.9


9. 8.6

10. 4

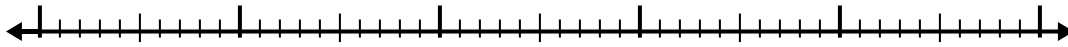


Usa la recta numérica para resolver cada problema.

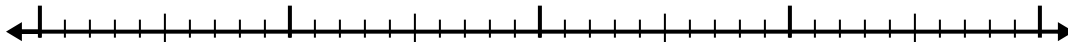
1) $9.7 - 3.2 =$



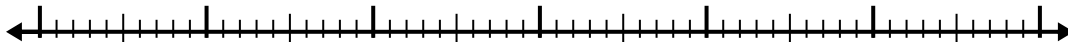
2) $9.1 - 3.8 =$



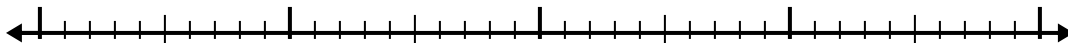
3) $4.2 - 1.1 =$



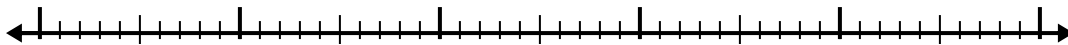
4) $11.6 - 3.2 =$



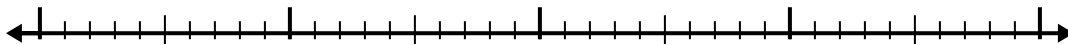
5) $6.9 - 1.2 =$



6) $4.8 - 2.8 =$



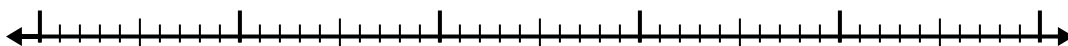
7) $6 - 1.8 =$



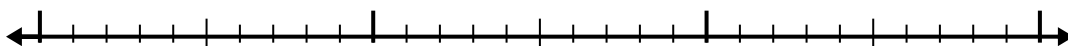
8) $8 - 1.4 =$



9) $8.2 - 3.9 =$



10) $2.5 - 1.4 =$



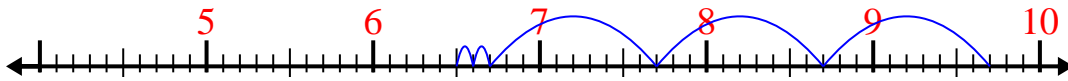
Respuestas

1. _____
2. _____
3. _____
4. _____
5. _____
6. _____
7. _____
8. _____
9. _____
10. _____

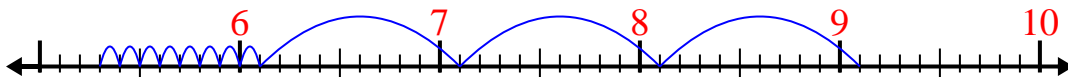


Usa la recta numérica para resolver cada problema.

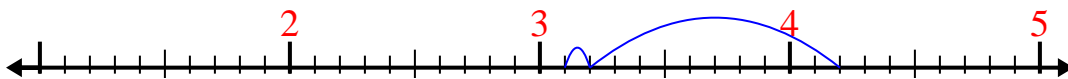
1) $9.7 - 3.2 =$



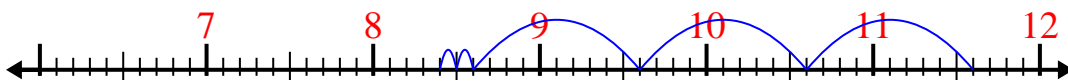
2) $9.1 - 3.8 =$



3) $4.2 - 1.1 =$



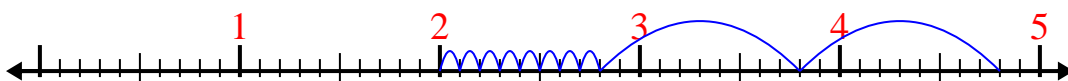
4) $11.6 - 3.2 =$



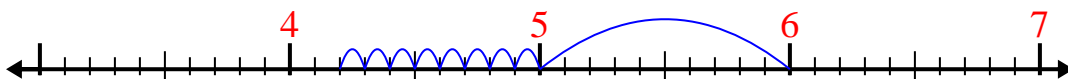
5) $6.9 - 1.2 =$



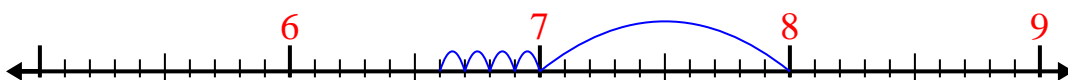
6) $4.8 - 2.8 =$



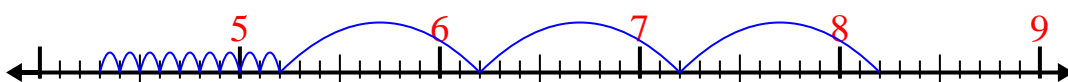
7) $6 - 1.8 =$



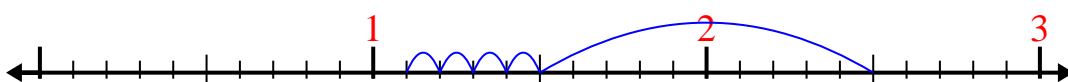
8) $8 - 1.4 =$



9) $8.2 - 3.9 =$




10) $2.5 - 1.4 =$

**Respuestas**1. **6.5**2. **5.3**3. **3.1**4. **8.4**5. **5.7**6. **2**7. **4.2**8. **6.6**9. **4.3**10. **1.1**

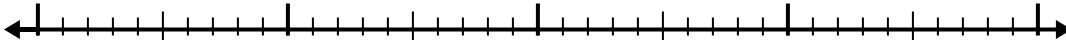


Usa la recta numérica para resolver cada problema.

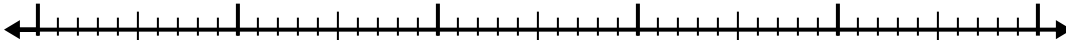
1) $9.1 - 3.6 =$



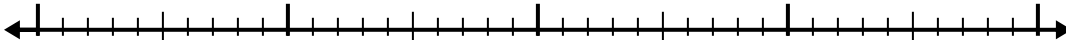
2) $8.1 - 1.6 =$



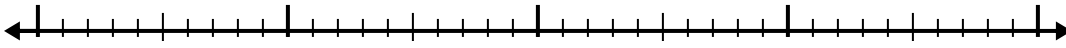
3) $6.7 - 3.2 =$



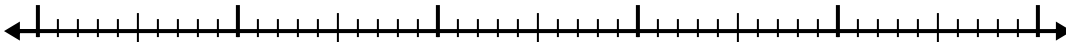
4) $10.3 - 2.6 =$



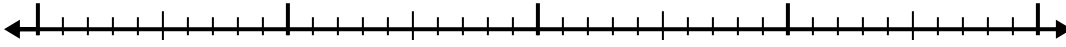
5) $5.8 - 1.9 =$



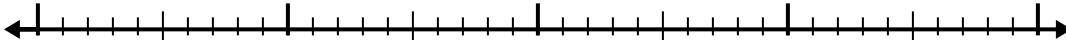
6) $8.2 - 2.3 =$




7) $5.9 - 1.6 =$



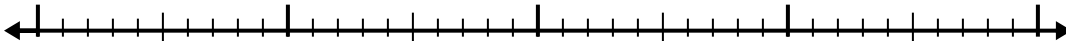
8) $11.2 - 2.9 =$



9) $10.5 - 3.5 =$



10) $8 - 2.4 =$



Respuestas

1. _____

2. _____

3. _____

4. _____

5. _____

6. _____

7. _____

8. _____

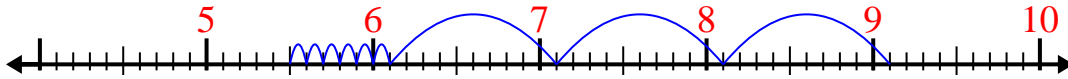
9. _____

10. _____

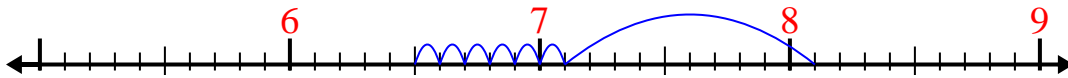


Usa la recta numérica para resolver cada problema.

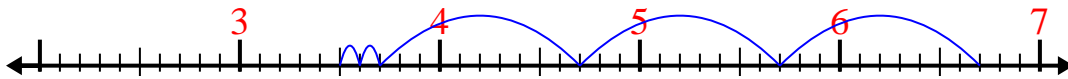
1) $9.1 - 3.6 =$



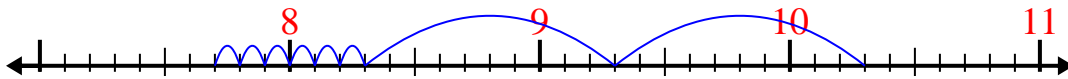
2) $8.1 - 1.6 =$



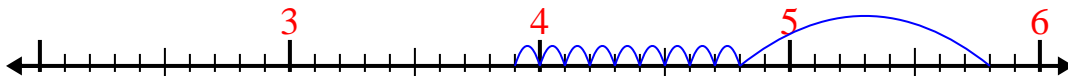
3) $6.7 - 3.2 =$



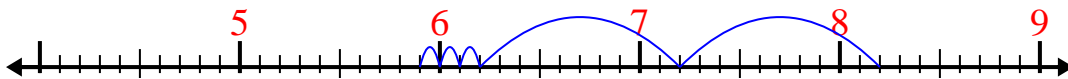
4) $10.3 - 2.6 =$



5) $5.8 - 1.9 =$



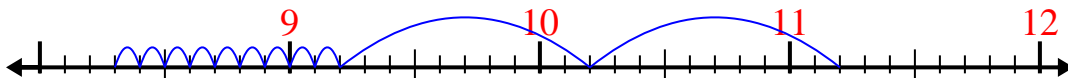
6) $8.2 - 2.3 =$



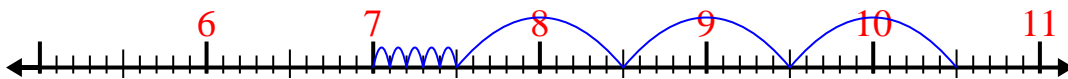
7) $5.9 - 1.6 =$



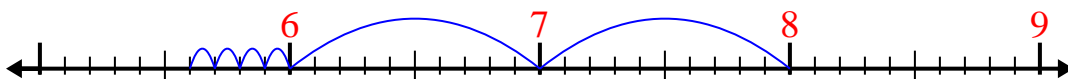
8) $11.2 - 2.9 =$



9) $10.5 - 3.5 =$



10) $8 - 2.4 =$



Respuestas

1. 5.5

2. 6.5

3. 3.5

4. 7.7

5. 3.9

6. 5.9

7. 4.3

8. 8.3

9. 7

10. 5.6