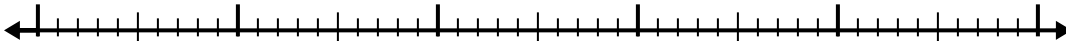





Usa la recta numérica para resolver cada problema.

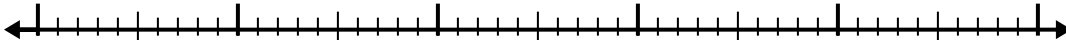
1) $5.1 - 3.4 =$



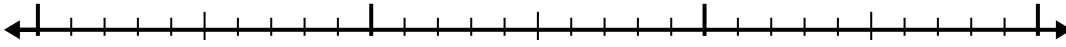
2) $11.4 - 3.4 =$



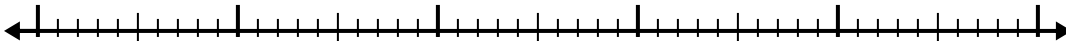
3) $11.6 - 3.5 =$



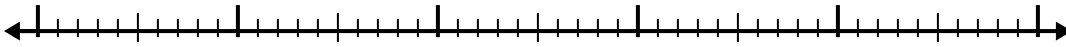
4) $6.6 - 1.9 =$



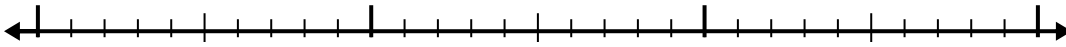
5) $9 - 3.8 =$



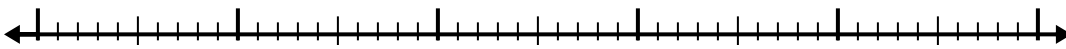
6) $9.9 - 2.7 =$



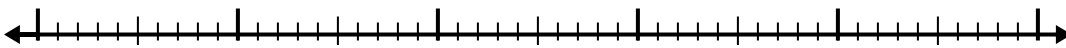
7) $8.3 - 1.7 =$




8) $9.1 - 3.5 =$



9) $7.5 - 3.3 =$



10) $9.1 - 2.3 =$

**Respuestas**

1. _____

2. _____

3. _____

4. _____

5. _____

6. _____

7. _____

8. _____

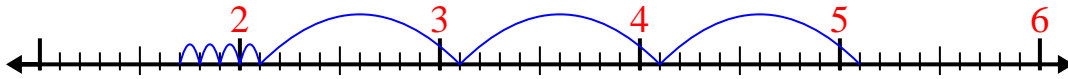
9. _____

10. _____

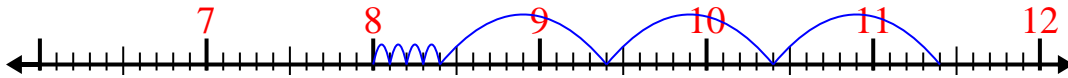


Usa la recta numérica para resolver cada problema.

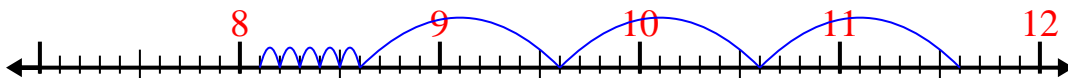
1) $5.1 - 3.4 =$



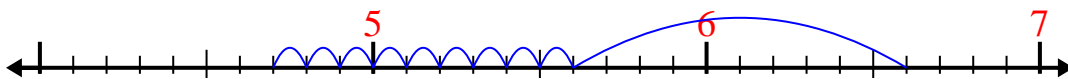
2) $11.4 - 3.4 =$



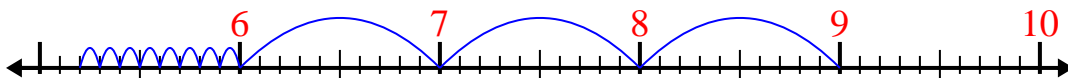
3) $11.6 - 3.5 =$



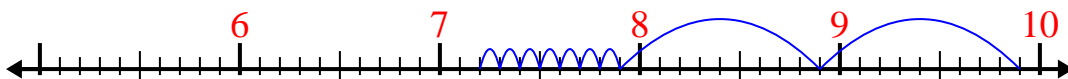
4) $6.6 - 1.9 =$



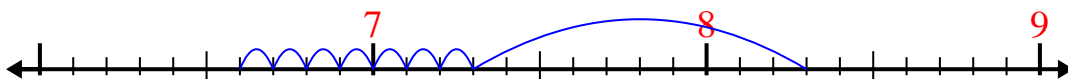
5) $9 - 3.8 =$




6) $9.9 - 2.7 =$



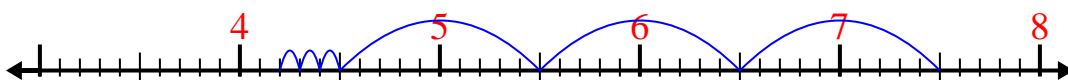
7) $8.3 - 1.7 =$



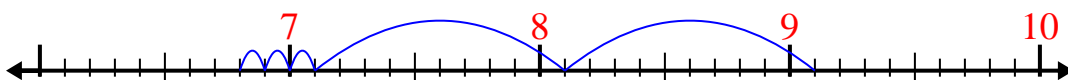
8) $9.1 - 3.5 =$



9) $7.5 - 3.3 =$



10) $9.1 - 2.3 =$



Respuestas

1. 1.7
2. 8
3. 8.1
4. 4.7
5. 5.2
6. 7.2
7. 6.6
8. 5.6
9. 4.2
10. 6.8