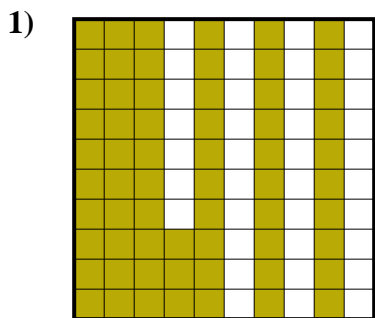


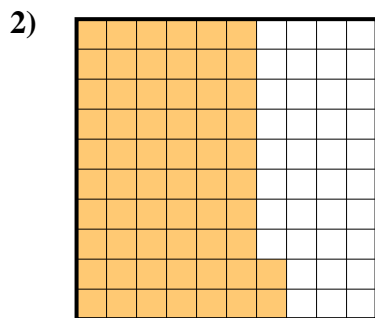


Determina cuál letra mejor representa la cantidad sombreada del total.

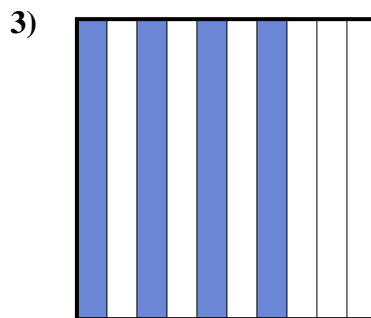
Respuestas



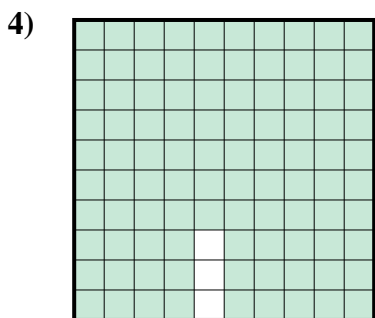
- A. 6.3
- B. 0.063
- C. 630.00
- D. 0.63



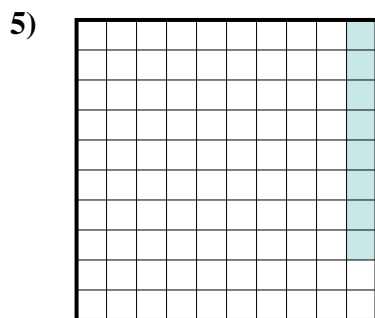
- A. 62
- B. 6.2
- C. 0.62
- D. 620.0



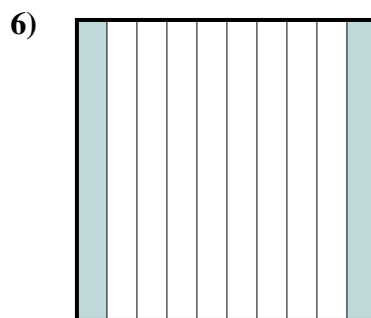
- A. 40
- B. 400.0
- C. 0.04
- D. 0.4



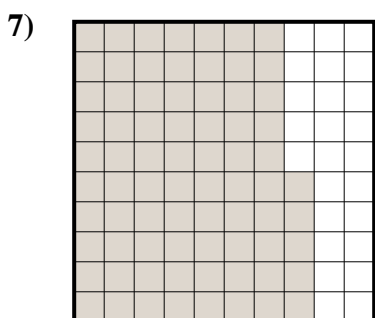
- A. 970.0
- B. 0.097
- C. 0.97
- D. 9.7



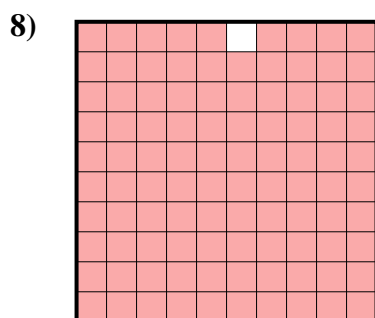
- A. 0.008
- B. 0.8
- C. 8
- D. 0.08




- A. 20
- B. 0.02
- C. 2
- D. 0.2



- A. 0.75
- B. 75
- C. 7.5
- D. 0.075



- A. 0.99
- B. 0.099
- C. 990.0
- D. 9.9



- A. 90
- B. 0.09
- C. 0.9
- D. 9

1. _____

2. _____

3. _____

4. _____

5. _____

6. _____

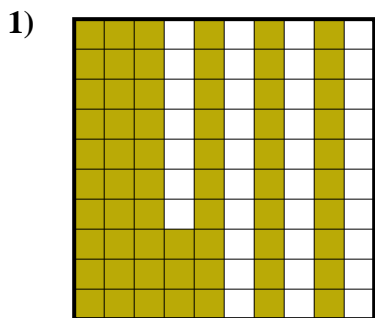
7. _____

8. _____

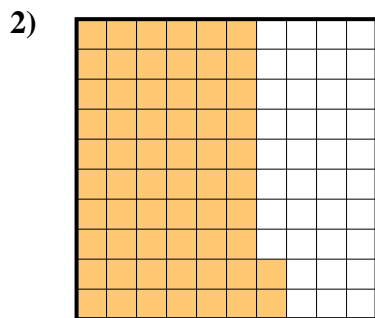
9. _____



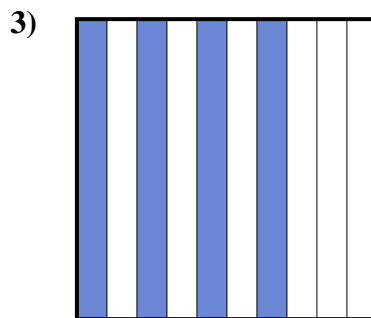
Determina cuál letra mejor representa la cantidad sombreada del total.



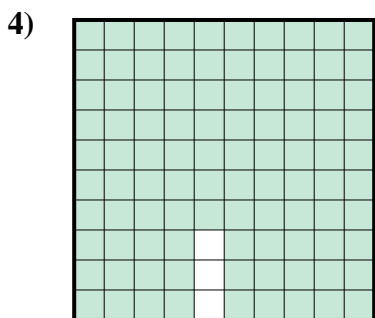
- A. 6.3
- B. 0.063
- C. 630.00
- D. 0.63



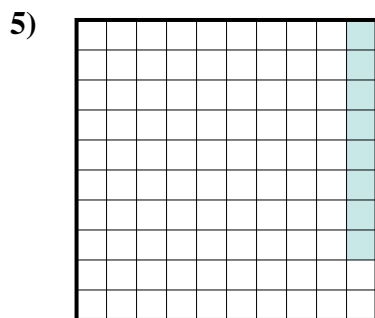
- A. 62
- B. 6.2
- C. 0.62
- D. 620.0



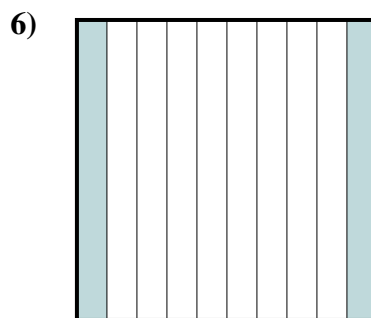
- A. 40
- B. 400.0
- C. 0.04
- D. 0.4



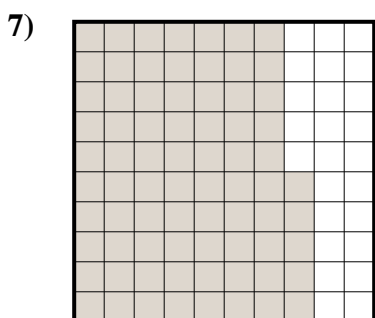
- A. 970.0
- B. 0.097
- C. 0.97
- D. 9.7



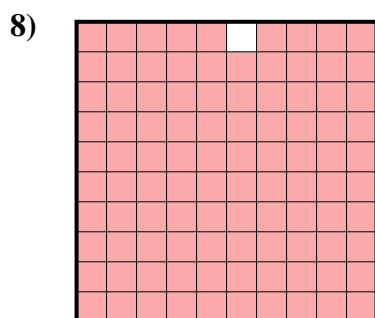
- A. 0.008
- B. 0.8
- C. 8
- D. 0.08




- A. 20
- B. 0.02
- C. 2
- D. 0.2



- A. 0.75
- B. 75
- C. 7.5
- D. 0.075



- A. 0.99
- B. 0.099
- C. 990.0
- D. 9.9



- A. 90
- B. 0.09
- C. 0.9
- D. 9

Respuestas

- 1. **D**
- 2. **C**
- 3. **D**
- 4. **C**
- 5. **D**
- 6. **D**
- 7. **A**
- 8. **A**
- 9. **C**