


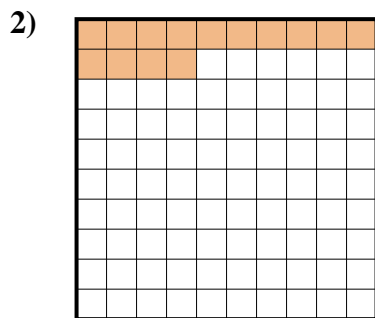


Determina cuál letra mejor representa la cantidad sombreada del total.

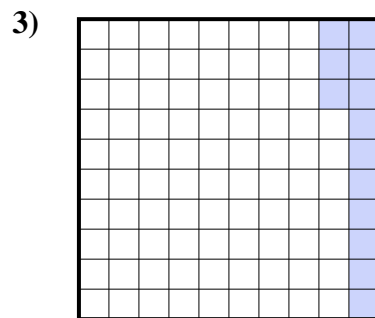
Respuestas




- A. 0.7
- B. 0.07
- C. 700.0
- D. 7



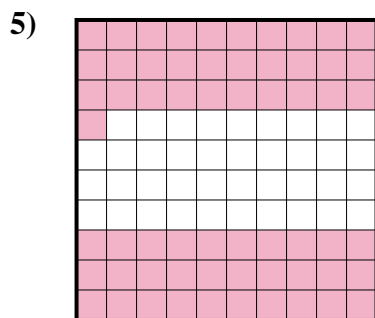
- A. 14
- B. 1.4
- C. 140.0
- D. 0.14



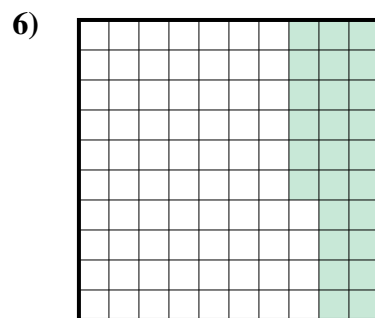
- A. 1.3
- B. 13
- C. 0.13
- D. 0.013



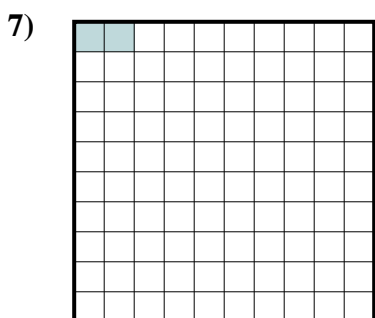
- A. 0.09
- B. 90
- C. 0.9
- D. 900.00



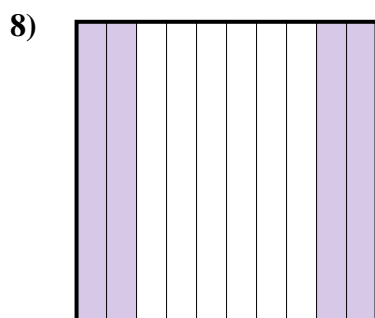
- A. 6.1
- B. 0.61
- C. 610.0
- D. 0.061



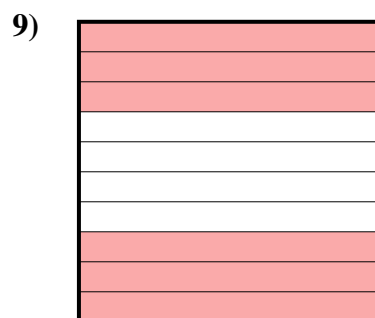
- A. 26
- B. 260.0
- C. 0.26
- D. 0.026



- A. 20.0
- B. 0.2
- C. 0.02
- D. 20.00



- A. 40
- B. 400.0
- C. 0.4
- D. 0.04



- A. 600.00
- B. 60
- C. 0.6
- D. 0.06

1. _____

2. _____

3. _____

4. _____

5. _____

6. _____

7. _____

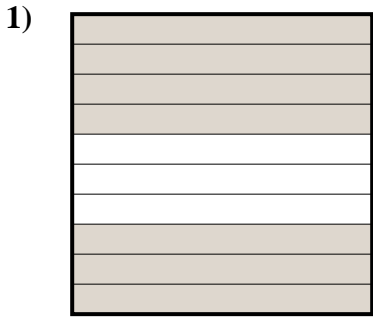
8. _____

9. _____

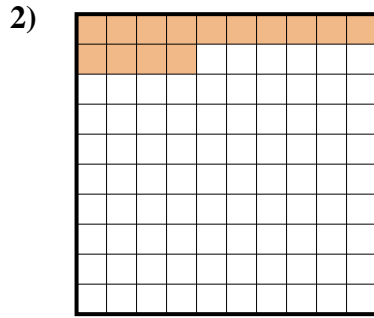


Determina cuál letra mejor representa la cantidad sombreada del total.

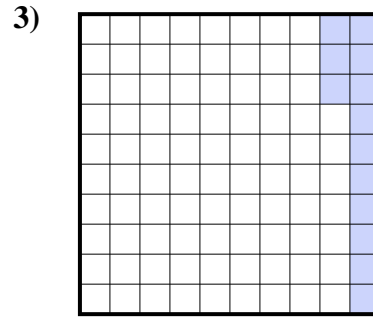
Respuestas




- A. 0.7
- B. 0.07
- C. 700.0
- D. 7



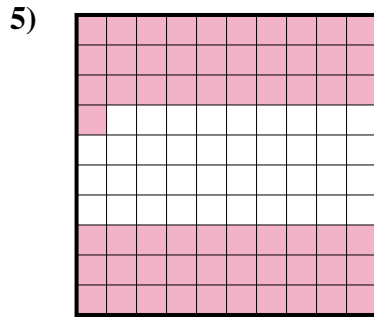
- A. 14
- B. 1.4
- C. 140.0
- D. 0.14



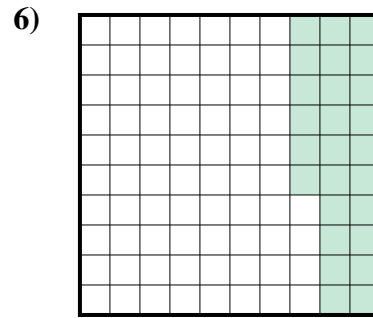
- A. 1.3
- B. 13
- C. 0.13
- D. 0.013



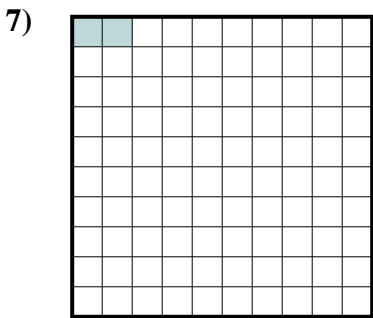
- A. 0.09
- B. 90
- C. 0.9
- D. 900.00



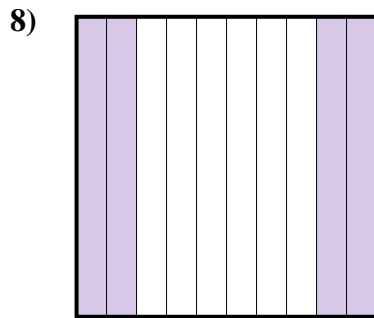
- A. 6.1
- B. 0.61
- C. 610.0
- D. 0.061



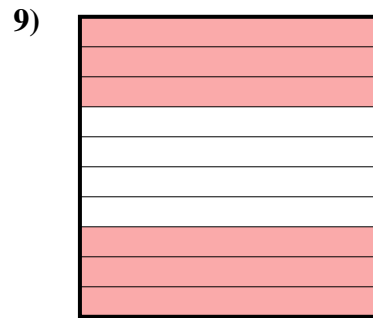
- A. 26
- B. 260.0
- C. 0.26
- D. 0.026



- A. 20.0
- B. 0.2
- C. 0.02
- D. 20.00



- A. 40
- B. 400.0
- C. 0.4
- D. 0.04



- A. 600.00
- B. 60
- C. 0.6
- D. 0.06

- 1. **A**
- 2. **D**
- 3. **C**
- 4. **C**
- 5. **B**
- 6. **C**
- 7. **C**
- 8. **C**
- 9. **C**