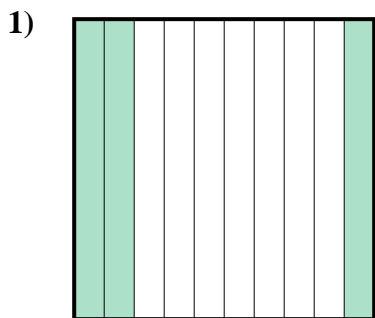


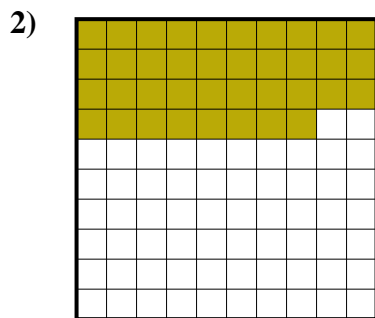


Determina cuál letra mejor representa la cantidad sombreada del total.

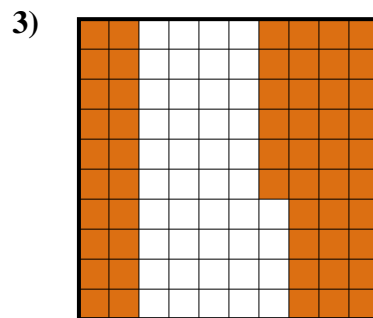
Respuestas



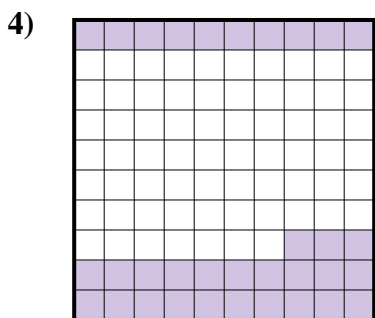
- A. 0.03
- B. 3
- C. 0.3
- D. 300.0




- A. 3.8
- B. 0.38
- C. 0.038
- D. 380.00




- A. 560.00
- B. 0.56
- C. 0.056
- D. 56



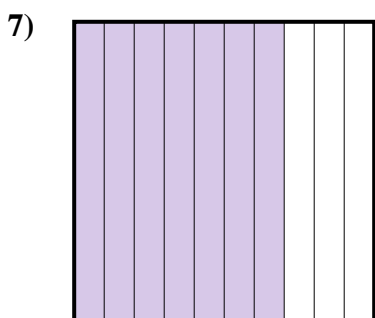
- A. 330.0
- B. 0.033
- C. 33
- D. 0.33



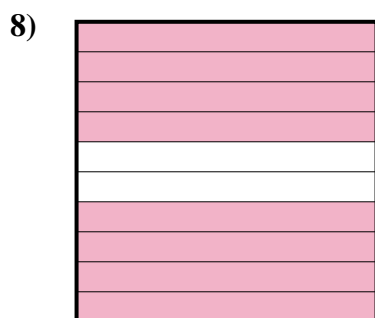
- A. 20
- B. 200.00
- C. 2
- D. 0.2



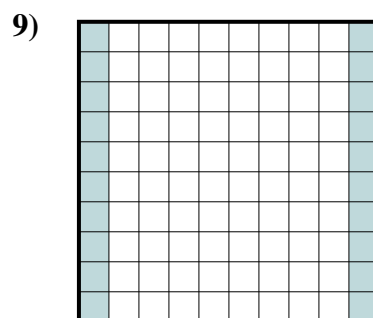
- A. 400.00
- B. 400.0
- C. 0.4
- D. 0.04



- A. 70
- B. 0.07
- C. 7
- D. 0.7



- A. 80
- B. 0.8
- C. 0.08
- D. 800.00



- A. 0.02
- B. 2
- C. 0.2
- D. 200.00

1. _____

2. _____

3. _____

4. _____

5. _____

6. _____

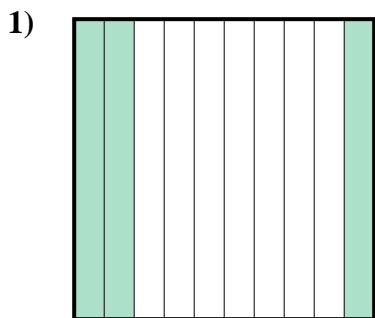
7. _____

8. _____

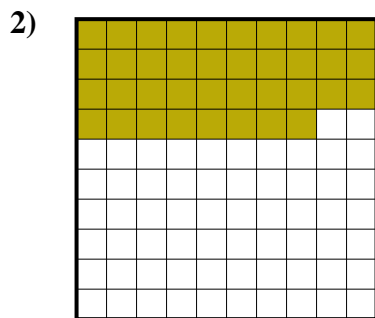
9. _____



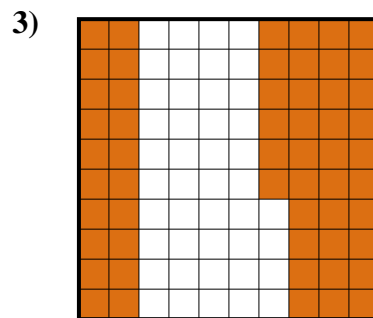
Determina cuál letra mejor representa la cantidad sombreada del total.



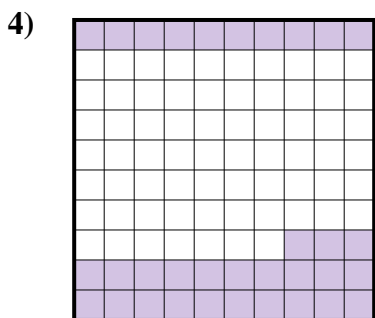
- A. 0.03
- B. 3
- C. 0.3
- D. 300.0




- A. 3.8
- B. 0.38
- C. 0.038
- D. 380.00



- A. 560.00
- B. 0.56
- C. 0.056
- D. 56



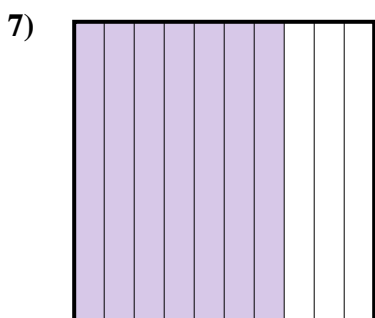
- A. 330.0
- B. 0.033
- C. 33
- D. 0.33



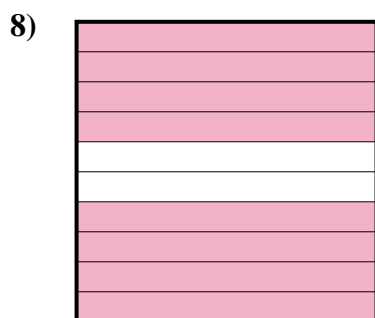
- A. 20
- B. 200.00
- C. 2
- D. 0.2



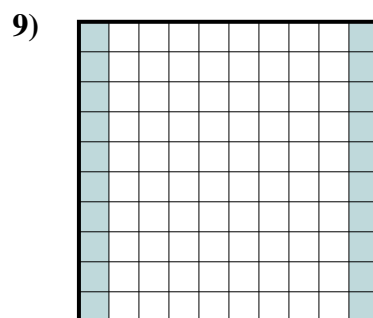
- A. 400.00
- B. 400.0
- C. 0.4
- D. 0.04



- A. 70
- B. 0.07
- C. 7
- D. 0.7



- A. 80
- B. 0.8
- C. 0.08
- D. 800.00



- A. 0.02
- B. 2
- C. 0.2
- D. 200.00

Respuestas

- 1. **C**
- 2. **B**
- 3. **B**
- 4. **D**
- 5. **D**
- 6. **C**
- 7. **D**
- 8. **B**
- 9. **C**