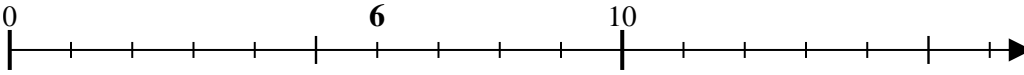


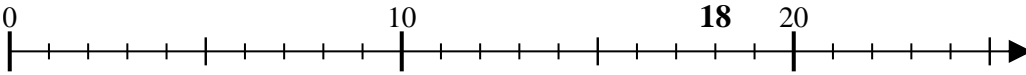


Usa las rectas numéricas para resolver los problemas.

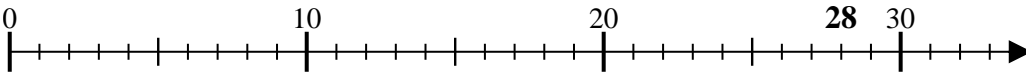
1) $6 \div 2 = 0$



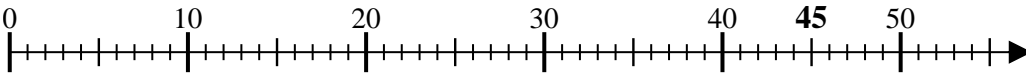
2) $18 \div 9 = 0$



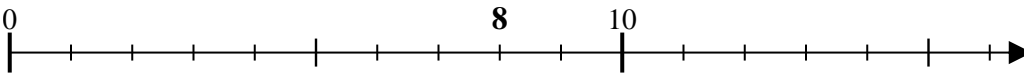
3) $28 \div 7 = 0$



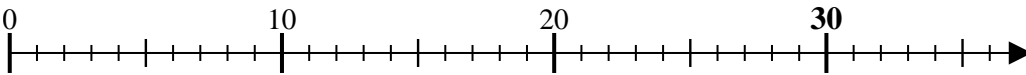
4) $45 \div 9 = 0$



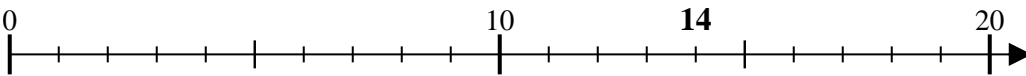
5) $8 \div 4 = 0$



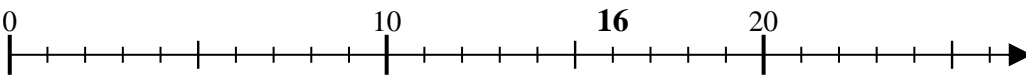
6) $30 \div 10 = 0$



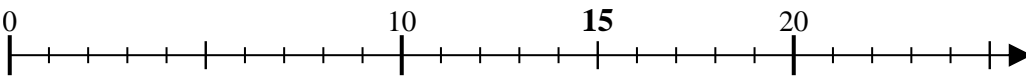
7) $14 \div 7 = 0$



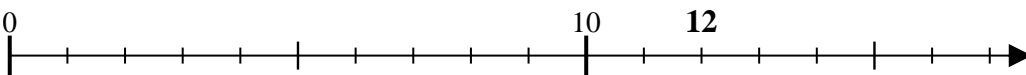
8) $16 \div 4 = 0$



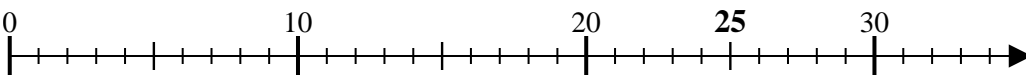
9) $15 \div 3 = 0$



10) $12 \div 6 = 0$



11) $25 \div 5 = 0$



Respuestas

1. _____
2. _____
3. _____
4. _____
5. _____
6. _____
7. _____
8. _____
9. _____
10. _____
11. _____

