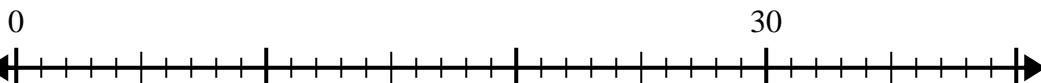


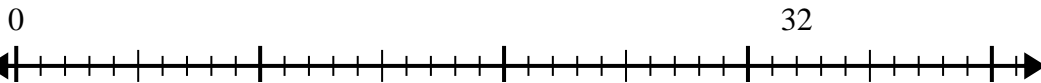


Usa la recta numérica para resolver el problema de división.

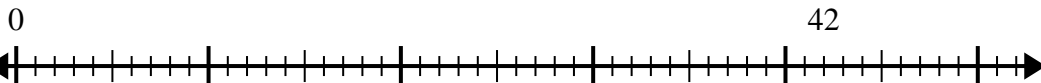
1) $30 \div 6 =$



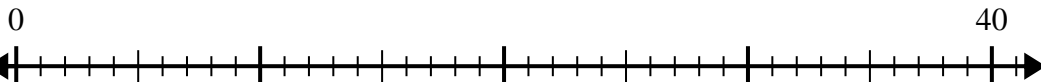
2) $32 \div 4 =$



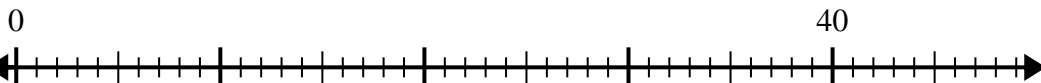
3) $42 \div 7 =$



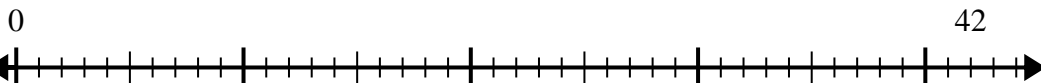
4) $40 \div 5 =$



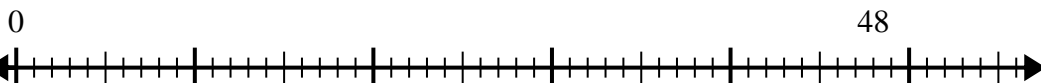
5) $40 \div 8 =$



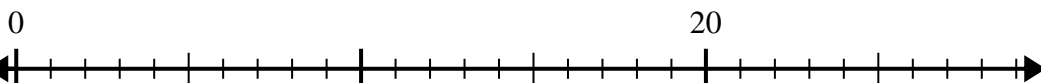
6) $42 \div 6 =$



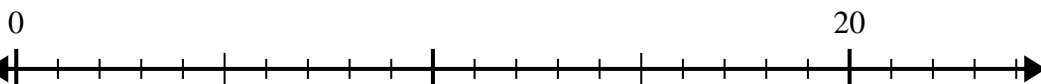
7) $48 \div 6 =$



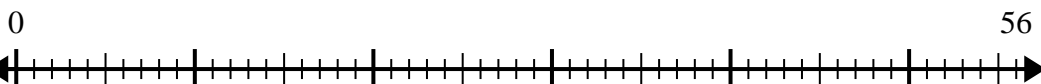
8) $20 \div 4 =$



9) $20 \div 5 =$



10) $56 \div 8 =$



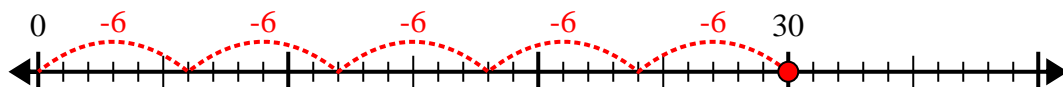
Respuestas

1. _____
2. _____
3. _____
4. _____
5. _____
6. _____
7. _____
8. _____
9. _____
10. _____

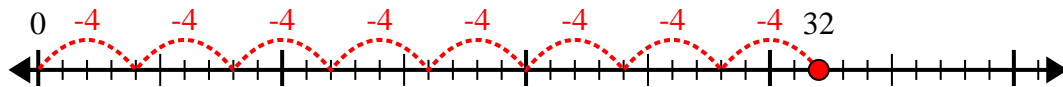


Usa la recta numérica para resolver el problema de división.

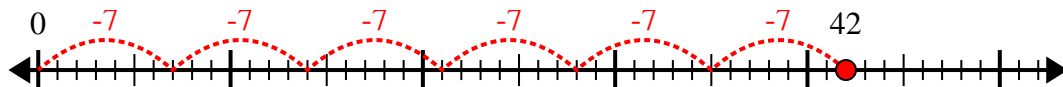
1) $30 \div 6 =$



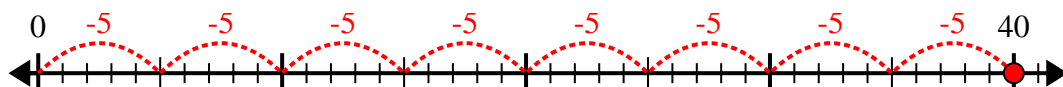
2) $32 \div 4 =$



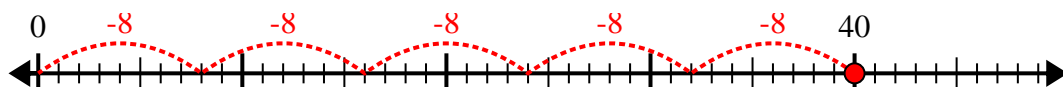
3) $42 \div 7 =$



4) $40 \div 5 =$



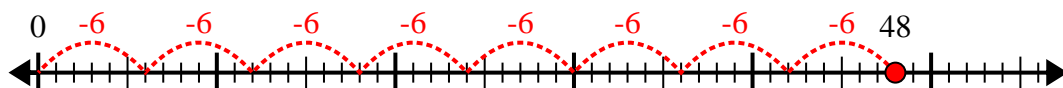
5) $40 \div 8 =$



6) $42 \div 6 =$



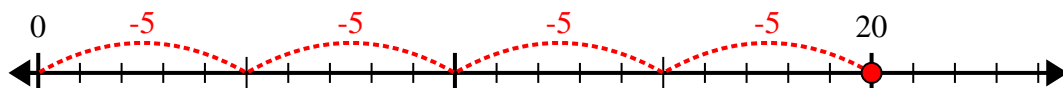
7) $48 \div 6 =$



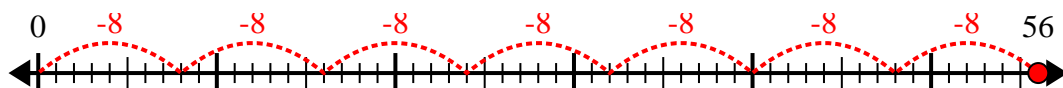
8) $20 \div 4 =$



9) $20 \div 5 =$



10) $56 \div 8 =$



Respuestas

1. 5

2. 8

3. 6

4. 8

5. 5

6. 7

7. 8

8. 5

9. 4

10. 7