

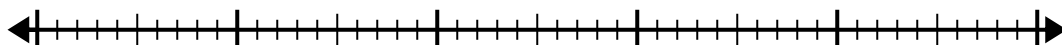


Usa la recta numérica para resolver el problema de división.

1) $40 \div 5 =$

0

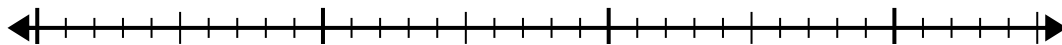
40



2) $28 \div 4 =$

0

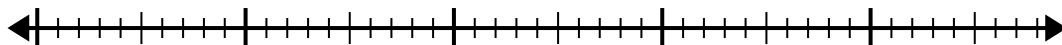
28



3) $42 \div 6 =$

0

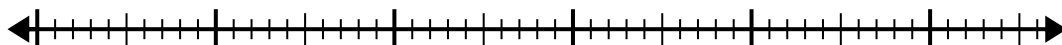
42



4) $56 \div 8 =$

0


56



5) $56 \div 7 =$

0

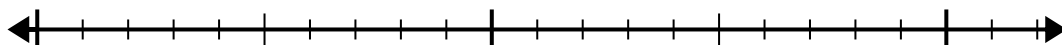
56



6) $20 \div 5 =$

0

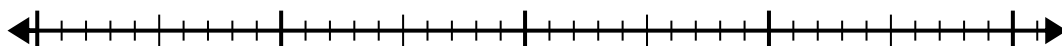
20



7) $35 \div 7 =$

0

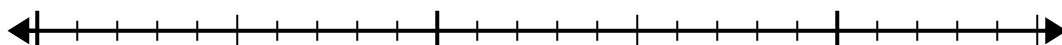
35



8) $24 \div 8 =$

0

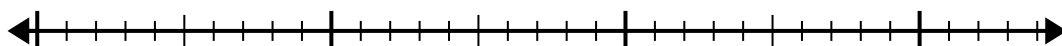
24



9) $30 \div 5 =$

0

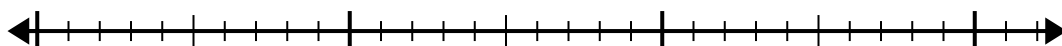
30



10) $32 \div 4 =$

0

32



Respuestas

1. _____

2. _____

3. _____

4. _____

5. _____

6. _____

7. _____

8. _____

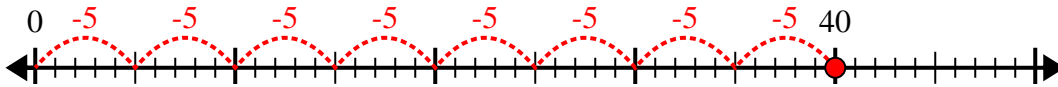
9. _____

10. _____

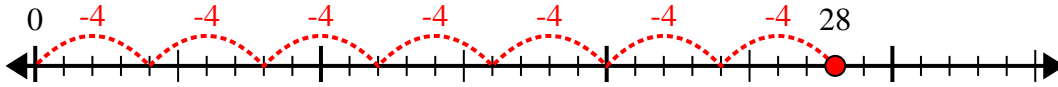


Usa la recta numérica para resolver el problema de división.

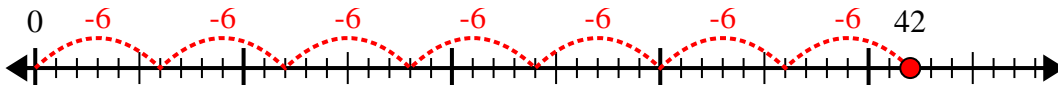
1) $40 \div 5 =$



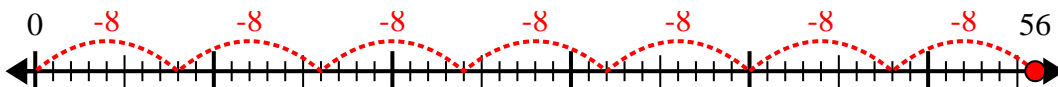
2) $28 \div 4 =$



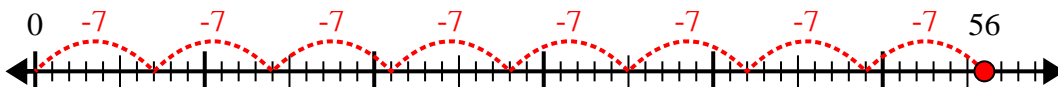
3) $42 \div 6 =$



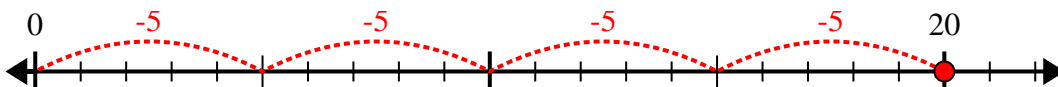
4) $56 \div 8 =$



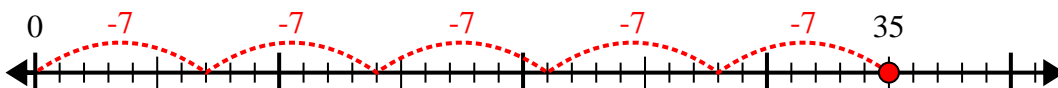
5) $56 \div 7 =$



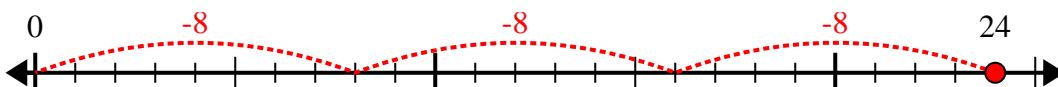
6) $20 \div 5 =$



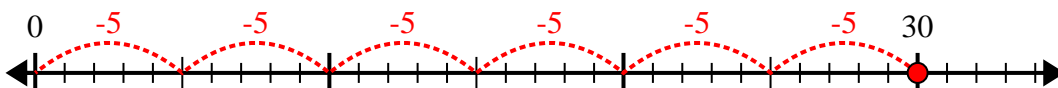
7) $35 \div 7 =$



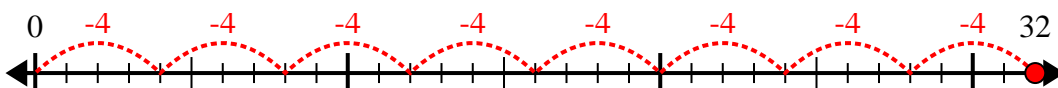
8) $24 \div 8 =$



9) $30 \div 5 =$



10) $32 \div 4 =$



Respuestas

1. 8

2. 7

3. 7

4. 7

5. 8

6. 4

7. 5

8. 3

9. 6

10. 8