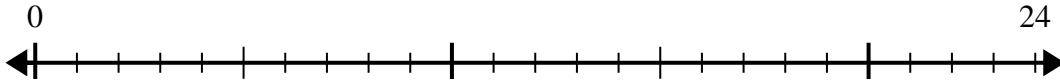


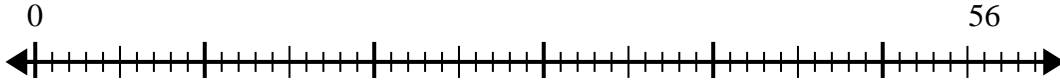


Usa la recta numérica para resolver el problema de división.

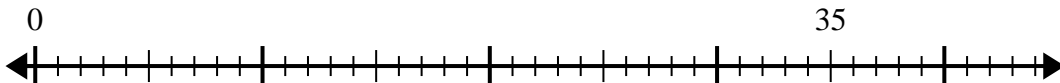
1) $24 \div 4 =$
0



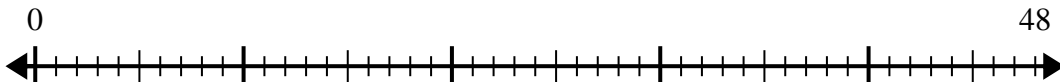
2) $56 \div 8 =$
0



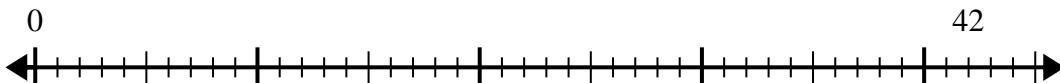
3) $35 \div 5 =$
0



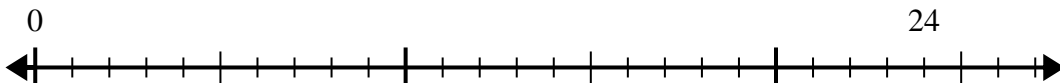
4) $48 \div 8 =$
0



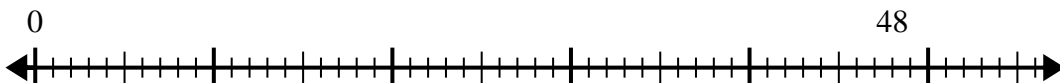
5) $42 \div 6 =$
0



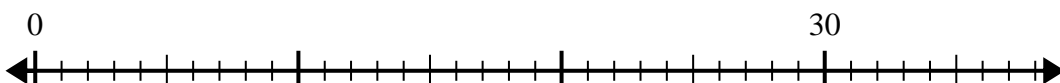
6) $24 \div 6 =$
0



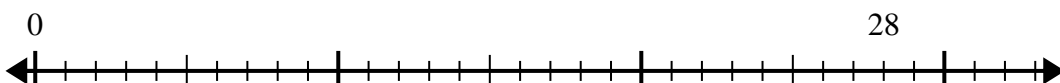
7) $48 \div 6 =$
0



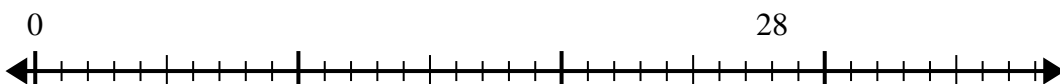
8) $30 \div 5 =$
0



9) $28 \div 7 =$
0



10) $28 \div 4 =$
0



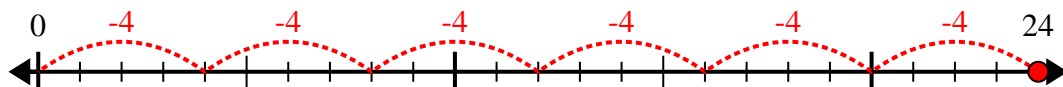
Respuestas

1. _____
2. _____
3. _____
4. _____
5. _____
6. _____
7. _____
8. _____
9. _____
10. _____

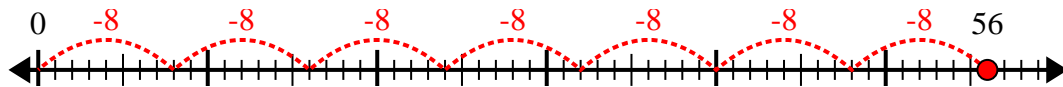


Usa la recta numérica para resolver el problema de división.

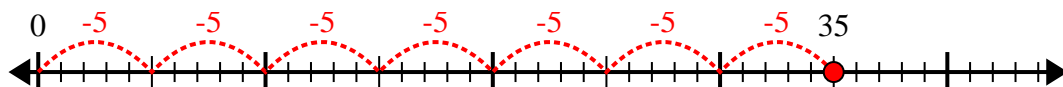
1) $24 \div 4 =$



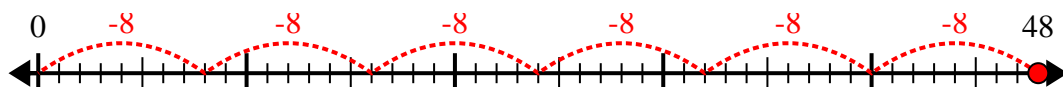
2) $56 \div 8 =$



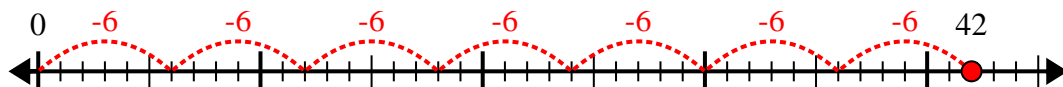
3) $35 \div 5 =$



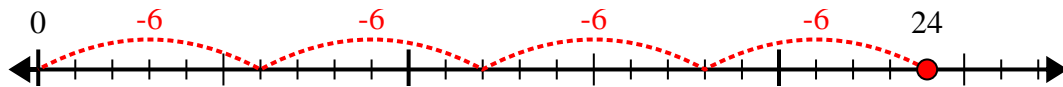
4) $48 \div 8 =$



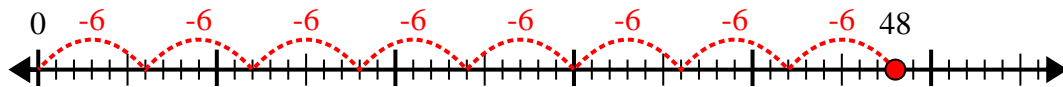
5) $42 \div 6 =$



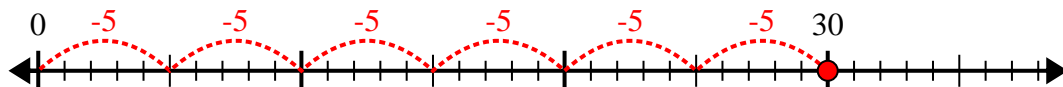
6) $24 \div 6 =$



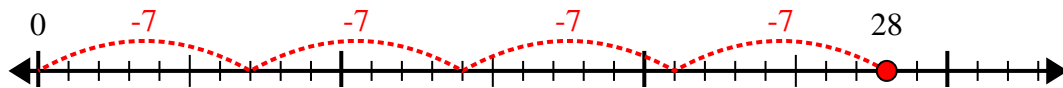
7) $48 \div 6 =$



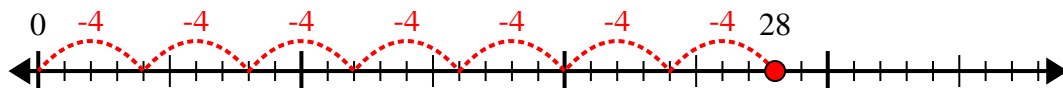
8) $30 \div 5 =$



9) $28 \div 7 =$



10) $28 \div 4 =$



Respuestas

1. 6

2. 7

3. 7

4. 6

5. 7

6. 4

7. 8

8. 6

9. 4

10. 7