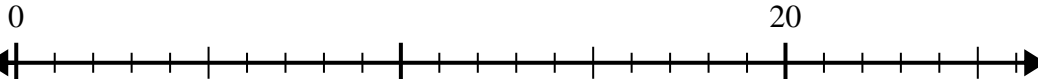




Usa la recta numérica para resolver el problema de división.

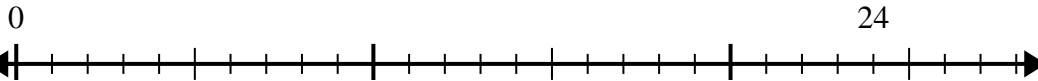
**Respuestas**

1)  $20 \div 5 =$



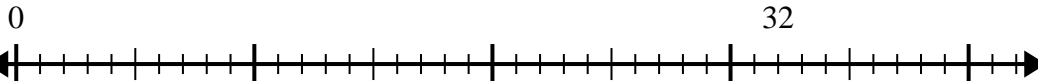
1. \_\_\_\_\_

2)  $24 \div 6 =$



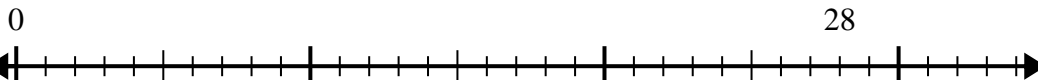
2. \_\_\_\_\_

3)  $32 \div 8 =$



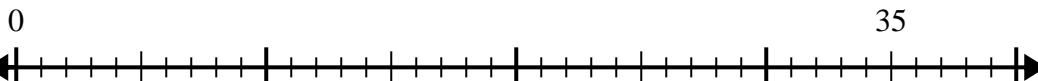
3. \_\_\_\_\_

4)  $28 \div 7 =$



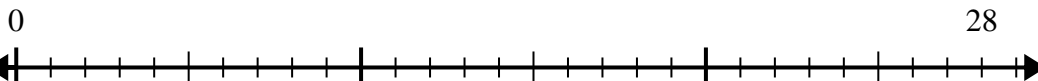
4. \_\_\_\_\_

5)  $35 \div 5 =$



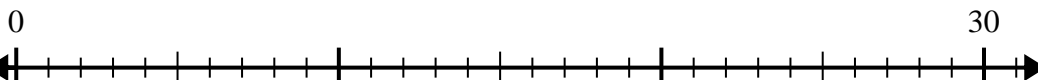
5. \_\_\_\_\_

6)  $28 \div 4 =$



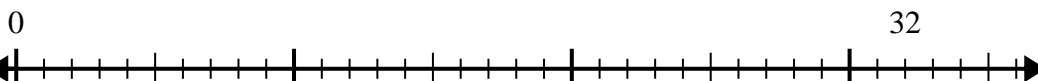
6. \_\_\_\_\_

7)  $30 \div 6 =$



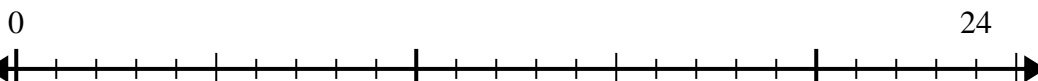
7. \_\_\_\_\_

8)  $32 \div 4 =$



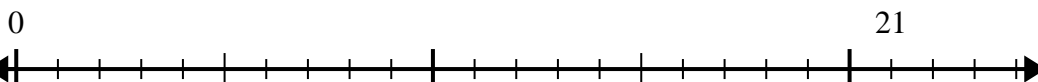
8. \_\_\_\_\_

9)  $24 \div 4 =$



9. \_\_\_\_\_

10)  $21 \div 7 =$

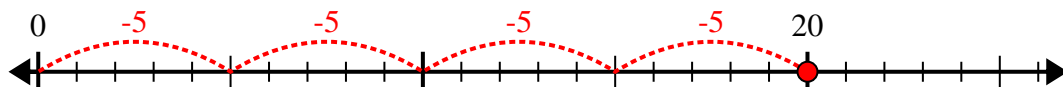


10. \_\_\_\_\_

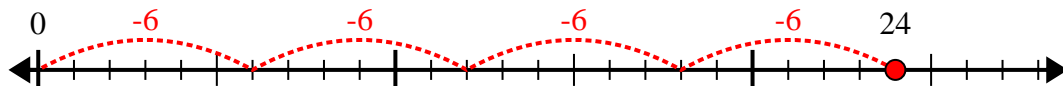


Usa la recta numérica para resolver el problema de división.

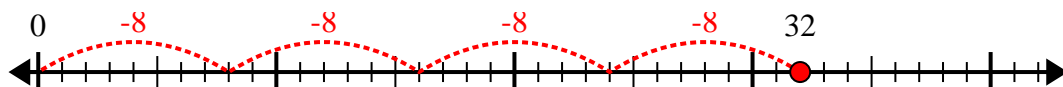
1)  $20 \div 5 =$



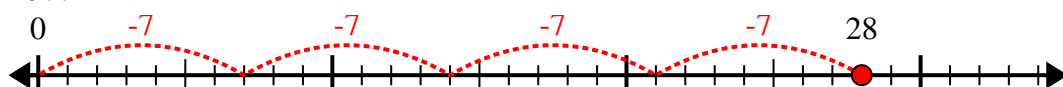
2)  $24 \div 6 =$



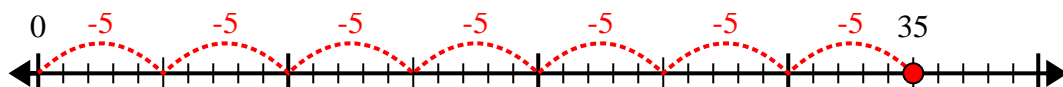
3)  $32 \div 8 =$



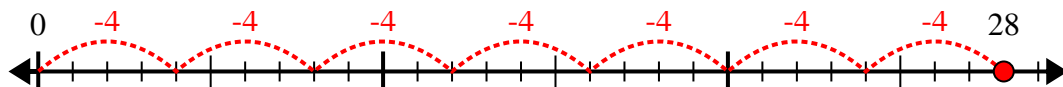
4)  $28 \div 7 =$



5)  $35 \div 5 =$



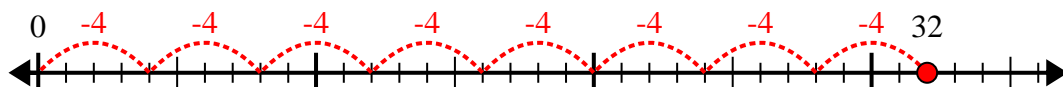
6)  $28 \div 4 =$



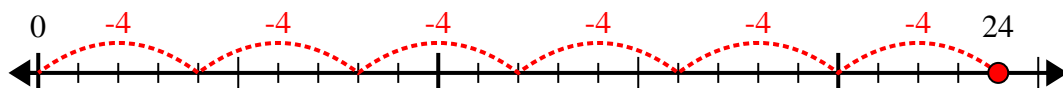
7)  $30 \div 6 =$



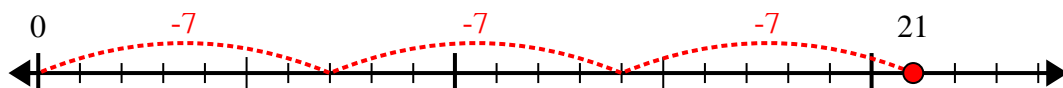
8)  $32 \div 4 =$



9)  $24 \div 4 =$



10)  $21 \div 7 =$



**Respuestas**

1. 4

2. 4

3. 4

4. 4

5. 7

6. 7

7. 5

8. 8

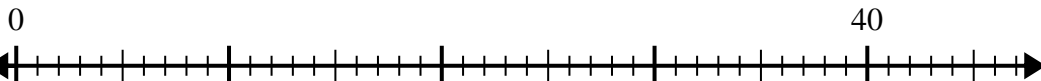
9. 6

10. 3

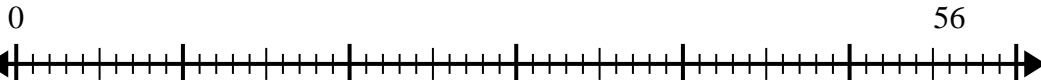


Usa la recta numérica para resolver el problema de división.

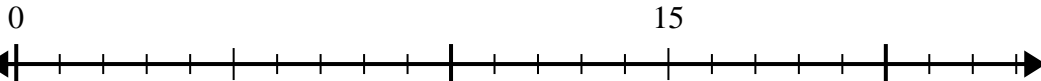
1)  $40 \div 5 =$



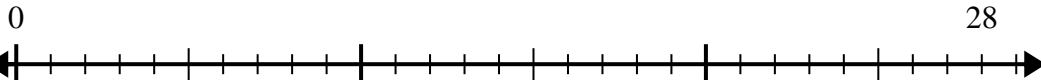
2)  $56 \div 7 =$



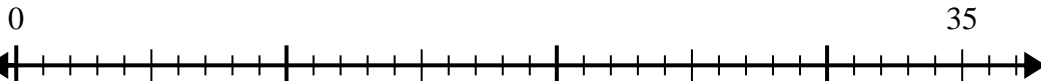
3)  $15 \div 5 =$



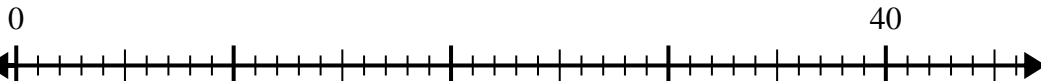
4)  $28 \div 4 =$



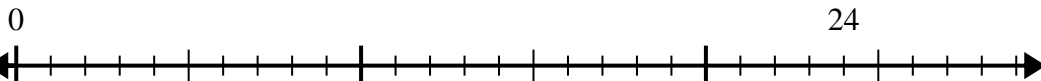
5)  $35 \div 7 =$



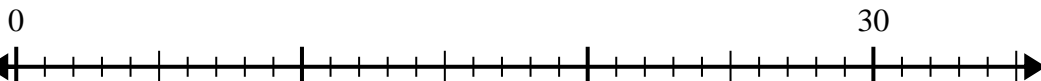
6)  $40 \div 8 =$



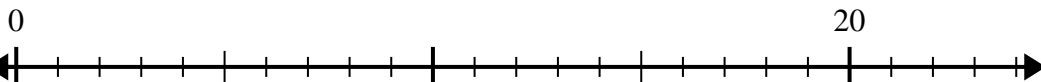
7)  $24 \div 4 =$



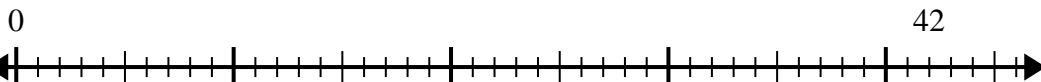
8)  $30 \div 5 =$



9)  $20 \div 4 =$



10)  $42 \div 6 =$



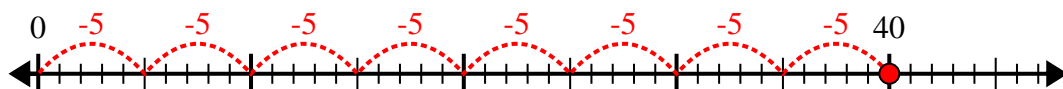
**Respuestas**

1. \_\_\_\_\_
2. \_\_\_\_\_
3. \_\_\_\_\_
4. \_\_\_\_\_
5. \_\_\_\_\_
6. \_\_\_\_\_
7. \_\_\_\_\_
8. \_\_\_\_\_
9. \_\_\_\_\_
10. \_\_\_\_\_

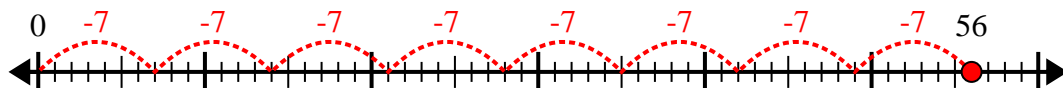


Usa la recta numérica para resolver el problema de división.

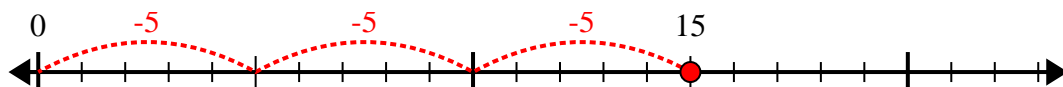
1)  $40 \div 5 =$



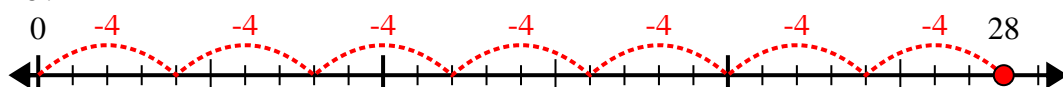
2)  $56 \div 7 =$



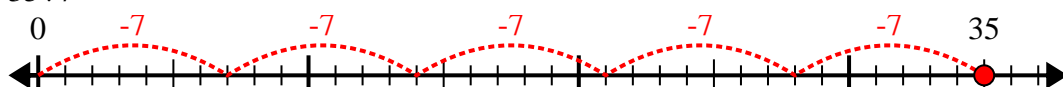
3)  $15 \div 5 =$



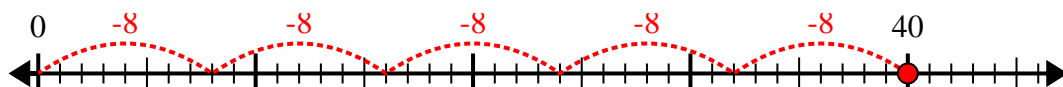
4)  $28 \div 4 =$



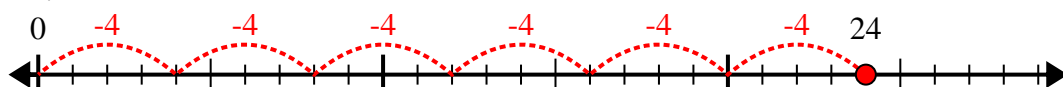
5)  $35 \div 7 =$



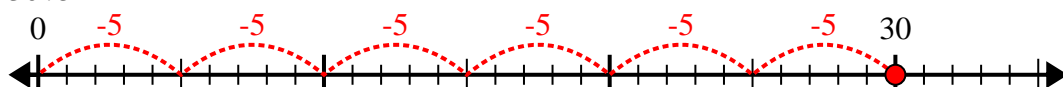
6)  $40 \div 8 =$



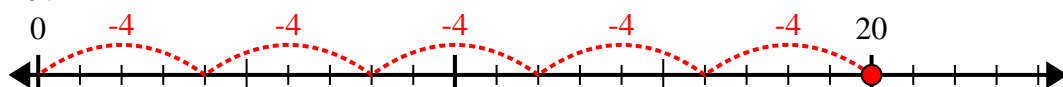
7)  $24 \div 4 =$



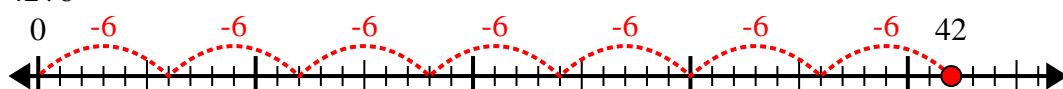
8)  $30 \div 5 =$



9)  $20 \div 4 =$



10)  $42 \div 6 =$



**Respuestas**

1. 8

2. 8

3. 3

4. 7

5. 5

6. 5

7. 6

8. 6

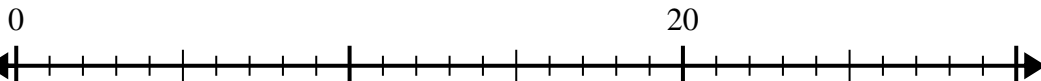
9. 5

10. 7

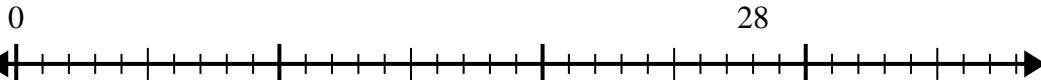


Usa la recta numérica para resolver el problema de división.

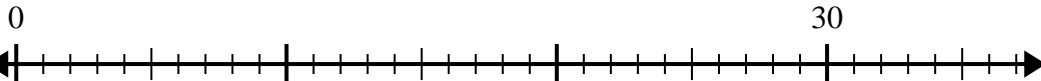
1)  $20 \div 5 =$



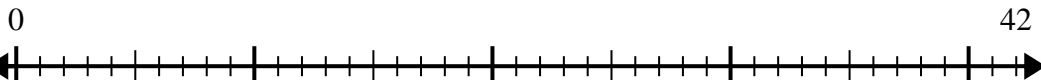
2)  $28 \div 4 =$



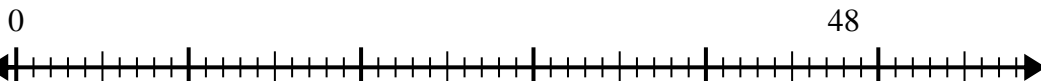
3)  $30 \div 6 =$



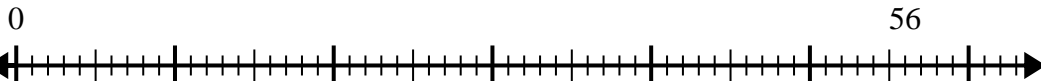
4)  $42 \div 6 =$



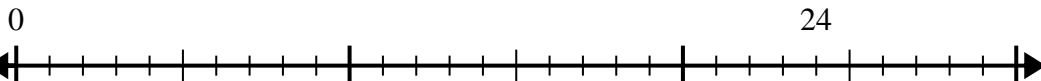
5)  $48 \div 6 =$



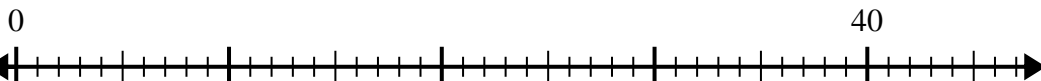
6)  $56 \div 8 =$



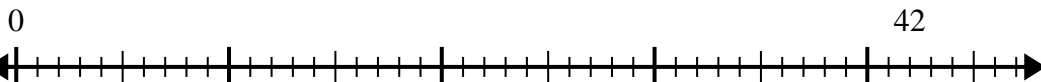
7)  $24 \div 6 =$



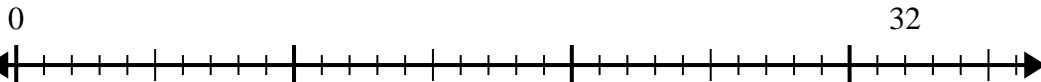
8)  $40 \div 8 =$



9)  $42 \div 7 =$



10)  $32 \div 4 =$

**Respuestas**

1. \_\_\_\_\_

2. \_\_\_\_\_

3. \_\_\_\_\_

4. \_\_\_\_\_

5. \_\_\_\_\_

6. \_\_\_\_\_

7. \_\_\_\_\_

8. \_\_\_\_\_

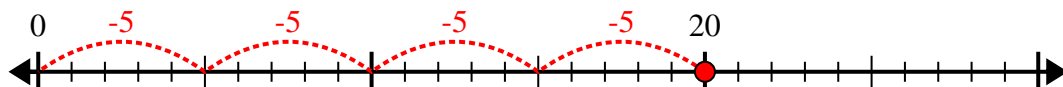
9. \_\_\_\_\_

10. \_\_\_\_\_

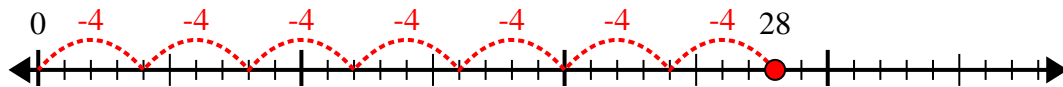


Usa la recta numérica para resolver el problema de división.

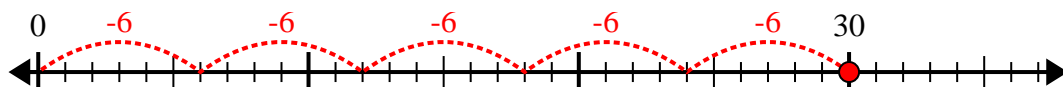
1)  $20 \div 5 =$



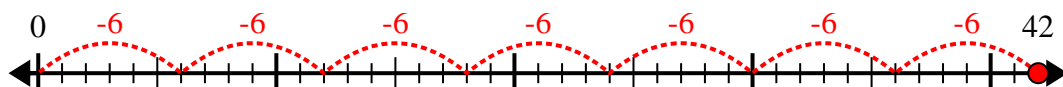
2)  $28 \div 4 =$



3)  $30 \div 6 =$



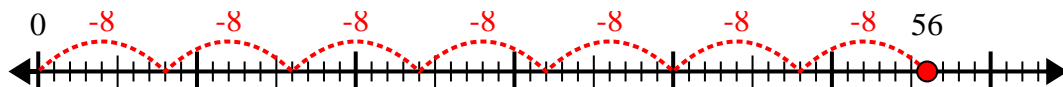
4)  $42 \div 6 =$



5)  $48 \div 6 =$



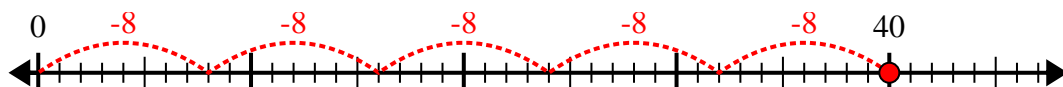
6)  $56 \div 8 =$



7)  $24 \div 6 =$



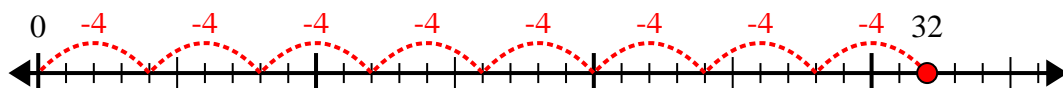
8)  $40 \div 8 =$



9)  $42 \div 7 =$



10)  $32 \div 4 =$



**Respuestas**

1. 4

2. 7

3. 5

4. 7

5. 8

6. 7

7. 4

8. 5

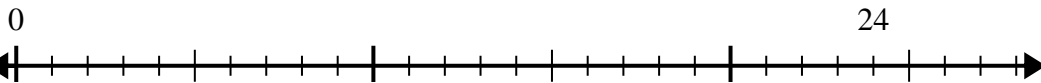
9. 6

10. 8

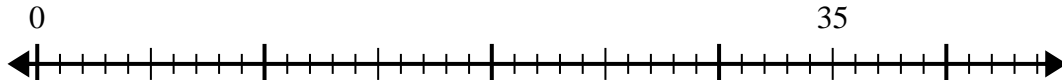


Usa la recta numérica para resolver el problema de división.

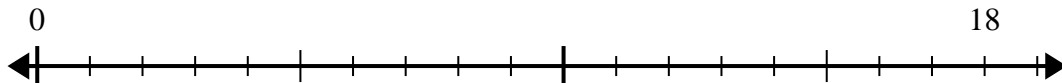
1)  $24 \div 6 =$



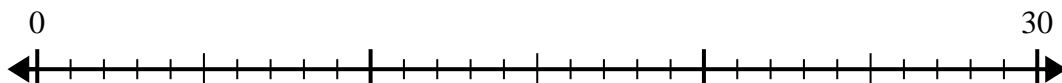
2)  $35 \div 7 =$



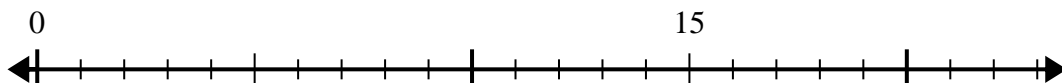
3)  $18 \div 6 =$



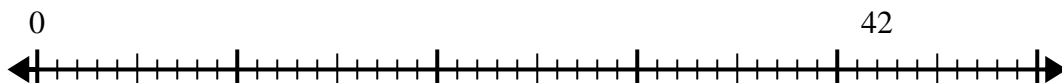
4)  $30 \div 6 =$



5)  $15 \div 5 =$



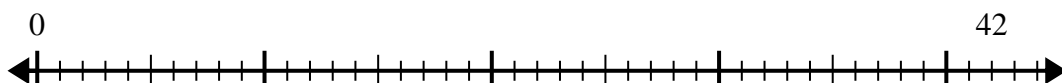
6)  $42 \div 6 =$



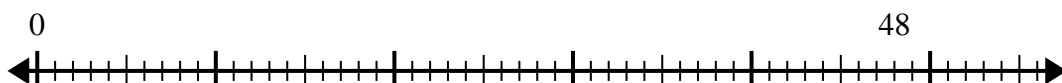
7)  $56 \div 8 =$



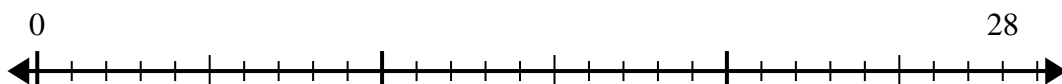
8)  $42 \div 7 =$



9)  $48 \div 8 =$



10)  $28 \div 4 =$



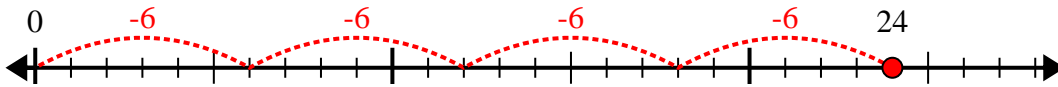
**Respuestas**

- 1. \_\_\_\_\_
- 2. \_\_\_\_\_
- 3. \_\_\_\_\_
- 4. \_\_\_\_\_
- 5. \_\_\_\_\_
- 6. \_\_\_\_\_
- 7. \_\_\_\_\_
- 8. \_\_\_\_\_
- 9. \_\_\_\_\_
- 10. \_\_\_\_\_

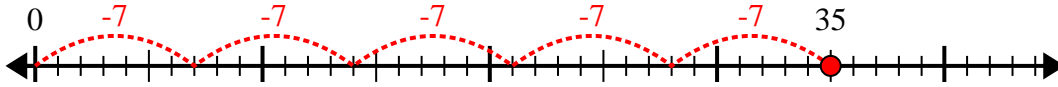


Usa la recta numérica para resolver el problema de división.

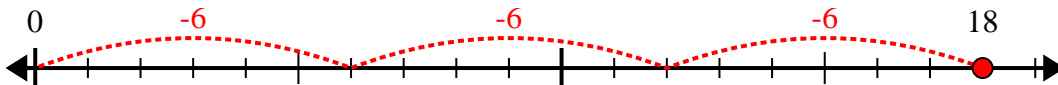
1)  $24 \div 6 =$



2)  $35 \div 7 =$



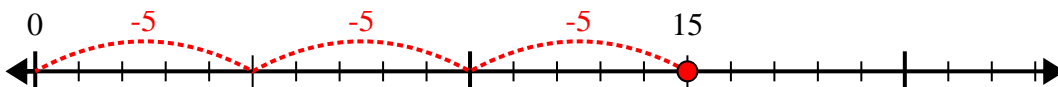
3)  $18 \div 6 =$



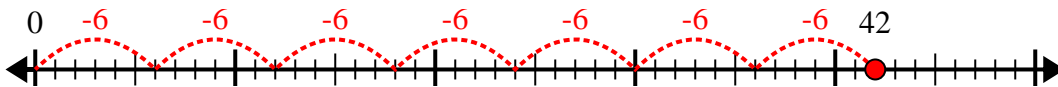
4)  $30 \div 6 =$



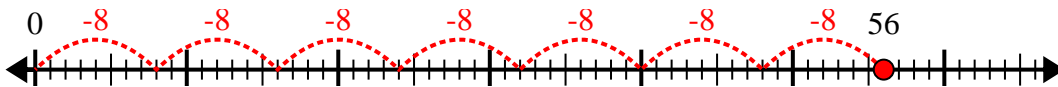
5)  $15 \div 5 =$



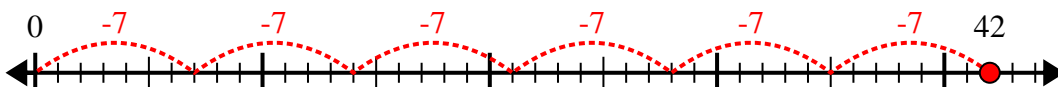
6)  $42 \div 6 =$



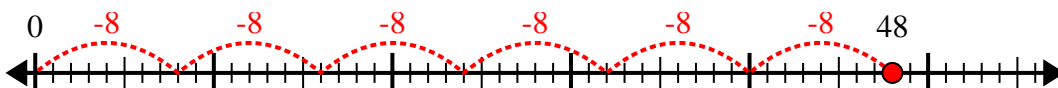
7)  $56 \div 8 =$



8)  $42 \div 7 =$



9)  $48 \div 8 =$



10)  $28 \div 4 =$



**Respuestas**

1. 4

2. 5

3. 3

4. 5

5. 3

6. 7

7. 7

8. 6

9. 6

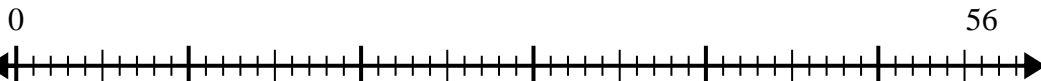
10. 7



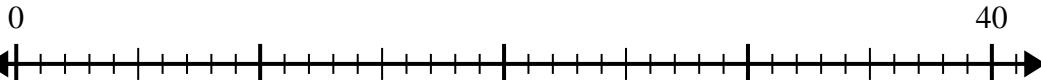


Usa la recta numérica para resolver el problema de división.

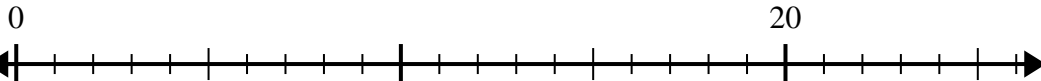
1)  $56 \div 7 =$



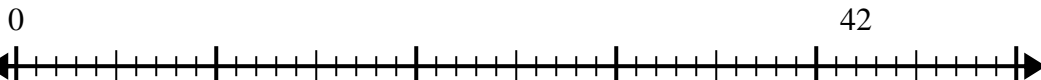
2)  $40 \div 5 =$



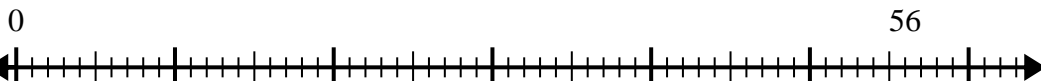
3)  $20 \div 4 =$



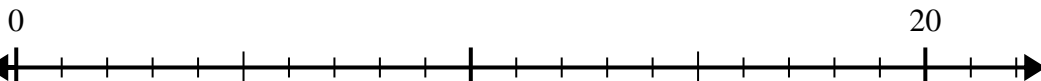
4)  $42 \div 7 =$



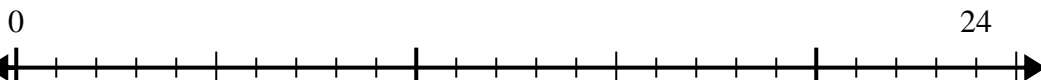
5)  $56 \div 8 =$



6)  $20 \div 5 =$



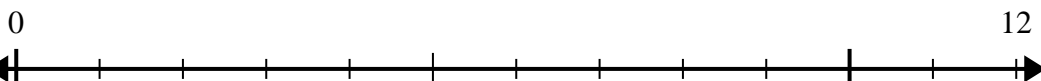
7)  $24 \div 4 =$



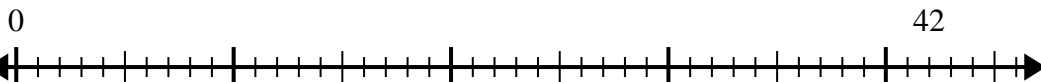
8)  $48 \div 8 =$



9)  $12 \div 4 =$



10)  $42 \div 6 =$



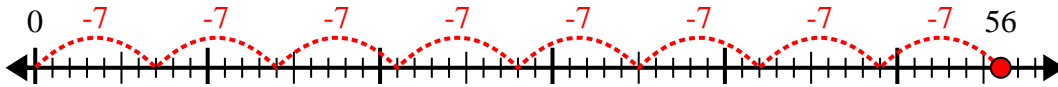
**Respuestas**

1. \_\_\_\_\_
2. \_\_\_\_\_
3. \_\_\_\_\_
4. \_\_\_\_\_
5. \_\_\_\_\_
6. \_\_\_\_\_
7. \_\_\_\_\_
8. \_\_\_\_\_
9. \_\_\_\_\_
10. \_\_\_\_\_

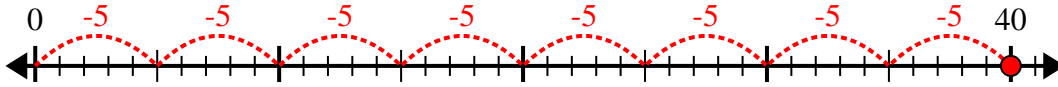


Usa la recta numérica para resolver el problema de división.

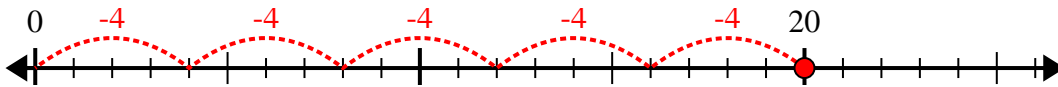
1)  $56 \div 7 =$



2)  $40 \div 5 =$



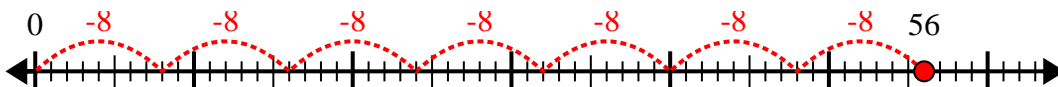
3)  $20 \div 4 =$



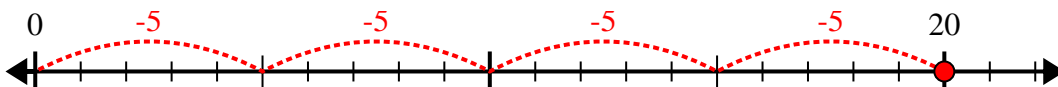
4)  $42 \div 7 =$



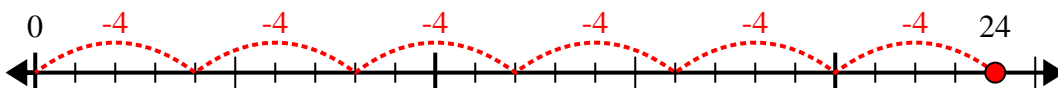
5)  $56 \div 8 =$



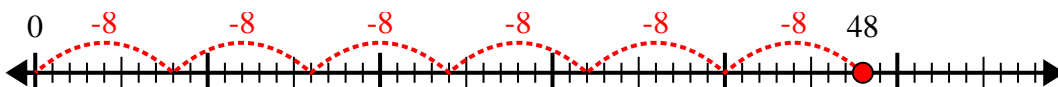
6)  $20 \div 5 =$



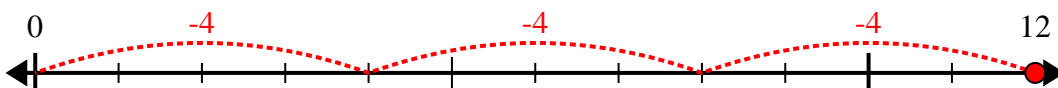
7)  $24 \div 4 =$



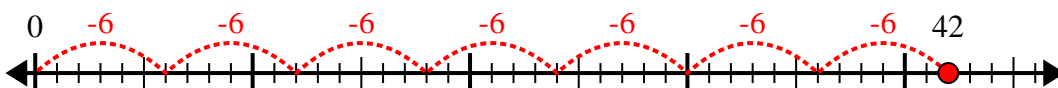
8)  $48 \div 8 =$



9)  $12 \div 4 =$



10)  $42 \div 6 =$



**Respuestas**

1. 8

2. 8

3. 5

4. 6

5. 7

6. 4

7. 6

8. 6

9. 3

10. 7

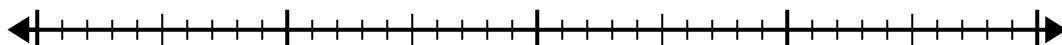


Usa la recta numérica para resolver el problema de división.

1)  $30 \div 6 =$

0

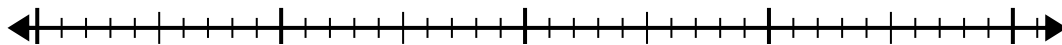
30



2)  $32 \div 4 =$

0

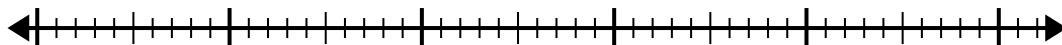
32



3)  $42 \div 7 =$

0

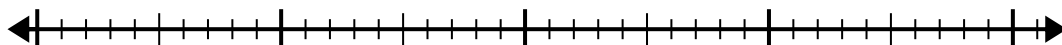
42



4)  $40 \div 5 =$

0

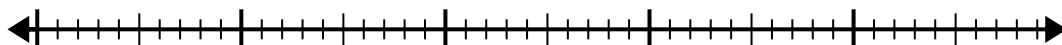
40



5)  $40 \div 8 =$

0

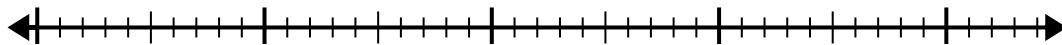
40



6)  $42 \div 6 =$

0

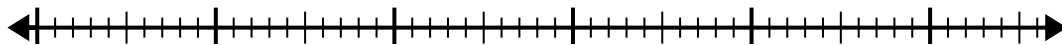
42



7)  $48 \div 6 =$

0

48



8)  $20 \div 4 =$

0

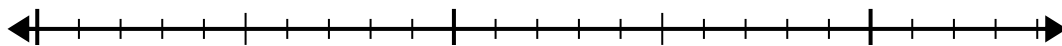
20



9)  $20 \div 5 =$

0

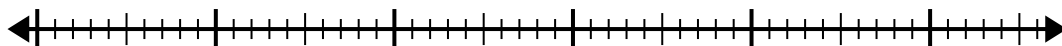
20



10)  $56 \div 8 =$

0

56

**Respuestas**

1. \_\_\_\_\_

2. \_\_\_\_\_

3. \_\_\_\_\_

4. \_\_\_\_\_

5. \_\_\_\_\_

6. \_\_\_\_\_

7. \_\_\_\_\_

8. \_\_\_\_\_

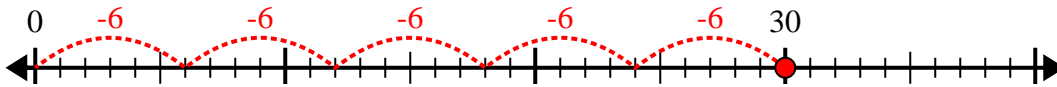
9. \_\_\_\_\_

10. \_\_\_\_\_

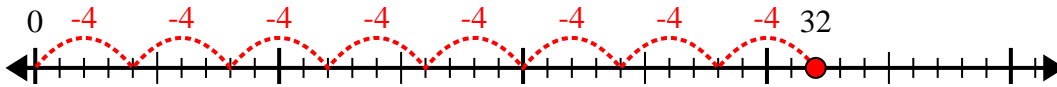


Usa la recta numérica para resolver el problema de división.

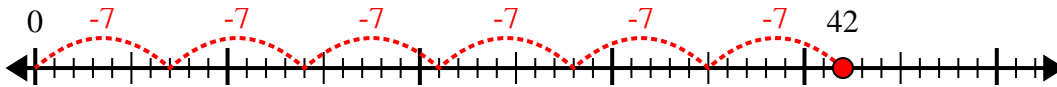
1)  $30 \div 6 =$



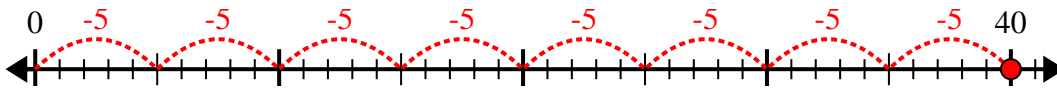
2)  $32 \div 4 =$



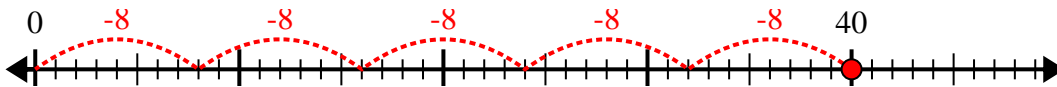
3)  $42 \div 7 =$



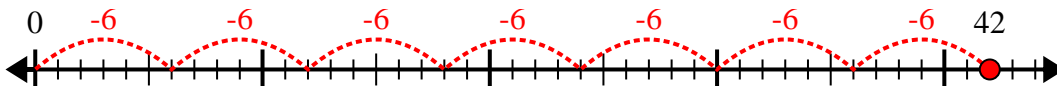
4)  $40 \div 5 =$



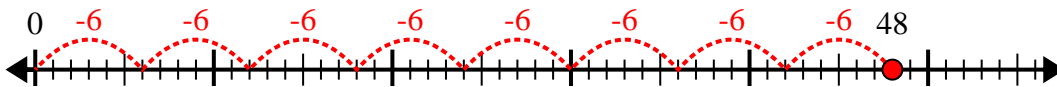
5)  $40 \div 8 =$



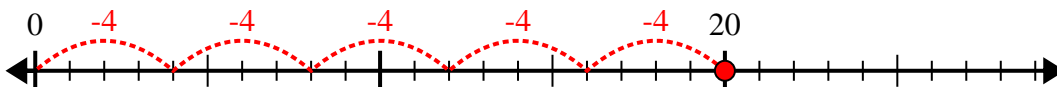
6)  $42 \div 6 =$



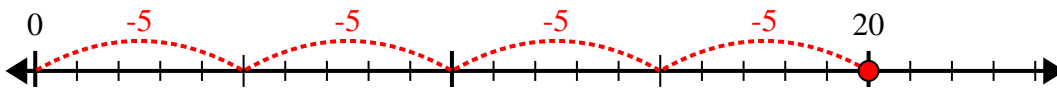
7)  $48 \div 6 =$



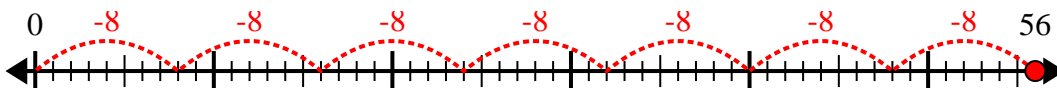
8)  $20 \div 4 =$



9)  $20 \div 5 =$



10)  $56 \div 8 =$



**Respuestas**

1. 5

2. 8

3. 6

4. 8

5. 5

6. 7

7. 8

8. 5

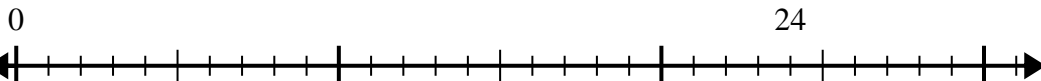
9. 4

10. 7

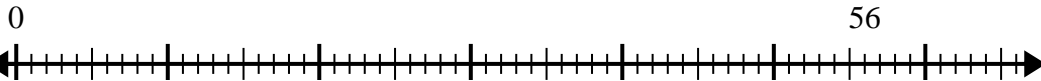


Usa la recta numérica para resolver el problema de división.

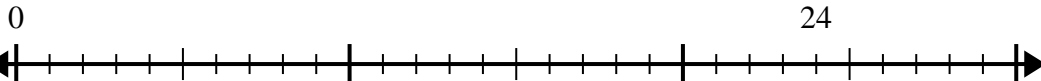
1)  $24 \div 8 =$



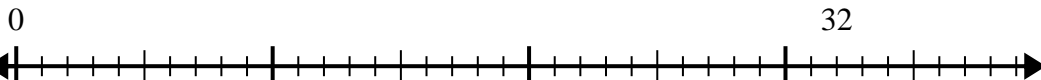
2)  $56 \div 8 =$



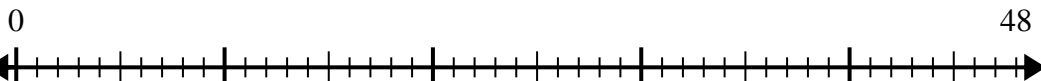
3)  $24 \div 4 =$



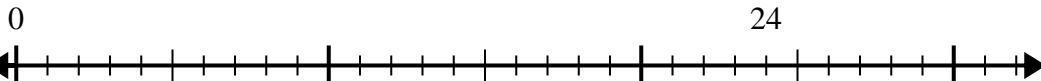
4)  $32 \div 4 =$



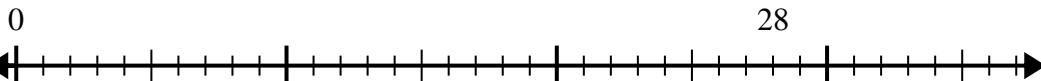
5)  $48 \div 8 =$



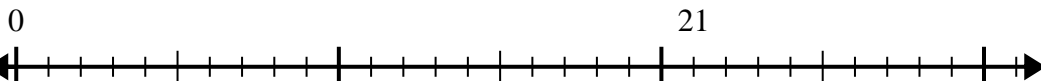
6)  $24 \div 6 =$



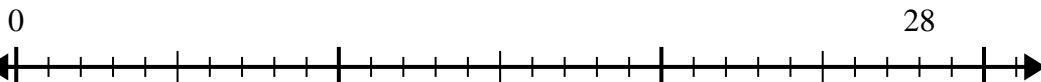
7)  $28 \div 4 =$



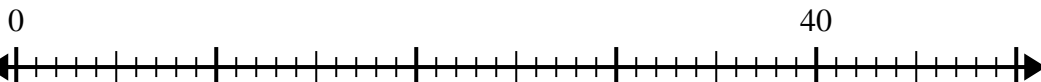
8)  $21 \div 7 =$



9)  $28 \div 7 =$



10)  $40 \div 5 =$



**Respuestas**

1. \_\_\_\_\_

2. \_\_\_\_\_

3. \_\_\_\_\_

4. \_\_\_\_\_

5. \_\_\_\_\_

6. \_\_\_\_\_

7. \_\_\_\_\_

8. \_\_\_\_\_

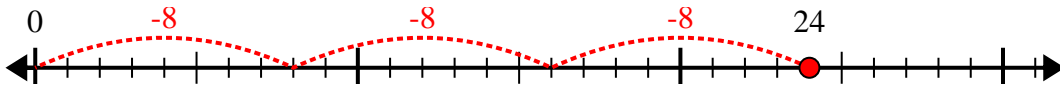
9. \_\_\_\_\_

10. \_\_\_\_\_

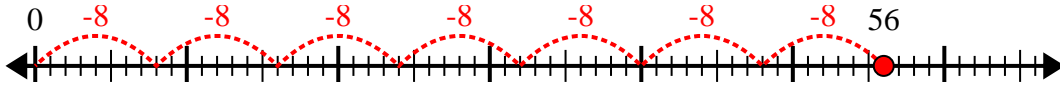


Usa la recta numérica para resolver el problema de división.

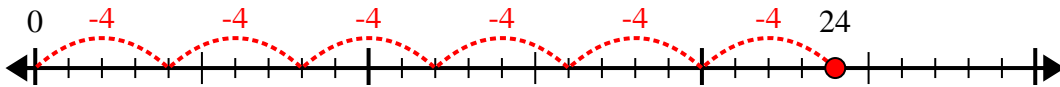
1)  $24 \div 8 =$



2)  $56 \div 8 =$



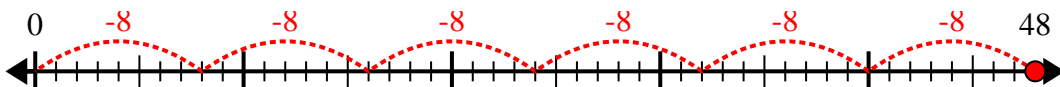
3)  $24 \div 4 =$



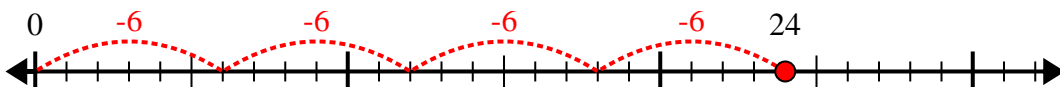
4)  $32 \div 4 =$



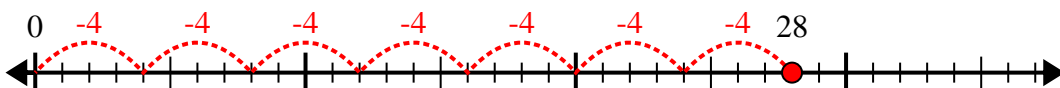
5)  $48 \div 8 =$



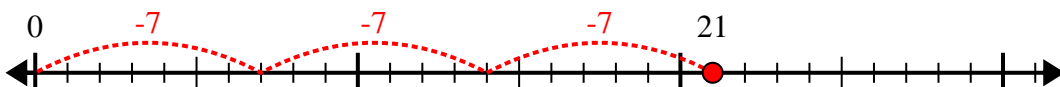
6)  $24 \div 6 =$



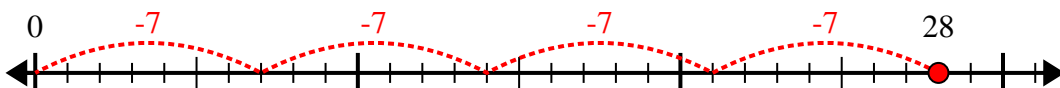
7)  $28 \div 4 =$



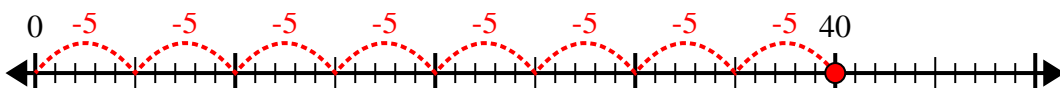
8)  $21 \div 7 =$



9)  $28 \div 7 =$



10)  $40 \div 5 =$



**Respuestas**

1. 3

2. 7

3. 6

4. 8

5. 6

6. 4

7. 7

8. 3

9. 4

10. 8

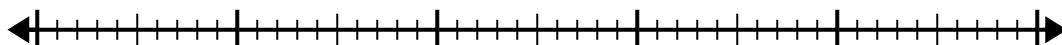


Usa la recta numérica para resolver el problema de división.

1)  $40 \div 5 =$

0

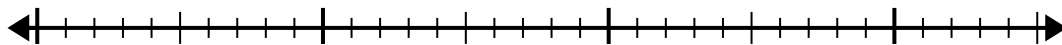
40



2)  $28 \div 4 =$

0

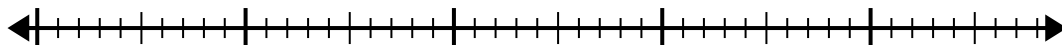
28



3)  $42 \div 6 =$

0

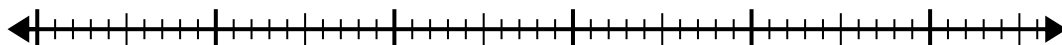
42



4)  $56 \div 8 =$

0


56



5)  $56 \div 7 =$

0

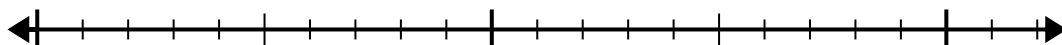
56



6)  $20 \div 5 =$

0

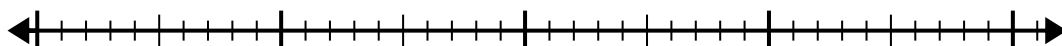
20



7)  $35 \div 7 =$

0

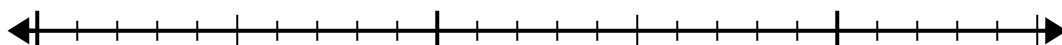
35



8)  $24 \div 8 =$

0

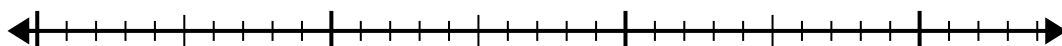
24



9)  $30 \div 5 =$

0

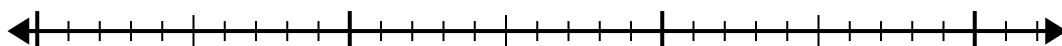
30



10)  $32 \div 4 =$

0

32



**Respuestas**

1. \_\_\_\_\_

2. \_\_\_\_\_

3. \_\_\_\_\_

4. \_\_\_\_\_

5. \_\_\_\_\_

6. \_\_\_\_\_

7. \_\_\_\_\_

8. \_\_\_\_\_

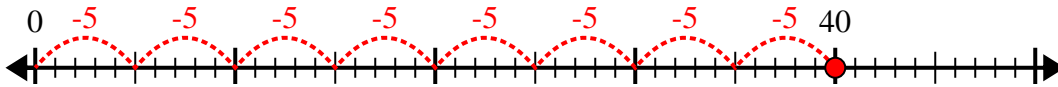
9. \_\_\_\_\_

10. \_\_\_\_\_

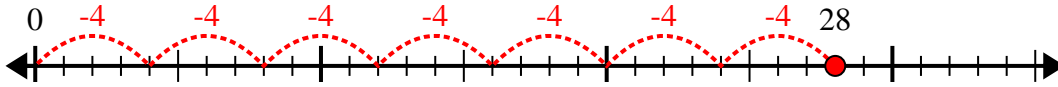


Usa la recta numérica para resolver el problema de división.

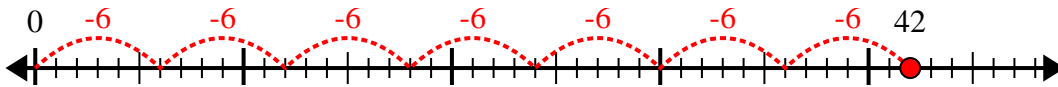
1)  $40 \div 5 =$



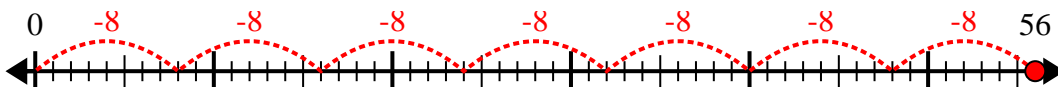
2)  $28 \div 4 =$



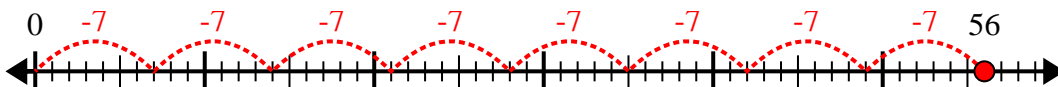
3)  $42 \div 6 =$



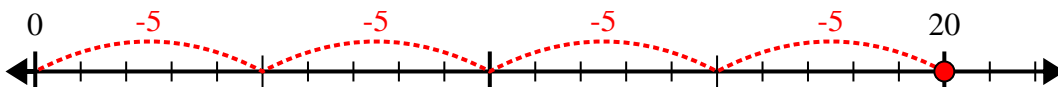
4)  $56 \div 8 =$



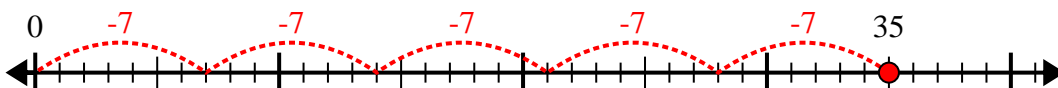
5)  $56 \div 7 =$



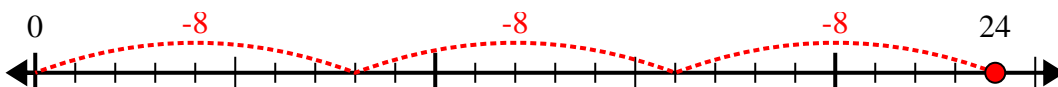
6)  $20 \div 5 =$



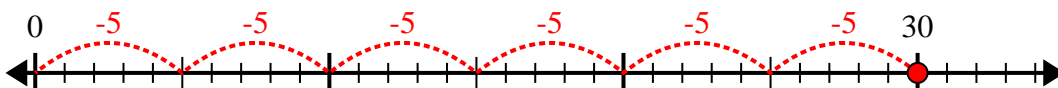
7)  $35 \div 7 =$



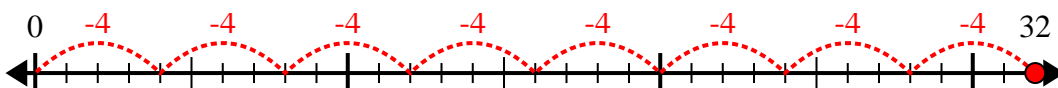
8)  $24 \div 8 =$



9)  $30 \div 5 =$



10)  $32 \div 4 =$



**Respuestas**

1. 8

2. 7

3. 7

4. 7

5. 8

6. 4

7. 5

8. 3

9. 6

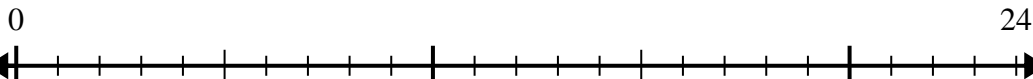
10. 8



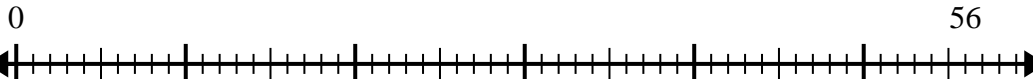


Usa la recta numérica para resolver el problema de división.

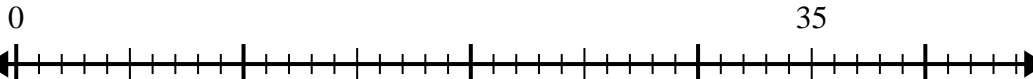
1)  $24 \div 4 =$



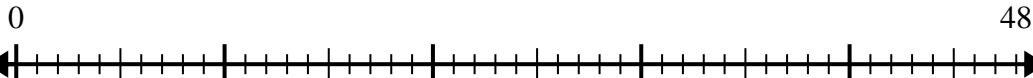
2)  $56 \div 8 =$



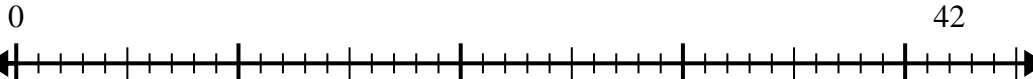
3)  $35 \div 5 =$



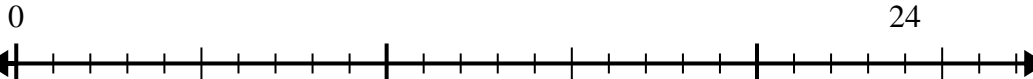
4)  $48 \div 8 =$



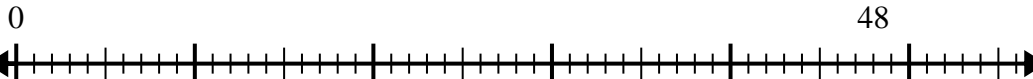
5)  $42 \div 6 =$



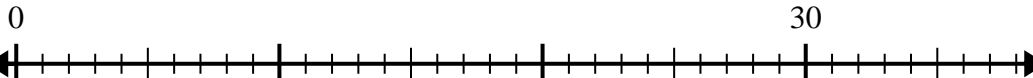
6)  $24 \div 6 =$



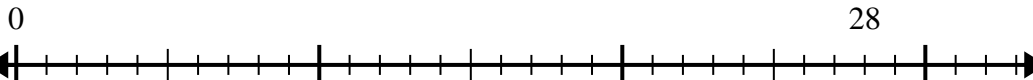
7)  $48 \div 6 =$



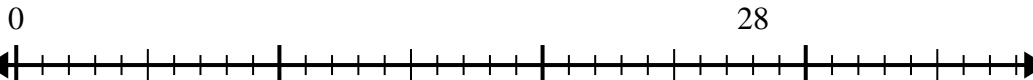
8)  $30 \div 5 =$



9)  $28 \div 7 =$



10)  $28 \div 4 =$



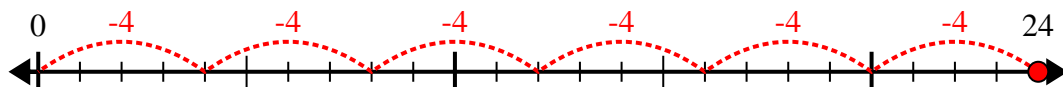
**Respuestas**

1. \_\_\_\_\_
2. \_\_\_\_\_
3. \_\_\_\_\_
4. \_\_\_\_\_
5. \_\_\_\_\_
6. \_\_\_\_\_
7. \_\_\_\_\_
8. \_\_\_\_\_
9. \_\_\_\_\_
10. \_\_\_\_\_

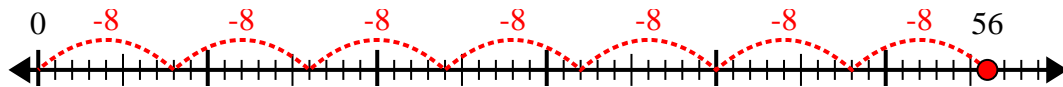


Usa la recta numérica para resolver el problema de división.

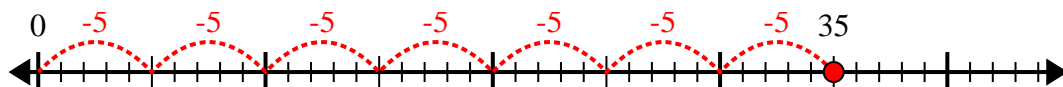
1)  $24 \div 4 =$



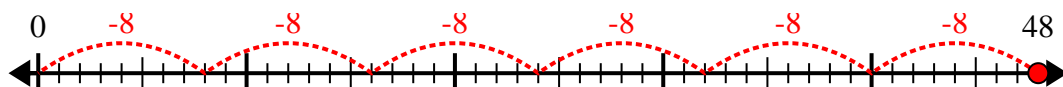
2)  $56 \div 8 =$



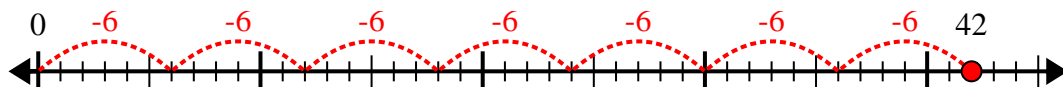
3)  $35 \div 5 =$



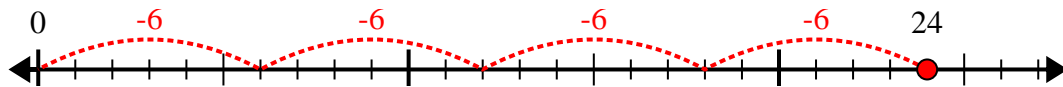
4)  $48 \div 8 =$



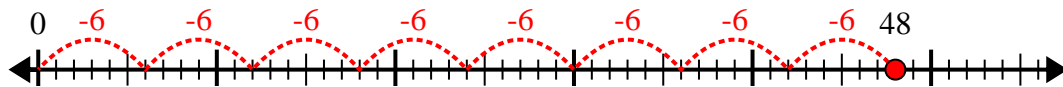
5)  $42 \div 6 =$



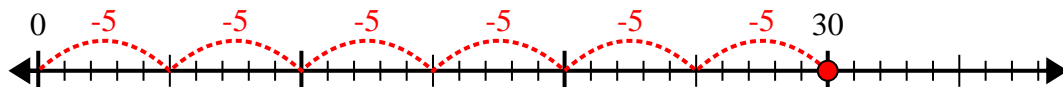
6)  $24 \div 6 =$



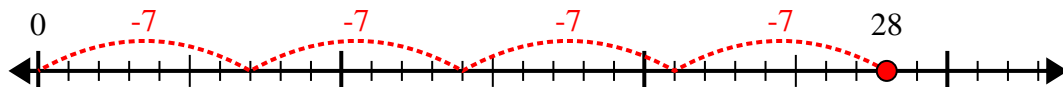
7)  $48 \div 6 =$



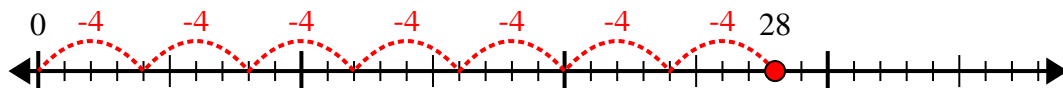
8)  $30 \div 5 =$



9)  $28 \div 7 =$



10)  $28 \div 4 =$



**Respuestas**

1. 6

2. 7

3. 7

4. 6

5. 7

6. 4

7. 8

8. 6

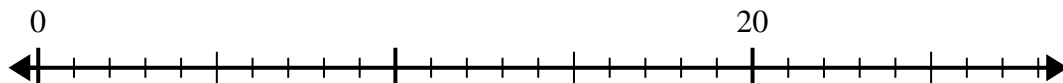
9. 4

10. 7

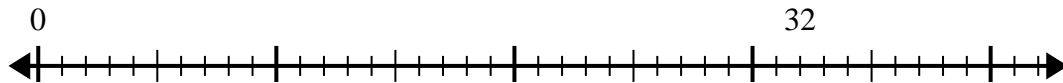


Usa la recta numérica para resolver el problema de división.

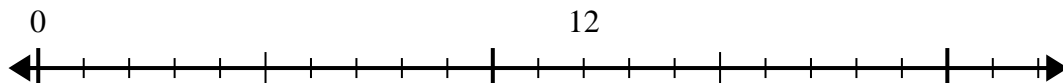
1)  $20 \div 4 =$



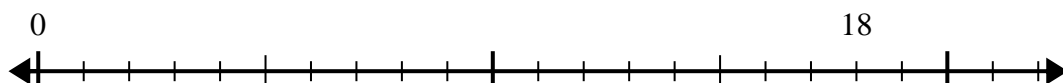
2)  $32 \div 8 =$



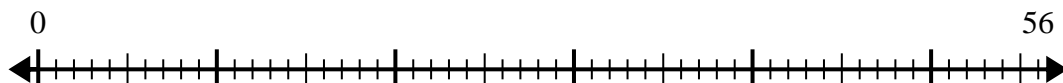
3)  $12 \div 4 =$



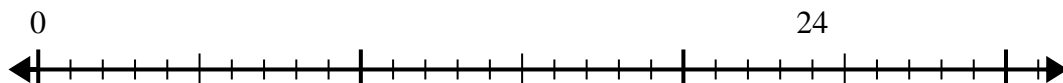
4)  $18 \div 6 =$



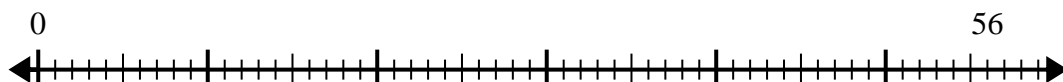
5)  $56 \div 8 =$



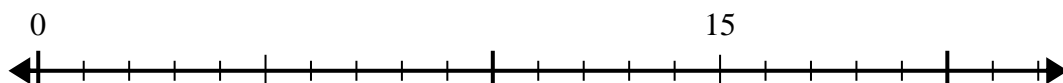
6)  $24 \div 8 =$



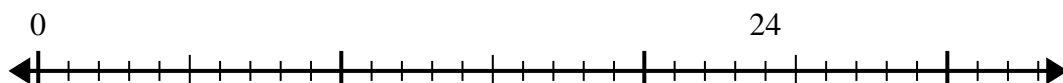
7)  $56 \div 7 =$



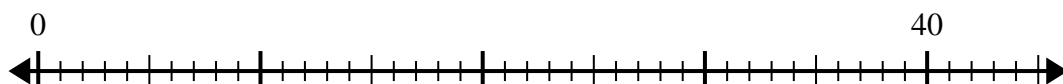
8)  $15 \div 5 =$



9)  $24 \div 4 =$



10)  $40 \div 5 =$

**Respuestas**

1. \_\_\_\_\_

2. \_\_\_\_\_

3. \_\_\_\_\_

4. \_\_\_\_\_

5. \_\_\_\_\_

6. \_\_\_\_\_

7. \_\_\_\_\_

8. \_\_\_\_\_

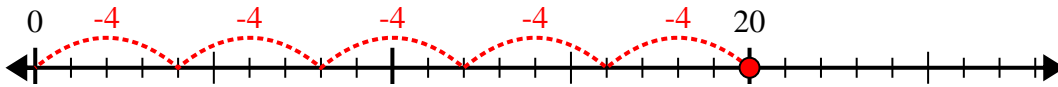
9. \_\_\_\_\_

10. \_\_\_\_\_

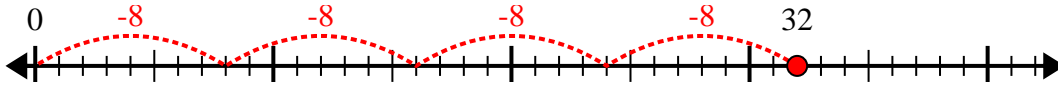


Usa la recta numérica para resolver el problema de división.

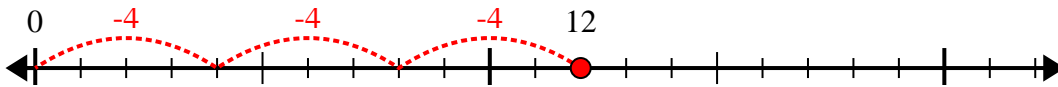
1)  $20 \div 4 =$



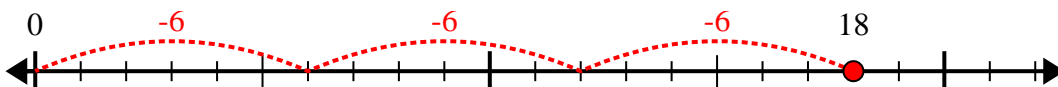
2)  $32 \div 8 =$



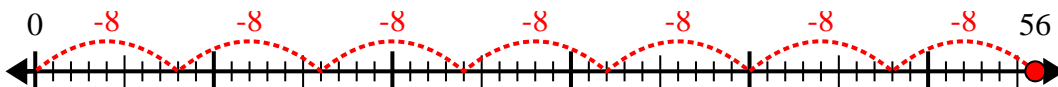
3)  $12 \div 4 =$



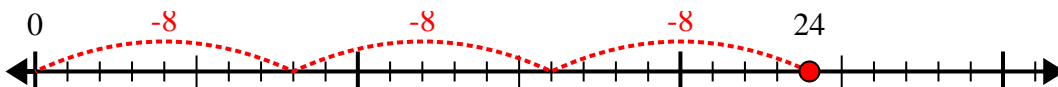
4)  $18 \div 6 =$



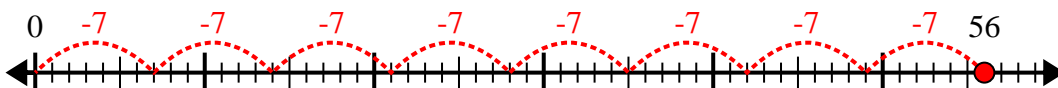
5)  $56 \div 8 =$



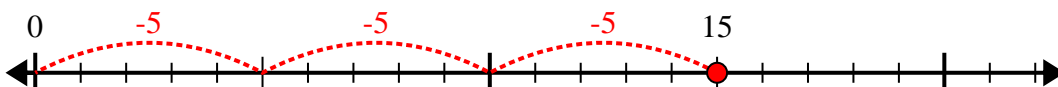
6)  $24 \div 8 =$



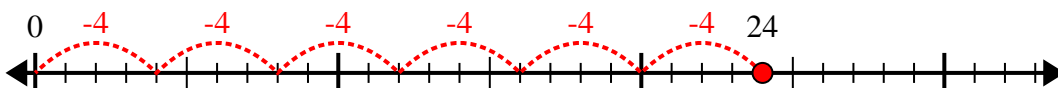
7)  $56 \div 7 =$



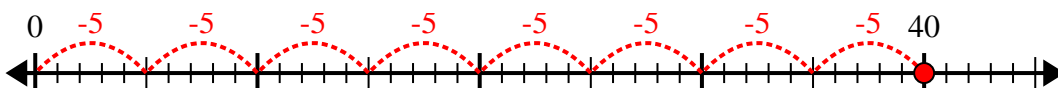
8)  $15 \div 5 =$



9)  $24 \div 4 =$



10)  $40 \div 5 =$



**Respuestas**

1. 5

2. 4

3. 3

4. 3

5. 7

6. 3

7. 8

8. 3

9. 6

10. 8