



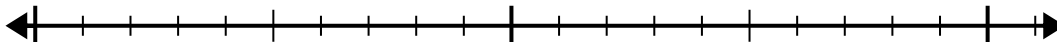
Usa la recta numérica para resolver el problema de división.

Respuestas

1) $18 \div 6 =$

0

18

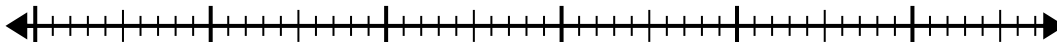


1. _____

2) $48 \div 6 =$

0

48

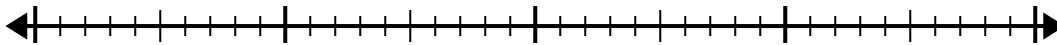


2. _____

3) $35 \div 7 =$

0

35

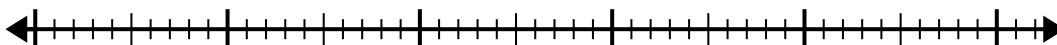


3. _____

4) $48 \div 8 =$

0

48



4. _____

5) $15 \div 5 =$

0

15

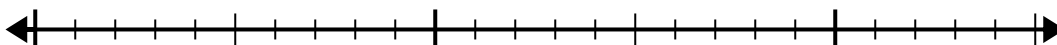


5. _____

6) $20 \div 4 =$

0

20

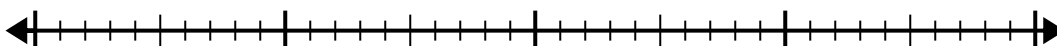


6. _____

7) $30 \div 5 =$

0

30

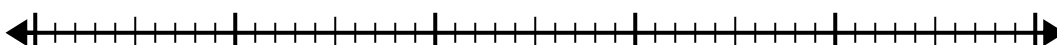


7. _____

8) $40 \div 5 =$

0

40

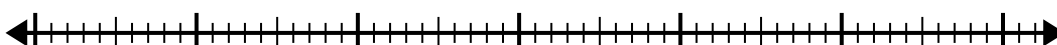


8. _____

9) $56 \div 8 =$

0

56

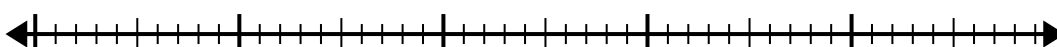


9. _____

10) $42 \div 6 =$

0

42

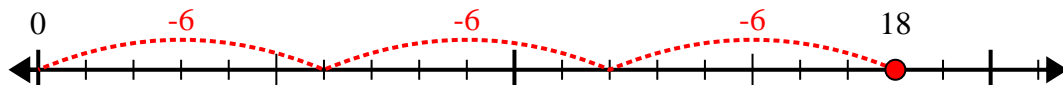


10. _____

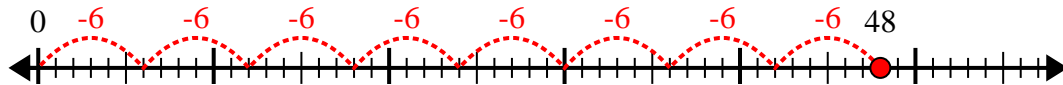


Usa la recta numérica para resolver el problema de división.

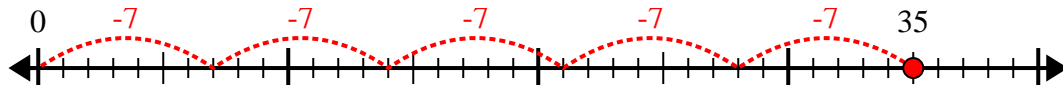
1) $18 \div 6 =$



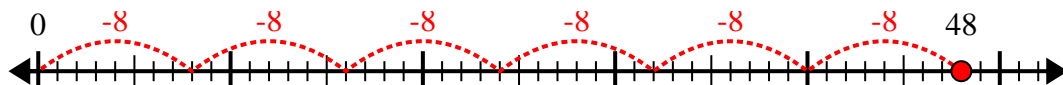
2) $48 \div 6 =$



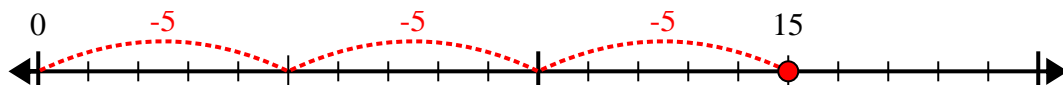
3) $35 \div 7 =$



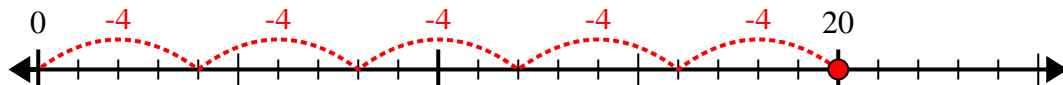
4) $48 \div 8 =$



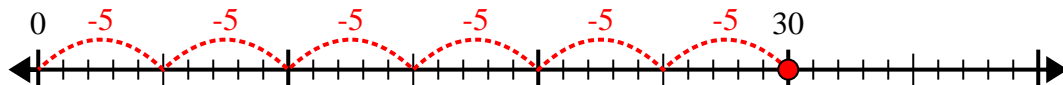
5) $15 \div 5 =$



6) $20 \div 4 =$



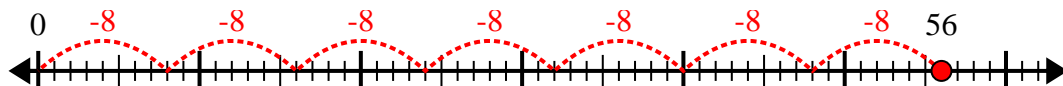
7) $30 \div 5 =$



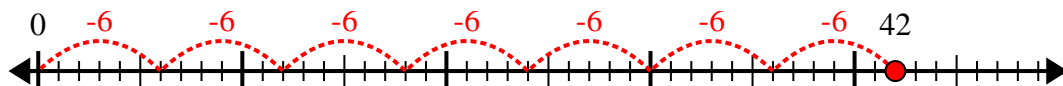
8) $40 \div 5 =$



9) $56 \div 8 =$



10) $42 \div 6 =$



Respuestas

1. **3**

2. **8**

3. **5**

4. **6**

5. **3**

6. **5**

7. **6**

8. **8**

9. **7**

10. **7**