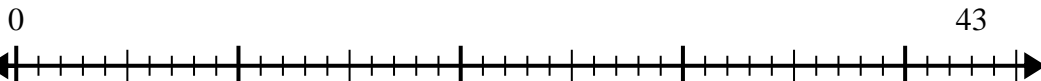


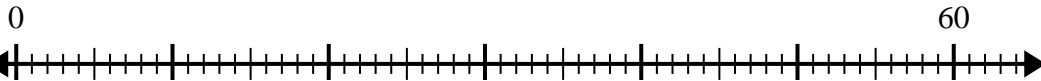


Usa la recta numérica para resolver el problema de división.

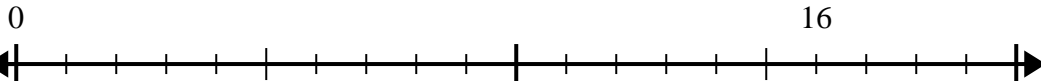
1) $43 \div 5 =$



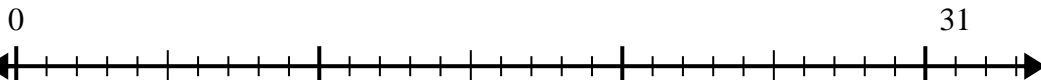
2) $60 \div 7 =$



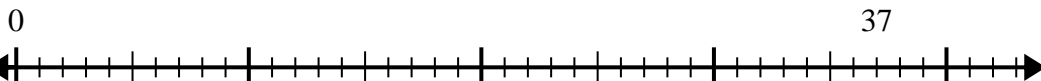
3) $16 \div 5 =$



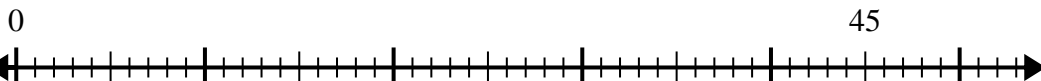
4) $31 \div 4 =$



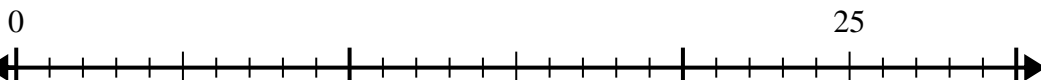
5) $37 \div 7 =$



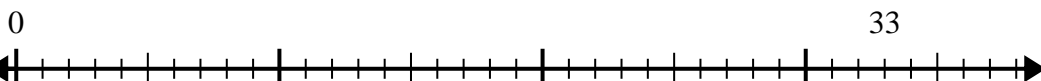
6) $45 \div 8 =$



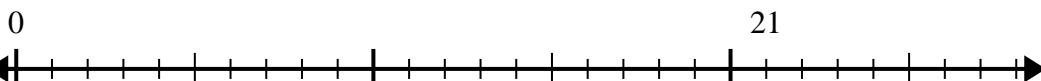
7) $25 \div 4 =$



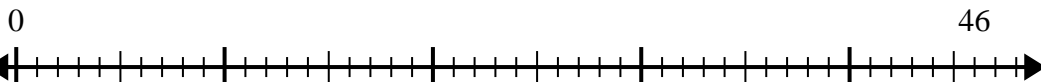
8) $33 \div 5 =$



9) $21 \div 4 =$



10) $46 \div 6 =$



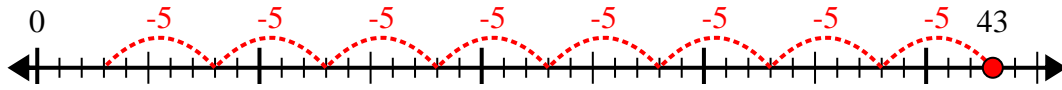
Respuestas

1. _____
2. _____
3. _____
4. _____
5. _____
6. _____
7. _____
8. _____
9. _____
10. _____

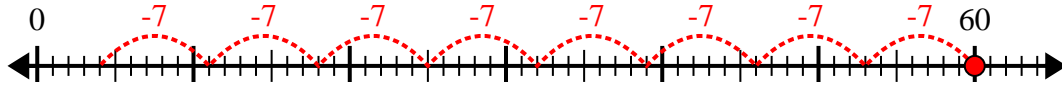


Usa la recta numérica para resolver el problema de división.

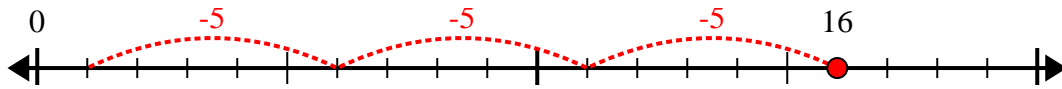
1) $43 \div 5 =$



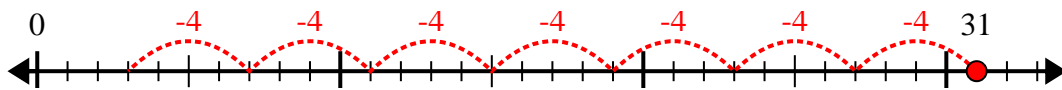
2) $60 \div 7 =$



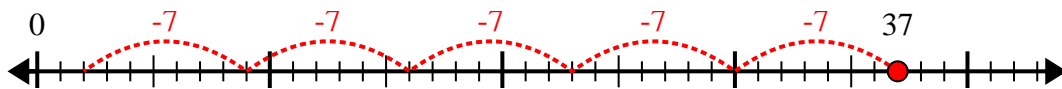
3) $16 \div 5 =$



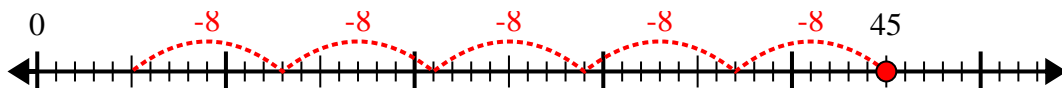
4) $31 \div 4 =$



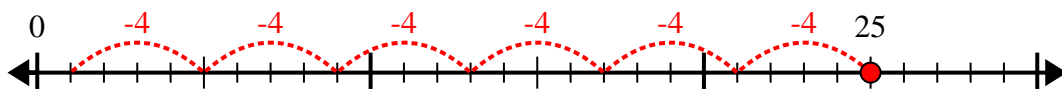
5) $37 \div 7 =$



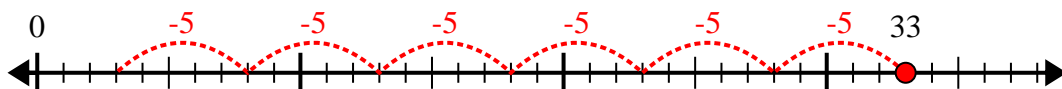
6) $45 \div 8 =$



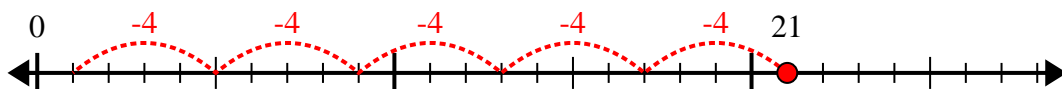
7) $25 \div 4 =$



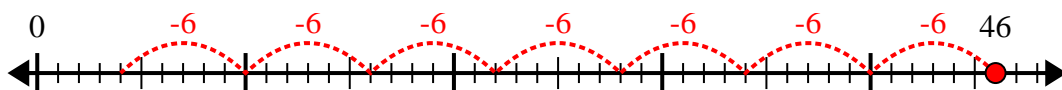
8) $33 \div 5 =$



9) $21 \div 4 =$



10) $46 \div 6 =$



Respuestas

1. 8r3

2. 8r4

3. 3r1

4. 7r3

5. 5r2

6. 5r5

7. 6r1

8. 6r3

9. 5r1

10. 7r4