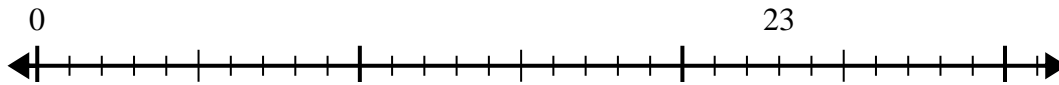


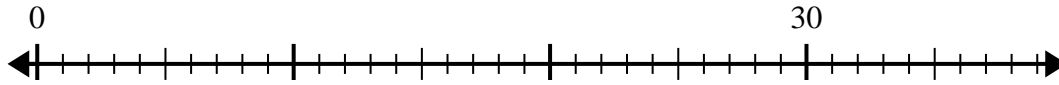


Usa la recta numérica para resolver el problema de división.

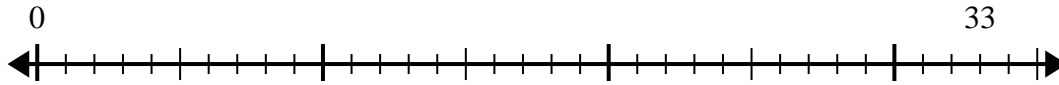
1)  $23 \div 5 =$



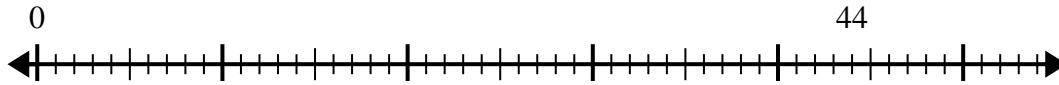
2)  $30 \div 4 =$



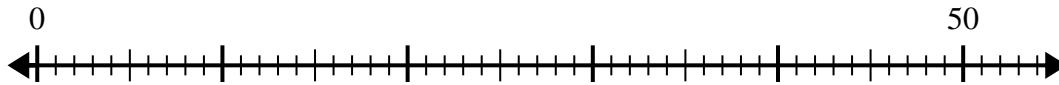
3)  $33 \div 6 =$



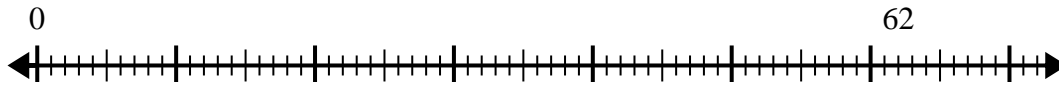
4)  $44 \div 6 =$



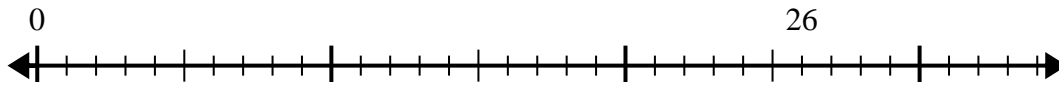
5)  $50 \div 6 =$



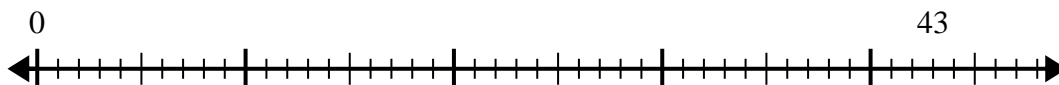
6)  $62 \div 8 =$



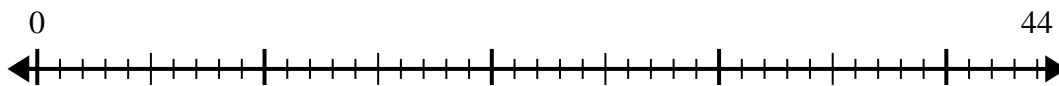
7)  $26 \div 6 =$



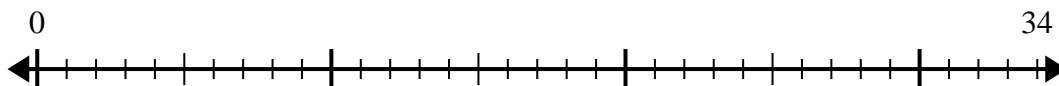
8)  $43 \div 8 =$



9)  $44 \div 7 =$



10)  $34 \div 4 =$



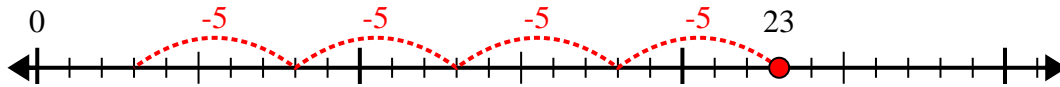
**Respuestas**

- 1. \_\_\_\_\_
- 2. \_\_\_\_\_
- 3. \_\_\_\_\_
- 4. \_\_\_\_\_
- 5. \_\_\_\_\_
- 6. \_\_\_\_\_
- 7. \_\_\_\_\_
- 8. \_\_\_\_\_
- 9. \_\_\_\_\_
- 10. \_\_\_\_\_

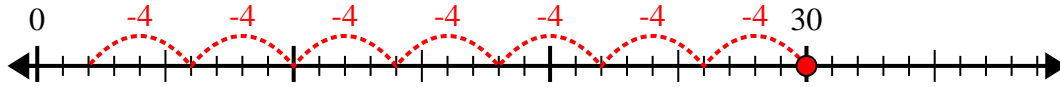


Usa la recta numérica para resolver el problema de división.

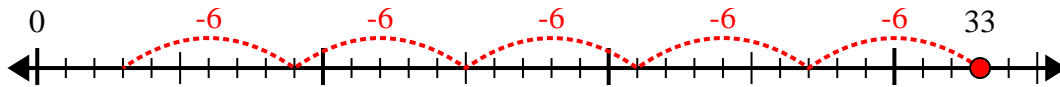
1)  $23 \div 5 =$



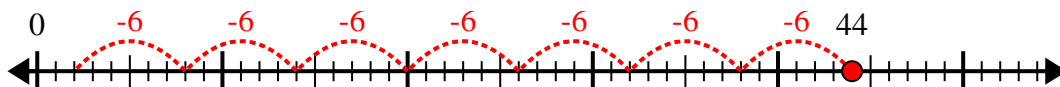
2)  $30 \div 4 =$



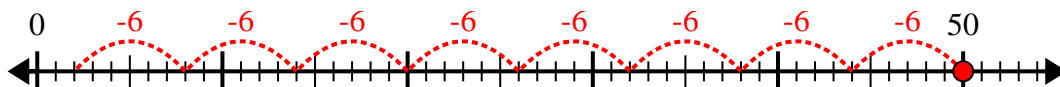
3)  $33 \div 6 =$



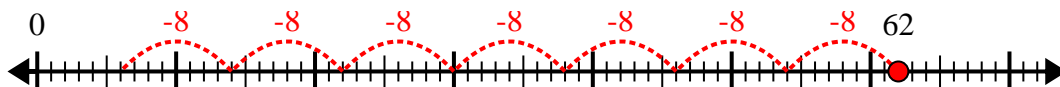
4)  $44 \div 6 =$



5)  $50 \div 6 =$



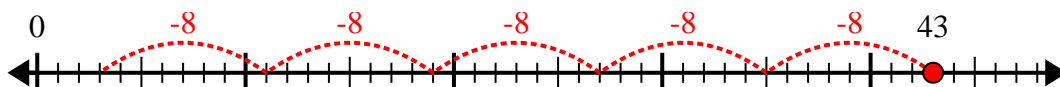
6)  $62 \div 8 =$



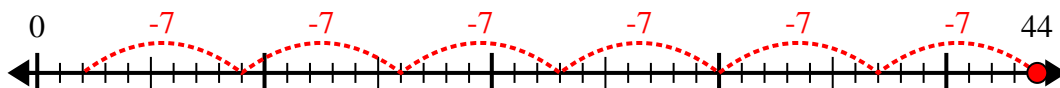
7)  $26 \div 6 =$



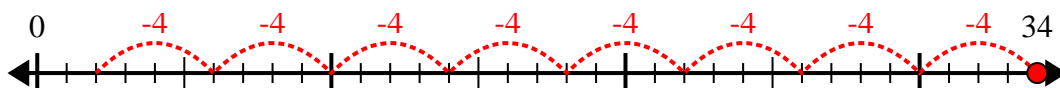
8)  $43 \div 8 =$



9)  $44 \div 7 =$



10)  $34 \div 4 =$



**Respuestas**

1. **4r3**

2. **7r2**

3. **5r3**

4. **7r2**

5. **8r2**

6. **7r6**

7. **4r2**

8. **5r3**

9. **6r2**

10. **8r2**