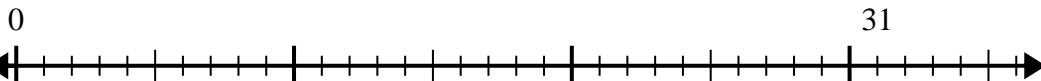


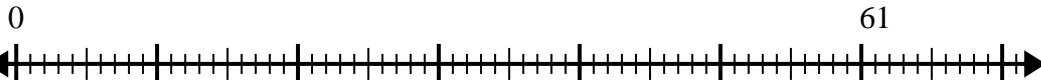


Usa la recta numérica para resolver el problema de división.

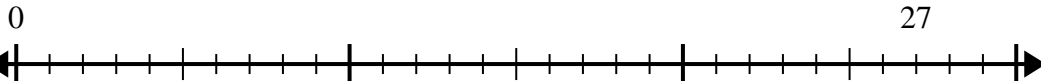
1)  $31 \div 8 =$



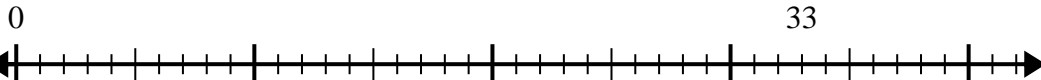
2)  $61 \div 8 =$



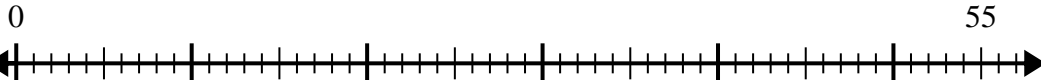
3)  $27 \div 4 =$



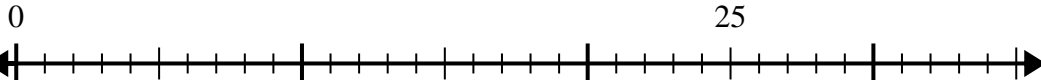
4)  $33 \div 4 =$



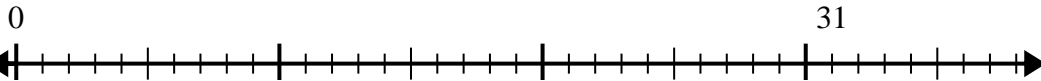
5)  $55 \div 8 =$



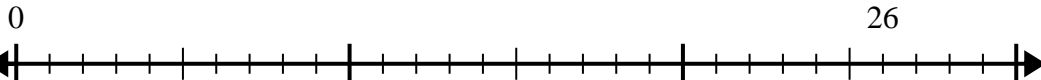
6)  $25 \div 6 =$



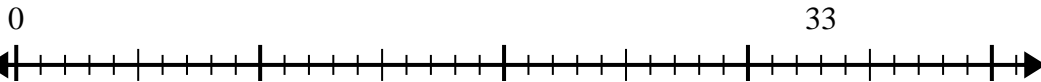
7)  $31 \div 4 =$



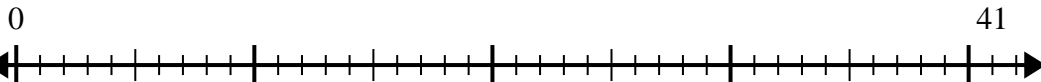
8)  $26 \div 7 =$



9)  $33 \div 7 =$



10)  $41 \div 5 =$



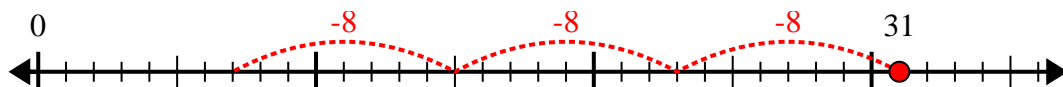
**Respuestas**

1. \_\_\_\_\_
2. \_\_\_\_\_
3. \_\_\_\_\_
4. \_\_\_\_\_
5. \_\_\_\_\_
6. \_\_\_\_\_
7. \_\_\_\_\_
8. \_\_\_\_\_
9. \_\_\_\_\_
10. \_\_\_\_\_

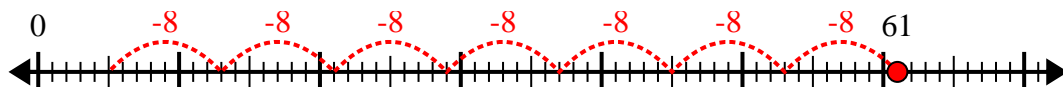


Usa la recta numérica para resolver el problema de división.

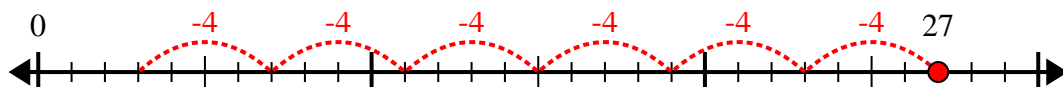
1)  $31 \div 8 =$



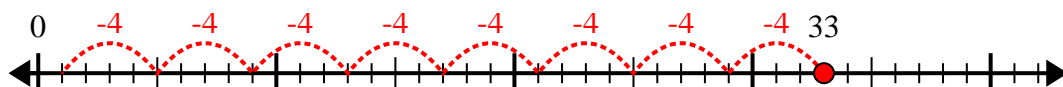
2)  $61 \div 8 =$



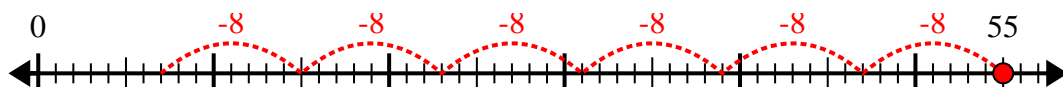
3)  $27 \div 4 =$



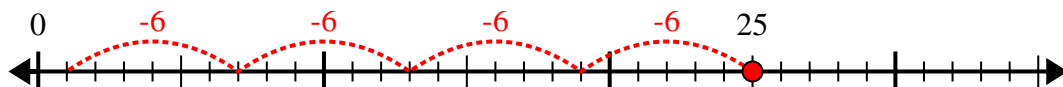
4)  $33 \div 4 =$



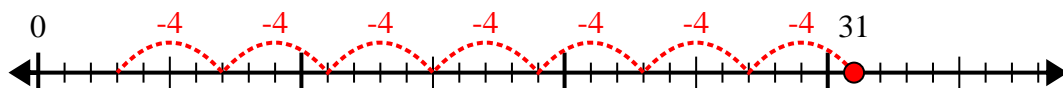
5)  $55 \div 8 =$



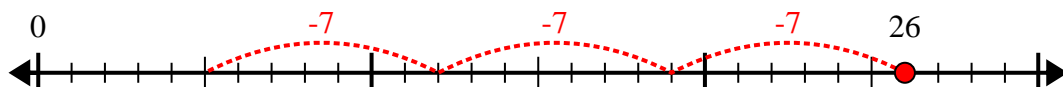
6)  $25 \div 6 =$



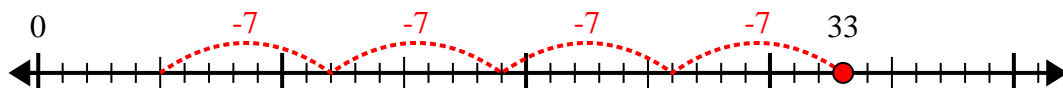
7)  $31 \div 4 =$



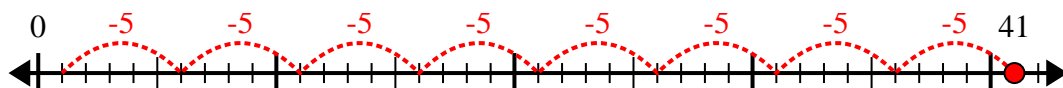
8)  $26 \div 7 =$



9)  $33 \div 7 =$



10)  $41 \div 5 =$



**Respuestas**

1. 3r7

2. 7r5

3. 6r3

4. 8r1

5. 6r7

6. 4r1

7. 7r3

8. 3r5

9. 4r5

10. 8r1