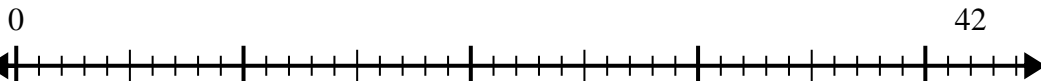


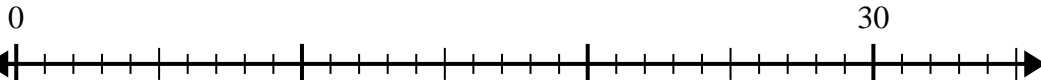


Usa la recta numérica para resolver el problema de división.

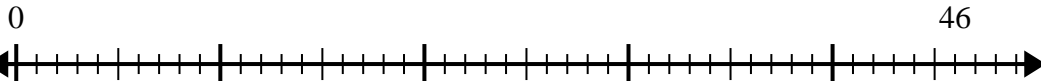
1)  $42 \div 5 =$



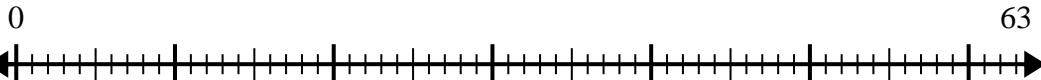
2)  $30 \div 4 =$



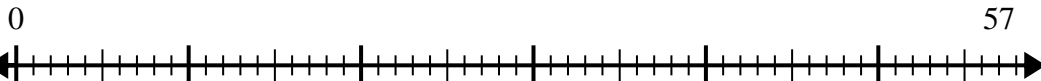
3)  $46 \div 6 =$



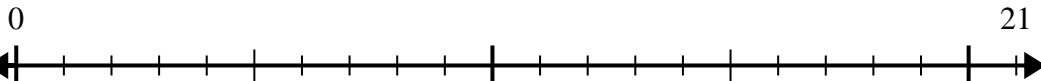
4)  $63 \div 8 =$



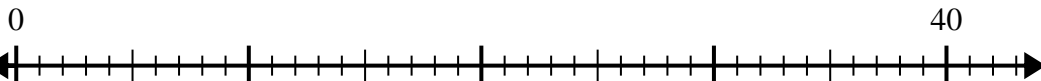
5)  $57 \div 7 =$



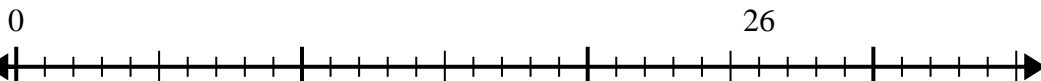
6)  $21 \div 5 =$



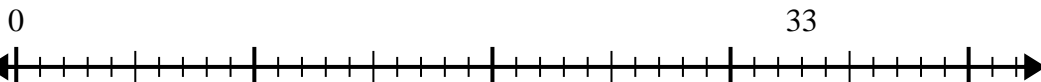
7)  $40 \div 7 =$



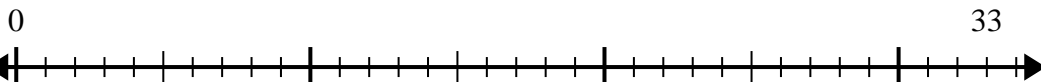
8)  $26 \div 8 =$



9)  $33 \div 5 =$



10)  $33 \div 4 =$



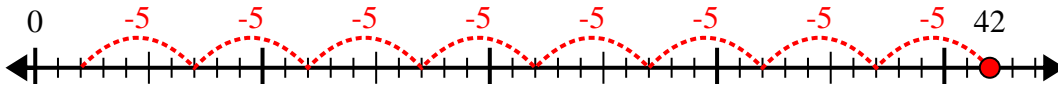
**Respuestas**

1. \_\_\_\_\_
2. \_\_\_\_\_
3. \_\_\_\_\_
4. \_\_\_\_\_
5. \_\_\_\_\_
6. \_\_\_\_\_
7. \_\_\_\_\_
8. \_\_\_\_\_
9. \_\_\_\_\_
10. \_\_\_\_\_

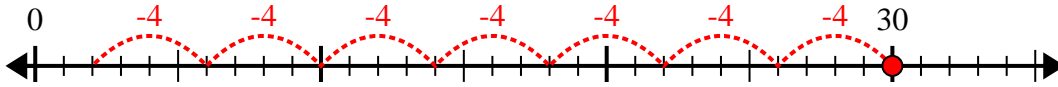


Usa la recta numérica para resolver el problema de división.

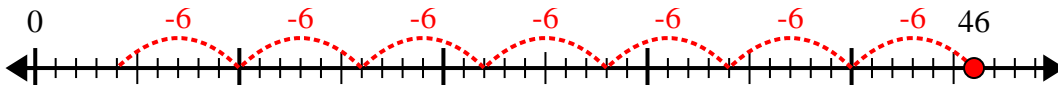
1)  $42 \div 5 =$



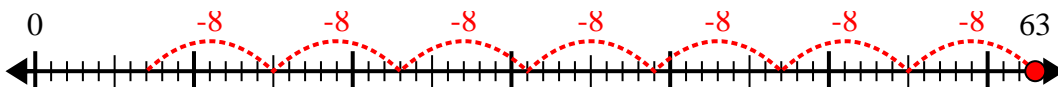
2)  $30 \div 4 =$



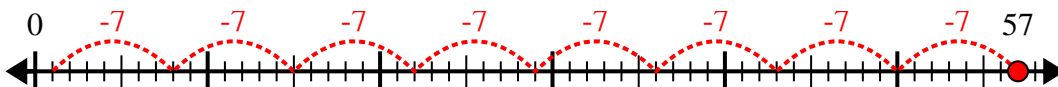
3)  $46 \div 6 =$



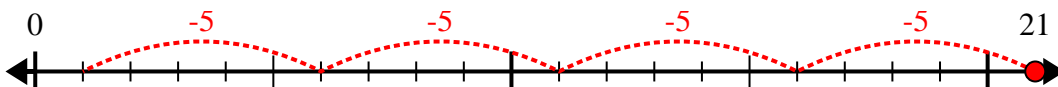
4)  $63 \div 8 =$



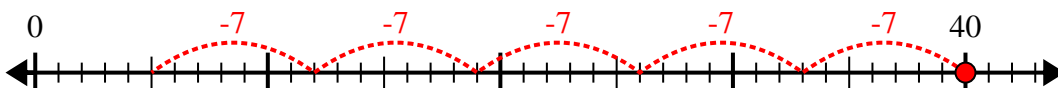
5)  $57 \div 7 =$



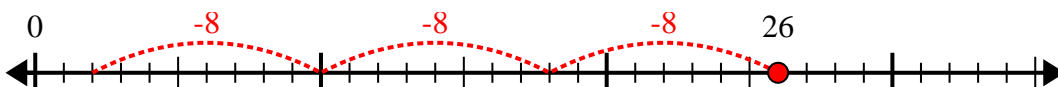
6)  $21 \div 5 =$



7)  $40 \div 7 =$



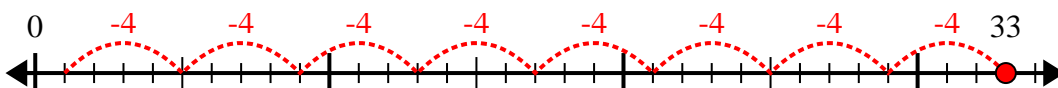
8)  $26 \div 8 =$



9)  $33 \div 5 =$



10)  $33 \div 4 =$



**Respuestas**

1. 8r2

2. 7r2

3. 7r4

4. 7r7

5. 8r1

6. 4r1

7. 5r5

8. 3r2

9. 6r3

10. 8r1