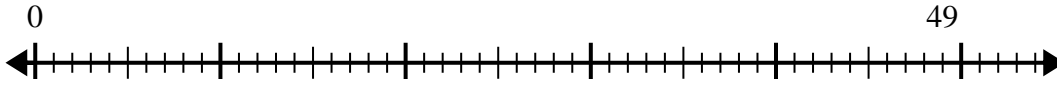




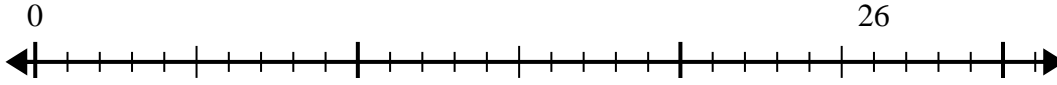
Usa la recta numérica para resolver el problema de división.

Respuestas

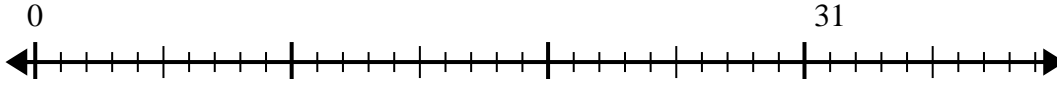
1) $49 \div 6 =$
0



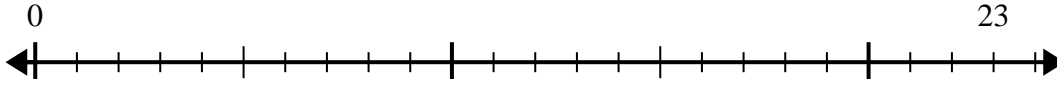
2) $26 \div 6 =$
0



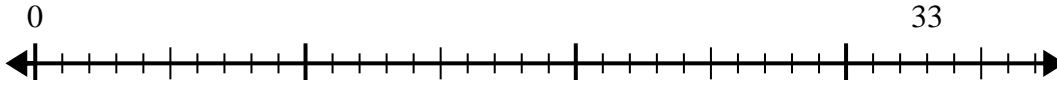
3) $31 \div 6 =$
0



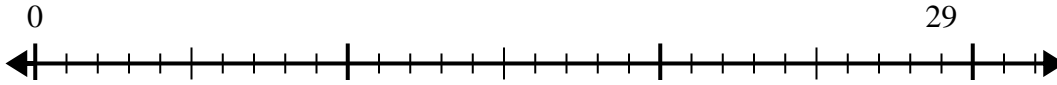
4) $23 \div 4 =$
0



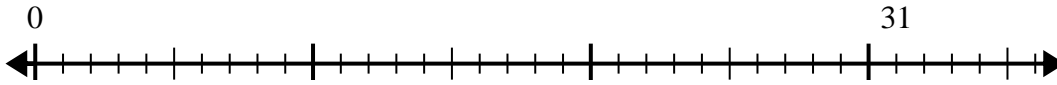
5) $33 \div 5 =$
0



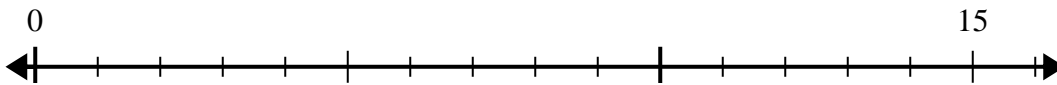
6) $29 \div 8 =$
0



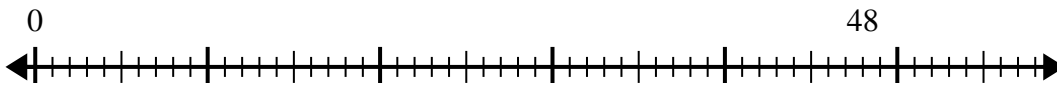
7) $31 \div 4 =$
0



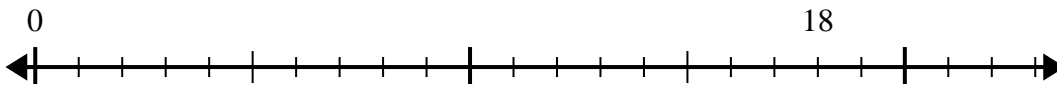
8) $15 \div 4 =$
0



9) $48 \div 7 =$
0



10) $18 \div 5 =$
0

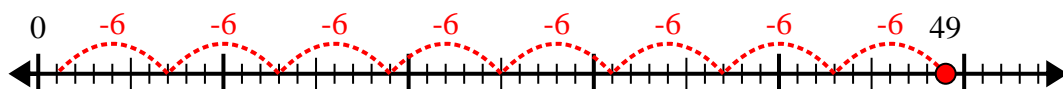


- 1. _____
- 2. _____
- 3. _____
- 4. _____
- 5. _____
- 6. _____
- 7. _____
- 8. _____
- 9. _____
- 10. _____

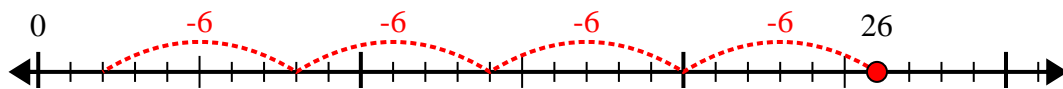


Usa la recta numérica para resolver el problema de división.

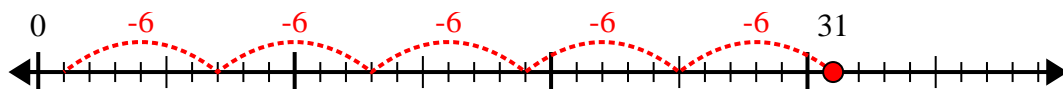
1) $49 \div 6 =$



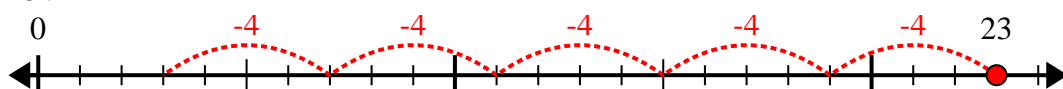
2) $26 \div 6 =$



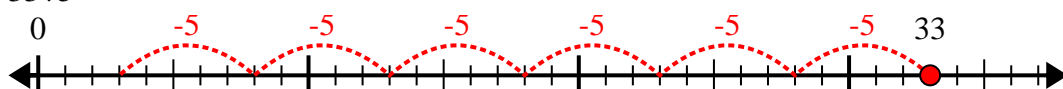
3) $31 \div 6 =$



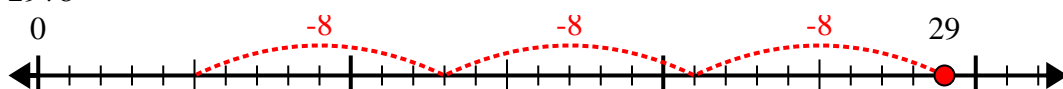
4) $23 \div 4 =$



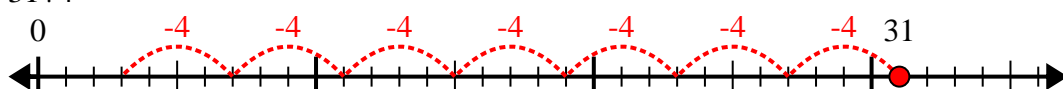
5) $33 \div 5 =$



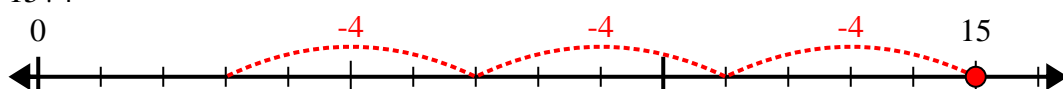
6) $29 \div 8 =$



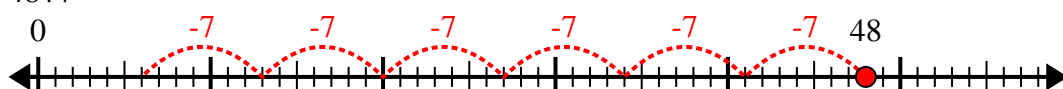
7) $31 \div 4 =$



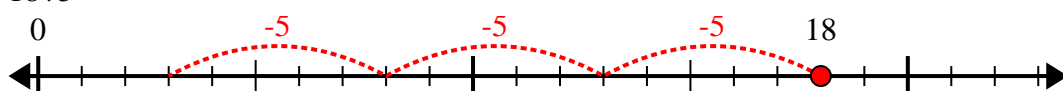
8) $15 \div 4 =$



9) $48 \div 7 =$



10) $18 \div 5 =$



Respuestas

1. **8r1**

2. **4r2**

3. **5r1**

4. **5r3**

5. **6r3**

6. **3r5**

7. **7r3**

8. **3r3**

9. **6r6**

10. **3r3**