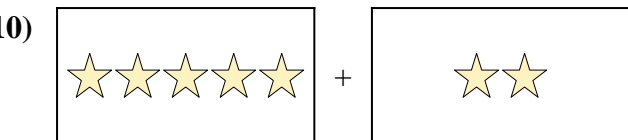
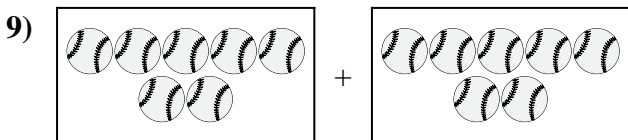
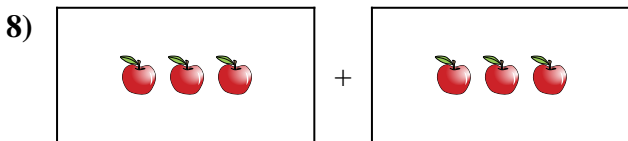
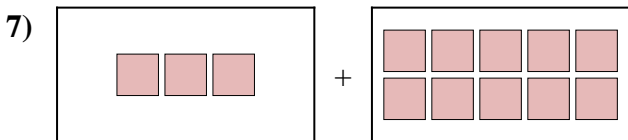
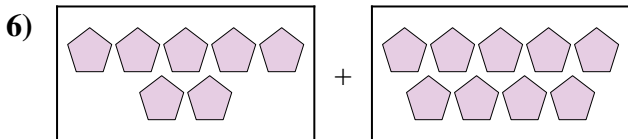
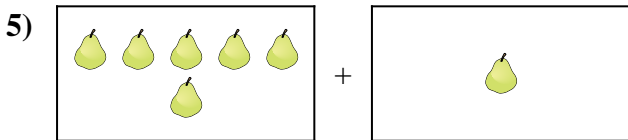
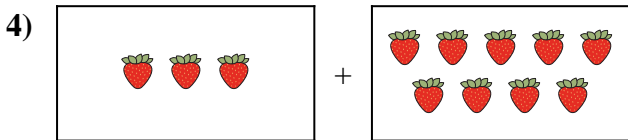
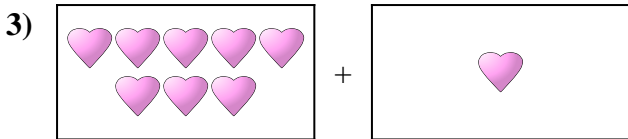
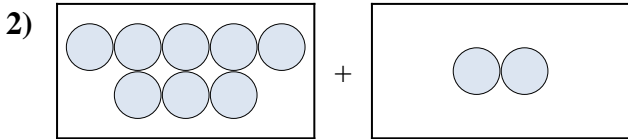





Expresé el problema visual como una ecuación con respuesta.

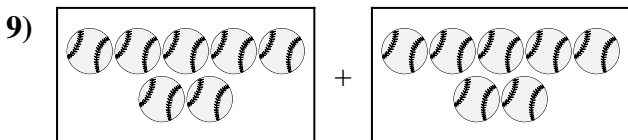
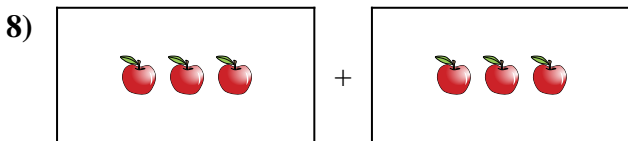
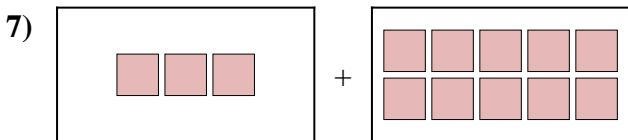
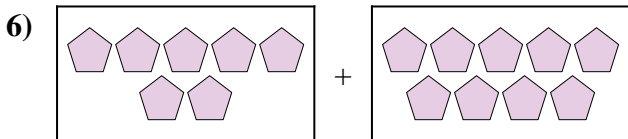
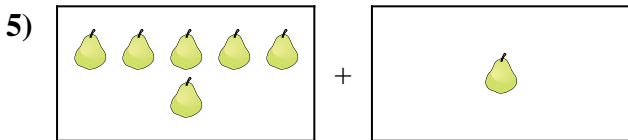
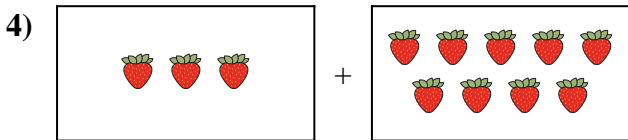
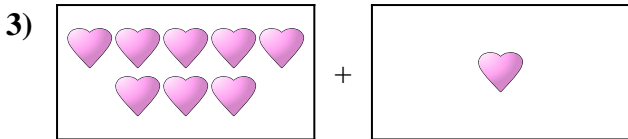
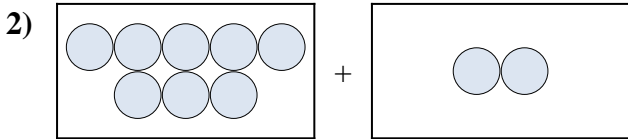

Respuestas



1. _____
2. _____
3. _____
4. _____
5. _____
6. _____
7. _____
8. _____
9. _____
10. _____



Expresar el problema visual como una ecuación con respuesta.



Respuestas

1. **9 + 1 = 10**

2. **8 + 2 = 10**

3. **8 + 1 = 9**

4. **3 + 9 = 12**

5. **6 + 1 = 7**

6. **7 + 9 = 16**

7. **3 + 10 = 13**

8. **3 + 3 = 6**

9. **7 + 7 = 14**

10. **5 + 2 = 7**