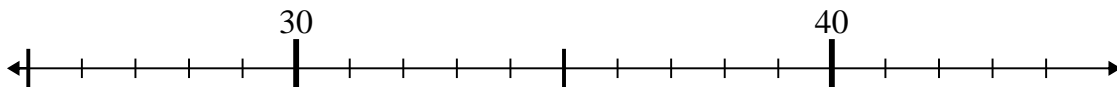




Utilice las rectas numéricas para resolver cada problema.

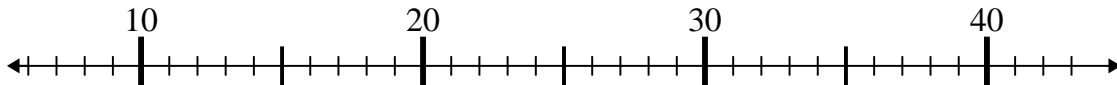
1) $26 + 14 =$



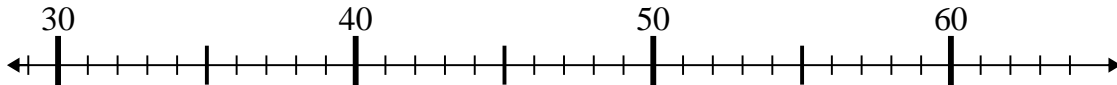
2) $33 - 29 =$



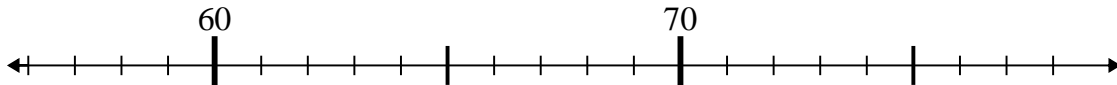
3) $37 - 27 =$



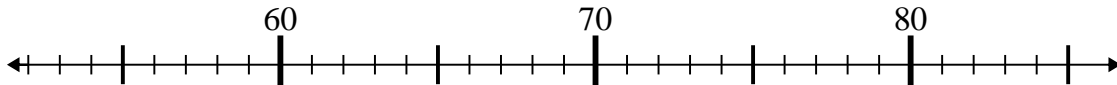
4) $41 - 6 =$



5) $57 + 18 =$



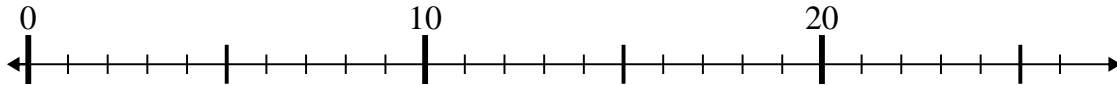
6) $56 + 5 =$



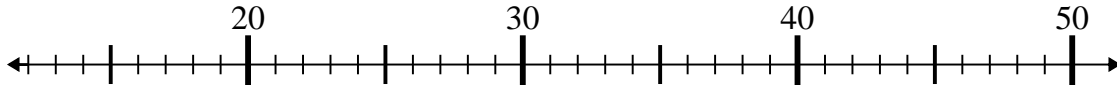
7) $33 + 6 =$



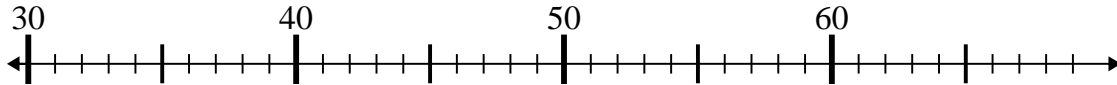
8) $18 - 11 =$



9) $17 - 3 =$



10) $50 - 15 =$



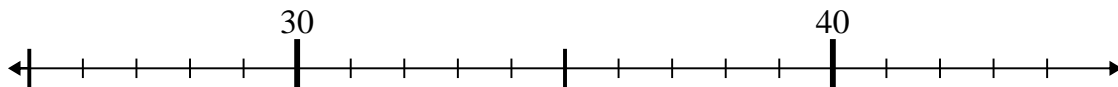
Respuestas

1. _____
2. _____
3. _____
4. _____
5. _____
6. _____
7. _____
8. _____
9. _____
10. _____



Utilice las rectas numéricas para resolver cada problema.

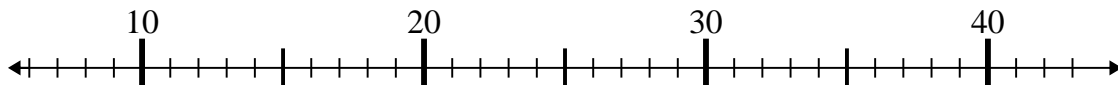
1) $26 + 14 =$



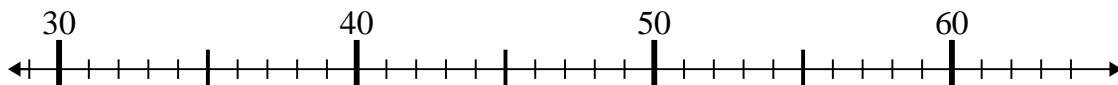
2) $33 - 29 =$



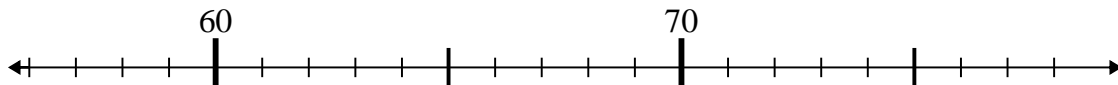
3) $37 - 27 =$



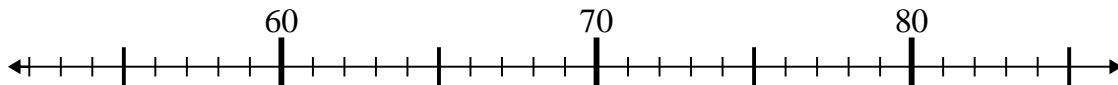
4) $41 - 6 =$



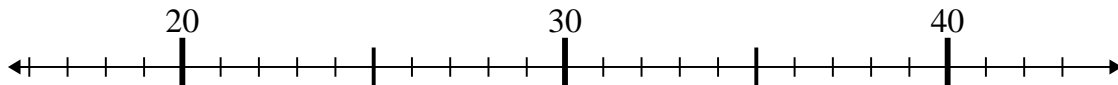
5) $57 + 18 =$



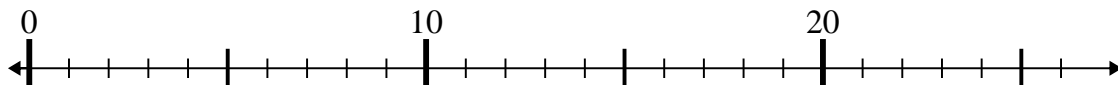
6) $56 + 5 =$



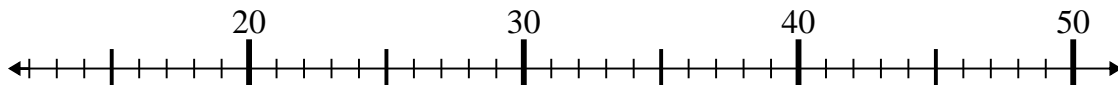
7) $33 + 6 =$



8) $18 - 11 =$



9) $17 - 3 =$



10) $50 - 15 =$



Respuestas

1. **40**

2. **4**

3. **10**

4. **35**

5. **75**

6. **61**

7. **39**

8. **7**

9. **14**

10. **35**