



Determina cuál letra representa mejor la suma.

1)  $\frac{5}{10} + \frac{2}{10}$

2)  $\frac{3}{10} + \frac{5}{10}$

3)  $\frac{1}{2} + \frac{1}{2}$

4)  $\frac{3}{5} + \frac{3}{5}$

5)  $\frac{1}{8} + \frac{5}{8}$

6)  $\frac{1}{3} + \frac{2}{3}$

7)  $\frac{1}{8} + \frac{6}{8}$

8)  $\frac{1}{6} + \frac{4}{6}$

9)  $\frac{6}{10} + \frac{9}{10}$

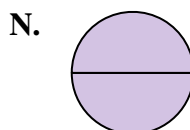
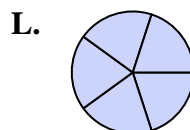
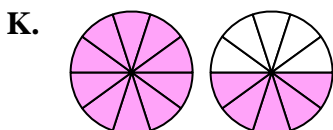
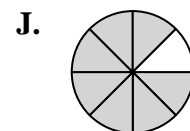
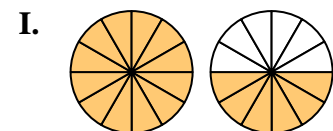
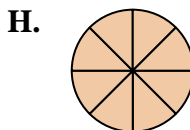
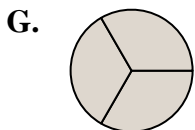
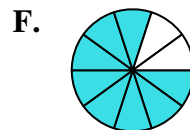
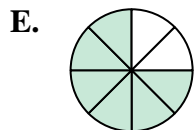
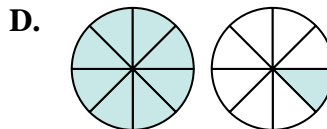
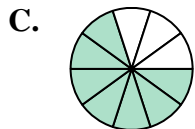
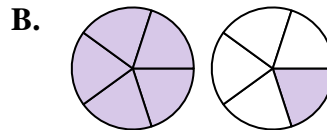
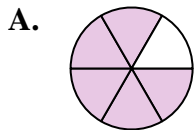
10)  $\frac{8}{12} + \frac{10}{12}$

11)  $\frac{2}{5} + \frac{2}{5}$

12)  $\frac{2}{5} + \frac{3}{5}$

13)  $\frac{4}{8} + \frac{4}{8}$

14)  $\frac{4}{8} + \frac{5}{8}$

**Respuestas**

1. \_\_\_\_\_

2. \_\_\_\_\_

3. \_\_\_\_\_

4. \_\_\_\_\_

5. \_\_\_\_\_

6. \_\_\_\_\_

7. \_\_\_\_\_

8. \_\_\_\_\_

9. \_\_\_\_\_

10. \_\_\_\_\_

11. \_\_\_\_\_

12. \_\_\_\_\_

13. \_\_\_\_\_

14. \_\_\_\_\_



Determina cuál letra representa mejor la suma.

1)  $\frac{5}{10} + \frac{2}{10}$

2)  $\frac{3}{10} + \frac{5}{10}$

3)  $\frac{1}{2} + \frac{1}{2}$

4)  $\frac{3}{5} + \frac{3}{5}$

5)  $\frac{1}{8} + \frac{5}{8}$

6)  $\frac{1}{3} + \frac{2}{3}$

7)  $\frac{1}{8} + \frac{6}{8}$

8)  $\frac{1}{6} + \frac{4}{6}$

9)  $\frac{6}{10} + \frac{9}{10}$

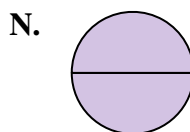
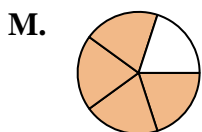
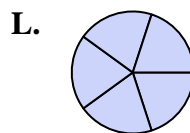
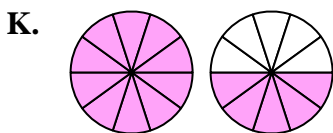
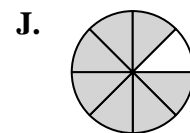
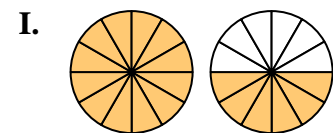
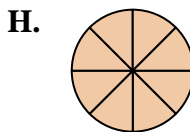
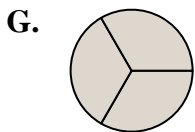
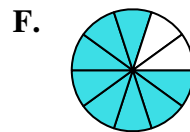
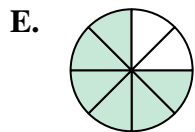
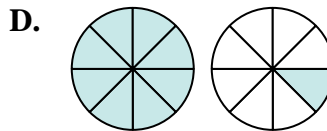
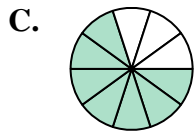
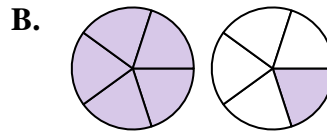
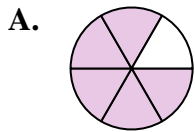
10)  $\frac{8}{12} + \frac{10}{12}$

11)  $\frac{2}{5} + \frac{2}{5}$

12)  $\frac{2}{5} + \frac{3}{5}$

13)  $\frac{4}{8} + \frac{4}{8}$

14)  $\frac{4}{8} + \frac{5}{8}$

**Respuestas**

1. **C**  $\frac{7}{10}$

2. **F**  $\frac{8}{10}$

3. **N**  $\frac{2}{2}$

4. **B**  $1\frac{1}{5}$

5. **E**  $\frac{6}{8}$

6. **G**  $\frac{3}{3}$

7. **J**  $\frac{7}{8}$

8. **A**  $\frac{5}{6}$

9. **K**  $1\frac{5}{10}$

10. **I**  $1\frac{6}{12}$

11. **M**  $\frac{4}{5}$

12. **L**  $\frac{5}{5}$

13. **H**  $\frac{8}{8}$

14. **D**  $1\frac{1}{8}$