



Determina cuál letra representa mejor la suma.

1) $\frac{2}{4} + \frac{3}{4}$

3) $\frac{6}{10} + \frac{3}{10}$

5) $\frac{3}{12} + \frac{5}{12}$

7) $\frac{1}{6} + \frac{5}{6}$

9) $\frac{2}{5} + \frac{2}{5}$

11) $\frac{2}{4} + \frac{2}{4}$

13) $\frac{4}{5} + \frac{2}{5}$

2) $\frac{1}{12} + \frac{3}{12}$

4) $\frac{4}{10} + \frac{4}{10}$

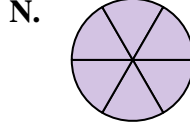
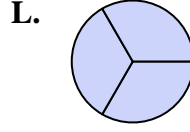
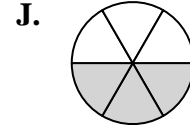
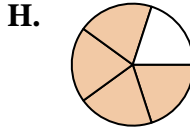
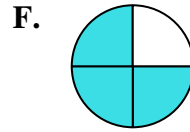
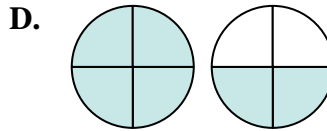
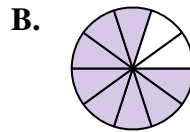
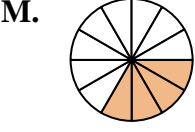
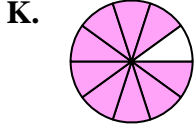
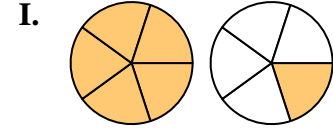
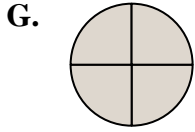
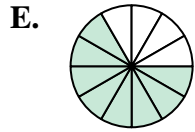
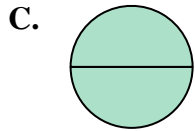
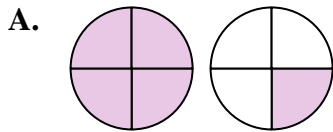
6) $\frac{1}{2} + \frac{1}{2}$

8) $\frac{1}{3} + \frac{2}{3}$

10) $\frac{3}{4} + \frac{3}{4}$

12) $\frac{2}{4} + \frac{1}{4}$

14) $\frac{1}{6} + \frac{2}{6}$

**Respuestas**

1. _____

2. _____

3. _____

4. _____

5. _____

6. _____

7. _____

8. _____

9. _____

10. _____

11. _____

12. _____

13. _____

14. _____



Determina cuál letra representa mejor la suma.

1) $\frac{2}{4} + \frac{3}{4}$

3) $\frac{6}{10} + \frac{3}{10}$

5) $\frac{3}{12} + \frac{5}{12}$

7) $\frac{1}{6} + \frac{5}{6}$

9) $\frac{2}{5} + \frac{2}{5}$

11) $\frac{2}{4} + \frac{2}{4}$

13) $\frac{4}{5} + \frac{2}{5}$

2) $\frac{1}{12} + \frac{3}{12}$

4) $\frac{4}{10} + \frac{4}{10}$

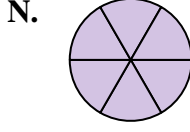
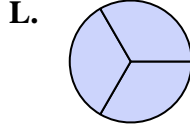
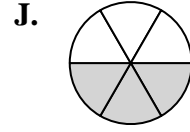
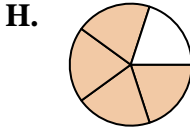
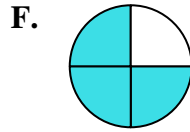
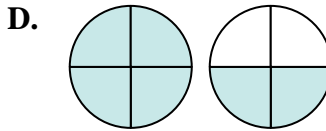
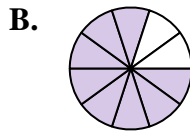
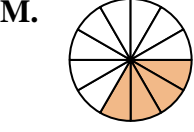
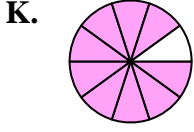
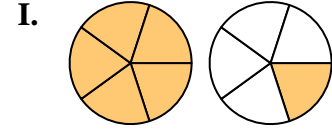
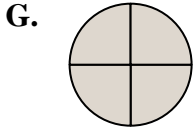
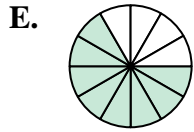
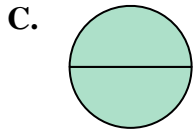
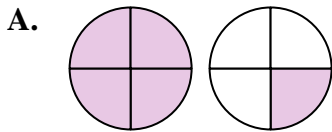
6) $\frac{1}{2} + \frac{1}{2}$

8) $\frac{1}{3} + \frac{2}{3}$

10) $\frac{3}{4} + \frac{3}{4}$

12) $\frac{2}{4} + \frac{1}{4}$

14) $\frac{1}{6} + \frac{2}{6}$

**Respuestas**

1. **A** $1\frac{1}{4}$

2. **M** $\frac{4}{12}$

3. **K** $\frac{9}{10}$

4. **B** $\frac{8}{10}$

5. **E** $\frac{8}{12}$

6. **C** $\frac{2}{2}$

7. **N** $\frac{6}{6}$

8. **L** $\frac{3}{3}$

9. **H** $\frac{4}{5}$

10. **D** $1\frac{2}{4}$

11. **G** $\frac{4}{4}$

12. **F** $\frac{3}{4}$

13. **I** $1\frac{1}{5}$

14. **J** $\frac{3}{6}$