



Determina cuál letra representa mejor la suma.

1)  $\frac{2}{3} + \frac{1}{3}$

2)  $\frac{2}{5} + \frac{1}{5}$

3)  $\frac{5}{8} + \frac{4}{8}$

4)  $\frac{6}{8} + \frac{4}{8}$

5)  $\frac{8}{10} + \frac{5}{10}$

6)  $\frac{1}{6} + \frac{4}{6}$

7)  $\frac{5}{8} + \frac{6}{8}$

8)  $\frac{3}{4} + \frac{3}{4}$

9)  $\frac{7}{10} + \frac{3}{10}$

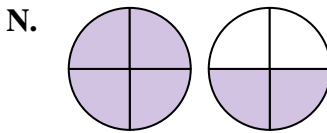
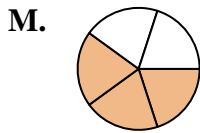
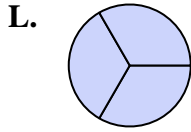
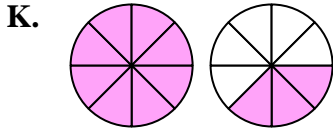
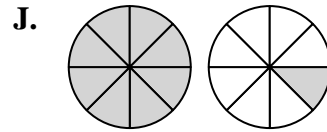
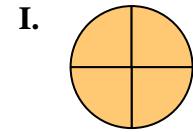
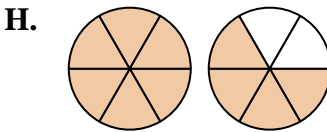
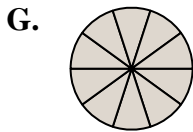
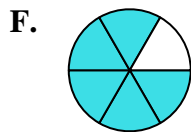
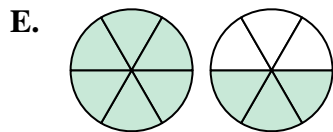
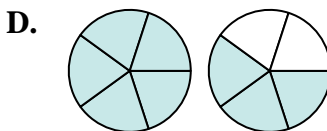
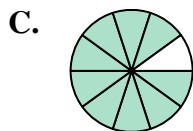
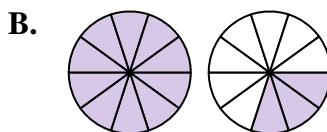
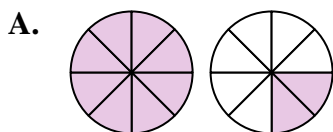
10)  $\frac{2}{4} + \frac{2}{4}$

11)  $\frac{4}{6} + \frac{5}{6}$

12)  $\frac{5}{6} + \frac{5}{6}$

13)  $\frac{4}{10} + \frac{5}{10}$

14)  $\frac{4}{5} + \frac{4}{5}$



**Respuestas**

1. \_\_\_\_\_

2. \_\_\_\_\_

3. \_\_\_\_\_

4. \_\_\_\_\_

5. \_\_\_\_\_

6. \_\_\_\_\_

7. \_\_\_\_\_

8. \_\_\_\_\_

9. \_\_\_\_\_

10. \_\_\_\_\_

11. \_\_\_\_\_

12. \_\_\_\_\_

13. \_\_\_\_\_

14. \_\_\_\_\_



Determina cuál letra representa mejor la suma.

1)  $\frac{2}{3} + \frac{1}{3}$

2)  $\frac{2}{5} + \frac{1}{5}$

3)  $\frac{5}{8} + \frac{4}{8}$

4)  $\frac{6}{8} + \frac{4}{8}$

5)  $\frac{8}{10} + \frac{5}{10}$

6)  $1\frac{4}{6} + \frac{4}{6}$

7)  $\frac{5}{8} + \frac{6}{8}$

8)  $\frac{3}{4} + \frac{3}{4}$

9)  $\frac{7}{10} + \frac{3}{10}$

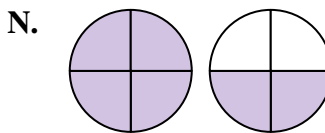
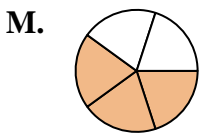
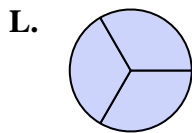
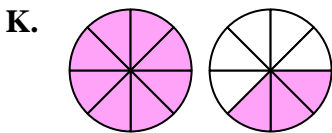
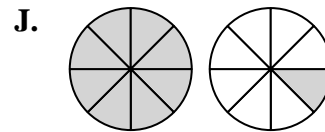
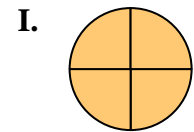
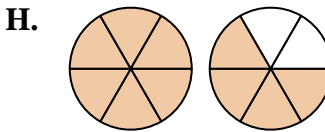
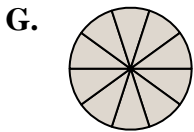
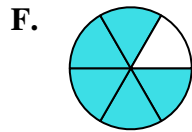
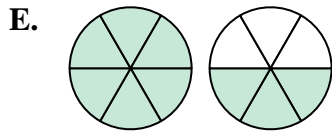
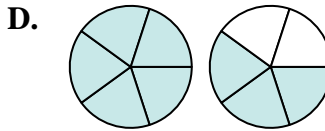
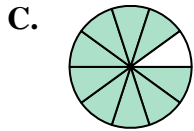
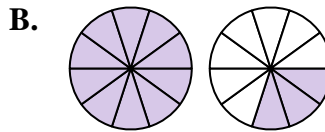
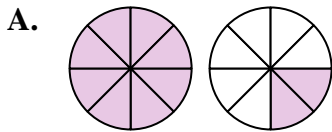
10)  $\frac{2}{4} + \frac{2}{4}$

11)  $\frac{4}{6} + \frac{5}{6}$

12)  $\frac{5}{6} + \frac{5}{6}$

13)  $\frac{4}{10} + \frac{5}{10}$

14)  $\frac{4}{5} + \frac{4}{5}$

**Respuestas**

1. L  $\frac{3}{3}$

2. M  $\frac{3}{5}$

3. J  $1\frac{1}{8}$

4. A  $1\frac{2}{8}$

5. B  $1\frac{3}{10}$

6. F  $\frac{5}{6}$

7. K  $1\frac{3}{8}$

8. N  $1\frac{2}{4}$

9. G  $\frac{10}{10}$

10. I  $\frac{4}{4}$

11. E  $1\frac{3}{6}$

12. H  $1\frac{4}{6}$

13. C  $\frac{9}{10}$

14. D  $1\frac{3}{5}$