



Determina cuál letra representa mejor la suma.

1)  $\frac{9}{10} + \frac{4}{10}$

3)  $\frac{2}{4} + \frac{1}{4}$

5)  $\frac{6}{8} + \frac{7}{8}$

7)  $\frac{1}{5} + \frac{1}{5}$

9)  $\frac{1}{2} + \frac{1}{2}$

11)  $\frac{4}{10} + \frac{2}{10}$

13)  $\frac{2}{6} + \frac{5}{6}$

2)  $\frac{4}{5} + \frac{3}{5}$

4)  $\frac{1}{12} + \frac{5}{12}$

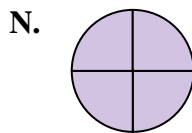
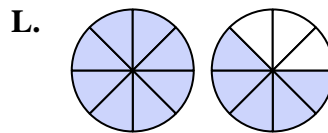
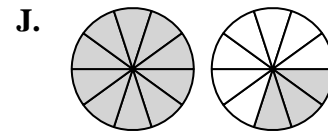
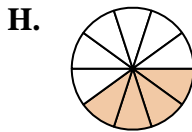
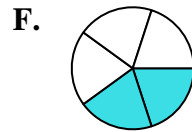
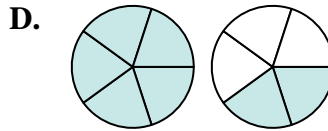
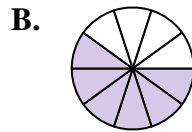
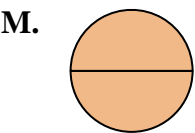
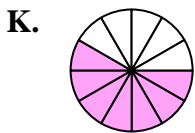
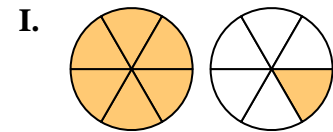
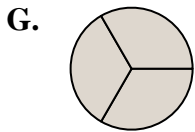
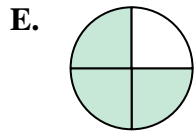
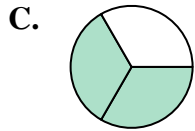
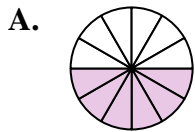
6)  $\frac{1}{3} + \frac{1}{3}$

8)  $\frac{3}{10} + \frac{1}{10}$

10)  $\frac{2}{3} + \frac{1}{3}$

12)  $\frac{3}{4} + \frac{1}{4}$

14)  $\frac{1}{12} + \frac{6}{12}$

**Respuestas**

1. \_\_\_\_\_

2. \_\_\_\_\_

3. \_\_\_\_\_

4. \_\_\_\_\_

5. \_\_\_\_\_

6. \_\_\_\_\_

7. \_\_\_\_\_

8. \_\_\_\_\_

9. \_\_\_\_\_

10. \_\_\_\_\_

11. \_\_\_\_\_

12. \_\_\_\_\_

13. \_\_\_\_\_

14. \_\_\_\_\_



Determina cuál letra representa mejor la suma.

1)  $\frac{9}{10} + \frac{4}{10}$

3)  $\frac{2}{4} + \frac{1}{4}$

5)  $\frac{6}{8} + \frac{7}{8}$

7)  $\frac{1}{5} + \frac{1}{5}$

9)  $\frac{1}{2} + \frac{1}{2}$

11)  $\frac{4}{10} + \frac{2}{10}$

13)  $\frac{2}{6} + \frac{5}{6}$

2)  $\frac{4}{5} + \frac{3}{5}$

4)  $\frac{1}{12} + \frac{5}{12}$

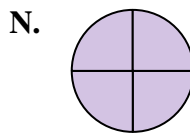
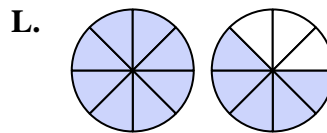
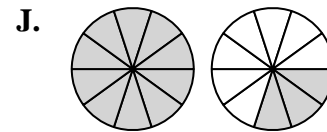
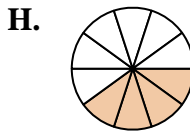
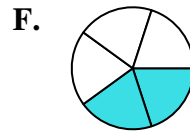
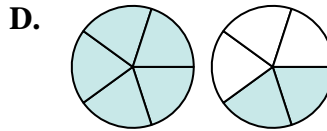
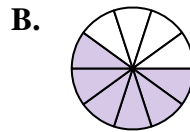
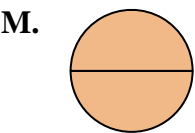
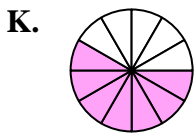
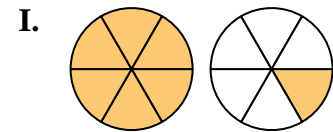
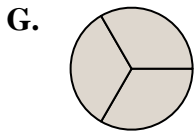
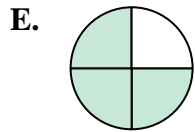
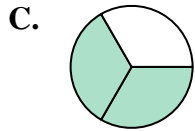
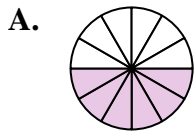
6)  $\frac{1}{3} + \frac{1}{3}$

8)  $\frac{3}{10} + \frac{1}{10}$

10)  $\frac{2}{3} + \frac{1}{3}$

12)  $\frac{3}{4} + \frac{1}{4}$

14)  $\frac{1}{12} + \frac{6}{12}$

**Respuestas**

1. **J**  $1\frac{3}{10}$

2. **D**  $1\frac{2}{5}$

3. **E**  $\frac{3}{4}$

4. **A**  $\frac{6}{12}$

5. **L**  $1\frac{5}{8}$

6. **C**  $\frac{2}{3}$

7. **F**  $\frac{2}{5}$

8. **H**  $\frac{4}{10}$

9. **M**  $\frac{2}{2}$

10. **G**  $\frac{3}{3}$

11. **B**  $\frac{6}{10}$

12. **N**  $\frac{4}{4}$

13. **I**  $1\frac{1}{6}$

14. **K**  $\frac{7}{12}$