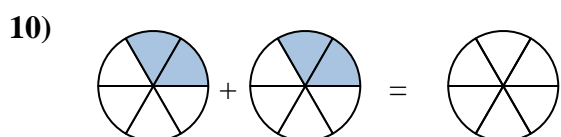
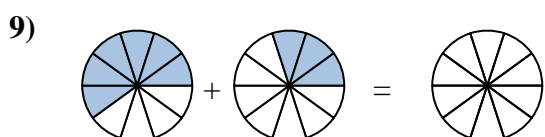
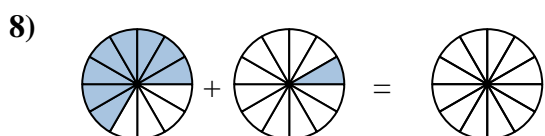
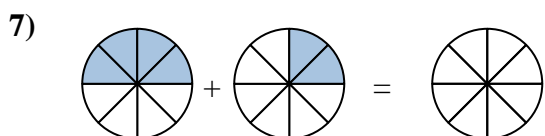
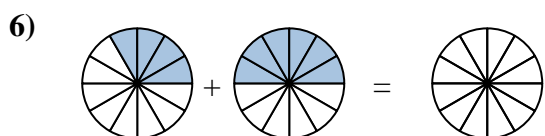
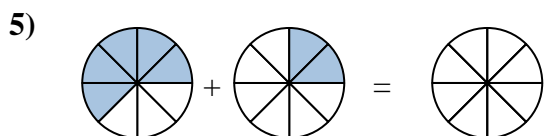
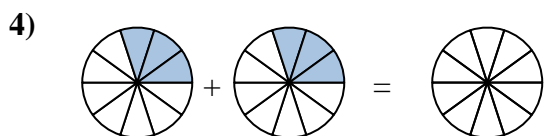
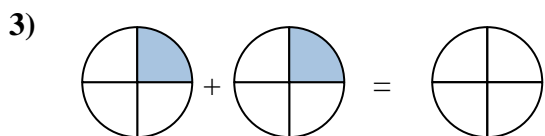
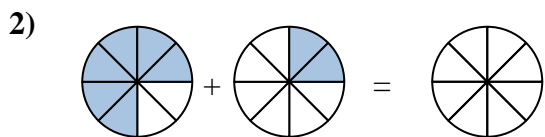
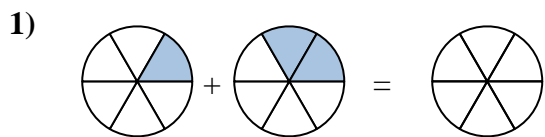
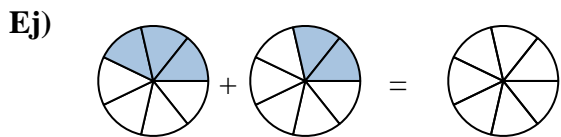




Sombrea la fracción para resolver el problema.



**Respuestas**

Ej.  $\frac{3}{7}$     $\frac{2}{7}$     $\frac{5}{7}$

1. \_\_\_\_\_

2. \_\_\_\_\_

3. \_\_\_\_\_

4. \_\_\_\_\_

5. \_\_\_\_\_

6. \_\_\_\_\_

7. \_\_\_\_\_

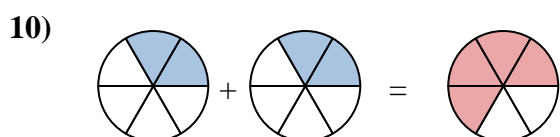
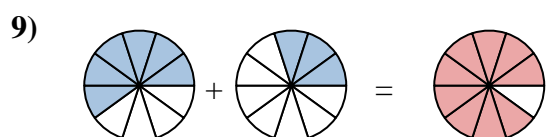
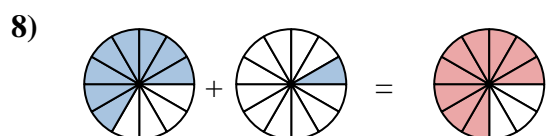
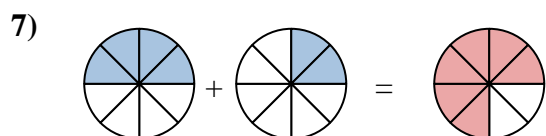
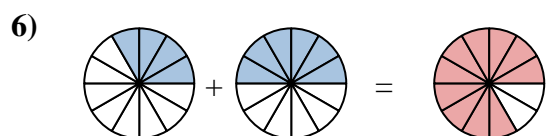
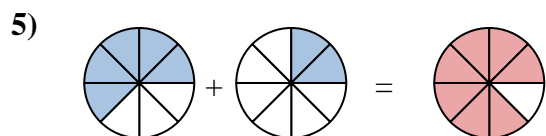
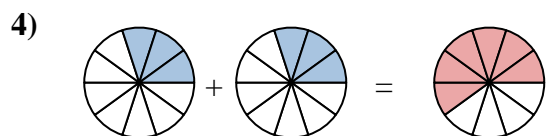
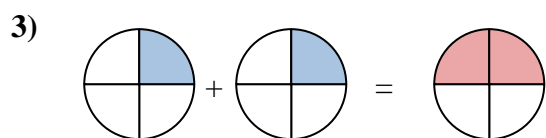
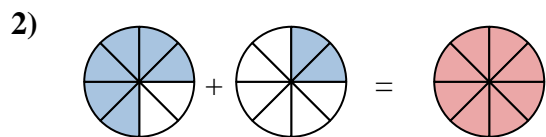
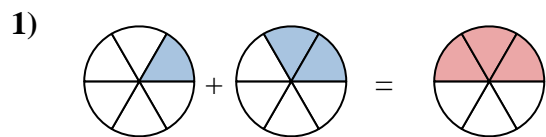
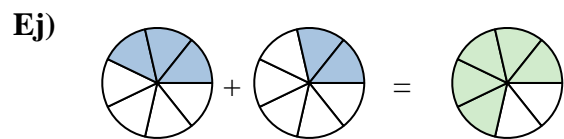
8. \_\_\_\_\_

9. \_\_\_\_\_

10. \_\_\_\_\_



Sombrea la fracción para resolver el problema.

**Respuestas**

Ej.	$\frac{3}{7}$	$\frac{2}{7}$	$\frac{5}{7}$
1.	$\frac{1}{6}$	$\frac{2}{6}$	$\frac{3}{6}$
2.	$\frac{6}{8}$	$\frac{2}{8}$	$\frac{8}{8}$
3.	$\frac{1}{4}$	$\frac{1}{4}$	$\frac{2}{4}$
4.	$\frac{3}{10}$	$\frac{3}{10}$	$\frac{6}{10}$
5.	$\frac{5}{8}$	$\frac{2}{8}$	$\frac{7}{8}$
6.	$\frac{4}{12}$	$\frac{6}{12}$	$\frac{10}{12}$
7.	$\frac{4}{8}$	$\frac{2}{8}$	$\frac{6}{8}$
8.	$\frac{8}{12}$	$\frac{1}{12}$	$\frac{9}{12}$
9.	$\frac{6}{10}$	$\frac{3}{10}$	$\frac{9}{10}$
10.	$\frac{2}{6}$	$\frac{2}{6}$	$\frac{4}{6}$